

SSC MTS Question Paper 2020 6th Oct (Shift 1)

Section : General English

1. Select the most appropriate ANTONYM of the given word.

EFFICIENT

- A. expert
- B. common
- C. idle
- D. clever

Ans. C

2. Select the most appropriate meaning of the given idiom.

Close to one's heart

- A. One who is being followed
- B. One who treats heart problems
- C. One who is very emotional
- D. Dear and important to oneself

Ans. D

3. Select the most appropriate one-word substitution for the given group of words.

A place for keeping birds

- A. Aviary
- B. Apiary
- C. Barn
- D. Shed

Ans. A

4. Select the most appropriate synonym of the given word.

DELICATE

- A. brisk
- B. robust
- C. frail
- D. Hearty

Ans. C

5. Identify the segment in the sentence which contains a grammatical error.

The farmer is cutting the corn which has ripen in the fields.

- A. in the fields
- B. which has ripen
- C. The farmer is
- D. cutting the corn

Ans. B

6. Select the INCORRECTLY spelt word.

- A. Poetry
- B. Symmetry
- C. Sultry
- D. Gentry

Ans. A

7. Select the most appropriate meaning of the given idiom. Go bonkers


- A. Become crazy
- B. Become wealthy
- C. Become selfish
- D. Become greedy

Ans. A

8. Identify the segment in the sentence which contains a grammatical error.

I paid the plumber for repair the pipes.

- A. for repair
- B. the pipes
- C. I paid



SSC Success Batch

A comprehensive 10 Months
Foundation Course (English Batch)

START FREE TRIAL

D. the plumber

Ans. A

9. Select the most appropriate word to fill in the blank.

The task has been _____ to the juniors.

A. assigned

B. attached

C. hired

D. Elected

Ans. A

10. Select the most appropriate option to substitute the underlined segment in the given sentence. If there is no need to substitute it, select 'No substitution required'.

The strong wind blow off all the candles.

A. No substitution required

B. blew out

C. blow up

D. blowing away

Ans, B

11. Select the most appropriate option to substitute the underlined segment in the given sentence. If there is no need to substitute it, select 'No substitution required.'

There are very little peoples in this world who are bold enough to defy social customs.

A. very few people

B. too much people

C. very much peoples

D. No substitution required

Ans. A

12. Select the most appropriate word to fill in the blank.

I visit my grandparents _____.

A. continuously

B. unevenly

C. regularly

D. Finally

Ans. C

13. Select the most appropriate one-word substitution for the given group of words.

A person who pretends to be someone else to deceive others

A. Actor

B. Imposter

C. Mentor

D. Gangster

Ans. B

14. Identify the segment in the sentence which contains a grammatical error.

The children jumped at joy when they saw the slides in the park.

A. when they saw


B. at joy

C. in the park

D. The children jumped

Ans. B

15. Select the most appropriate option to substitute the underlined segment in the given sentence. If there is no need to substitute it, select 'No substitution required'.



SSC Success Batch
A comprehensive 10 Months
Foundation Course (English Batch)

START FREE TRIAL

He got away from punishment as there was not enough evidence against him.

- A. was getting away from
- B. No substitution required
- C. gets away from
- D. got out with

Ans. B

16. Select the most appropriate synonym of the given word.

BAFFLE

- A. clarify
- B. perplex
- C. comfort
- D. Soothe

Ans. B

17. Select the most appropriate option to fill in the blank. This lesson is _____ than the previous one.

- A. easiest
- B. more easier
- C. much easier
- D. Easy

Ans. C

18. Select the most appropriate ANTONYM of the given word.

STABLE

- A. steady
- B. shaky
- C. stout
- D. Safe

Ans. B

19. Select the INCORRECTLY spelt word.

- A. Tourist
- B. Chemist
- C. Cyclist
- D. Flowerist

Ans. D

20. Select the most appropriate word to fill in the blank. _____ is the reason for this chaos?

- A. Why
- B. Whom
- C. What
- D. When

Ans. C

Comprehension:

In the following passage some words have been deleted. Fill in the blanks with the help of the alternatives given. Select the most appropriate option for each blank.


The judge, in a solemn manner, declared (1)_____ there was enough evidence to (2)_____ that Max had indeed (3)_____ his neighbour's cat. This was a (4)_____ crime and deserved an (5)_____ punishment.

Sub Question No : 21

21. Select the most appropriate option to fill in blank no. 1.

- A. that
- B. what
- C. so
- D. Which

Ans. A



SSC Success Batch
A comprehensive 10 Months
Foundation Course (English Batch)

START FREE TRIAL

Comprehension:

In the following passage some words have been deleted. Fill in the blanks with the help of the alternatives given. Select the most appropriate option for each blank.

The judge, in a solemn manner, declared (1)_____ there was enough evidence to (2)_____ that Max had indeed (3)_____ his neighbour's cat. This was a (4)_____ crime and deserved an (5)_____ punishment.

Sub Question No :

22. Select the most appropriate option to fill in blank no. 2.

- A. result
- B. test
- C. check
- D. Prove

Ans. D

Comprehension:

In the following passage some words have been deleted. Fill in the blanks with the help of the alternatives given. Select the most appropriate option for each blank.

The judge, in a solemn manner, declared (1)_____ there was enough evidence to (2)_____ that Max had indeed (3)_____ his neighbour's cat. This was a (4)_____ crime and deserved an (5)_____ punishment.

Sub Question No : 23

23. Select the most appropriate option to fill in blank no. 3.

- A. stolen
- B. stealing

- C. stole
- D. Steal

Ans. A

Comprehension:

In the following passage some words have been deleted. Fill in the blanks with the help of the alternatives given. Select the most appropriate option for each blank.

The judge, in a solemn manner, declared (1)_____ there was enough evidence to (2)_____ that Max had indeed (3)_____ his neighbour's cat. This was a (4)_____ crime and deserved an (5)_____ punishment.

Sub Question No :

24. Select the most appropriate option to fill in blank no. 4.


- A. stern
- B. serious
- C. sober
- D. Steady

Ans. B

Comprehension:

In the following passage some words have been deleted. Fill in the blanks with the help of the alternatives given. Select the most appropriate option for each blank. The judge, in a solemn manner, declared (1)_____ there was enough evidence to (2)_____ that Max had indeed (3)_____ his neighbour's cat. This was a (4)_____ crime and deserved an (5)_____ punishment.

Sub Question No : 25



SSC Success Batch

A comprehensive 10 Months
Foundation Course (English Batch)

START FREE TRIAL

25. Select the most appropriate option to fill in blank no. 5.

- A. invisible
- B. improper
- C. appropriate
- D. Anxious

Ans. C

Section : General Intelligence and Reasoning

1. Which number will replace the question mark (?) in the following series?

11, 13, 16, 26, 41, 67, 102, ?

- A. 251
- B. 215
- C. 152
- D. 125

Ans. C

2. Six students are sitting on a bench facing the interactive board in the classroom. A is sitting second to the right of B, while F is second to the right of E. If C is second right of A, then what is the sitting position of D in respect of F?

- A. Immediate left
- B. Second right
- C. Third right
- D. Second left

Ans. B

3. Select the correct alternative to indicate the sequential order of the following terms as they appear in a dictionary.

1. Dreamlike

2. Dreamer

3. Dreamy

4. Dreamland

5. Dreamtime

- A. 4 - 1 - 2 - 3 - 5
- B. 1 - 4 - 2 - 5 - 3
- C. 2 - 4 - 1 - 5 - 3
- D. 2 - 4 - 1 - 3 - 5

Ans. C

4. A paper is folded and cut as shown in the following figures. How will it appear when unfolded?




A.



B.



C.



SSC Success Batch
A comprehensive 10 Months
Foundation Course (English Batch)

START FREE TRIAL



D.



Ans. A

5. Select the correct mirror image of the given figure when the mirror is placed to the right side of the figure.

RKJQSB

A.

NSQKLR

B.

IRKQSN

C.

IRKQSN

D.

IRKQSN

Ans. B

6. Select the correct sequence of mathematical signs to replace the * signs so as to balance the given equation.

$$92 * 4 * 36 * 13 * 9 = 104$$

A. $\div - + \times$

B. $+ - \div \times$

C. $- \div \times +$

D. $\times + \div$

Ans. A

7. Select the option word that is related to the third word in the same way as the second word is related to the first word.

Tuesday : Saturday : : May :
_____.

A. September

B. April

C. October

D. August

Ans. A

8. If in a coding system STAMINA is coded as 74 and OCTOBER is coded as 75, then how will IMPOSING be coded in the same coding system?

A. 117

B. 99

C. 114

D. 102

Ans. B

9. Which number will replace the question mark (?) in the following number series?


4, 6, 9, 14, 23, 40, ?

A.. 72

B. 73

C. 71

D. 74



SSC Success Batch

A comprehensive 10 Months
Foundation Course (English Batch)

START FREE TRIAL

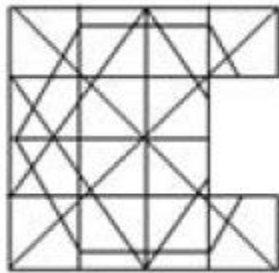
Ans. B

10. If - is interchanged with \div and + is interchanged with \times , then which of the following equations is correct?

- A. $32 \times 21 + 9 \div 184 - 8 = 198$
- B. $32 + 21 - 9 \times 184 \div 8 = 198$
- C. $32 \div 21 + 9 - 184 \times 8 = 198$
- D. $32 + 21 \times 9 - 184 \div 8 = 198$

Ans. A

11. Identify the option figure that completes the following pattern.



A.



B.



C.



D.



Ans. C

12. Select the Venn diagram that best illustrates the relationship between the following classes:

Playground, Stadium, Goalpost

A.



B.




C.



D.





SSC Success Batch

A comprehensive 10 Months
Foundation Course (English Batch)

START FREE TRIAL

Ans. B

13. In a row of 47 persons, X is 14th from the front while Y is 17th from the back. If they exchange their location, Y becomes 34th from the back, then what will be the position of X from the front?

- A. 31
- B. 32
- C. 30
- D. 29

Ans. A

14. Three statements are given, followed by four conclusions numbered I, II, III and IV. Assuming the statements to be true, even if they seem to be at variance with commonly known facts, decide which of the conclusions logically follow(s) from the statements.

Statements:

Some advocates are doctors.

Some doctors are players.

All players are engineers.

Conclusions:

I. Some players are doctors.

II. Some engineers are advocates.

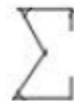
III. All advocates are engineers.

IV. Some engineers are doctors.

- A. Both conclusions I and II follow
- B. Both conclusions I and IV follow
- C. Both conclusions I and III follow
- D. Both conclusions II and IV follow

Ans. B

15. Identify the option in which following figure is embedded (rotation is NOT applicable).



A.




B.



C.



D.



SSC Success Batch

A comprehensive 10 Months
Foundation Course (English Batch)

START FREE TRIAL



Ans. B

16. Which number will replace the question mark (?) in the following number series?

168, 168, 84, 28, ?

- A. 4
- B. 7
- C. 12
- C. 14

Ans. B

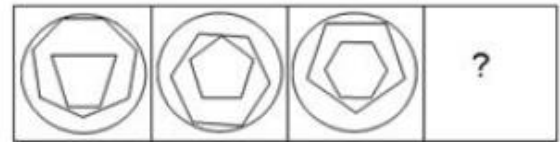
17. Select the option that is related to the third letter cluster in the same way as the second letter cluster is related to the first letter cluster.

CONCEPT : DDFOPQU : : NARROWS : _____.

- A. OBSSPXT
- B. BOPSSTX
- C. WSRRONA
- D. XTSP OBS

Ans. B

18. Select the option figure that will replace question mark (?) in the following figure series.



A.



B.



C.




D.



Ans. D

19. If in a coding system LEARNING is coded as 82463739 and MOBILE is coded as 510782, then how will IMAGINE be coded in the same coding system?



SSC Success Batch

A comprehensive 10 Months
Foundation Course (English Batch)

START FREE TRIAL

- A. 7549732
- B. 6548732
- C. 8317945
- D. 7206834

Ans. A

20. In a certain code language, if GLAMOUR is written as AGLMORU, then how will RUTTING be written in the same code language?

- A. GNURITT
- B. GINRTTU
- C. INGTTRU
- D. GNITTUR

Ans. B

21. Two statements are given, followed by two conclusions numbered I and II. Assuming the statements to be true, even if they seem to be at variance with commonly known acts, decide which of the conclusions logically follow(s) from the statements.

Statements:

All trees are plants.

Some plants are climbers.

Conclusions:

I. Some plants are trees.

II. Some trees are climbers.

- A. Neither conclusion I nor II follows.
- B. Only conclusion II follows.
- C. Both conclusions I and II follow.
- D. Only conclusion I follows.

Ans. D

22 Select the option in which the numbers are related in the same way as the numbers of the following set.

46 : 82 : 154

- A. 70 : 133 : 258
- B. 62 : 116 : 224
- C. 86 : 159 : 303
- D. 78 : 141 : 276

Ans. B

23. Which letter cluster will replace the question mark (?) in the following letter series?

TPM, IEB, XTQ, ?

- A. MIF
- B. MIE
- C. NJF
- D. NJG

Ans. A

24. In a certain code language, if IRONING is written as OWSQKOG, then how will SHERIFF be written in the same code language?

- A. HSREFIF
- B. YMKWLK
- C. YMIUKGF
- D. YNKXOLL

Ans. C


25. 'Truck' is related to 'Road' in the same way as 'Tram' is related to '_____'.
'_____'

- A. Rail
- B. Wheels
- C. Rope
- D. Air

Ans. A

Section : Numerical Aptitude

1. If certain sum at compound interest becomes 3 times in 4 years, then in



SSC Success Batch
A comprehensive 10 Months
Foundation Course (English Batch)

START FREE TRIAL

how many years will it become 9 times, at the same rate of interest?

- A. 6 years
- B. 9 years
- C. 10 years
- D. 8 years

Ans. D

2. a train covers a distance of 275 km in $2\frac{1}{2}$ hours with a uniform speed. The time taken to cover a distance of 440 km with the same speed is:

- A. $4\frac{1}{2}$ hours
- B. 6 hours
- C. 6 hours
- D. 4 hours

Ans. D

3. The cost prices of two articles are in the ratio 4 : 5. While selling these articles, the shopkeeper gains 10% on one article and 20% profit on the other article, and the difference in the selling price is Rs. 480. Find the total cost price of both the article.

- A. Rs. 3,000
- B. Rs. 2,700
- C. 2,500
- D. Rs. 2,800

Ans. B

4. A sum of Rs. 17,200 is lent out at simple interest in two parts for two years at 8% and 10% p.a., respectively. If the total interest received after two years is Rs. 3,008, then the money lent at 8% rate is:

- A. Rs. 9,000
- B. Rs. 9,600

C. Rs. 10,800

D. Rs. 12,800

Ans. C

5. The radii of the circular ends of a frustum of a cone are 20 cm and 13 cm and its height is 12 cm. What is the capacity (in litres) of the frustum (correct to one decimal place)? (Take $\pi = \frac{22}{7}$)

- A. 10.4
- B. 11.2
- C. 10.8
- D. 11.4

Ans. A

6. The perimeter of rectangular field is 386 m and the difference between its two adjacent sides is 95 m. The side of a square field, having the same area as that of the rectangle, is:

- A. 64 m
- B. 84 m
- C. 74 m
- D. 82 m

Ans. B


7. If the mean of $x + 1$, $x + 12$, $2x + 3$ and $3x + 5$ is 21, then the value of x is:

- A. 12
- B. 10
- C. 8
- D. 9

Ans. D

8. 14 men complete a work in 18 days. If 21 men are employed, then the time required to complete the same work will be:

- A. 14 days



SSC Success Batch
A comprehensive 10 Months
Foundation Course (English Batch)

START FREE TRIAL

B. 10 days

C. 15 days

D. 12 days

Ans. D

9. The value of

$$\frac{2 - \left(\frac{6}{7} \text{ of } 21 + 5.25\right)}{\frac{3}{4} \text{ of } (15.8 - 3.4) + 5 \times 2.39} \text{ is:}$$

A. $\frac{11}{5}$

B. -1

C. $\frac{17}{5}$

D. 1

Ans. B

10. Ramesh invested 30% more than Suresh invested 40% less than Arun, who invested Rs.8,000. The total amount invested by all of them together is:

A. Rs. 19,020

B. Rs. 18,020

C. Rs. 19,040

D. Rs. 19,080

11. A labourer was engaged for a certain number of days for Rs. 8,500, but due to his absence for some days he was paid Rs. 6,050 only. Find the number of days that he was absent.

A. 49

B. 45

C. 44

D. 42

Ans. 1

12. If the radius of a cylinder is decreased by 40% and the height is increased by 60% to form a new

cylinder, then the volume will be decreased by:

A. 41.5%

B. 32.4%

C. 40.5%

D. 42.4%

Ans. D

13. Three numbers are in the ratio 2 : 3 : 4. The sum of their squares is 2349. Find the average of these three numbers.

A. 27

B. 29

C. 24

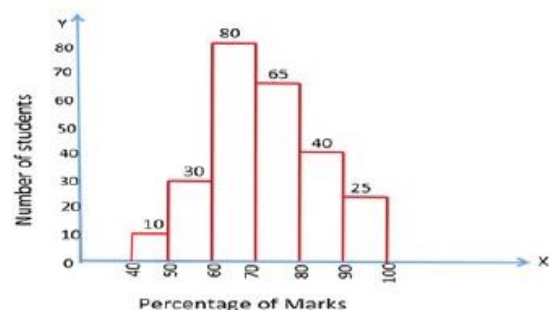
D. 25

Ans. A

14. Study the histogram and answer the question given below.


The given graph represents the percentage of marks scored by students by students in class X Board Examination in 2018 in a school.

Total number of students = 250



The difference between the percentage of students who scored less than 70% marks and the percentage of students who scored 80% and above is:

A. 25%



SSC Success Batch

A comprehensive 10 Months
Foundation Course (English Batch)

START FREE TRIAL

- B. 18%
- C. 24%
- D. 22%

Ans. D

15. 70 males and 100 females are working in a firm. During one mass recruitment drive an equal number of males and females are recruited and their ratio becomes 3 : 4. The total number of people working in the firm after recruitment is:

- A. 240
- B. 200
- C. 210
- D. 220

Ans. C

16. A reduction of 15% in the price of sugar enables Aruna Rai to buy 6 kg more for Rs. 272. The reduced price of sugar per kg is:

- A. Rs. 7.80
- B. Rs. 6
- C. Rs. 6.80
- D. 6.50

Ans. C

17. The speed of A is 20 km/h more than the speed of B. The time that A takes to travel a distance of 300 km is 2 hours less than the time that B takes to travel a distance of 240 km. What is the speed (in km/h) of A?

- A. 30
- B. 40
- C. 45
- D. 50

Ans. D

18. A is 120% of B and B is 65% of C. If the sum of A, B and C is $121\frac{1}{2}$, then the value of $2C - 4B + A$ is:

- A. 15
- B. 9
- C. 10
- D. 12

Ans. B

19. Between two consecutive years, my income is in the ratio 2 : 5 and expenses are in the ratio 4 : 7. If my income in the second year is Rs. 75,000 and my expenses in the first year are Rs. 20,000, then my total savings in the two years together are:

- A. Rs. 55,000
- B. Rs. 60,000
- C. Rs. 50,000
- D. Rs. 40,000

Ans. C


20. The average of eight consecutive numbers is 10.5. The largest number is:

- A. 14
- B. 15
- C. 18
- D. 16

Ans. A

21. A shopkeeper sold 25 articles in such a way that he gets a profit which is equal to the selling price of 5 articles. Find his profit percent?

- A. 20%
- B. 30%
- C. 25%
- D. 15%



SSC Success Batch
A comprehensive 10 Months
Foundation Course (English Batch)

START FREE TRIAL

Ans. C

22. If the width of the path around a square field is 4.5 m and the area of the path is 252 m, then the length of the side of the field is:

- A. 9.5 m
- B. 9 m
- C. 8 m
- D. 8.5 m

Ans. A

23. A can do a piece of work in 60 days. He works at it for 15 days, and then B alone finishes the remaining work in 30 days. In how many days can A and B working together finish the same work?

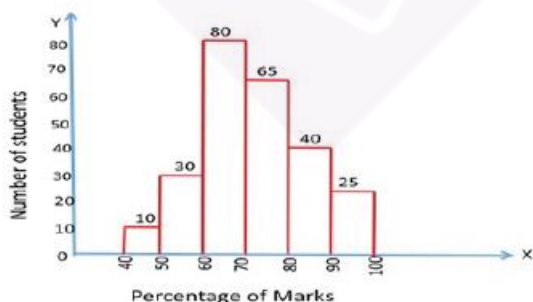
- A. 22 days
- B. 22 days
- C. 20 days
- D. 24 days

Ans. D

24. Study the histogram and answer the question given below.

The given graph represents the percentage of marks scored by students in class X Board Examination in 2018 in a school.

Total number of students = 250



The ratio of the number of students who scored marks less than 60% to

the number of students who scored marks 80% and above is:

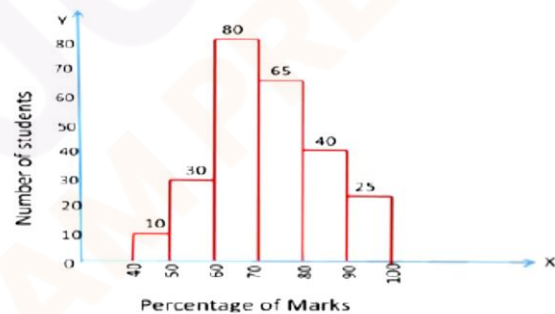
- A. 7 : 11
- B. 8 : 13
- C. 7 : 13
- D. 8 : 15

Ans. B

25. Study the histogram and answer the question given below.

The given graph represents the percentage of marks scored by students in class X Board Examination in 2018 in a school.

Total number of student = 250



The number of students who scored less than 60% marks is approximately what percentage less than the number of students who scored 70% and above?


- A. 68.35%
- B. 68%
- C. 69.23%
- D. 67.23%

Ans. C

Section : General Awareness

1_____ is a palace in Jaipur, built by Sawai Pratap Singh.

- A. Lallgarh Palace



SSC Success Batch

A comprehensive 10 Months
Foundation Course (English Batch)

START FREE TRIAL

- B. Umaid Bhavan
- C. Hawa Mahal
- D. Sajjangarh Palace

Ans. C

2. The river Indus was called _____ by the Iranians and the Greeks about 2500 years ago.

- A. Vitasta
- B. Karnali
- C. Vipasa
- D. Hindos

Ans. D

3. Which of the following fall under Phylum Cnidarian of the animal kingdom?

- A. Sea urchins
- B. Earthworms
- C. Snails
- D. Corals

Ans. D

4. Which Indian finance minister was India's delegate to the World Monetary Conference at Bretton Woods in 1944?

- A. KC Neogy
- 2. CD Deshmukh
- C. John Mathai
- D. RK Shanmukham Chetty

Ans. D

5. Which of the following is a book by former Prime Minister of India, Indira Gandhi?

- A. Discovery of India
- B. Wings of Fire

- C. My Experiments with Truth
- D. My Truth

Ans. D

6. Which of the following statements about tides is INCORRECT?

- A. High tides occur when the moon is in its first and last quarter.
- B. Low tides are also called neap tides.
- C. Tides are caused by the gravitational pull exerted by the sun and the moon on Earth's surface.
- D. Spring tides occur on full moon and new moon days.

Ans. A

7. 'Microliths' were _____ used by early humans.

- A. coins
- B. stone tools
- C. clothes
- D. earthen pots

Ans. B


8. Starch and sugar in our food are forms of _____.

- A. proteins
- B. fats
- C. vitamins
- D. Carbohydrates

Ans. D

9. _____ is a dance which combines speech, mime and pure dance.

- A. Kathakali
- B. Bharatanatyam
- C. Mohiniattam



SSC Success Batch
A comprehensive 10 Months
Foundation Course (English Batch)

START FREE TRIAL

D.. Kuchipudi

Ans. D

10. ब्रायोफाइट्स के बारे में निम्नलिखित में से कौन सा कथन सत्य नहीं है?

A. इन्हें पादप जगत के उभयचर कहा जाता है।

B. पादप शरीर के एक हिस्से से दूसरे हिस्से में जल और अन्य पदार्थों के प्रवाह के लिए इन में एक विशेष उत्तक की उपस्थिति पाई जाती है।

C. इनका शरीर आमतौर पर तने और पत्ती जैसी संरचनाओं का रूप लेकर विभेदित होता है।

D. मॉस (फुनारिया) और मर्चेंटिया, ब्रायोफाइट्स के उदाहरण हैं।

Ans. B

11. Which of the following badminton players has NEVER won an Arjuna Award?

A. PV Sindhu

B. Neha Pandit

C. Parul Parmar

D. Ashwini Ponnappa

Ans. 2

12. Which of the following persons was NOT a part of the Committee of Administrators(CoA) appointed by the Supreme Court of India in 2017, to oversee the implementation of the Lodha reforms in the Board of Control for Cricket in India (BCCI)?

A. Vinod Rai

B. Mahim Verma

C. Vikram Limaye

D. Ramachandra Guha

Ans. B

13. As per a report of the Ministry of Statistics and Programme Implementation (Government of India), India recorded an Infant Mortality Rate (IMR) of _____ to 1000live births in the year 2016.

A. 68

B. 55

C. 34

D. 47

Ans. C

14. Which of the following Indian states was one of the worst affected by the tsunami on 26th December 2004?

A. Bihar

B. Maharashtra

C. Tamil Nadu

D. Uttar Pradesh

Ans. C

15. Mechanical energy is the sum of potential energy and _____ energy.

A. kinetic

B. heat

C. electrical

D. Chemical

16. The Indian Super League (ISL) is a _____ championship.


A. cricket

B. kabaddi

C. kho-kho

D. Football

Ans. D



SSC Success Batch
A comprehensive 10 Months
Foundation Course (English Batch)

START FREE TRIAL

17. Article _____ of the Constitution of India deals with freedom to manage religious affairs.

- A. 21
- B. 26
- C. 51
- D. 56

Ans. B

18. A wooden bat can be classified as a/an _____ object.

- A. translucent
- B. opaque
- C. lustrous
- D. Transparent

Ans. B

19. Which Part of the Constitution of India deals with citizenship?

- A. Part 6
- B. Part 3
- C. Part 2

D. Part 5

Ans. C

20. We celebrate 'Samvidhan Divas' on _____ every year, to commemorate the adoption of the Constitution of India.

- A. 26th January
- B. 26th November
- C. 15th September
- D. 15th August

Ans. B

21. Which of the following books has been written by Munshi Premchand?

- A. Gitanjali
- B. Gora
- C. Chokher Bali
- D. Nirmala

Ans. D

22. Which of the following is a tributary of the river Ganga?

- A. Sabarmati
- B. Mahi
- C. Ghaghra
- D. Bhima

Ans. C

23. To which of the following sectors of the economy do Basel III norms belong?

- A. Banking
- B. Capital market
- C. Automobile
- D. Aviation


Ans. A

24. The tenth day after _____ Navratri is celebrated as Dussehra or Vijayadashami.

- A. Sharad
- B. Ashadha Gupta
- C. Chaitra
- D. Magha Gupta

25. Rulers of mahajanapadas in ancient India collected a tax called 'Bhaga' from the _____ in their region.

- A. farmers
- B. herders
- C. crafts persons




SSC Success Batch
A comprehensive 10 Months
Foundation Course (English Batch)

START FREE TRIAL

D. hunters and gatherers

Ans. A





SSC Success Batch
A comprehensive 10 Months
Foundation Course (English Batch)

START FREE TRIAL

Buy Test Series

Unlock All 650+ Mock Tests for SSC & Railway

- Unlimited Access
- All Exams covered
- Designed by Experts
- Performance Analysis