

SSC GD Question Paper 16 November 2021 2nd Shift in English



	www.exammix.com
Exam Date	16/11/2021
Exam Time :	12:30 PM - 2:00 PM
Subject	Constable GD 2021

Section : **Part A General Intelligence and Reasoning**

Q.1 Four letter-clusters have been given, out of which three are alike in some manner and one is different. Select the letter-cluster that is different.

- Ans
- ☒ 1. FDB
 - ☒ 2. OMK
 - ☒ 3. JHF
 - ☒ 4. USP

Question ID : **65497829500**
 Status : **Answered**
 Chosen Option : **4**

Q.2 In a certain code language, 'MANGO' is written as 'QERKS' and 'APPLE' is written as 'ETTPI'. How will 'GUAVA' be written in that language?

- Ans
- ☒ 1. KYFXF
 - ☒ 2. KYGZE
 - ☒ 3. KYEZE
 - ☒ 4. KXEZE

Question ID : **65497829482**
 Status : **Answered**
 Chosen Option : **3**

Q.3 In a certain code language, GAME is written as TUZANOVW, and CAR is written as XYZAIJ. How will POST be written in that language?

- Ans
- ☒ 1. OQNPRTSV
 - ☒ 2. QRPQTUUV
 - ☒ 3. KLLMHIGH
 - ☒ 4. KLMNJKGH

Question ID : **65497829505**
 Status : **Answered**
 Chosen Option : **3**

Q.4 Select the option that is related to the third number in the same way as the second number is related to the first number.

20 : 480 :: 25 : ?

- Ans ☒ 1. 700
☒ 2. 725
☒ 3. 655
☒ 4. 625

Question ID : 65497829488

Status : Answered

Chosen Option : 2

Q.5 Select the option that is related to the third term in the same way as the second term is related to the first term.

ZYGOTE : ZYTOGE :: SEQUENCE : ?

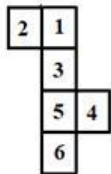
- Ans ☒ 1. USQNEEEC
☒ 2. USQENCEE
☒ 3. SUQNEEEC
☒ 4. USNQEEEC

Question ID : 65497829504

Status : Marked For Review

Chosen Option : 2

Q.6 Select the dice that can be formed by folding the given sheet along the lines.




- Ans ☒ 1. Only B and D
☒ 2. Only B, C and D
☒ 3. Only B
☒ 4. Only A and C

Question ID : 65497829490

Status : Answered

Chosen Option : 2



Q.7 Aditi is the daughter of Sanket. Vritti is the daughter of Ankit. Kriti is the mother of Mahi. Neeta is Sanket's wife. Neeta is the mother-in-law of Vritti's mother Kriti. Which of the following statements is NOT correct?

- Ans**
- ☒ 1. Ankit is the father of Mahi.
 - ☒ 2. Vritti is the sister of Mahi.
 - ☒ 3. Aditi is the daughter of Neeta.
 - ☒ 4. Kriti is the daughter of Sanket.

Question ID : 65497829506

Status : Answered

Chosen Option : 4

Q.8 If 'A' denotes 'addition', 'B' denotes 'multiplication', 'C' denotes 'subtraction', and 'D' denotes 'division', then what will be the value of the following expression?

100 D (1 B 4) A 2 B (13 A 11) C 3 B (17 C 12)

- Ans**
- ☒ 1. 52
 - ☒ 2. 58
 - ☒ 3. 49
 - ☒ 4. 60

Question ID : 65497829489

Status : Answered

Chosen Option : 2

Q.9 Select the Venn diagram that best represents the relationship between the following classes.

School, Teacher, Employee


Ans

- ☒ 1.
- ☒ 2.
- ☒ 3.
- ☒ 4.

Question ID : 65497829499

Status : Answered

Chosen Option : 1



SSC Success Batch
A comprehensive 10 Months
Foundation Course (English Batch)

START FREE TRIAL

Q.10 Select the number from among the given options that can replace the question mark (?) in the following series.

5, 9, 18, 34, ?, 95

- Ans
- ☒ 1. 65
 - ☒ 2. 69
 - ☒ 3. 63
 - ☒ 4. 59

Question ID : 65497829502

Status : Answered

Chosen Option : 4

Q.11 Four number triads have been given, out of which three are alike in some manner and one is different. Select the number triad that is different.

- Ans
- ☒ 1. (46, 65, 82)
 - ☒ 2. (54, 73, 90)
 - ☒ 3. (21, 40, 57)
 - ☒ 4. (39, 48, 75)

Question ID : 65497829484

Status : Answered

Chosen Option : 4

Q.12 Select the figure from among the given options that can replace the question mark (?) in the following series.




Ans

- ☒ 1.
- ☒ 2.
- ☒ 3.
- ☒ 4.

Question ID : 65497829495

Status : Answered

Chosen Option : 4



Q.13 Select the correct option that indicates the arrangement of the given words in the order in which they appear in an English dictionary.

1. Dermatitis
2. Desistance
3. Derogation
4. Descendant
5. Dereliction

Ans ☒ 1. 5, 4, 1, 3, 2
☒ 2. 5, 1, 3, 2, 4
☒ 3. 5, 2, 1, 3, 4
☒ 4. 5, 1, 3, 4, 2

Question ID : 65497829492

Status : Answered

Chosen Option : 4

Q.14 Select the combination of letters that when sequentially placed in the blanks of the given series will complete the series.

A _ _ B _ _ A B _ C A _ B B C

Ans ☒ 1. B, C, A, A, A, B
☒ 2. B, A, B, A, C, B
☒ 3. A, B, C, A, B, A
☒ 4. B, B, C, C, A, B

Question ID : 65497829493

Status : Answered

Chosen Option : 3

Q.15 O, P Q, R, S, T and U are sitting in a row facing north. U is sitting to the immediate right of T. Q is sitting in between R and O. P, who is on the extreme right, is sitting to the immediate right of O. S is sitting to the immediate left of R. Who is sitting in the middle of the row?

Ans ☒ 1. S
☒ 2. R
☒ 3. T
☒ 4. Q

Question ID : 65497829498

Status : Answered

Chosen Option : 2

Q.16 Read the given statements and conclusions carefully. Assuming that the information given in the statements is true, even if it appears to be at variance with commonly known facts, decide which of the given conclusions logically follow(s) from the statements.

Statements:

Some cats are animals.
All animals are plants.

Conclusions:

- I. All cats are plants.
- II. Some plants are cats.
- III. Some plants are animals.
- IV. All animals are cats.

- Ans
- ☒ 1. Only conclusion I follows
 - ☒ 2. All the conclusions follow
 - ☒ 3. Only conclusions I, II and III follow
 - ☒ 4. Only conclusions II and III follow

Question ID : 65497829483

Status : Answered

Chosen Option : 4

Q.17 Six friends are sitting in a straight line. E is 4th from the right. E is between B and D. A is adjacent to B. D is adjacent to C. D is between E and C. F is adjacent to C. Who is sitting between F and D?

- Ans
- ☒ 1. A
 - ☒ 2. E
 - ☒ 3. C
 - ☒ 4. B

Question ID : 65497829487

Status : Answered

Chosen Option : 3

Q.18 Select the number from among the given options that can replace the question mark (?) in the following series.

153, 149, 143, 135, ?

- Ans
- ☒ 1. 131
 - ☒ 2. 125
 - ☒ 3. 129
 - ☒ 4. 127

Question ID : 65497829494

Status : Answered

Chosen Option : 2


Q.19 If the diagonal of a square is increased by 4 cm, its area increases by 56 cm^2 . Find the ratio of the new area of the square to the initial area of the square.

- Ans
- ☒ 1. 16 : 9
 - ☒ 2. 13 : 8
 - ☒ 3. 18 : 11
 - ☒ 4. 12 : 5

Question ID : 65497829485

Status : Not Answered

Chosen Option : --



SSC Success Batch
A comprehensive 10 Months
Foundation Course (English Batch)

START FREE TRIAL

Q.20 Select the letter-cluster from among the given options that can replace the question mark (?) in the following series.

IOM, NTR, SYW, ?

Ans ☒ 1. XDB

☒ 2. JPN

☒ 3. NSX

☒ 4. OTZ

Question ID : 65497829496

Status : Answered

Chosen Option : 1

Q.21 Select the correct mirror image of the given combination when the mirror is placed at 'PQ' as shown.

MERCHANT 

Ans ☒ 1. TИAHCЯEM

☒ 2. MEKCHVIL

☒ 3. TИCHЯEM

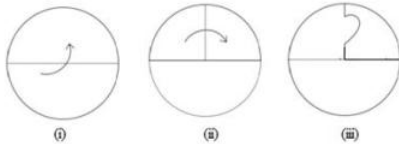
☒ 4. MEKCHVIL

Question ID : 65497829503

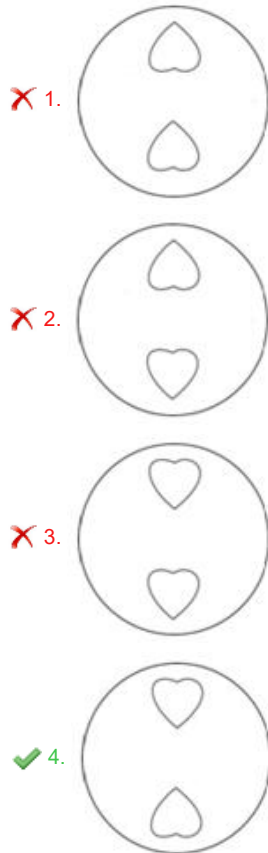
Status : Answered

Chosen Option : 1

Q.22 The sequence of folding a piece of paper and the manner in which the folded paper has been cut is shown in the following figures. How would this paper look when unfolded?



Ans



Question ID : 65497829486

Status : Answered

Chosen Option : 4


Q.23 In a certain code language, 'PHENYL' is coded as '9-11-17-8-5-13' and 'COLONY' is coded as '6-12-13-12-8-5'. How will 'COLONEL' be coded in that language?

- Ans**
- ☒ 1. 6-12-12-13-8-17-13
 - ☒ 2. 6-12-13-12-8-17-13
 - ☒ 3. 6-12-12-13-8-11-13
 - ☒ 4. 6-17-12-13-8-13-11

Question ID : 65497829501

Status : Answered

Chosen Option : 2



SSC Success Batch
A comprehensive 10 Months
Foundation Course (English Batch)

START FREE TRIAL

Q.24 Select the option in which the given figure is embedded (rotation is NOT allowed).

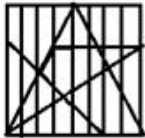


Ans

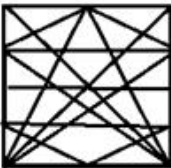
✗ 1.



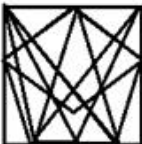
✓ 2.



✗ 3.



✗ 4.



Question ID : 65497829491

Status : Answered

Chosen Option : 3

Q.25 'Experimenter' is related to 'Lab' in the same way as 'Chef' is related to '_____'.


Ans

✗ 1. Cooking

✗ 2. Food

✗ 3. Dishes

✓ 4. Kitchen

Question ID : 65497829497

Status : Answered

Chosen Option : 4

Section : Part B General Knowledge and General Awareness

Q.1 _____ launched the Fit India Mobile App at an event at Major Dhyan Chand National Stadium, New Delhi in August 2021.

Ans

✓ 1. Anurag Singh Thakur

✗ 2. Nisith Pramanik

✗ 3. Ravi Mittal

✗ 4. Usha Sharma

Question ID : 65497829530

Status : Answered

Chosen Option : 1

Q.2 The acceleration of an object is said to be _____ when an object travels in a straight line and its velocity increases or decreases by equal amount in equal intervals of time.

- Ans**
- ☒ 1. negative
 - ☒ 2. non-uniform
 - ☒ 3. uniform
 - ☒ 4. positive

Question ID : **65497829516**
Status : **Answered**
Chosen Option : **3**

Q.3 Who was appointed as the State Election Commissioner of Jammu and Kashmir on October 30, 2020?

- Ans**
- ☒ 1. Kewal Kumar Sharma
 - ☒ 2. V Bhaskaran
 - ☒ 3. Shatrunjay Kumar Singh
 - ☒ 4. Manoj Kumar

Question ID : **65497829520**
Status : **Not Answered**
Chosen Option : **--**

Q.4 Which of the following animals breathes through its skin?

- Ans**
- ☒ 1. Frog
 - ☒ 2. Rabbit
 - ☒ 3. Peacock
 - ☒ 4. Deer

Question ID : **65497829514**
Status : **Answered**
Chosen Option : **1**

Q.5 Which of the following is the most reactive metal?


- Ans**
- ☒ 1. Silver
 - ☒ 2. Aluminium
 - ☒ 3. Iron
 - ☒ 4. Potassium

Question ID : **65497829513**
Status : **Answered**
Chosen Option : **4**

Q.6 Which non-metal among the following is poly-atomic?

- Ans**
- ☒ 1. Sulphur
 - ☒ 2. Argon
 - ☒ 3. Oxygen
 - ☒ 4. Helium

Question ID : **65497829525**
Status : **Answered**
Chosen Option : **1**



Q.7 Who among the following was appointed as the first Municipal Commissioner of Bombay in 1865?

- Ans**
- ☒ 1. William Hunter
 - ☒ 2. Charles Atkinson
 - ☒ 3. H Fowler
 - ☒ 4. Arthur Crawford

Question ID : **65497829510**
Status : **Not Answered**
Chosen Option : --

Q.8 'La Liga' title is associated with _____.

- Ans**
- ☒ 1. tennis
 - ☒ 2. football
 - ☒ 3. cricket
 - ☒ 4. sprinting

Question ID : **65497829508**
Status : **Answered**
Chosen Option : 2

Q.9 In which of the following states is the Bhoramdeo temple located, where each year in the last week of March 'Bhoramdeo Mahotsav' is celebrated?

- Ans**
- ☒ 1. West Bengal
 - ☒ 2. Karnataka
 - ☒ 3. Tamil Nadu
 - ☒ 4. Chhattisgarh

Question ID : **65497829512**
Status : **Answered**
Chosen Option : 1

Q.10 Who became the first Indian Air Force pilot to perform a wingsuit skydive jump? S/he achieved this feat in July 2019.

- Ans**
- ☒ 1. Shital Mahajan Rane
 - ☒ 2. Archana Sardana
 - ☒ 3. Rachel Thomas
 - ☒ 4. Tarun Chaudhri

Question ID : **65497829518**
Status : **Not Answered**
Chosen Option : --

Q.11 _____ was the son of a Chief of the Jnatrika (or Jhatrika) Kshatriya clan.

- Ans**
- ☒ 1. Gautama Buddha
 - ☒ 2. Rishabhanath
 - ☒ 3. Vardhamana Mahavira
 - ☒ 4. Parshvanath

Question ID : **65497829527**
Status : **Not Answered**
Chosen Option : --

Q.12 _____ was the residence of the Mughal emperors of India for nearly 200 years until 1857.

- Ans ☒ 1. Jehangir Mahal
☒ 2. Red Fort
☒ 3. Agra Fort
☒ 4. Pari Mahal

Question ID : 65497829521
 Status : Answered
 Chosen Option : 3

Q.13 Which of the following states won the 'Best Tableau' award at the 71st Republic Day parade in January 2020?

- Ans ☒ 1. Assam
☒ 2. Goa
☒ 3. Odisha
☒ 4. Uttar Pradesh

Question ID : 65497829523
 Status : Answered
 Chosen Option : 4

Q.14 The Uttar Pradesh cabinet approved a proposal to name a zoological garden at _____ after the freedom fighter and revolutionary Ashfaqullah Khan.

- Ans ☒ 1. Gorakhpur
☒ 2. Faizabad
☒ 3. Shahjahanpur
☒ 4. Ghaziabad

Question ID : 65497829517
 Status : Answered
 Chosen Option : 1

Q.15 Which of the following statements about the Mahanadi river is INCORRECT?

- Ans ☒ 1. It rises in the highlands of Chhattisgarh.
☒ 2. It drains into the Arabian Sea.
☒ 3. A part of its river basin lies in Maharashtra.
☒ 4. It is about 860 km long.

Question ID : 65497829522
 Status : Answered
 Chosen Option : 2

Q.16 Who is the author of the book 'Courts of India: Past to Present'?

- Ans ☒ 1. Shashi Tharoor
☒ 2. Satyarth Nayak
☒ 3. Jayanta Kalita
☒ 4. Ranjan Gogoi

Question ID : 65497829515
 Status : Answered
 Chosen Option : 4

Q.17 The Government of India approved the Ayushman Bharat Pradhan Mantri Jan Arogya Yojana (AB-PM-JAY) in the year _____.

- Ans** ☒ 1. 2018
☒ 2. 2014
☒ 3. 2019
☒ 4. 2015

Question ID : **65497829531**
 Status : **Answered**
 Chosen Option : **3**

Q.18 The money value of all the final goods and services produced within the country during a particular year is called _____.

- Ans** ☒ 1. per capita income
☒ 2. net Domestic Product
☒ 3. national Income
☒ 4. gross Domestic Product

Question ID : **65497829511**
 Status : **Answered**
 Chosen Option : **4**

Q.19 Which of the following options gives the correct chronological order of rulers of the Mauryan Empire?

- Ans** ☒ 1. Brihadratha - Chandragupta - Bindusara - Ashoka
☒ 2. Ashoka - Brihadratha - Chandragupta - Bindusara
☒ 3. Chandragupta - Bindusara - Ashoka - Brihadratha
☒ 4. Bindusara - Chandragupta - Ashoka - Brihadratha

Question ID : **65497829528**
 Status : **Answered**
 Chosen Option : **3**

Q.20 Which of the following is NOT a fundamental right under the 44th Amendment Act, 1978 of Indian constitution?


- Ans** ☒ 1. Right to property
☒ 2. Right to equality
☒ 3. Right against exploitation
☒ 4. Right to religion

Question ID : **65497829519**
 Status : **Answered**
 Chosen Option : **1**

Q.21 Which of the following countries hosted the 13th edition of the 2020 ICC Under 19 Cricket World Cup?

- Ans** ☒ 1. England
☒ 2. South Africa
☒ 3. Australia
☒ 4. India

Question ID : **65497829526**
 Status : **Answered**
 Chosen Option : **2**



Q.22 In which state is the Hogenakkal Falls located?

- Ans ☒ 1. Andhra Pradesh
☒ 2. Kerala
☒ 3. Maharashtra
☒ 4. Tamil Nadu

Question ID : 65497829507
Status : Not Answered
Chosen Option : --

Q.23 The Life Insurance Corporation of India Act was passed by the Parliament in the year _____.

- Ans ☒ 1. 1956
☒ 2. 1948
☒ 3. 1971
☒ 4. 1965

Question ID : 65497829529
Status : Not Answered
Chosen Option : --

Q.24 Which of the following is a biometric enabled digital service for pensioners launched by the Government of India?

- Ans ☒ 1. Pradhan Mantri Jeevan Jyoti Beema Yojna
☒ 2. Pradhan Mantri Mudra Yojna
☒ 3. Pradhan Mantri Jan Dhan Yojna
☒ 4. Jeevan Pramaan

Question ID : 65497829509
Status : Answered
Chosen Option : 4

Q.25 Tvesa Malik is an Indian _____ player.

- Ans ☒ 1. volleyball
☒ 2. golf
☒ 3. chess
☒ 4. basketball

Question ID : 65497829524
Status : Not Answered
Chosen Option : --

Section : Part C Elementary Mathematics

Q.1 The value of $42 \div 9$ of $6 - [64 \div 48 \times 3 - 15 \div 8 \times (11 - 17) \div 9] \div 14$ is:

- Ans
- ☒ 1. $\frac{19}{36}$
 - ☒ 2. $\frac{7}{18}$
 - ☒ 3. $\frac{29}{72}$
 - ☒ 4. $\frac{5}{12}$

Question ID : 65497829551

Status : Not Answered

Chosen Option : --

Q.2 A can do $\frac{2}{5}$ of a work in 6 days and B can do 30% of the same work in 3 days. They worked together for 4 days. The remaining work was completed by C alone in 6 days. B and C together can complete 70% of the original work in:

- Ans
- ☒ 1. $5\frac{1}{2}$ days
 - ☒ 2. 4 days
 - ☒ 3. 5 days
 - ☒ 4. $4\frac{1}{2}$ days

Question ID : 65497829553

Status : Answered

Chosen Option : 4

Q.3 The amount of a certain sum in 3 years at simple interest at $x\%$ p.a. is ₹5,472 and the amount of the same sum in $7\frac{1}{2}$ years at the same rate, at simple interest is ₹6,930. The value of x is:

- Ans
- ☒ 1. 7.2
 - ☒ 2. 8.5
 - ☒ 3. 8
 - ☒ 4. 6.5

Question ID : 65497829555

Status : Not Answered

Chosen Option : --


Q.4 There are two sections A and B of a class, consisting of 38 and 42 students, respectively. If the average weight of the students of section A is 55 kg and that of section B is 32 kg, find the average weight of all the students in the class.

- Ans
- ☒ 1. 42 kg
 - ☒ 2. 42.925 kg
 - ☒ 3. 44.925 kg
 - ☒ 4. 40.925 kg

Question ID : 65497829537

Status : Answered

Chosen Option : 2



Q.5 A dealer sold an article at a loss of 4%. Had he sold it for ₹120 more, he would have gained 8%. To gain 11%, he should sell the article for?

- Ans**
- ☒ 1. ₹1,110
 - ☐ 2. ₹1,200
 - ☐ 3. ₹1,320
 - ☐ 4. ₹1,210

Question ID : **65497829549**
Status : **Answered**
Chosen Option : 1

Q.6 A sum fetched a simple interest of ₹3,040 at the rate of 8 % p.a. in 5 years. What is the sum?

- Ans**
- ☐ 1. ₹8,600
 - ☒ 2. ₹7,600
 - ☐ 3. ₹7,700
 - ☐ 4. ₹6,600

Question ID : **65497829539**
Status : **Answered**
Chosen Option : 2

Q.7 The greatest number that on dividing 2675 and 2320 leaves the remainders 5 and 6, respectively, is:


- Ans**
- ☐ 1. 168
 - ☐ 2. 170
 - ☐ 3. 187
 - ☒ 4. 178

Question ID : **65497829536**
Status : **Answered**
Chosen Option : 4

Q.8 Speed of an aircraft is 120 km/min. This speed in m/sec is:

- Ans**
- ☐ 1. 120000
 - ☐ 2. 12000
 - ☐ 3. 1200
 - ☒ 4. 2000

Question ID : **65497829543**
Status : **Answered**
Chosen Option : 4



Q.9 A and B can complete a piece of work in 120 days, B and C can complete it in 150 days, and A and C can complete it in 200 days. In how many days can B alone complete two-fifths of the same work?

- Ans**
- ☒ 1. 200
 - ☒ 2. 100
 - ☒ 3. 80
 - ☒ 4. 175

Question ID : 65497829547

Status : Answered

Chosen Option : 3

Q.10 If the sides of a triangle measure 21 cm, 35 cm and 28 cm, what is the measure of its in radius? (in cm)

- Ans**
- ☒ 1. 8 cm
 - ☒ 2. 7 cm
 - ☒ 3. 21 cm
 - ☒ 4. 9 cm

Question ID : 65497829541

Status : Not Answered

Chosen Option : --

Q.11 After giving a discount of 20% on the marked price of an article, it is sold for ₹120. Had the discount not been given, the profit would have been 20%. What is the cost price of the article?

- Ans**
- ☒ 1. ₹120
 - ☒ 2. ₹130
 - ☒ 3. ₹100
 - ☒ 4. ₹125

Question ID : 65497829550

Status : Answered

Chosen Option : 4


Q.12 A discount of 20% on the price of an article is the same as a discount of 25% on the price of another article. The prices of the two articles will be, respectively:

- Ans**
- ☒ 1. ₹40 and ₹50
 - ☒ 2. ₹60 and ₹50
 - ☒ 3. ₹50 and ₹40
 - ☒ 4. ₹50 and ₹60

Question ID : 65497829545

Status : Answered

Chosen Option : 3



Q.13 The sides of a triangular park are 96 m, 110 m and 146 m. Its area is equal to the area of a field in the shape of a rhombus, one of whose diagonals is 60 m. The length (in m) of its other diagonal is:

- Ans**
- ☒ 1. 176
 - ☐ 2. 132
 - ☐ 3. 218
 - ☐ 4. 88

Question ID : **65497829556**
Status : **Not Answered**
Chosen Option : --

Q.14 What is the third proportional to 9 and 36?

- Ans**
- ☐ 1. 72
 - ☐ 2. 288
 - ☒ 3. 144
 - ☐ 4. 122

Question ID : **65497829540**
Status : **Answered**
Chosen Option : 3

Q.15 Solve the following:
 $523 + 523 \times 523 \div 523$

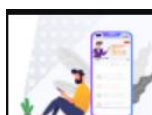
- Ans**
- ☐ 1. 1005
 - ☐ 2. 1235
 - ☐ 3. 1542
 - ☒ 4. 1046

Question ID : **65497829542**
Status : **Answered**
Chosen Option : 4

Q.16 A shopkeeper has some toys. He sells two-third of the toys at a profit of 35% and the remaining toys at 10% loss. What is his overall percentage of profit?

- Ans**
- ☐ 1. 16%
 - ☒ 2. 20%
 - ☐ 3. 18%
 - ☐ 4. 25%

Question ID : **65497829552**
Status : **Answered**
Chosen Option : 2



Q.17 Two trains start from places A and B, respectively, and travel towards each other at the speeds of 60 km/h and 50 km/h, respectively. By the time they meet, the faster train has travelled 110 km more than the slower train. What is the distance between A and B?

- Ans**
- ☒ 1. 1100 km
 - ☒ 2. 1200 km
 - ☒ 3. 1150 km
 - ☒ 4. 1210 km

Question ID : 65497829548

Status : Answered

Chosen Option : 4

Q.18 The ratio of two numbers is 9 : 5. If 8 is added to the larger number and 4 is subtracted from the smaller number, the greater number becomes twice the smaller number. The larger number is:

- Ans**
- ☒ 1. 110
 - ☒ 2. 104
 - ☒ 3. 144
 - ☒ 4. 114

Question ID : 65497829538

Status : Answered

Chosen Option : 3

Q.19 Vignesh spends 42% of his monthly salary on food, 16% on house rent, 11% on entertainment and 7% on conveyance. But due to some family function, he has to borrow ₹12,000 from a money lender to meet the expenses of ₹18,000. What is his monthly salary?

- Ans**
- ☒ 1. ₹20,000
 - ☒ 2. ₹24,000
 - ☒ 3. ₹30,000
 - ☒ 4. ₹25,000

Question ID : 65497829535

Status : Answered

Chosen Option : 4


Q.20 The average of 4, 6, 8, 12 and x is 7 and the average of x , 9, 13, 15 and y is 9. What is the value of $2x - 3y$?

- Ans**
- ☒ 1. 5
 - ☒ 2. 3
 - ☒ 3. 19
 - ☒ 4. 1

Question ID : 65497829544

Status : Answered

Chosen Option : 4



Q.21 If the compound interest on a certain sum of money for two years at 9% p.a. is ₹3,762, then the sum is:

- Ans**
- ✓ 1. ₹20,000
 - ✗ 2. ₹18,000
 - ✗ 3. ₹25,000
 - ✗ 4. ₹24,000

Question ID : 65497829533

Status : Answered

Chosen Option : 1

Q.22 The ratio of the ages of A, B and C, 5 years ago, was 4 : 5 : 7. The sum of their present ages is 135 years. What will be the sum of the ages (in years) of B and C, 3 years from now?

- Ans**
- ✗ 1. 100
 - ✗ 2. 96
 - ✓ 3. 106
 - ✗ 4. 112

Question ID : 65497829554

Status : Answered

Chosen Option : 2

Q.23 Three numbers are in the ratio 4 : 9 : 13 and their LCM is 2340. Their HCF is:

- Ans**
- ✗ 1. 7
 - ✗ 2. 3
 - ✗ 3. 4
 - ✓ 4. 5

Question ID : 65497829534

Status : Answered

Chosen Option : 4

Q.24 A man sells two articles at ₹9,180 each. He gains 8% on one article and loses 15% on the other. His overall profit or loss is:

- Ans**
- ✗ 1. Profit ₹840
 - ✗ 2. Loss ₹840
 - ✓ 3. Loss ₹940
 - ✗ 4. Profit ₹940

Question ID : 65497829532

Status : Not Answered

Chosen Option : --


Q.25 The price of a car increased by 5% while its sales decreased by 16%. What is the percentage change in the total revenue?

- Ans**
- ✗ 1. 5% decrease
 - ✗ 2. 9% increase
 - ✗ 3. 9% decrease
 - ✓ 4. 5% increase

Question ID : 65497829546

Status : Not Answered

Chosen Option : --



SSC Success Batch
A comprehensive 10 Months
Foundation Course (English Batch)

START FREE TRIAL

Section : Part D English

Q.1 Select the most appropriate meaning of the given idiom.

To be on the same page

- Ans
- ☒ 1. To be published together
 - ☒ 2. To read a book together
 - ☒ 3. To understand what the other says
 - ☒ 4. To agree on something

Question ID : 65497829571
Status : Answered
Chosen Option : 3

Q.2 Select the option that can be used as a one-word substitute for the given group of words.

One who collects coins

- Ans
- ☒ 1. Fatalist
 - ☒ 2. Philatelist
 - ☒ 3. Numismatist
 - ☒ 4. Anthropologist

Question ID : 65497829567
Status : Answered
Chosen Option : 3

Q.3 Select the most appropriate ANTONYM of the given word.

Spellbound

- Ans
- ☒ 1. Amazed
 - ☒ 2. Captivated
 - ☒ 3. Enthralled
 - ☒ 4. Disenchanted

Question ID : 65497829569
Status : Answered
Chosen Option : 4

Q.4 The following sentence has been split into four segments. Identify the segment that contains a grammatical error.

We'll look at / your pet / when you go / on a vacation.

- Ans
- ☒ 1. We'll look at
 - ☒ 2. on a vacation
 - ☒ 3. when you go
 - ☒ 4. your pet

Question ID : 65497829574
Status : Answered
Chosen Option : 1

Q.5 Select the most appropriate option that can substitute the underlined word in the given sentence.

Besides generating revenue, tourism brings a break from the ceremony of daily life.

- Ans
- ☒ 1. scrutiny
 - ☒ 2. symphony
 - ☒ 3. monotony
 - ☒ 4. company

Question ID : **65497829559**
Status : **Answered**
Chosen Option : **3**

Q.6 Select the correctly spelt word.

- Ans
- ☒ 1. Asassination
 - ☒ 2. Bureaucracy
 - ☒ 3. Philanthropist
 - ☒ 4. Peadeatrician

Question ID : **65497829568**
Status : **Answered**
Chosen Option : **2**

Q.7 Select the most appropriate meaning of the given idiom.

Tickled pink

- Ans
- ☒ 1. Fond of pink
 - ☒ 2. Very sensitive
 - ☒ 3. Very pleased
 - ☒ 4. Easily teased

Question ID : **65497829560**
Status : **Answered**
Chosen Option : **3**

Q.8 Select the most appropriate option to fill in the blank.

My sister bought the _____ watch.

- Ans
- ☒ 1. antipathy
 - ☒ 2. colloquial
 - ☒ 3. antilocal
 - ☒ 4. antique

Question ID : **65497829570**
Status : **Answered**
Chosen Option : **4**

Q.9 Select the most appropriate SYNONYM of the given word.

Ample

- Ans ☒ 1. Sparse
☒ 2. Sufficient
☒ 3. Limited
☒ 4. Scarce

Question ID : 65497829575
Status : Answered
Chosen Option : 2

Q.10 Select the option that can be used as a one-word substitute for the given group of words.

Many fish swimming together

- Ans ☒ 1. Shoal
☒ 2. Bevy
☒ 3. Brood
☒ 4. Flock

Question ID : 65497829561
Status : Answered
Chosen Option : 3

Q.11 Select the option that can be used as a one-word substitute for the given group of words.

A person who supervises during an examination

- Ans ☒ 1. Invigilator
☒ 2. Examinee
☒ 3. Principal
☒ 4. Administrator

Question ID : 65497829576
Status : Answered
Chosen Option : 1

Q.12 The following sentence has been split into four segments. Identify the segment that contains a grammatical error.

The most important / of all my goals / are to/ learn English.

- Ans ☒ 1. of all my goals
☒ 2. The most important
☒ 3. are to
☒ 4. learn English

Question ID : 65497829557
Status : Answered
Chosen Option : 3

Q.13 Select the most appropriate option that can substitute the underlined segment in the given sentence. If there is no need to substitute it, select 'No substitution required'.

The condition of the house had been so deteriorated from lack of maintenance that nobody wanted to purchase it.

- Ans**
- ☒ 1. No substitution required
 - ☒ 2. was deteriorating
 - ☒ 3. was so deteriorated
 - ☒ 4. had so deteriorated

Question ID : **65497829572**
Status : **Answered**
Chosen Option : **3**

Q.14 Select the most appropriate synonym of the given word.

Submissive

- Ans**
- ☒ 1. Adamant
 - ☒ 2. Obdurate
 - ☒ 3. Obedient
 - ☒ 4. Obstinate

Question ID : **65497829558**
Status : **Answered**
Chosen Option : **4**

Q.15 Select the option that will improve the underlined part of the given sentence. In case no improvement is needed, select 'No improvement required'.

The new President has bring in many reforms.

- Ans**
- ☒ 1. No improvement required
 - ☒ 2. brought about
 - ☒ 3. bring up
 - ☒ 4. brought out

Question ID : **65497829573**
Status : **Not Answered**
Chosen Option : **--**

Q.16 Select the most appropriate ANTONYM of the given word.

Fictitious

- Ans**
- ☒ 1. False
 - ☒ 2. Factual
 - ☒ 3. Imaginative
 - ☒ 4. Subjective

Question ID : **65497829566**
Status : **Answered**
Chosen Option : **2**

Q.17 Select the most appropriate option to fill in the blank.

She _____ why I had not sent her an invitation.

- Ans
- ☒ 1. granted
 - ☒ 2. enquired
 - ☒ 3. desired
 - ☒ 4. denied

Question ID : 65497829564

Status : Answered

Chosen Option : 2

Q.18 Select the most appropriate option to fill in the blank.

The government should take steps to _____ pollution.

- Ans
- ☒ 1. control
 - ☒ 2. convey
 - ☒ 3. conduct
 - ☒ 4. consume

Question ID : 65497829562

Status : Answered

Chosen Option : 1

Q.19 Select the INCORRECTLY spelt word.

- Ans
- ☒ 1. Wistle
 - ☒ 2. Cereal
 - ☒ 3. Tunnel
 - ☒ 4. Rustle

Question ID : 65497829563

Status : Answered

Chosen Option : 1

Q.20 The following sentence has been split into four segments. Identify the segment that contains a grammatical error.

I wish / I am / the Principal / of the school!

- Ans
- ☒ 1. I wish
 - ☒ 2. of the school
 - ☒ 3. I am
 - ☒ 4. the Principal

Question ID : 65497829565

Status : Answered

Chosen Option : 3

Comprehension:

In the following passage, some words have been deleted. Read the passage carefully and select the most appropriate option to fill in each blank.

Writing is a form (1)_____, and neat handwriting is important when writing (2)_____ that will be read by someone else. We (3)_____ by the quality of our handwriting, and (4)_____ our handwriting is poor, we (5)_____ to be lazy or incompetent.

SubQuestion No : 21

Q.21 Select the most appropriate option to fill in blank no. 1.

- Ans ☒ 1. in expression
☒ 2. to expressing
☒ 3. for expression
☒ 4. of expression

Question ID : 65497829578

Status : Answered

Chosen Option : 4

Comprehension:

In the following passage, some words have been deleted. Read the passage carefully and select the most appropriate option to fill in each blank.

Writing is a form (1)_____, and neat handwriting is important when writing (2)_____ that will be read by someone else. We (3)_____ by the quality of our handwriting, and (4)_____ our handwriting is poor, we (5)_____ to be lazy or incompetent.

SubQuestion No : 22

Q.22 Select the most appropriate option to fill in blank no. 2.

- Ans ☒ 1. nothing
☒ 2. everything
☒ 3. anything
☒ 4. each thing

Question ID : 65497829579

Status : Answered

Chosen Option : 3

Comprehension:

In the following passage, some words have been deleted. Read the passage carefully and select the most appropriate option to fill in each blank.

Writing is a form (1)_____, and neat handwriting is important when writing (2)_____ that will be read by someone else. We (3)_____ by the quality of our handwriting, and (4)_____ our handwriting is poor, we (5)_____ to be lazy or incompetent.

SubQuestion No : 23

Q.23 Select the most appropriate option to fill in blank no. 3.

- Ans ☒ 1. should be often judged
☒ 2. are often judged
☒ 3. have been often judged
☒ 4. judged often

Question ID : 65497829580

Status : Answered

Chosen Option : 2

Comprehension:

In the following passage, some words have been deleted. Read the passage carefully and select the most appropriate option to fill in each blank.

Writing is a form (1)_____, and neat handwriting is important when writing (2)_____ that will be read by someone else. We (3)_____ by the quality of our handwriting, and (4)_____ our handwriting is poor, we (5)_____ to be lazy or incompetent.

SubQuestion No : 24

Q.24 Select the most appropriate option to fill in blank no. 4.

- Ans ☒ 1. as
☒ 2. while
☒ 3. where
☒ 4. when

Question ID : 65497829581

Status : Answered

Chosen Option : 4

Comprehension:

In the following passage, some words have been deleted. Read the passage carefully and select the most appropriate option to fill in each blank.

Writing is a form (1)_____, and neat handwriting is important when writing (2)_____ that will be read by someone else. We (3)_____ by the quality of our handwriting, and (4)_____ our handwriting is poor, we (5)_____ to be lazy or incompetent.

SubQuestion No : 25

Q.25 Select the most appropriate option to fill in blank no. 5.

- Ans ☒ 1. appear
☒ 2. see
☒ 3. expose
☒ 4. look

Question ID : 65497829582

Status : Answered

Chosen Option : 1

Section : Part D Hindi

Q.1 दिए गए वाक्य में रेखांकित खंड को प्रतिस्थापित करने के लिए सबसे उपयुक्त विकल्प का चयन करें।
 यदि इसे प्रतिस्थापित करने की आवश्यकता नहीं है, तो विकल्प 'किसी बदलाव की आवश्यकता नहीं है' का चयन करें।


भाई साहब को मुझे एक रुपया दिया है।

- Ans ☒ 1. भाई साहब द्वारा
☒ 2. भाई साहब
☒ 3. किसी बदलाव की आवश्यकता नहीं है।
☒ 4. भाई साहब ने

Question ID : 65497829593

Status : Not Answered

Chosen Option : --



Q.2 रिक्त स्थान की पूर्ति के लिए सबसे उपयुक्त शब्द का चयन करें-

वह वृक्ष की _____ डाली काट रहा था।

- Ans ☒ 1. सुखी
☒ 2. सखी
☒ 3. सूखी
☒ 4. सामान्य

Question ID : 65497829587

Status : Not Answered

Chosen Option : --

Q.3 रिक्त स्थान की पूर्ति के लिए सबसे उपयुक्त शब्द का चयन करें-

रोगी ने चिकित्सक से _____ लिया।

- Ans ☒ 1. मंत्रणा
☒ 2. आज्ञा
☒ 3. परामर्श
☒ 4. अनुदान

Question ID : 65497829586

Status : Not Answered

Chosen Option : --

Q.4 दिए गए वाक्य का वह भाग ज्ञात करें जिसमें कोई त्रुटि है। यदि कोई त्रुटि नहीं है, तो 'कोई त्रुटि नहीं है' चुनें।

कई रेलवे के(1)/ कर्मचारियों की(2)/ गिरफ्तारी हुई।(3)/ कोई त्रुटि नहीं है।(4)

- Ans ☒ 1. 3
☒ 2. 1
☒ 3. 4
☒ 4. 2

Question ID : 65497829594

Status : Not Answered

Chosen Option : --

Q.5 दिए गए वाक्य में रेखांकित खंड को प्रतिस्थापित करने के लिए सबसे उपयुक्त विकल्प का चयन करें। यदि इसे प्रतिस्थापित करने की आवश्यकता नहीं है, तो विकल्प 'किसी बदलाव की आवश्यकता नहीं है' का चयन करें।

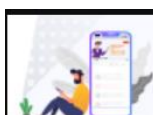
रात दस बजे से दिल्ली में जंक्शन से हम कश्मीर मेल में सवार हुए।

- Ans ☒ 1. किसी बदलाव की आवश्यकता नहीं है।
☒ 2. रात दस बजे तक दिल्ली में जंक्शन में हम
☒ 3. रात दस बजे से, दिल्ली के जंक्शन से हम
☒ 4. रात दस बजे, दिल्ली के जंक्शन से हम

Question ID : 65497829588

Status : Not Answered

Chosen Option : --



Q.6 'ऊपर की ओर जाने वाला' वाक्यांश के लिए एक शब्द होगा-

- Ans
- ☒ 1. आगामी
 - ☒ 2. प्रतिगामी
 - ☒ 3. ऊर्ध्वगामी
 - ☒ 4. अधोगामी

Question ID : 65497829601

Status : Not Answered

Chosen Option : --

Q.7 उस विकल्प का चयन करें जो निम्न मुहावरे का अर्थ व्यक्त करता है।

कलेजा ठंडा होना

- Ans
- ☒ 1. मन में शान्ति होना
 - ☒ 2. धीरज रखना
 - ☒ 3. प्रिय होना
 - ☒ 4. बहुत दुखी होना

Question ID : 65497829592

Status : Not Answered

Chosen Option : --

Q.8 दिए गए वाक्यांश के लिए एक शब्द दीजिए।

प्रार्थना या निवेदन करने वाला

- Ans
- ☒ 1. प्रार्थी
 - ☒ 2. स्तुति
 - ☒ 3. भक्त वत्सल
 - ☒ 4. भजन

Question ID : 65497829583

Status : Not Answered

Chosen Option : --

Q.9 दिए गए शब्द का विलोम चुनें।

निर्मल

- Ans
- ☒ 1. मैला
 - ☒ 2. गंदा
 - ☒ 3. मलिन
 - ☒ 4. विमल

Question ID : 65497829591

Status : Not Answered

Chosen Option : --

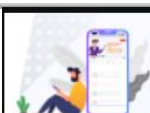
Q.10 'विशाल' का विलोम शब्द होगा-

- Ans
- ☒ 1. विराट
 - ☒ 2. क्षणिक
 - ☒ 3. लघु
 - ☒ 4. विकराल

Question ID : 65497829600

Status : Not Answered

Chosen Option : --



Q.11 दिए गए शब्द का समानार्थी शब्द चुनें-

युक्ति

- Ans ☒ 1. युक्त
☒ 2. उपाय
☒ 3. जुड़ा हुआ
☒ 4. संलग्न

Question ID : 65497829595

Status : Not Answered

Chosen Option : --

Q.12 सही वर्तनी वाले शब्द का चयन करें।

- Ans ☒ 1. प्रलहाद
☒ 2. प्रह्लाद
☒ 3. प्रल्हाद
☒ 4. पहलाद

Question ID : 65497829590

Status : Not Answered

Chosen Option : --

Q.13 चंद्रमा के समान मुखवाला - वाक्यांश के लिए एक शब्द लिखिए-

- Ans ☒ 1. दसमुख
☒ 2. चंद्रमुख
☒ 3. लौहपुरुष
☒ 4. गदाधर

Question ID : 65497829598

Status : Not Answered

Chosen Option : --

Q.14 सही वर्तनी वाले शब्द का चयन करें।

- Ans ☒ 1. वनस्पति
☒ 2. बनस्पती
☒ 3. वनस्पती
☒ 4. वनास्पती

Question ID : 65497829589

Status : Not Answered

Chosen Option : --

Q.15 दिये गये वाक्य में रेखांकित अंश को प्रतिस्थापित करने के लिए सबसे उपयुक्त विकल्प का चयन करें।

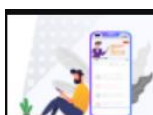
उसे व्याकरण का अच्छा बोध है।

- Ans ☒ 1. आभास
☒ 2. ज्ञान
☒ 3. समझ
☒ 4. भान

Question ID : 65497829596

Status : Not Answered

Chosen Option : --



Q.16 रिक्त स्थान की पूर्ति के लिए सबसे उपयुक्त विकल्प का चयन करें।

श्याम को रोगी पर _____ आ गई।

- Ans
- ☒ 1. दया
 - ☐ 2. क्षमा
 - ☐ 3. कृपा
 - ☐ 4. अनुकंपा

Question ID : 65497829602

Status : Not Answered

Chosen Option : --

Q.17 दिए गए वाक्य का वो भाग ज्ञात करें जिसमें कोई त्रुटि है। यदि कोई त्रुटि नहीं है, तो 'कोई त्रुटि नहीं है' चुनें।

शकीला भोपाली (1)\ प्रसिद्ध कव्वाली (2)\ गायकी हैं (3)\ कोई त्रुटि नहीं है (4)

- Ans
- ☐ 1. 2
 - ☐ 2. 4
 - ☒ 3. 3
 - ☐ 4. 1

Question ID : 65497829584

Status : Not Answered

Chosen Option : --

Q.18 दिये गये वाक्य के किस भाग में त्रुटि है?

मैंने सारा माल उसके हाथ में बेच दिया है।

- Ans
- ☐ 1. मैंने सारा माल
 - ☐ 2. दिया है।
 - ☒ 3. उसके हाथ में
 - ☐ 4. बेच

Question ID : 65497829599

Status : Not Answered

Chosen Option : --


Q.19 'आग में कूदना' मुहावरे का सही अर्थ है-

- Ans
- ☐ 1. मूर्ख होना
 - ☐ 2. मदद करना
 - ☒ 3. जान जोखिम में डालना
 - ☐ 4. पश्चाताप करना

Question ID : 65497829597

Status : Not Answered

Chosen Option : --



Q.20 दिए गए शब्द का समानार्थी शब्द बताइए-

कोयल

- Ans ☒ 1. काक
☒ 2. कीर
☒ 3. शिखी
☒ 4. कोकिला

Question ID : 65497829585

Status : Not Answered

Chosen Option : --

Comprehension:

भारतवर्ष (1) _____ है और देश में भाषाएं चाहे जितनी भी हों, लेकिन उन सबके भीतर भारत की एक ही (2) _____ अपने को (3) _____ करती है। एक ही गंगोत्री का जल है जो अनेक नदियों में बह रहा है, एक ही सूर्य का (4) _____ है जो अनेक पात्रों में जगमगा रहा है और एक ही (5) _____ है जो अनेक छंदों में फूट रहा है। वेद, उपनिषद्, रामायण और महाभारत – ये ही वे घाट हैं जहां पर हमारी सभी भाषाएं पानी पीती हैं।

निम्न प्रश्नों के उत्तर उपरोक्त गद्यांश के आधार पर दीजिए।

SubQuestion No : 21

Q.21 गद्यांश के रिक्त स्थान (1) के लिए सर्वाधिक उपयुक्त शब्द होगा-

- Ans ☒ 1. भिन्न
☒ 2. एक
☒ 3. अनेक
☒ 4. प्रत्येक

Question ID : 65497829604

Status : Not Answered

Chosen Option : --

Comprehension:

भारतवर्ष (1) _____ है और देश में भाषाएं चाहे जितनी भी हों, लेकिन उन सबके भीतर भारत की एक ही (2) _____ अपने को (3) _____ करती है। एक ही गंगोत्री का जल है जो अनेक नदियों में बह रहा है, एक ही सूर्य का (4) _____ है जो अनेक पात्रों में जगमगा रहा है और एक ही (5) _____ है जो अनेक छंदों में फूट रहा है। वेद, उपनिषद्, रामायण और महाभारत – ये ही वे घाट हैं जहां पर हमारी सभी भाषाएं पानी पीती हैं।

निम्न प्रश्नों के उत्तर उपरोक्त गद्यांश के आधार पर दीजिए।

SubQuestion No : 22

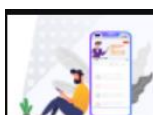
Q.22 गद्यांश के रिक्त स्थान (2) के लिए सर्वाधिक उपयुक्त शब्द होगा-

- Ans ☒ 1. परमात्मा
☒ 2. आत्मा
☒ 3. निष्ठा
☒ 4. प्रतिष्ठा

Question ID : 65497829605

Status : Not Answered

Chosen Option : --



Comprehension:

भारतवर्ष (1) _____ है और देश में भाषाएं चाहे जितनी भी हों, लेकिन उन सबके भीतर भारत की एक ही (2) _____ अपने को (3) _____ करती है। एक ही गंगोत्री का जल है जो अनेक नदियों में बह रहा है, एक ही सूर्य का (4) _____ है जो अनेक पात्रों में जगमगा रहा है और एक ही (5) _____ है जो अनेक छंदों में फूट रहा है। वेद, उपनिषद, रामायण और महाभारत – ये ही वे घाट हैं जहां पर हमारी सभी भाषाएं पानी पीती हैं।

निम्न प्रश्नों के उत्तर उपरोक्त गद्यांश के आधार पर दीजिए।

SubQuestion No : 23

Q.23 गद्यांश के रिक्त स्थान (3) के लिए सर्वाधिक उपयुक्त शब्द होगा-

- Ans ☒ 1. संशोधित
☒ 2. अभिव्यक्त
☒ 3. अर्पित
☒ 4. प्रदर्शित

Question ID : 65497829606

Status : Not Answered

Chosen Option : --

Comprehension:

भारतवर्ष (1) _____ है और देश में भाषाएं चाहे जितनी भी हों, लेकिन उन सबके भीतर भारत की एक ही (2) _____ अपने को (3) _____ करती है। एक ही गंगोत्री का जल है जो अनेक नदियों में बह रहा है, एक ही सूर्य का (4) _____ है जो अनेक पात्रों में जगमगा रहा है और एक ही (5) _____ है जो अनेक छंदों में फूट रहा है। वेद, उपनिषद, रामायण और महाभारत – ये ही वे घाट हैं जहां पर हमारी सभी भाषाएं पानी पीती हैं।

निम्न प्रश्नों के उत्तर उपरोक्त गद्यांश के आधार पर दीजिए।

SubQuestion No : 24

Q.24 गद्यांश के रिक्त स्थान (4) के लिए सर्वाधिक उपयुक्त शब्द होगा-

- Ans ☒ 1. रस
☒ 2. चित्र
☒ 3. दर्पण
☒ 4. बिम्ब

Question ID : 65497829607

Status : Not Answered

Chosen Option : --

Comprehension:

भारतवर्ष (1) _____ है और देश में भाषाएं चाहे जितनी भी हों, लेकिन उन सबके भीतर भारत की एक ही (2) _____ अपने को (3) _____ करती है। एक ही गंगोत्री का जल है जो अनेक नदियों में बह रहा है, एक ही सूर्य का (4) _____ है जो अनेक पात्रों में जगमगा रहा है और एक ही (5) _____ है जो अनेक छंदों में फूट रहा है। वेद, उपनिषद, रामायण और महाभारत – ये ही वे घाट हैं जहां पर हमारी सभी भाषाएं पानी पीती हैं।

निम्न प्रश्नों के उत्तर उपरोक्त गद्यांश के आधार पर दीजिए।

SubQuestion No : 25

Q.25 गद्यांश के रिक्त स्थान (5) के लिए सर्वाधिक उपयुक्त शब्द होगा-

- Ans ☒ 1. भाव
☒ 2. नाम
☒ 3. बल
☒ 4. अर्थ

Question ID : 65497829608

Status : Not Answered

Chosen Option : --

Buy Test Series

Unlock All 650+ Mock Tests for SSC & Railway

- Unlimited Access
- All Exams covered
- Designed by Experts
- Performance Analysis