







25. The company has \_\_\_\_\_ special training to employees on \_\_\_\_\_ to trade online.

- |                         |                      |
|-------------------------|----------------------|
| (a) announced, benefits | (b) offered, course  |
| (c) imparted, risks     | (d) sanction, skills |

26. In the following question, out of the four alternatives, select the word similar in meaning to the word given.

**Cynicism**

- |               |               |
|---------------|---------------|
| a) Conviction | b) Bitterness |
| c) Credence   | d) Intuition  |

27. In the following question, out of the four alternatives, select the word similar in meaning to the word given.

**Pinnacle**

- |                |          |
|----------------|----------|
| a) Culmination | b) Nadir |
| c) Nethermost  | d) Basal |

28. In the following question, out of the four alternatives, select the word opposite in meaning to the word given.

**Befuddle**

- |            |              |
|------------|--------------|
| a) Baffle  | b) Daze      |
| c) Fluster | d) Explicate |

29. In the following question, a sentence has been given in Direct/Indirect speech. Out of the four alternatives suggested, select the one which best express the same sentence in Indirect/Direct speech.

**John said, "There is a monkey outside the window."**

- a) John said that there was a monkey outside the window.
- b) John said that there is a monkey outside the window.
- c) John says that there was a monkey outside the window.
- d) John says that there is a monkey outside the window.

30. In the following question, a sentence has been given in Direct/Indirect speech. Out of the four alternatives suggested, select the one which best express the same sentence in Indirect/Direct speech.

**She said, "I will have cooked the food by the time they arrive".**

- a) She said that she will have cooked the food by the time they would arrive.
- b) She said that she would cooked the food by the time they will arrive.
- c) She said that she would have cooked the food by the time they will arrive.
- d) She said that she would have cooked the food by the time they arrived.

In the following question Q31 – Q32, a sentence has been given in Active/Passive Voice. Out of the four alternatives suggested, select the one which best expresses the same sentence in Passive/Active Voice.

31. **You'll be missing the sunshine in home.**

- a) You'll miss the sunshine in home.
- b) You would be missing the sunshine in home.
- c) You'll are going to be missing the sunshine in home.
- d) None of the above.

32. **The presiding officer vetoed the committee's decision.**

- a) The committee's decision is vetoed by the presiding officer.
- b) The committee's decision was vetoed by the presiding officer.
- c) The committee's decision has been vetoed by the presiding officer.
- d) The committee's decision is being vetoed by the presiding officer.

33. In the following question, out of the four alternatives, select the alternative which best expresses the meaning of the idiom/phrase.

**Tight - lipped**

- a) To have very thin lips
- b) To be boisterous
- c) To have a thin voice
- d) Unwilling to speak about an event

34. Out of the four alternatives, choose the one which can be substituted for the given words/sentence.

**To confirm with the help of evidence**

- a) Philanthropist
- b) Bilingual
- c) Refute
- d) Corroborate

35. In the following question, one part of the sentence may have an error. Find out which part of the sentence has an error and click the button corresponding to it. If the sentence is free from error, click the "No error" option.

**Rohan had been playing (1) for his club since fifteen years, (2) but then his elbow got injured. (3) No error (4)**

- a) Rohan had been playing
- b) for his club since fifteen years,
- c) but then his elbow got injured.
- d) No error

36. When was the Constitution of India amended for the first time?

- a) 1951
- b) 1952
- c) 1950
- d) 1953

37. Who wrote the book Indica?  
a) Megasthenese  
b) Aristotle  
c) Chanakya  
d) None of these
38. Soil contains decayed remains of living organisms. This is called \_\_\_\_\_.  
a) Minerals  
b) Biosphere  
c) Saline Soil  
d) Humus
39. Dairy comes under which sector of economic activity?  
a) Tertiary sector  
b) Primary sector  
c) Secondary sector  
d) Quaternary sector
40. Who is appointed as the first Lt. Governor of Union Territory of Ladakh?  
a) Raj Manohar Joshi  
b) G C Murmu  
c) Satyapal Malik  
d) R K Mathur
41. What phenomenon is responsible for twinkling of stars?  
a) Diffraction  
b) Refraction  
c) Dispersion  
d) Scattering of Light
42. What will be the power consumption of two 300 W bulbs, three 100 W fans and one 1200 W Refrigerator for continuous operation of 30 hours?  
a) 54 kWh  
b) 60 kWh  
c) 63 kWh  
d) None of these
43. What type of image is formed by the eye lens on the retina?  
(a) Real and erect  
(b) Virtual and inverted  
(c) Real and inverted  
(d) Virtual and erect
44. The magnetic field is the strongest at  
(a) middle of the magnet.  
(b) north pole.  
(c) south pole.  
(d) both poles.
45. The heating element of an electric iron is made up of:  
(a) copper  
(b) nichrome  
(c) aluminium  
(d) iron

46. A zygote which has an X-chromosome inherited from the father will develop into

- (a) girl
- (b) boy
- (c) either boy or girl
- (d) X-chromosome does not influence the sex of a child.

47. The ability of a cell to divide into several cells during reproduction in Plasmodium is called

- (a) budding
- (b) multiple fission
- (c) binary fission
- (d) reduction division

48. Tomato is a natural source of which acid?

- (a) Acetic acid
- (b) Citric acid
- (c) Tartaric acid
- (d) Oxalic acid

49. Which of the following has more inertia – a rubber ball and a stone of same size?

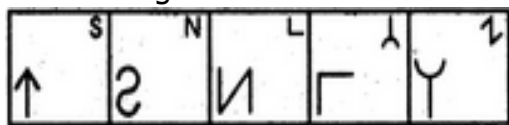
- a) Rubber ball
- b) Stone
- c) Both have equal inertia
- d) Both have zero

50. A bus at rest starts moving with an acceleration of  $0.1 \text{ m/s}^2$ . What will be its speed after 2 minutes?

- a) 15 m/s
- b) 18 m/s
- c) 9 m/s
- d) 12 m/s


51. Select a figure from amongst the Answer Figures which will continue the same series as established by the five Problem Figures.

Problem Figures:



A B C D C

Answer Figures:



1 2 3 4 5

- a) 4
- c) 1

- b) 3
- d) 2

52. Marathon is to race as hibernation is to
- |           |          |
|-----------|----------|
| a) winter | b) bear  |
| c) dream  | d) sleep |

53. Choose the correct order of letters which are required to form a correct meaningful word

**VARSTE**

- |                |
|----------------|
| a) 2,3,1,6,4,5 |
| b) 3,2,4,5,6,1 |
| c) 4,5,2,3,1,6 |
| d) 6,3,4,5,2,1 |

54. In these series, you will be looking at both the letter pattern and the number pattern. Fill the blank in the series.

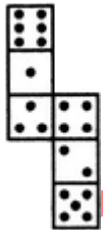
**SCD, TEF, UGH, \_\_\_\_\_, WKL**

- |        |        |
|--------|--------|
| a) CMN | b) VIJ |
| c) IJT | d) UJI |

55. Introducing a boy, a girl said, "He is the son of the daughter of the father of my uncle." How is the boy related to the girl?

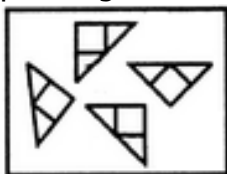
- |            |               |
|------------|---------------|
| a) Brother | b) Nephew     |
| c) Uncle   | d) Son-in-law |

56. How many dots lie opposite to the face having three dots, when the given figure is folded to form a cube?

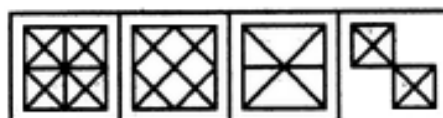


- |      |      |
|------|------|
| a) 2 | b) 3 |
| c) 5 | d) 6 |

57. Find out which of the figures (1), (2), (3) and (4) can be formed from the pieces given in figure (X).



(X)

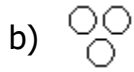


(1) (2) (3) (4)

- |      |      |
|------|------|
| a) 2 | b) 3 |
| c) 1 | d) 4 |



58. Which of the following diagrams indicates the best relation between Travelers, Train and Bus ?



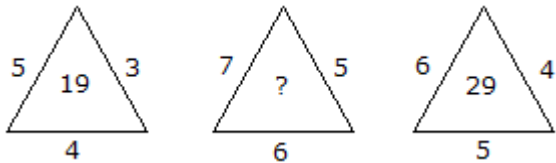
59. In a certain code language,  
 '134' means 'good and tasty';  
 '478' means 'see good pictures' and  
 '729' means 'pictures are faint'.

Which of the following digits stands for 'see'?

- a) 1
- c) 8

- b) 9
- d) None of these

60. Which one will replace the question mark ?



- a) 24
- c) 29

- b) 36
- d) 41