



PGDM-C

MICAT SAMPLE QUESTIONS

DISCLAIMER

Please note that these are simply questions for your reference and not indicative of the actual paper. These questions are to give you an idea of what can be expected.

Good luck!

Section	QNo	Question	Option	Correct
A- Descriptive	1	<p>'Environment is more important than development.' Present five arguments in support of this statement.</p>		
A- Descriptive	2	<p>'Environment is more important than development.' Present five arguments against this statement.</p>		
A- Descriptive	3	<p>Having given your arguments on both sides of the statement, 'Environment is more important than development.', present your own views in about 200 words in response to a request from a leading newspaper editor. Please note that you have to take one viewpoint for your response, i.e., either for or against. No marks will be given for expressing your views on both sides of the argument.</p>		
		<p>Arrange the following pictures in a sequence to write a story accordingly. Write the picture sequence and a story of approximately 300 words in the allocated space. Ensure that all the pictures have been utilized in the story.</p>		

A-
Descriptive

4



(A)



(B)



(C)



(D)

A,B,C,D

A,C,B,D

A,C,D,B

A,D,B,C

A,D,C,B

B,A,C,D

B,A,D,C

B,C,A,D

B,C,D,A

B,D,A,C

B,D,C,A

C,A,B,D

C,A,D,B

C,B,A,D

C,B,D,A

C,D,A,B

C,D,B,A

			D,A,B,C	
			D,A,C,B	
			D,B,A,C	
			D,B,C,A	
			D,C,A,B	
			D,C,B,A	
			A,B,D,C	

C-
Reasoning

1

This problem consists of four clues and against that set of four clues, five alternatives are given. These alternatives are associated with either one or more than one clues in some manner. Amongst all these five alternatives, there is only one alternative that is associated with all of the four clues in some manner. This alternative is the right answer.

Your task is to mark the right answer from among the alternatives given.

For example in the sample question below, alternative E “**apple**” is related to all the four clues as follows:

- (i) an apple cart
- (ii) cider is made from apple
- (iii) apple of my eye
- (iv) orange and apple are fruits.

In that case, you have to select and save the alternative 5.

Sample Question

Question Clues:

- (i) Cart A Round
- (ii) Cider B Juice
- (iii) Eye C Orchard

Restaurant

- (iii) Eye C Orchard
- (iv) Orange D Village
- E Apple

Question Clues:

- (i) Ship
- (ii) Bar
- (iii) Law
- (iv) Room

		Court	Correct
		Anchor	
		Alcohol	
		Soap	

This problem consists of four clues and against that set of four clues, five alternatives are given. These alternatives are associated with either one or more than one clues in some manner. Amongst all these five alternatives, there is only one alternative that is associated with all of the four clues in some manner. This alternative is the right answer. Your task is to mark the right answer from among the alternatives given. For example in the sample question below, alternative E “apple” is related to all the four clues as follows:

- (i) an apple cart
- (ii) cider is made from apple
- (iii) apple of my eye
- (iv) orange and apple are fruits.

In that case, you have to select and save the alternative 5.

Sample Question

Question Clues:

- (i) Cart A Round
- (ii) Cider B Juice
- (iii) Eye C Orchard
- (iv) Orange D Village
- E Apple

Question Clues:

- (i) Company
- (ii) Strong
- (iii) Rigid

		Power	
--	--	-------	--

C-Reasoning

2

		(iv) Solid		
			Bad	
			Firm	Correct
			Man	
			Weak	
C-Reasoning	3	<p>This problem consists of four clues and against that set of four clues, five alternatives are given. These alternatives are associated with either one or more than one clues in some manner. Amongst all these five alternatives, there is only one alternative that is associated with all of the four clues in some manner. This alternative is the right answer. Your task is to mark the right answer from among the alternatives given. For example in the sample question below, alternative E “apple” is related to all the four clues as follows:</p> <p>(i) an apple cart (ii) cider is made from apple (iii) apple of my eye (iv) orange and apple are fruits. In that case, you have to select and save the alternative 5.</p> <p>Sample Question</p> <p>Question Clues:</p> <p>(i) Cart A Round (ii) Cider B Juice (iii) Eye C Orchard (iv) Orange D Village E Apple</p> <p>Question Clues:</p> <p>(i) Stand (ii) Support (iii) Origin (iv) Bottom</p>	Base	Correct
			Heart	
			Election	
			Crowd	
			Wisdom	

C-Reasoning

4

This problem consists of four clues and against that set of four clues, five alternatives are given. These alternatives are associated with either one or more than one clues in some manner. Amongst all these five alternatives, there is only one alternative that is associated with all of the four clues in some manner. This alternative is the right answer. Your task is to mark the right answer from among the alternatives given. For example in the sample question below, alternative E “apple” is related to all the four clues as follows:

- (i) an apple cart
- (ii) cider is made from apple
- (iii) apple of my eye
- (iv) orange and apple are fruits.

In that case, you have to select and save the alternative 5.

Sample Question

Question Clues:

- (i) Cart A Round
- (ii) Cider B Juice
- (iii) Eye C Orchard
- (iv) Orange D Village
- E Apple

Question Clues:

- (i) Girl
- (ii) Master
- (iii) Long
- (iv) Hit

Boy

Miss	Correct
Servant	
Short	
Run	

This problem consists of four clues and against that set of four clues, five alternatives are given. These alternatives are associated with either one or more than one clues in some manner. Amongst all these five alternatives, there is only one alternative that is associated with all of the four clues in some manner. This alternative is the right answer. Your task is to mark the right answer from among the alternatives given. For example in the sample question below, alternative E “apple” is related to all the four clues as follows:

- (i) an apple cart
- (ii) cider is made from apple
- (iii) apple of my eye
- (iv) orange and apple are fruits.

In that case, you have to select and save the alternative 5.

Sample Question

Question Clues:

C-Reasoning	5	<p>(i) Cart A Round (ii) Cider B Juice (iii) Eye C Orchard (iv) Orange D Village E Apple</p> <p>Question Clues:</p> <p>(i) Sheet (ii) Coat (iii) Ban (iv) Cover</p>	Metal	
			Sheep	
			Blanket	Correct
			Bunker	
			Ice	
C-Reasoning	6	<p>This problem consists of four clues and against that set of four clues, five alternatives are given. These alternatives are associated with either one or more than one clues in some manner. Amongst all these five alternatives, there is only one alternative that is associated with all of the four clues in some manner. This alternative is the right answer. Your task is to mark the right answer from among the alternatives given. For example in the sample question below, alternative E “apple” is related to all the four clues as follows:</p> <p>(i) an apple cart (ii) cider is made from apple (iii) apple of my eye (iv) orange and apple are fruits. In that case, you have to select and save the alternative 5.</p> <p>Sample Question</p> <p>Question Clues:</p> <p>(i) Cart A Round (ii) Cider B Juice (iii) Eye C Orchard (iv) Orange D Village E Apple</p> <p>Question Clues:</p>	Leaf	

		(i) Tree (ii) Boot (iii) Nose (iv) Case		
			Lid	
			Trunk	Correct
			Tiger	
			Shoe	
C-Reasoning	7	<p>This problem consists of four clues and against that set of four clues, five alternatives are given. These alternatives are associated with either one or more than one clues in some manner. Amongst all these five alternatives, there is only one alternative that is associated with all of the four clues in some manner. This alternative is the right answer. Your task is to mark the right answer from among the alternatives given. For example in the sample question below, alternative E “apple” is related to all the four clues as follows:</p> <p>(i) an apple cart (ii) cider is made from apple (iii) apple of my eye (iv) orange and apple are fruits. In that case, you have to select and save the alternative 5.</p> <p>Sample Question</p> <p>Question Clues:</p> <p>(i) Cart A Round (ii) Eye C Orchard (iv) Orange D Village E Apple</p> <p>Question Clues:</p> <p>(i) Evil (ii) Hospital (iii) Parent (iv) Off</p>	Ward	Correct
			Mark	
			Vote	

			Child	
			Quack	
C-Reasoning	8	<p>This problem consists of four clues and against that set of four clues, five alternatives are given. These alternatives are associated with either one or more than one clues in some manner. Amongst all these five alternatives, there is only one alternative that is associated with all of the four clues in some manner. This alternative is the right answer.</p> <p>Your task is to mark the right answer from among the alternatives given.</p> <p>For example in the sample question below, alternative E “apple” is related to all the four clues as follows:</p> <p>(i) an apple cart (ii) cider is made from apple (iii) apple of my eye (iv) orange and apple are fruits.</p> <p>In that case, you have to select and save the alternative 5.</p> <p>Sample Question</p> <p>Question Clues:</p> <p>(i) Cart A Round (ii) Cider B Juice (iii) Eye C Orchard (iv) Orange D Village E Apple</p> <p>Question Clues:</p> <p>(i) Walk (ii) Score (iii) Muscle (iv) Sun</p>	Win	
			Run	Correct
			Finish	
			Pain	
			Gases	
		<p>This problem consists of four clues and against that set of four clues, five alternatives are given. These alternatives are associated with either one or more than one clues in some manner. Amongst all these five alternatives, there is only one alternative that is associated with all of the four clues in some manner. This alternative is the right answer.</p> <p>Your task is to mark the right answer from among the alternatives given.</p> <p>For example in the sample question below, alternative E “apple” is related to all the four clues as follows:</p> <p>(i) an apple cart (ii) cider is made from apple (iii) apple of my eye</p>		

C- Reasoning	9	<p>(iv) orange and apple are fruits. In that case, you have to select and save the alternative 5.</p> <p>Sample Question</p> <p>Question Clues:</p> <p>(i) Cart A Round (ii) Cider B Juice (iii) Eye C Orchard (iv) Orange D Village E Apple</p> <p>Question Clues:</p> <p>(i) Alone (ii) Absence (iii) Deny (iv) Stay</p>	Leave	Correct
			Presence	
			Participate	
			Allow	
			Disappear	
C- Reasoning	10	<p>This problem consists of four clues and against that set of four clues, five alternatives are given. These alternatives are associated with either one or more than one clues in some manner. Amongst all these five alternatives, there is only one alternative that is associated with all of the four clues in some manner. This alternative is the right answer. Your task is to mark the right answer from among the alternatives given. For example in the sample question below, alternative E “apple” is related to all the four clues as follows: (i) an apple cart (ii) cider is made from apple (iii) apple of my eye (iv) orange and apple are fruits. In that case, you have to select and save the alternative 5.</p> <p>Sample Question</p> <p>Question Clues:</p> <p>(i) Cart A Round (ii) Cider B Juice (iii) Eye C Orchard (iv) Orange D Village</p>	Book	Correct

- (iv) Orange D Village
E Apple

Question Clues:

- (i) Seat
(ii) Print
(iii) Prison
(iv) Document

Hall

Crime

Wall

Dress

This problem consists of four clues and against that set of four clues, five alternatives are given.

These alternatives are associated with either one or more than one clues in some manner.

Amongst all these five alternatives, there is only one alternative that is associated with all of the four clues in some manner.

This alternative is the right answer.

Your task is to mark the right answer from among the alternatives given.

For example in the sample question below, alternative E "apple" is related to all the four clues as follows:

- (i) an apple cart
(ii) cider is made from apple
(iii) apple of my eye
(iv) orange and apple are fruits.

In that case, you have to select and save the alternative 5.

Sample Question

Question Clues:

- (i) Cart A Round
(ii) Cider B Juice
(iii) Eye C Orchard
(iv) Orange D Village
E Apple

Question Clues:

- (i) Hair
(ii) Down
(iii) Up
(iv) Ball

Call

			Use	
			Pin	Correct
			Cap	
			Do	
C- Reasoning	12	<p>This problem consists of four clues and against that set of four clues, five alternatives are given. These alternatives are associated with either one or more than one clues in some manner. Amongst all these five alternatives, there is only one alternative that is associated with all of the four clues in some manner. This alternative is the right answer.</p> <p>Your task is to mark the right answer from among the alternatives given.</p> <p>For example in the sample question below, alternative E “apple” is related to all the four clues as follows:</p> <p>(i) an apple cart (ii) cider is made from apple (iii) apple of my eye (iv) orange and apple are fruits.</p> <p>In that case, you have to select and save the alternative 5.</p> <p>Sample Question</p> <p>Question Clues:</p> <p>(i) Cart A Round (ii) Cider B Juice (iii) Eye C Orchard (iv) Orange D Village E Apple</p> <p>Question Clues:</p> <p>(i) Start (ii) The (iii) Finish (iv) Stop</p>	Open	
			Beginning	
			Thing	
			End	Correct
			Deal	
		<p>This problem consists of four clues and against that set of four clues, five alternatives are given. These alternatives are associated with either one or more than one clues in some manner.</p>		

C-Reasoning	13	<p>Amongst all these five alternatives, there is only one alternative that is associated with all of the four clues in some manner. This alternative is the right answer. Your task is to mark the right answer from among the alternatives given. For example in the sample question below, alternative E "apple" is related to all the four clues as follows: (i) an apple cart (ii) cider is made from apple (iii) apple of my eye (iv) orange and apple are fruits. In that case, you have to select and save the alternative 5.</p> <p>Sample Question</p> <p>Question Clues:</p> <p>(i) Cart A Round (ii) Cider B Juice (iii) Eye C Orchard (iv) Orange D Village</p> <p style="padding-left: 100px;">E Apple</p> <p>Question Clues:</p> <p>(i) Satin (ii) On feet (iii) Rebellion (iv) Fragrance</p>	Rose	Correct
			Incense	
			Perfume	
			Revolution	
			Muslin	
		<p>This problem consists of four clues and against that set of four clues, five alternatives are given. These alternatives are associated with either one or more than one clues in some manner. Amongst all these five alternatives, there is only one alternative that is associated with all of the four clues in some manner. This alternative is the right answer. Your task is to mark the right answer from among the alternatives given. For example in the sample question below, alternative E "apple" is related to all the four clues as follows: (i) an apple cart (ii) cider is made from apple (iii) apple of my eye (iv) orange and apple are fruits. In that case, you have to select and save the alternative 5.</p> <p>Sample Question</p> <p>Question Clues:</p> <p>(i) Cart A Round</p>		

C-Reasoning	14	<p>(ii) Cider B Juice (iii) Eye C Orchard (iv) Orange D Village E Apple</p> <p>Question Clues:</p> <p>(i) Heart (ii) Interval (iii) Split (iv) Give</p>	School	
			Take	
			Break	Correct
			Blood	
			Open	
C-Reasoning	15	<p>This problem consists of four clues and against that set of four clues, five alternatives are given. These alternatives are associated with either one or more than one clues in some manner. Amongst all these five alternatives, there is only one alternative that is associated with all of the four clues in some manner. This alternative is the right answer. Your task is to mark the right answer from among the alternatives given. For example in the sample question below, alternative E “apple” is related to all the four clues as follows: (i) an apple cart (ii) cider is made from apple (iii) apple of my eye (iv) orange and apple are fruits. In that case, you have to select and save the alternative 5.</p> <p>Sample Question</p> <p>Question Clues:</p> <p>(i) Cart A Round (ii) Cider B Juice (iii) Eye C Orchard (iv) Orange D Village E Apple</p> <p>Question Clues:</p> <p>(i) Potential</p>	Appraisal	

		(ii) Container (iii) Report (iv) Seal		
			submit	
			Ship	
			Can	Correct
			Ocean	
C-Reasoning	16	<p>Each statement is followed by two assumptions which may or may not contain data that is presupposed by the statement. Choose the most appropriate option:</p> <p>Statement: Archeological excavations have to be done only by trained professionals since we cannot afford to lose any opportunity of knowing our ancestors better.</p> <p>Assumption I : In order to know our ancestors better we must identify sites where they lived and dig those sites.</p> <p>Assumption II : The objects our ancestors used, like pots and earthenware are our only means of knowing our ancestors.</p>	The statement presupposes either assumption I or assumption II	
			The statement presupposes neither assumption I nor assumption II	
			The statement presupposes only assumption I	Correct
			The statement presupposes only assumption II	
			The statement presupposes both assumption I and assumption II	
C-Reasoning	17	<p>Each statement is followed by two assumptions which may or may not contain data that is presupposed by the statement. Choose the most appropriate option:</p> <p>Statement : Interacting and working with people from diverse social backgrounds helps to foster a spirit of tolerance towards alternative points of view.</p> <p>Assumption I : People who live in homogeneous groups are likely to be less tolerant of dissenting voices.</p> <p>Assumption II : Tolerance of divergent viewpoints is a desirable value.</p>	The statement presupposes either assumption I or assumption II	
			The statement presupposes neither assumption I nor assumption II	Correct
			The statement presupposes only assumption I	
			The statement presupposes only assumption II	
			The statement presupposes both assumption I and assumption II	

C-Reasoning	18	<p>Each statement is followed by two assumptions which may or may not contain data that is presupposed by the statement. Choose the most appropriate option.</p> <p>Statement : Comic books aren't just escapist fantasy meant for entertainment, they are sophisticated social critiques that deal with serious issues of the day.</p> <p>Assumption I : Comic books are entertaining.</p> <p>Assumption II : Comic books criticize the people in power.</p>	The statement presupposes either assumption I or assumption II	
			The statement presupposes neither assumption I nor assumption II	
			The statement presupposes only assumption I	Correct
			The statement presupposes only assumption II	
			The statement presupposes both assumption I and assumption II	
C-Reasoning	19	<p>Each statement is followed by two assumptions which may or may not contain data that is presupposed by the statement. Choose the most appropriate option:</p> <p>Statement : Mr Das, CEO of XCOM said at the board meeting that promotions in the company should be based purely on merit and not on the basis of length of service.</p> <p>Assumption I : Merit is a measurable yardstick for promotion.</p> <p>Assumption II : Mr Das thinks that there are employees in his organization who have been around for many years but are not meritorious.</p>	The statement presupposes either assumption I or assumption II	
			The statement presupposes neither assumption I nor assumption II	Correct
			The statement presupposes only assumption I	
			The statement presupposes only assumption II	
			The statement presupposes both assumption I and assumption II	
C-Reasoning	20	<p>The Question comprises two statements followed by two conclusions I and II. Considering the two given statements to be true, identify the conclusion(s) that follow logically beyond any reasonable doubt from the information given in the statements and choose the most appropriate option.</p> <p>Statements :</p> <ol style="list-style-type: none"> 1. The asylum seekers were given entry only if they had valid identification documents and tested negative for all infections. 2. The news showed thousands of asylum seekers being turned away. <p>Conclusions :</p> <ol style="list-style-type: none"> I. All asylum seekers who had valid identification documents and tested negative for all infections were given entry. II. All woman asylum seekers who got entry had valid identification documents. 	Only conclusion I follows	

			Only conclusion II follows	Correct
			Either conclusion I or II follows	
			Neither conclusion I nor II follows	
			Both conclusions I and II follow	
C-Reasoning	21	<p>The Question comprises two statements followed by two conclusions I and II. Considering the two given statements to be true, identify the conclusion(s) that follow logically beyond any reasonable doubt from the information given in the statements and choose the most appropriate option.</p> <p>Statements :</p> <ol style="list-style-type: none"> 1. If I go to the market or to the mall then I will not go swimming. 2. The mall was so crowded that I did not dare to step in. <p>Conclusions :</p> <ol style="list-style-type: none"> I. I have either done my shopping at the market or gone swimming. II. If the market is also crowded then I will have gone swimming. 	Only conclusion I follows	
			Only conclusion II follows	
			Either conclusion I or II follows	
			Neither conclusion I nor II follows	Correct
			Both conclusions I and II follow	
C-Reasoning	22	<p>The Question comprises two statements followed by two conclusions I and II. Considering the two given statements to be true, identify the conclusion(s) that follow logically beyond any reasonable doubt from the information given in the statements and choose the most appropriate option.</p> <p>Statements :</p> <ol style="list-style-type: none"> 1. Many social projects which have so far relied on a few wealthy donors are now increasingly being sustained through crowdfunding. 2. But crowdfunding has its pitfalls too and people are not always aware of the legal regulations it entails <p>Conclusions :</p> <ol style="list-style-type: none"> I. A young documentary filmmaker, who has little legal knowledge, should approach traditional donors for funding rather than making an appeal for crowdfunding. 	Only conclusion I follows	

II. Crowdfunding is a novel method of getting social projects funded.

Only conclusion II follows Correct

Either conclusion I or II follows

Neither conclusion I nor II follows

Both conclusions I and II follow

C- Reasoning

23

The Question comprises two statements followed by two conclusions I and II. Considering the two given statements to be true, identify the conclusion(s) that follow logically beyond any reasonable doubt from the information given in the statements and choose the most appropriate option.

Statements :

1. None of the big brands have an online presence yet.
 2. Those brands having an online presence offer huge discounts.
- I. Big brands only have physical stores in which they do not offer huge discounts.

Conclusions :

- II. If a brand is offering a huge discount it must be having an online presence.

Only conclusion I follows

Only conclusion II follows

Either conclusion I or II follows

Neither conclusion I nor II follows

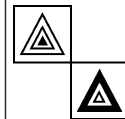

Correct

Both conclusions I and II follow


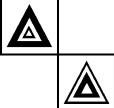
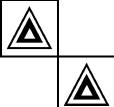
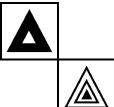








C- Reasoning

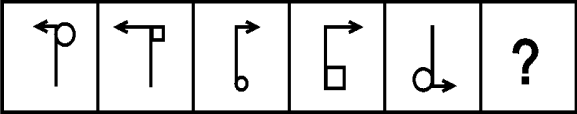
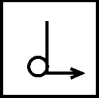
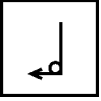
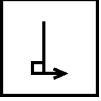
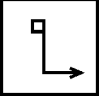
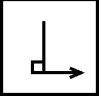
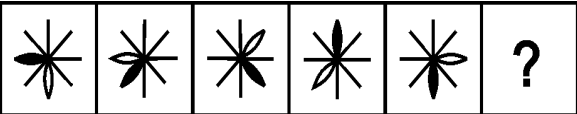

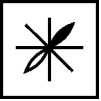


24



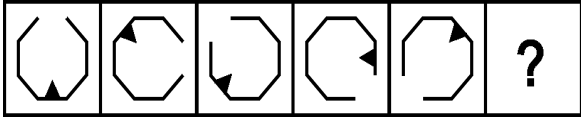


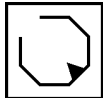
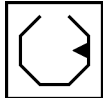

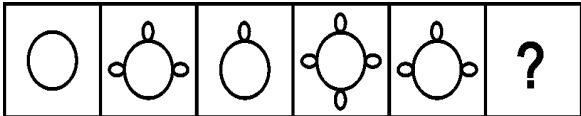
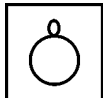
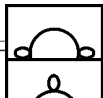
Find the missing figure:


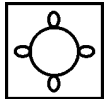
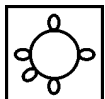


Correct

					
					
					
					
C-Reasoning	25	Find the missing figure:  is to :  as :  is to ?			
					
					Correct
					
					

C-Reasoning	26	<p>Find the missing figure:</p> 		
				
				
				
				Correct
C-Reasoning	27	<p>Find the missing figure:</p> 		
				
				Correct
				

				
				
C-Reasoning	28	<p>Find the missing figure:</p> 		
				Correct
				
				
				
C-Reasoning	29	<p>Find the missing figure:</p> 		
				

											
											
				Correct							
C- Reasoning	30	Find the missing figure: <table border="1" data-bbox="228 413 808 529"> <tr> <td>W</td> <td>M</td> <td>N</td> <td>N</td> <td>P</td> <td>?</td> </tr> </table>	W	M	N	N	P	?	<table border="1" data-bbox="1312 404 1416 504"> <tr> <td>P</td> </tr> </table>	P	
W	M	N	N	P	?						
P											
			<table border="1" data-bbox="1312 552 1416 651"> <tr> <td>q</td> </tr> </table>	q							
q											
			<table border="1" data-bbox="1312 749 1416 849"> <tr> <td>b</td> </tr> </table>	b							
b											
			<table border="1" data-bbox="1312 874 1416 974"> <tr> <td>d</td> </tr> </table>	d	Correct						
d											
			<table border="1" data-bbox="1312 999 1416 1099"> <tr> <td>W</td> </tr> </table>	W							
W											
D- General Awareness	1	CIA stands for	Criminal Investigation Agency								
			Criminal Investigating Authority								
			Central Investigation Agency								

			Central Intelligence Agency	Correct
D- General Awareness	2	'Asal Uttar' is related to	Uttar Pradesh	
			1965 Indo-Pak War	Correct
			1971 Indo-Pak War	
			Actions against Naxals	
D- General Awareness	3	'Bagdogra' is a place in which of the following Indian states ?	Manipur	
			Assam	
			West Bengal	Correct
			Sikkim	
D- General Awareness	4	Find the odd one out :	The Economic Times	
			The Financial Express	
			Business Standard	
			Business Line	Correct
D- General Awareness	5	In which year did the Battle of Plassey take place?	1752	
			1757	Correct
			1832	
			1857	
D- General Awareness	6	Project Vishwas was launched by _____ in India to restore the reputation of its flagship brand.	Cadbury's	Correct
			Pepsi	
			Maggi	
			Coke	
D- General Awareness	7	_____ was the first fortune 500 company where a woman CEO (Ursula M Burns) succeeded another woman CEO (Anne Mulcahy), launched its brand strategy with the slogan "Work can Work Better".	Xerox	Correct

			Philips									
			Lenovo									
			Dell									
D- General Awareness	8	"Scooby Snacks" in the business world means	Token compensation, generally non monetary, given as an award									
			Taken from the cartoon show Scooby doo where the heroic dog is given Scooby snacks									
			A brand marketed by Sunfast									
			Both option A & option B	Correct								
D- General Awareness	9	Noodles originated in _____.	Italy									
			Spain									
			China	Correct								
			Taiwan									
D- General Awareness	10	Match the following brands and sub brands <table border="1" data-bbox="228 763 618 865"> <tr> <td>A. Facebook</td> <td>1. Siri</td> </tr> <tr> <td>B. Apple</td> <td>2. Cortana</td> </tr> <tr> <td>C. Microsoft</td> <td>3. M</td> </tr> </table>	A. Facebook	1. Siri	B. Apple	2. Cortana	C. Microsoft	3. M	A-3; B-1; C-2	Correct		
A. Facebook	1. Siri											
B. Apple	2. Cortana											
C. Microsoft	3. M											
			A-1; B-3; C-2									
			A-2; B-1; C-3									
			A-1; B-2; C-3									
D- General Awareness	11	Who acquired whom? <table border="1" data-bbox="228 1119 670 1274"> <tr> <td>A. Facebook</td> <td>1. Freecharge</td> </tr> <tr> <td>B. Flipkart</td> <td>2. Jabong</td> </tr> <tr> <td>C. Snapdeal</td> <td>3. WhatsApp</td> </tr> <tr> <td>D. Amazon</td> <td>4. Myntra</td> </tr> </table>	A. Facebook	1. Freecharge	B. Flipkart	2. Jabong	C. Snapdeal	3. WhatsApp	D. Amazon	4. Myntra	A-3; B-4; C-1; D-2	Correct
A. Facebook	1. Freecharge											
B. Flipkart	2. Jabong											
C. Snapdeal	3. WhatsApp											
D. Amazon	4. Myntra											

A-4; B-3; C-1; D-2

A-2; B-3; C-4; D-1

A-3; B-2; C-1; D-4

D- General Awareness

12

Match the following brand names with logos:

A Tata

1.



B Titan

2.



C Jaguar

3.



D Puma

4.



A-4; B-3; C-1; D-2

Correct

A-3; B-4; C-1; D-2

A-4; B-3; C-2; D-1

A-3; B-4; C-1; D-2

D- General Awareness

13

Match the following companies with brand:

A. ITC	1. Knorr
B. Nestle	2. Kitkat
C. Unilever	3. Top Ramen
D. Nissin	4. Bingo

A-4; B-2; C-1; D-3

Correct

A-1; B-3; C-2; D-4

A-2; B-3; C-1; D-4

A-4; B-1; C-3; D-2

D- General Awareness	14	<p>Match the following:</p> <table border="1" data-bbox="232 138 659 294"> <tbody> <tr> <td>A. Dove</td> <td>1. Marshmallow</td> </tr> <tr> <td>B. Google</td> <td>2. Real Beauty</td> </tr> <tr> <td>C. FastTrack</td> <td>3. Alphabet</td> </tr> <tr> <td>D. Android</td> <td>4. Tata</td> </tr> </tbody> </table>	A. Dove	1. Marshmallow	B. Google	2. Real Beauty	C. FastTrack	3. Alphabet	D. Android	4. Tata	A-2; B-3; C-4; D-1	Correct
A. Dove	1. Marshmallow											
B. Google	2. Real Beauty											
C. FastTrack	3. Alphabet											
D. Android	4. Tata											
			A-1; B-4; C-3; D-2									
			A-3; B-2; C-1; D-4									
			A-3; B-4; C-1; D-2									
D- General Awareness	15	<p>Match the following companies with brand:</p> <table border="1" data-bbox="232 567 649 723"> <tbody> <tr> <td>A. HUL</td> <td>1. Real</td> </tr> <tr> <td>B. P&G</td> <td>2. Cinthol</td> </tr> <tr> <td>C. Dabur</td> <td>3. Tide</td> </tr> <tr> <td>D. Godrej</td> <td>4. Rin</td> </tr> </tbody> </table>	A. HUL	1. Real	B. P&G	2. Cinthol	C. Dabur	3. Tide	D. Godrej	4. Rin	A-4; B-3; C-1; D-2	Correct
A. HUL	1. Real											
B. P&G	2. Cinthol											
C. Dabur	3. Tide											
D. Godrej	4. Rin											
			A-1; B-2; C-4; D-3									
			A-2; B-3; C-4; D-1									
			A-2; B-4; C-1; D-3									
D- General Awareness	16	<p>Match the following:</p> <table border="1" data-bbox="232 982 597 1138"> <tbody> <tr> <td>A. Twitter</td> <td>1. Filter</td> </tr> <tr> <td>B. Facebook</td> <td>2. Vine</td> </tr> <tr> <td>C. Instagram</td> <td>3. Pulse</td> </tr> <tr> <td>D. LinkedIn</td> <td>4. California</td> </tr> </tbody> </table>	A. Twitter	1. Filter	B. Facebook	2. Vine	C. Instagram	3. Pulse	D. LinkedIn	4. California	A-2; B-4; C-1; D-3	Correct
A. Twitter	1. Filter											
B. Facebook	2. Vine											
C. Instagram	3. Pulse											
D. LinkedIn	4. California											
			A-2; B-3; C-1; D-4									
			A-1; B-3; C-2; D-4									
			A-1; B-4; C-3; D-2									

D- General Awareness	17	_____ is a website and a social media App that uses social media analytics to rank its users according to their online social influence.	Quora									
			Pinterest									
			Klout	Correct								
			Twitter									
D- General Awareness	18	ASCI stands for _____	Advertising Standards Council of India	Correct								
			Association of Scientific Committee of India									
			Advertising Society Congress of India									
			Advertising Scholarship Council of India									
D- General Awareness	19	Vistara is a joint venture between Tata Sons and _____.	Singapore Airlines	Correct								
			Virgin Airlines									
			Indigo Airlines									
			Air France									
D- General Awareness	20	Match the following: <table border="1" data-bbox="228 861 646 1018"> <tr> <td>A. Britannia</td> <td>1. Milo</td> </tr> <tr> <td>B. Sunfeast</td> <td>2. Jim Jam</td> </tr> <tr> <td>C. Parle</td> <td>3. Yippie</td> </tr> <tr> <td>D. Nestle</td> <td>4. Frooti</td> </tr> </table>	A. Britannia	1. Milo	B. Sunfeast	2. Jim Jam	C. Parle	3. Yippie	D. Nestle	4. Frooti	A-2; B-3; C-4; D-1	Correct
A. Britannia	1. Milo											
B. Sunfeast	2. Jim Jam											
C. Parle	3. Yippie											
D. Nestle	4. Frooti											
			A-4; B-3; C-2; D-1									
			A-3; B-4; C-2; D-1									
			A-2; B-4; C-1; D-3									
D- General Awareness	21	Times of India group's radio business is known as _____.	Radio Mirchi	Correct								
			Radio City									

			Red FM									
			Radio One									
D- General Awareness	22	The white doughboy is the brand mascot of _____.	Brittania									
			Oreo									
			Monginis									
			Pillsbury	Correct								
D- General Awareness	23	Myntra's campaign 'Bold & Beautiful' was supported by the ethnic readywear brand called _____.	Biba									
			Anouk	Correct								
			Aneri									
			Fabindia									
D- General Awareness	24	Zomato is a _____.	Chat App									
			GPS App									
			Food Related App	Correct								
			Social Network									
D- General Awareness	25	Match the following: <table border="1" data-bbox="228 921 724 1072"> <tr> <td>A. Piyush Pandey</td> <td>1.McCann</td> </tr> <tr> <td>B. Prasoon Joshi</td> <td>2.Parle</td> </tr> <tr> <td>C. Naina Lal Kidwai</td> <td>3.Ogilvy</td> </tr> <tr> <td>D. Schauna Chauhan Saluja</td> <td>4.HSBC</td> </tr> </table>	A. Piyush Pandey	1.McCann	B. Prasoon Joshi	2.Parle	C. Naina Lal Kidwai	3.Ogilvy	D. Schauna Chauhan Saluja	4.HSBC	A-3; B-1; C-4; D-2	Correct
A. Piyush Pandey	1.McCann											
B. Prasoon Joshi	2.Parle											
C. Naina Lal Kidwai	3.Ogilvy											
D. Schauna Chauhan Saluja	4.HSBC											
			A-1; B-4; C-2; D-3									
			A-2; B-3; C-1; D-4									
			A-2; B-4; C-1; D-3									
		<i>Read the passages and give the answer of the question:</i> Far from being the opposite of the secular and the modern, "caste"-as both politicians and anthropologists have deployed the term- is a complicated and messy product of										

E- Verbal Ability	1	<p>them. Linking the everyday negotiations of caste and secularism to the languages and repertoires of state policy discourse, I examine caste within the larger horizon of secular, democratic citizenship within India rather than posit caste as a “traditional” practice anachronistically persisting within modern India, as much literature has done, I situate caste as a site of contestation at the fault lines between notions of the public and private, tradition and modernity, the religious and the secular. In this sense, a critical ethnography of caste entails attention to caste, understood as a relational identity marker, as it gets produced and contested within one important field of discourse and practice that constitutes it, namely secularism (see Dhadeshwar, 1993). A larger normative debate about limits and possibilities of secularism within India begs for an exploration of the everyday cultural politics of secularism in the institutional spaces of Indian modernity, such as that of a college. Educational institutions are key sites for embodying the contradictory dynamics of Indian secularism. The everyday cultural politics of caste, religion, and community within a putatively secular space illuminates the educational processes through which modern, secular citizens are produced in globalizing India. Debates and transformations in academic theories of caste have been entangled with the contested presence of caste within modern India. Early anthropological studies of caste in India have usually studied it as a form of “tradition” and/or “religion”. The privatization of religion and tradition and its expulsion from the secular spaces of the state, democratic politics, and civil society is a cornerstone of definitions of modernity. It is this understanding of the religious and the secular, the modern and nonmodern, that has underwritten the dominant understanding of the Hindu caste system as decidedly “not modern” within the anthropology of South Asia.</p> <p>(From Liberalizations of Children: Gender, Youth, and Consumer Citizenship in Globalizing India by Rittie A. Lukose)</p> <p><i>Read the statements below and choose the most appropriate option:</i></p> <ol style="list-style-type: none"> 1. Caste is a “traditional” practice anachronistically persisting within modern India. (Wrong) 2. Educational institutions are key sites for embodying the contradictory dynamics of Indian secularism. (Right) 3. The privatization of religion and tradition and its expulsion from the secular spaces of the state is a cornerstone of definitions of modernity. (Right) 	All the above statements are correct.							
			(1) and (2) are correct.							
			(1) is wrong while (3) is correct	Correct						
			(1) is correct while (2) and (3) are wrong.							
E- Verbal Ability	2	<p><i>Read the passages and give the answer of the question:</i></p> <p>Far from being the opposite of the secular and the modern, “caste”-as both politicians and anthropologists have deployed the term- is a complicated and messy product of them. Linking the everyday negotiations of caste and secularism to the languages and repertoires of state policy discourse, I examine caste within the larger horizon of secular, democratic citizenship within India rather than posit caste as a “traditional” practice anachronistically persisting within modern India, as much literature has done, I situate caste as a site of contestation at the fault lines between notions of the public and private, tradition and modernity, the religious and the secular. In this sense, a critical ethnography of caste entails attention to caste, understood as a relational identity marker, as it gets produced and contested within one important field of discourse and practice that constitutes it, namely secularism (see Dhadeshwar, 1993). A larger normative debate about limits and possibilities of secularism within India begs for an exploration of the everyday cultural politics of secularism in the institutional spaces of Indian modernity, such as that of a college. Educational institutions are key sites for embodying the contradictory dynamics of Indian secularism. The everyday cultural politics of caste, religion, and community within a putatively secular space illuminates the educational processes through which modern, secular citizens are produced in globalizing India. Debates and transformations in academic theories of caste have been entangled with the contested presence of caste within modern India. Early anthropological studies of caste in India have usually studied it as a form of “tradition” and/or “religion”. The privatization of religion and tradition and its expulsion from the secular spaces of the state, democratic politics, and civil society is a cornerstone of definitions of modernity. It is this understanding of the religious and the secular, the modern and nonmodern, that has underwritten the dominant understanding of the Hindu caste system as decidedly “not modern” within the anthropology of South Asia.</p> <p>(From Liberalizations of Children: Gender, Youth, and Consumer Citizenship in Globalizing India by Rittie A. Lukose)</p> <p>Match the words with their closest meanings.</p> <table border="1" data-bbox="228 1036 816 1153"> <tr> <td>x. Normative</td> <td>1. Deriving from a standard</td> </tr> <tr> <td>y. Putative</td> <td>2. Proceedings by argument or reasoning</td> </tr> <tr> <td>z. Discursive</td> <td>3. Generally reputed to be</td> </tr> </table>	x. Normative	1. Deriving from a standard	y. Putative	2. Proceedings by argument or reasoning	z. Discursive	3. Generally reputed to be	x-1; y-3; z-2	Correct
x. Normative	1. Deriving from a standard									
y. Putative	2. Proceedings by argument or reasoning									
z. Discursive	3. Generally reputed to be									
			x-2; y-1; z-3							
			x-3; y-2; z-1							
			x-1; y-2; z-3							

E- Verbal Ability	3	<p>Read the passages and give the answer of the question:</p> <p>Far from being the opposite of the secular and the modern, “caste”-as both politicians and anthropologists have deployed the term- is a complicated and messy product of them. Linking the everyday negotiations of caste and secularism to the languages and repertoires of state policy discourse, I examine caste within the larger horizon of secular, democratic citizenship within India rather than posit caste as a “traditional” practice anachronistically persisting within modern India, as much literature has done, I situate caste as a site of contestation at the fault lines between notions of the public and private, tradition and modernity, the religious and the secular. In this sense, a critical ethnography of caste entails attention to caste, understood as a relational identity marker, as it gets produced and contested within one important field of discourse and practice that constitutes it, namely secularism (see Dhreshwar, 1993). A larger normative debate about limits and possibilities of secularism within India begs for an exploration of the everyday cultural politics of secularism in the institutional spaces of Indian modernity, such as that of a college. Educational institutions are key sites for embodying the contradictory dynamics of Indian secularism. The everyday cultural politics of caste, religion, and community within a putatively secular space illuminates the educational processes through which modern, secular citizens are produced in globalizing India. Debates and transformations in academic theories of caste have been entangled with the contested presence of caste within modern India. Early anthropological studies of caste in India have usually studied it as a form of “tradition” and/or “religion”. The privatization of religion and tradition and its expulsion from the secular spaces of the state, democratic politics, and civil society is a cornerstone of definitions of modernity. It is this understanding of the religious and the secular, the modern and nonmodern, that has underwritten the dominant understanding of the Hindu caste system as decidedly “not modern” within the anthropology of South Asia.</p> <p>(From Liberalizations of Children: Gender, Youth, and Consumer Citizenship in Globalizing India by Rittie A. Lukose)</p> <p>The passage can be best described as</p>	A rejection of caste system in India.	
			Critical attention to caste as a relationship identity marker in modern India.	Correct
			A study of caste as a form of tradition.	
			An overt debate about secularism in India.	
E- Verbal Ability	4	<p>Read the passages and give the answer of the question:</p> <p>Far from being the opposite of the secular and the modern, “caste”-as both politicians and anthropologists have deployed the term- is a complicated and messy product of them. Linking the everyday negotiations of caste and secularism to the languages and repertoires of state policy discourse, I examine caste within the larger horizon of secular, democratic citizenship within India rather than posit caste as a “traditional” practice anachronistically persisting within modern India, as much literature has done, I situate caste as a site of contestation at the fault lines between notions of the public and private, tradition and modernity, the religious and the secular. In this sense, a critical ethnography of caste entails attention to caste, understood as a relational identity marker, as it gets produced and contested within one important field of discourse and practice that constitutes it, namely secularism (see Dhreshwar, 1993). A larger normative debate about limits and possibilities of secularism within India begs for an exploration of the everyday cultural politics of secularism in the institutional spaces of Indian modernity, such as that of a college. Educational institutions are key sites for embodying the contradictory dynamics of Indian secularism. The everyday cultural politics of caste, religion, and community within a putatively secular space illuminates the educational processes through which modern, secular citizens are produced in globalizing India. Debates and transformations in academic theories of caste have been entangled with the contested presence of caste within modern India. Early anthropological studies of caste in India have usually studied it as a form of “tradition” and/or “religion”. The privatization of religion and tradition and its expulsion from the secular spaces of the state, democratic politics, and civil society is a cornerstone of definitions of modernity. It is this understanding of the religious and the secular, the modern and nonmodern, that has underwritten the dominant understanding of the Hindu caste system as decidedly “not modern” within the anthropology of South Asia.</p> <p>(From Liberalizations of Children: Gender, Youth, and Consumer Citizenship in Globalizing India by Rittie A. Lukose)</p> <p>According to the author, what is the dominant understanding of Hindu caste system within the anthropology of South Asia?</p>	The caste is not a site of contestation.	
			The caste system is not modern and deserves expulsion from the secular spaces.	Correct
			The caste system is a complicated and messy product of the secular and modern.	
			Educational institutions are key sites for understanding	

			key sites for understanding the caste system.	
E- Verbal Ability	5	<p>Read the passages and give the answer of the question:</p> <p>Far from being the opposite of the secular and the modern, “caste”—as both politicians and anthropologists have deployed the term— is a complicated and messy product of them. Linking the everyday negotiations of caste and secularism to the languages and repertoires of state policy discourse, I examine caste within the larger horizon of secular, democratic citizenship within India rather than posit caste as a “traditional” practice anachronistically persisting within modern India, as much literature has done, I situate caste as a site of contestation at the fault lines between notions of the public and private, tradition and modernity, the religious and the secular. In this sense, a critical ethnography of caste entails attention to caste, understood as a relational identity marker, as it gets produced and contested within one important field of discourse and practice that constitutes it, namely secularism (see Dhareshwar, 1993). A larger normative debate about limits and possibilities of secularism within India begs for an exploration of the everyday cultural politics of secularism in the institutional spaces of Indian modernity, such as that of a college. Educational institutions are key sites for embodying the contradictory dynamics of Indian secularism. The everyday cultural politics of caste, religion, and community within a putatively secular space illuminates the educational processes through which modern, secular citizens are produced in globalizing India. Debates and transformations in academic theories of caste have been entangled with the contested presence of caste within modern India. Early anthropological studies of caste in India have usually studied it as a form of “tradition” and/or “religion”. The privatization of religion and tradition and its expulsion from the secular spaces of the state, democratic politics, and civil society is a cornerstone of definitions of modernity. It is this understanding of the religious and the secular, the modern and nonmodern, that has underwritten the dominant understanding of the Hindu caste system as decidedly “not modern” within the anthropology of South Asia.</p> <p>(From <i>Liberalizations of Children: Gender, Youth, and Consumer Citizenship in Globalizing India</i> by Rittie A. Lukose)</p> <p>Why are colleges appropriate spaces for exploring the larger debate about limits and possibilities of secularism within India?</p>	Colleges are key sites for everyday cultural politics of secularism in globalizing India.	Correct
			Colleges are the sites of modernity in a traditional country like India.	
			College education is important for eradicating caste system in India.	
			India has retained its secular nature because of college educated population that opposes traditions like caste system.	
E- Verbal Ability	6	<p>In the following sentence, parts of the sentence have been left blank. Beneath each sentence, four different ways of completing the sentence are indicated. From among the given choices choose the best alternative.</p> <p>Kerala’s writers, poets and thinkers did not inhabit solitary _____, cut off from the outside world, or _____ themselves from the onus of being in conversation with the public.</p>	Silos, insulating	Correct
			Shells, insulting	
			Homes, excusing	
			Islands, expressing	
E- Verbal Ability	7	<p>In the following sentence, parts of the sentence have been left blank. Beneath each sentence, four different ways of completing the sentence are indicated. From among the given choices choose the best alternative.</p> <p>Like the hungry person who orders more food at dinner than they will ultimately want, forecasters have a tendency to take something that is _____ today, and assume that it will play an _____ role in the future.</p>	Silent, idiotic	
			Salient, outsized	Correct
			Quiescent, entertain	
			Free-wheeling, inexcusable	

E- Verbal Ability	8	In the following sentence, parts of the sentence have been left blank. Beneath each sentence, four different ways of completing the sentence are indicated. From among the given choices choose the best alternative. Understood as a _____ block of passively internalized norms transmitted by socialization and _____ by tradition, culture was normally seen as inhibiting individuals.	Curious, fetichised	
			Concrete, author	
			Meandering, augmented	
			Monolithic, canonized	Correct
E- Verbal Ability	9	In the following sentence, parts of the sentence have been left blank. Beneath each sentence, four different ways of completing the sentence are indicated. From among the given choices choose the best alternative. The government was forced to introduce an _____ limiting the unrestrained _____ of elected officers.	Article, Judgment	
			Amendment, powers	Correct
			Advertisement, reforms	
			Act, extradition	
E- Verbal Ability	10	In the following sentence, parts of the sentence have been left blank. Beneath each sentence, four different ways of completing the sentence are indicated. From among the given choices choose the best alternative. How do you create jobs for women in a place where their travel and employment is restricted, _____ about their abilities severely limited, a banking system is lacking, and getting paid in cash can _____ their lives?	iconic ideas, improve	
			prevailing views, jeopardize	Correct
			various dealings, augment	
			mind-sets, perfection	
E- Verbal Ability	11	Choose from among the alternatives below and provide the answer closest in meaning to the highlighted word or phrase in the given sentence. A well functioning democracy needs a strong civil society , one that is supported by active citizens' groups as well as by charitable institutions.	Government bodies	
			Non-governmental bodies	
			'Third sector' (distinct from governments and businesses)	Correct
			Educational bodies	
E- Verbal Ability	12	Choose from among the alternatives below and provide the answer closest in meaning to the highlighted word or phrase in the given sentence. The role of philanthropy as a catalyst is extremely important – by providing independent private resources as seed funds, it acts as an incubator for innovation.	Hindrance	
			Director	
			Funder	

			Precipitator	Correct
E- Verbal Ability	13	Choose from among the alternatives below and provide the answer closest in meaning to the highlighted word or phrase in the given sentence. We can already see its effects in cities like Mumbai, where the discourse of purity and pollution around what you eat is so powerful that certain groups are denied access to the housing market on account of their dietary preferences.	Explanation	
			Communication	Correct
			Authority	
			Conditions	
E- Verbal Ability	14	Choose from among the alternatives below and provide the answer closest in meaning to the highlighted word or phrase in the given sentence. De Haven reconfigured not only how we think about public safety, but also how we think about public health writ large .	Clearly and obviously	Correct
			Meditatively	
			Doubtfully	
			Endemically	
E- Verbal Ability	15	Choose from among the alternatives below and provide the answer closest in meaning to the highlighted word or phrase in the given sentence. A piece by Francis Fukuyama makes the argument for Western liberal democracy as a kind of endpoint of societal evolution.	Freedom	
			Process	
			Apogee	Correct
			Opening	
E- Verbal Ability	16	Each question has four sentences. Arrange the four sentences in a logical sequence. Choose the most appropriate sequence from the options given: a) with the moral and ascetic norms of the English professional middle class. b) the question of sustaining the particular ethical and political commitments of a religious life was a challenge for the young Sacks, c) and given the entwining of his family's learned German-Jewish religiosity d) if in distinct ways at mid-century,	d-b-a-c	
			a-d-c-b	
			b-d-c-a	Correct
			c-a-d-b	
		Each question has four sentences. Arrange the four sentences in a logical sequence. Choose the most appropriate sequence from the options given:		

E- Verbal Ability	17	<p>a) developing his theories on the origins of classical Indian poetics</p> <p>b) (“A mere princeling,” he apologises, “and rather more - ling than prince”),</p> <p>c) Professor Toby Ketu is the last maharaja of a remote northern province</p> <p>d) who has spent more time on the international lecture circuit than in his ancestral lands</p>	c-b-d-a	Correct
			b-a-d-c	
			d-a-b-c	
			a-c-d-b	
E- Verbal Ability	18	<p>Each question has four sentences. Arrange the four sentences in a logical sequence. Choose the most appropriate sequence from the options given:</p> <p>a) - are multiplied by the impact of increasing modern development,</p> <p>b) in developing countries, these relative cohort size effects -</p> <p>c) the reduction in young males' relative income and increase in their unemployment rate</p> <p>d) especially the rising level of women's education.</p>	c-d-b-a	
			b-c-a-d	Correct
			a-b-c-d	
			d-a-b-c	
E- Verbal Ability	19	<p>Each question has four sentences. Arrange the four sentences in a logical sequence. Choose the most appropriate sequence from the options given:</p> <p>a) millions of years separate seahorses from other mammals, reptiles, and even live-bearing fish:</p> <p>b) a pregnant seahorse father still undergoes similar bodily changes as a pregnant woman</p> <p>c) despite independent evolution</p> <p>d) while giving birth has evolved again and again more than 150 times in vertebrates,</p>	c-a-b-d	
			b-a-d-c	
			a-d-c-b	Correct
			d-b-c-a	
		<p>Each question has four sentences. Arrange the four sentences in a logical sequence. Choose the most appropriate sequence from the options given:</p>		

E- Verbal Ability	20	<p>a) - the backward look is distorted so that technologies are rendered prematurely obsolete.</p> <p>b) in the same way that our focus on recent innovations causes people to overemphasize their importance,</p> <p>c) to see them as hastening a radically transformed future -</p> <p>d) like Google Glass was supposed to</p>	b-c-d-a	Correct
			c-a-d-b	
			a-b-d-c	
			d-b-a-c	
E- Verbal Ability	21	<p>Which of the phrases below each sentence should replace the word/phrase printed in bold in the sentence to make it grammatically correct? If the sentence is correct as it is given and no correction is required, then select No Correction Required.</p> <p>The consultant declined to take any more new projects because he had a handful already</p>	His hands were filled up	
			He had fill hands	
			He filled his hands	
			No correction required	Correct
E- Verbal Ability	22	<p>Which of the phrases below each sentence should replace the word/phrase printed in bold in the sentence to make it grammatically correct? If the sentence is correct as it is given and no correction is required, then select No Correction Required.</p> <p>In Christian weddings traditionally the father gives the bride up.</p>	Gives in to the bride	
			Gives the bride away	Correct
			Gives the bride	
			No correction required	
E- Verbal Ability	23	<p>Which of the phrases below each sentence should replace the word/phrase printed in bold in the sentence to make it grammatically correct? If the sentence is correct as it is given and no correction is required, then select No Correction Required.</p> <p>I cannot make it to the award ceremony.</p>	Make it up	
			Make up	
			Make up to	
			No correction required	Correct
E- Verbal Ability	24	<p>For each underlined words below, a contextual usage is provided. Pick the most appropriate word from the alternatives in the given context.</p> <p>The rigidity of the members of parliament was responsible for <u>holding</u> the decision on the amendment.</p>	Holding away	
			Holding in	

			Holding up	Correct
			No correction required	
E- Verbal Ability	25	For each underlined words below, a contextual usage is provided. Pick the most appropriate word from the alternatives in the given context. Looking at the mischief you have created the principal cannot let you <u>offhook</u> so easily.	Off the hook	Correct
			Hook off	
			Hook up	
			No correction required	
F- Quantitative Ability	1	Mrs. Laxmi Yadav invested a certain amount of money in Debt and Equity Funds in the ratio of 4 : 5. At the end of one year, she earned a total dividend of 30% on her investment. After one year, she reinvested the amount including the dividend in the ratio of 6 : 7 in Debt and Equity Funds. If the amount reinvested in Equity Funds was Rs.94,500, what was the original amount invested in Equity Funds?	Rs. 75,000	Correct
			Rs. 81,000	
			Rs. 60,000	
			Rs. 65,000	
F- Quantitative Ability	2	The age of the mother is 30 years more than her daughter's age. Ten years hence, the mother's age will become three times the daughter's age at that time. What is the daughter's present age in years?	Eight	
			Seven	
			Five	Correct
			None of these	
F- Quantitative Ability	3	In a class of 80 students, 40% of the students play cricket, 50% play football and 30% play table tennis. If 5 students play both football and table tennis but not cricket, what is the maximum possible number of students that play both cricket and table tennis?	11	
			19	Correct
			21	
			24	
F- Quantitative Ability	4	A table at a certain store normally costs Rs 5000 per unit. During a sale, the store offers one free table with the purchase of every 4 tables. Jamna wants to purchase 7 tables and Kalyan wants to purchase 8 tables. During the sale, how much money will Jamna save if she purchases the tables with Kalyan instead of purchasing them alone?	2000	Correct

			3000	
			5000	
			6000	
F- Quantitative Ability	5	A mixture of 50 litres of juice contains 10% of Orange juice and the rest as Mango juice. How much Orange juice must be added so that Orange juice becomes 20% of the new mixture?	5.5 litres	
			5.25 litres	
			6.25 litres	Correct
			None of these	
F- Quantitative Ability	6	The average marks obtained by 130 candidates were 48, while the average marks of those who passed were 56 and those who failed were 32. How many students passed the examination?	60	
			80	
			70	
			None of these	Correct
F- Quantitative Ability	7	The value $\frac{(0.5)^4 - (0.4)^4}{(0.5)^2 + (0.4)^2}$ is equal to :	0.9	
			9.009	
			0.09	Correct
			0.08	
F- Quantitative Ability	8	Which one of the following groups is in descending order ?	$\frac{14}{15}, \frac{23}{25}, \frac{19}{21}$	Correct
			$\frac{14}{15}, \frac{19}{21}, \frac{23}{25}$	
			$\frac{23}{25}, \frac{14}{15}, \frac{19}{21}$	
			$\frac{23}{25}, \frac{19}{21}, \frac{14}{15}$	

F-
Quantitative
Ability

9

Mr. Francis, the head mechanic at a workshop, was a worried man. He had noticed that all his 18 assistants were regularly coming to the workshop late. Therefore, he introduced a condition that, in any month, the first late entry would be pardoned. For 2, 3 or 4 late entries in a month, there would be a salary cut of 2%. For the next three late entries, i.e., 5, 6 or 7 times, a further 2% salary would be cut, and so on. The following table gives the number of days for which each of the eighteen assistants - A through R - came late in each of the first six months of the year 2006. The workshop is closed for four days every month, and none of the mechanics was absent for a single day during this period.

Mechanic ->	A	B	C	D	E	F	G	H	I	J	K	L	M	N	O	P	Q	R	
Month	Jan	07	05	15	09	12	05	12	13	07	06	15	01	18	14	10	09	03	05
	Feb	13	14	12	07	11	06	11	15	06	07	07	12	09	08	11	07	07	03
	Mar	08	10	07	10	11	10	11	08	05	08	13	12	08	16	08	05	02	06
	Apr	11	16	13	08	09	09	09	10	06	13	07	11	05	09	04	08	05	04
	May	15	09	14	12	14	08	07	07	05	07	08	08	06	08	03	06	02	07
	Jun	17	10	08	15	14	07	08	12	14	12	17	13	10	15	12	08	11	12

The number of days during the given period that both D and I reported to work on time is at least _____ ?

43

51

56

Correct

59

F-
Quantitative
Ability

10

I called customer service for my broadband connection. I had two options (English or Hindi) to choose from. Having chosen the language, there were 4 options for selecting the service. Each of these four options had three options to choose for final service. If I call customer service, how many options are available to choose the required service?

18

24

Correct

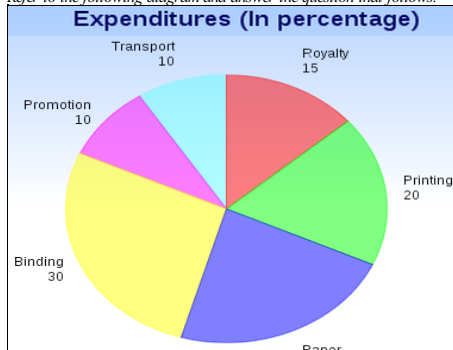
12

None of these

F-
Quantitative
Ability

11

Refer to the following diagram and answer the question that follows.



Rs. 21,500

If for an edition of a book, the cost of paper is Rs. 56250, then find the promotion cost for this edition?

			Rs. 22,300	
			Rs. 22,500	Correct
			Rs. 22,700	
F- Quantitative Ability	12	An area 1000 cm long and 450 cm wide is to be laid with rectangular stones of 10 cm × 15 cm. How many stones will be needed to cover the entire area?	1500	
			3000	Correct
			2500	
			None of these	
F- Quantitative Ability	13	XYZ Ltd. produces component 'P'. During January, the production of 'P' was 2000 units, and the rejection rate was 5%. Production increased by 20% during February, but there was also a 5% increase in rejections. During March, the total number of acceptable components produced was 180 units less than during February, though there was no change in the percentage of rejections. What was the acceptable quantity of component 'P' during January?	2100	
			2040	
			1900	Correct
			2160	
F- Quantitative Ability	14	XYZ Ltd. produces component 'P'. During January, the production of 'P' was 2000 units, and the rejection rate was 5%. Production increased by 20% during February, but there was also a 5% increase in rejections. During March, the total number of acceptable components produced was 180 units less than during February, though there was no change in the percentage of rejections. If 50% of the rejected quantity was reworked, during which month did the company have the highest production of acceptable components?	March	
			January	
			February	Correct
			Insufficient Data	
F- Quantitative Ability	15	In their promotional campaign, Readers Digest distributed coupons with numbers 1 to 1000 to those who bought half-yearly subscriptions, and coupons with numbers 1 to 500 to those who subscribed for the whole year. At the end of the campaign, it was decided to send special gifts to those who had coupon numbers divisible by both 8 and 9. How many of the half-yearly subscribers were not awarded the special gift?	967	

			977	
			987	Correct
			897	
F- Quantitative Ability	16	In their promotional campaign, Readers Digest distributed coupons with numbers 1 to 1000 to those who bought half-yearly subscriptions, and coupons with numbers 1 to 500 to those who subscribed for the whole year. At the end of the campaign, it was decided to send special gifts to those who had coupon numbers divisible by both 8 and 9. How many yearly subscribers were awarded special gifts?	6	Correct
			5	
			7	
			None of these	
F- Quantitative Ability	17	If $2^{32} + 1$ is exactly divisible by 641, which one of the following is also divisible by 641?	$2^{18} + 1$	
			$2^{96} + 1$	Correct
			$2^{16} + 1$	
			$7.2^{33} + 1$	
F- Quantitative Ability	18	$\frac{8.73 \times 8.73 \times 8.73 + 4.27 \times 4.27 \times 4.27}{8.73 \times 8.73 - 8.73 \times 4.27 + 4.27 \times 4.27}$ is equal to :	11	
			13	Correct
			$1\frac{4}{7}$	
			$9\frac{1}{11}$	
F- Quantitative Ability	19	Three bells are rung together. They are then rung after every 2, 3 and 4 minutes respectively. After how many minutes will they ring together again?	15	
			24	
			12	Correct

			60																															
F- Quantitative Ability	20	Let $a = 2 + 2\sqrt{7}$ and $b = \sqrt{5} + 3\sqrt{3}$ Comparing a and b,	$a = b$																															
			$a > b$																															
			$b > a$	Correct																														
			None of these																															
F- Quantitative Ability	21	A private caterer Mr. Mishra had received an order for two types of cakes: Pineapple and Carrot. He had to supply the cakes in 8 hours. Each pineapple cake required 4 eggs and 40 minutes of baking time. Each carrot cake required 2 eggs and 40 minutes of baking time. If Mr. Mishra has 30 eggs then how many cakes of each type can he bake in 8 hours?	Pineapple : 4, Carrot : 8																															
			Pineapple : 3, Carrot : 9	Correct																														
			Pineapple : 6, Carrot : 5																															
			Pineapple : 7, Carrot : 5																															
F- Quantitative Ability	22	Considering the many complaints they received, a telecom company decided to find out the facts about dropped-calls on mobile phones. To begin with, data was analyzed for three cities: X, Y and Z. It was recorded that dropped-calls in city X were 50 % more compared to city Y, and 486 dropped-calls less than city Z. City Y had 8% more of dropped-calls than city Z. Find the total number of dropped-calls in the three cities during the study.	400																															
			500																															
			600																															
			486	Correct																														
F- Quantitative Ability	23	<p>Growth patterns of Indian Healthcare Industry</p> <table border="0"> <tr> <td></td> <td style="text-align: center;">2006</td> <td style="text-align: center;">2012</td> </tr> <tr> <td>Market Size (Rs. in crores)</td> <td style="text-align: center;">1,53,330</td> <td style="text-align: center;">3,53,700</td> </tr> <tr> <td>Category</td> <td style="text-align: center;">2006</td> <td style="text-align: center;">2012</td> </tr> <tr> <td>Infrastructure</td> <td style="text-align: center;">14%</td> <td style="text-align: center;">14%</td> </tr> <tr> <td>Medical Equipment</td> <td style="text-align: center;">6%</td> <td style="text-align: center;">6%</td> </tr> <tr> <td>Bed revenues</td> <td style="text-align: center;">35%</td> <td style="text-align: center;">36%</td> </tr> <tr> <td>Pharmaceuticals</td> <td style="text-align: center;">17%</td> <td style="text-align: center;">15%</td> </tr> <tr> <td>Health Insurance</td> <td style="text-align: center;">2%</td> <td style="text-align: center;">5%</td> </tr> <tr> <td>Health Outsourcing</td> <td style="text-align: center;">11%</td> <td style="text-align: center;">9%</td> </tr> <tr> <td>Medical Value Travel</td> <td style="text-align: center;">1%</td> <td style="text-align: center;">2%</td> </tr> </table>		2006	2012	Market Size (Rs. in crores)	1,53,330	3,53,700	Category	2006	2012	Infrastructure	14%	14%	Medical Equipment	6%	6%	Bed revenues	35%	36%	Pharmaceuticals	17%	15%	Health Insurance	2%	5%	Health Outsourcing	11%	9%	Medical Value Travel	1%	2%	75%	
	2006	2012																																
Market Size (Rs. in crores)	1,53,330	3,53,700																																
Category	2006	2012																																
Infrastructure	14%	14%																																
Medical Equipment	6%	6%																																
Bed revenues	35%	36%																																
Pharmaceuticals	17%	15%																																
Health Insurance	2%	5%																																
Health Outsourcing	11%	9%																																
Medical Value Travel	1%	2%																																

Independent Path Labs	3%	3%
Clinical Trials	1%	1%
Training & education	3%	3%
Medical Textiles	1%	1%
Medical Consumables	6%	5%

What is the growth (in percentage) of the Healthcare Industry between 2006 and 2012?

159%

110%

131%

Correct

Growth patterns of Indian Healthcare Industry

Market Size (Rs. in crores)

2006

1,53,330

2012

3,53,700

Category	2006	2012
Infrastructure	14%	14%
Medical Equipment	6%	6%
Bed revenues	35%	36%
Pharmaceuticals	17%	15%
Health Insurance	2%	5%
Health Outsourcing	11%	9%
Medical Value Travel	1%	2%
Independent Path Labs	3%	3%
Clinical Trials	1%	1%
Training & education	3%	3%
Medical Textiles	1%	1%
Medical Consumables	6%	5%

Which of the following segments portrays the highest level of growth over the period?

Bed Revenues

Correct

Health Insurance

Medical Value Travel

Cannot be determined

Growth patterns of Indian Healthcare Industry

2006

2012

F-
Quantitative
Ability

24

F- Quantitative Ability	25	Market Size (Rs. in crores)	2000	2012	Pharmaceuticals	
			1,53,330	3,53,700		
		Category	2006	2012		
		Infrastructure	14%	14%		
		Medical Equipment	6%	6%		
		Bed revenues	35%	36%		
		Pharmaceuticals	17%	15%		
		Health Insurance	2%	5%		
		Health Outsourcing	11%	9%		
		Medical Value Travel	1%	2%		
		Independent Path Labs	3%	3%		
		Clinical Trials	1%	1%		
		Training & education	3%	3%		
Medical Textiles	1%	1%				
Medical Consumables	6%	5%				
Which of the following segments portrays the lowest level of growth over the period studied?						
				Health Outsourcing		
				Medical Consumables	Correct	
				Cannot be determined		