

Delhi Police Constable Previous Years Paper PDF

201. In the following question, select the related word from the given alternatives.

Tulip: Flower :: Lady finger:?

- A. Green B. Fruit
C. Vegetable D. Round

Ans. C

202. FLICK : LDJMG :: TRIP : ?

- A. OHQS B. QJSU
C. QHSU D. OHSU

Ans. B

203. In the following question, select the related number from the given alternatives.

34: 12 :: 29 : ?

- A. 18 B. 20
C. 23 D. 17

Ans. A

204. In the following question, select the odd word from the given alternatives.

- A. Horse B. Dog
C. Peacock D. Cat

Ans. C

205. In the following question, select the odd letters from the given alternatives.

- A. FMTA B. AGMS
C. GMSY D. DJPV

Ans. A

206. In the following question, select the odd number from the given alternatives.

- A. 19 B. 23
C. 31 D. 49

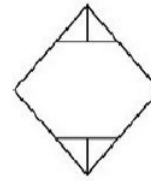
Ans. D

207. In the following question, select the odd number from the given alternatives.

- A. 16 B. 64
C. 36 D. 84

Ans. D

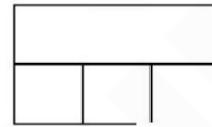
208. How many triangles are there in the given figure?



- A. 6 B. 7
C. 8 D. 9

Ans. A

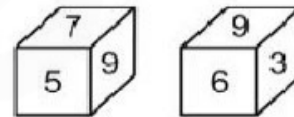
209. How many rectangles are there in the given figure?



- A. 7 B. 8
C. 9 D. 10

Ans. B

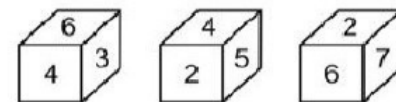
210. Two positions of a cube are shown below. What will come opposite to face containing '3'?



- A. 7 B. 5
C. 6 D. 9

Ans. B

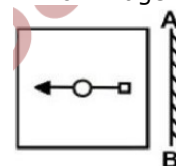
211. Three positions of a cube are shown below. What will come opposite to face containing '4'?

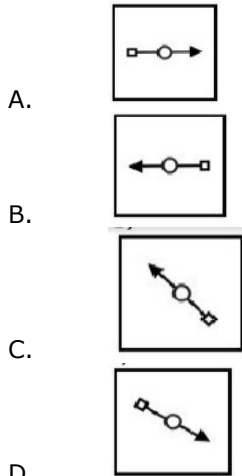


- A. 3 B. 7
C. 2 D. 6

Ans. B

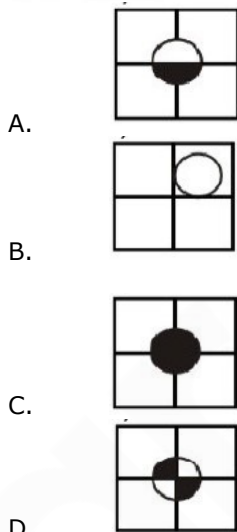
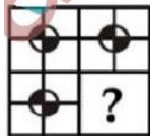
212. If a mirror is placed on line AB, then which of the answer figures is the right mirror image of line given figure?





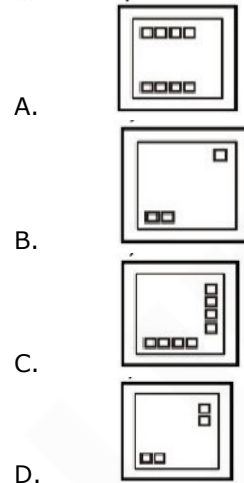
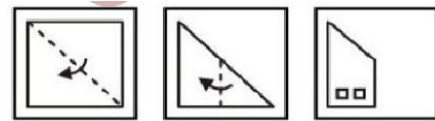
Ans. A

213. Which answer figure will complete the pattern in the question figure?



Ans. D

214. A piece of paper is folded and purchased as shown below in the question figures. From the given answer figures, indicate how it will appear when opened?



Ans. C

215. In the following question, select the number which can be placed at the sign of question mark (?) from the given alternatives.



- A. 53 B. 59
C. 69 D. 73

Ans. B

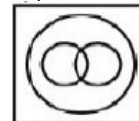
216. From the given alternatives, select the word which CANNOT be formed using the letters of the given word.

- A. SIGNED
B. LOUDER
C. SLANG
D. ROSE

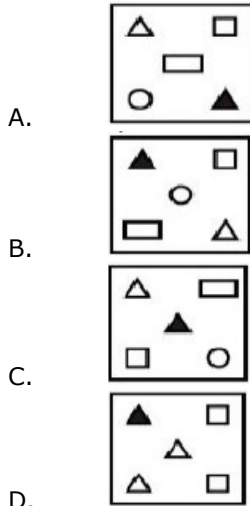
Ans. C

217. Identify the diagram that best represents the relationship among the given classes.

Sun, Moon, Universe

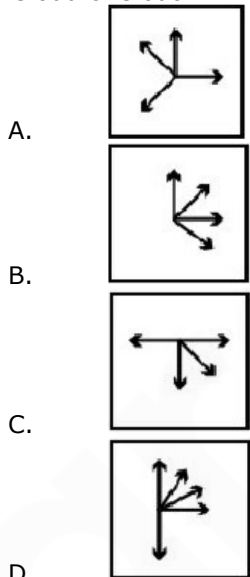


A.



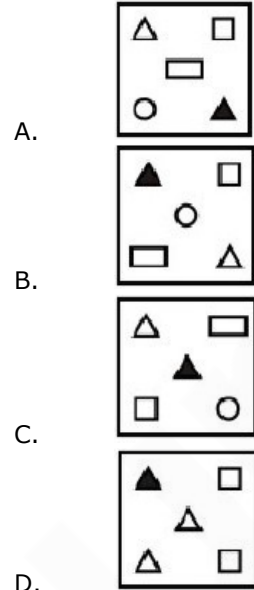
Ans. C

226. In the given question, there are four figures given out of which three are similar in some manner and one is not like the others. Select the figure which is odd one out.



Ans. D

227. In the given question, there are four figures given out of which three are similar in some manner and one is not like the others. Select the figure which is odd one out.



Ans. D

228. In the following question, select the missing number from the given series.
23, 25, 28, 32, 34, 37, 41, ?

- A. 40
- B. 43
- C. 44
- D. 45

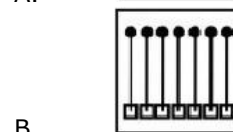
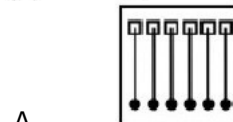
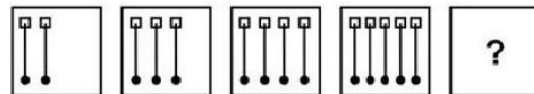
Ans. B

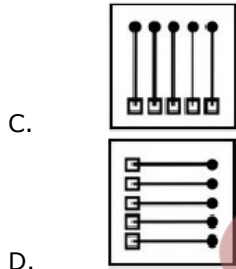
229. In the following question, select the missing number from the given series.
41, 43, 46, 51, 58, ?

- A. 62
- B. 69
- C. 73
- D. 65

Ans. B

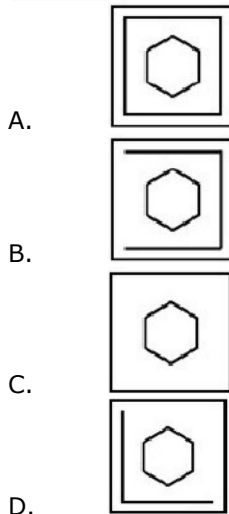
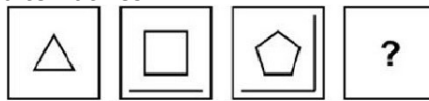
230. In the following question, select the figure which can be placed at the sign of question mark (?) from the given alternatives.





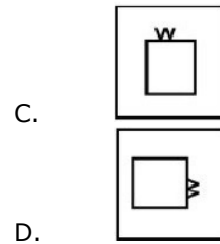
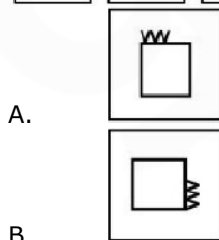
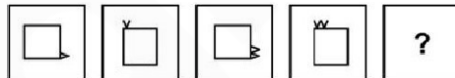
Ans. A

231. In the following question, select the figure which can be placed at the sign of question mark (?) from the given alternatives.



Ans. B

232. In the following question, select the figure which can be placed at the sign of question mark (?) from the given alternatives.



Ans. B

233. In a certain code language, "PRISM" is written as 'RTKUO". How is "TYRES" written in that code language?

- A. ZBCDS B. VATGU
C. WTAUG D. UBAHV

Ans. B

234. In a certain code language, "TRANCHE" is written as "UOBKDEF". How is "BURGER" written in that code language?

- A. CRSDFCO
B. BSRAFP
C. CSSCGN
D. CVSHPS

Ans. A

235. In a certain code language, "DRAW" is written as "10" and "RING" is written as "12". How is "REST" written in that code language?

- A. 9 B. 6
C. 8 D. 7

Ans. C

236. Which of the following is not a cash crop?

- A. Cotton
B. Jute
C. Wheat
D. sugarcane

Ans. C

237. Which country was the first to adopt a gold standard the modern sense?

- A. United states of America
B. France
C. UK
D. Italy

Ans. C

238. How many banks were nationalised in the second phase of bank nationalization?

- A. 5 B. 4
C. 3 D. 6
Ans. D
239. Which five year plan in India gave emphasis on 'Growth with Social Justice and Equality?
A. 8th B. 9th
C. 10th D. 11th
240. Dual citizenship is a feature of _____.
A. Unitary Govt
B. Parliamentary Govt
C. Federal Govt
D. Presidential Govt
Ans. C
241. Which of the following is related to personal freedom?
A. Habeas Corpus
B. Certiorari
C. Prohibition
D. Mandamus
Ans. A
242. Which of the following is under the State list?
A. Agriculture
B. Criminal Law
C. Education
D. Defence
Ans. A
243. In the Indian Constitution, which article mentions about establishment of welfare state for the people?
A. 99 B. 39
C. 59 D. 69
Ans. B
244. Which was the largest Indian site of Indus Civilization?
A. Lothal
B. Rakhigarhi
C. Dholavira
D. Chanhundara
Ans. B
245. With whose permission did the English set up their first factory in surat?
A. Jahangir
B. Akbar
C. Shahjhan

- D. Aurangzeb
Ans. A
246. Who is known as father of Local self-government?
A. Lord Dalhausie
B. Balagangadhar Tilak
C. Lord Ripon
D. No option is correct
Ans. C
247. Who started the English weekly 'New India'?
A. Mahatma Gandhi
B. Bipinchandra pal
C. Dada Bhai Naoroji
D. Lala Lajpat Rai
Ans. B
248. Who established Nalanda Mahavihara?
A. Kumargupta
B. Devgupta
C. Skandgupta
D. Vedgupta
Ans. A
249. Dashavatara temple of Nagara style is located at which of the following places?
A. Badrinath
B. Gorakhpur
C. Deogarh
D. Lalitpur
Ans. C
250. Which of the following imaginary line almost divides India into two equal parts?
A. Tropic of Cancer
B. Tropic of Capricorn
C. Equator
D. No option is correct
Ans. A
251. Which of the following water bodies separates the Andaman from Nicobar?
A. Andaman Sea
B. Gulf of Mannar
C. Palk Strait
D. 10 degree Channel
Ans. D
252. Which state is famous for the tropical forest of Silent Valley?
A. Goa

- B. Kerala
C. Karnataka
D. Tamil Nadu
Ans. B
253. According to the Census of India 2011, which of the following is the least populous state of India?
A. Sikkim
B. Mizoram
C. Goa
D. Tripura
Ans. A
254. Which of the following states has the largest coal reserves of India?
A. Odisha
B. Jharkhand
C. Assam
D. Madhya Pradesh
Ans. B
255. Which of the following important factors influence the mechanism of Indian weather?
A. Jet streams
B. El-Nino
C. The shifting in the position of ITCZ
D. All options are correct
Ans. D
256. Which colour of lights shows maximum deviation when passed through a prism?
A. Violet
B. Red
C. Green
D. Yellow
Ans. A
257. Eclipses occur due to which optical phenomena?
A. Refraction
B. Reflection
C. Diffraction
D. No option is correct
Ans. D
258. Which of the following parts of sunlight makes the solar cooker hot?
A. Ultra violet
B. Infrared
C. Infra violet
D. No option is correct

- Ans. B
259. Carbohydrate is stored in the body as _____.
A. Glycogen
B. Sugar
C. Starch
D. Sucrose
Ans. A
260. Which was the first enzyme isolated in pure crystalline form?
A. Catalase
B. Urease
C. Lipase
D. No option is correct
Ans. B
261. Which of the following is NOT a fuel element?
A. Uranium
B. Thorium
C. Radium
D. Helium
Ans. D
262. Which one of the following gases is extremely soluble in water?
A. Carbon dioxide
B. Chlorine
C. Hydrogen sulphide
D. Ammonia
Ans. D
263. The fundamental particles present in the nucleus of an atom are _____.
A. Electron, Proton
B. Electron, Neutron
C. Neutron, Proton
D. No option is correct
Ans. C
264. Which of the following species are critically endangered?
A. White bellied heron
B. River Terrapins
C. Cuban Kite
D. All options are correct
Ans. D
265. Which of the following types of Coral Reefs are found in India?
A. Atoll
B. Fringing
C. Barrier

- Ans. D. All options are correct
D
266. India has launched an Adopt a Heritage scheme as part of which initiative?
A. Swadesh Yatra
B. Paryatan Parv
C. Monument Mitra
D. Desh Videsh Yojana
Ans. B
267. Which Indian state became the first to incorporate skill development programme in higher education?
A. Rajashtan
B. Gujarat
C. West Bengal
D. Odisha
Ans. A
268. WHO has released new guidelines to prevent which global epidemic in October 2017?
A. Childhood obesity
B. Lung cancer
C. SARS
D. Zika
Ans. A
269. Which planet was discovered by NASA's MAVEN to have a twisted magnetic tail?
A. Venus
B. Mars
C. Saturn
D. Neptune
Ans. B
270. Which country has recently declared Yoga as sports activity?
A. India
B. Iran
C. Saudi Arabia
D. Iraq
Ans. C
271. Which country becomes smallest nation ever to enter FIFA World Cup in October 2017?
A. Iceland
B. Maldives
C. Monaco
D. Ethiopia
Ans. A

272. Which of India's neighboring countries celebrates its National Day on March 26?
A. Pakistan
B. Sri Lanka
C. Nepal
D. Bangladesh
Ans. D
273. Kandy, Jaffna and Galle are all towns situated in which of the following countries?
A. Nepal
B. Pakistan
C. Sri Lanka
D. Bhutan
Ans. C
274. Who has been honoured with the Vishnudas Bhave Award 2017?
A. Mohan Joshi
B. Sandeep Patil
C. Dilbag Singh
D. Aditya Thakre
Ans. A
275. Which Indian has been honoured with the 'Entrepreneur of the Year 2017'?
A. Mukesh Ambani
B. Azim Premji
C. Maya Swaminathan Sinha
D. Sunil Mittal
Ans. C
276. India's Sovereign Rating was upgraded by the rating agency Moody after a gap of almost how many years in 2017?
A. 12 years
B. 14 years
C. 16 years
D. 18 years
Ans. B
277. Which Indian economist has been appointed to the Financial Stability Institute Advisory Board of the Bank of International Settlement?
A. Raghuram Rajan
B. Arvind Pangarhia
C. Urjit Patel
D. No option is correct
278. India was re-elected on the executive board of which UN body on November 10, 2017?

- A. UNESCO
B. ILO
C. FAO
D. IDA
Ans. A
279. Who took over as the new President of Zimbabwe on after Robert Mugabe in November 2017?
A. Joice Mujuru
B. Emmerson Mnangagwa
C. Morgan Tsvangirai
D. No option is correct
Ans. B
280. NGT has directed which of the following state government to seize 10 year old diesel taxi?
A. Mumbai
B. Chennai
C. Kolkata
D. Delhi
Ans. D
281. EESL has partnered with which global body to create a low emission economy?
A. Global Environment Facility
B. International Atomic Energy Agency
C. World Energy Council
D. International Renewable Energy Agency
Ans. A
282. Who has been appointed as the governor of Tamil Nadu in September 2017?
A. Satyapal Malik
B. Keshari Nath Tripathi
C. Banwarilal Purohit
D. C Vidyasagar Rao
Ans. C
283. Audrey Azoulay, the Director General of UNESCO belongs to which of the following countries?
A. France
B. Germany
C. Italy
D. Austria
Ans. A

284. Which of the following cities got India's first World Heritage City tag from UNESCO?
A. New Delhi
B. Lucknow
C. Patna
D. Ahmedabad
Ans. D
285. Which of the following will be the India's first carbon neutral district?
A. Jaipur
B. Patna
C. Majuli
D. No option is correct
Ans. C
286. What will be the remainder when the largest two digit prime number is divided by 6?
A. 1
B. 5
C. 2
D. 3
287. How many numbers are there fro 1 to 70 which contain the digit 6?
A. 17
B. 18
C. 19
D. 20
Ans. A
288. What is the value of $99\frac{1}{2} + 99\frac{1}{6} + 99\frac{1}{12} + 99\frac{1}{20} + 99\frac{1}{30}$
A. 2975/6
B. 1995/7
C. 3925/7
D. 1649/21
Ans. A
289. How many numbers are there from 150 to 200 which are divisible by 9?
A. 4
B. 5
C. 6
D. 8
Ans. C
290. What is the value of $\frac{(0.512 + 0.027)}{(0.8)^2 + (0.3)^2 - 0.24}$?
A. 0.9
B. 1.2
C. 0.8
D. 1.1
Ans. D

291. 60% of 40% of a number is equal to 96.
What is the 48% of that number?

- A. 166 B. 212
C. 176 D. 192

Ans. D

292. The ratio of income of Manish and Pankaj is 11:7. If Pankaj gets Rs 6000 less than Manish, then what is the total income (in Rs) of Manish and Pankaj?

- A. 18000
B. 27000
C. 36000
D. 28000

Ans. B

293. Average of 3 numbers is 12. First number is 6 less than the average of the other two. Third number is 6 more than the average of other two. What is the difference between first and third number?

- A. 8 B. 4
C. 6 D. 10

Ans. A

294. At simple interest, a sum amounts to Rs 882 in years and amounts to Rs 1018.5 in 3.5 years. What is the rate of interest (in percentage)?

दिल्ली पुलिस कांस्टेबल 2020
ऑनलाइन कोर्स

START FREE TRIAL

दिल्ली पुलिस कांस्टेबल 2020 ऑनलाइन कोर्स

Gradeup के साथ सफलता पाओ

Why take this course?

- › Updated Syllabus and Exam Pattern
- › Designed by SSC Qualified Experts
- › Thoroughly designed 90- Day study plan
- › Instant doubts resolution along with Doubt Class



**Chandan Raushan, Sanjay Tomar, Kushal Anand,
Zubair Ehsani, Shashanl, Rohit Dwivedi**