

Delhi Police Constable Previous Years Paper PDF

1. In the following question, select the related word from the given alternatives.

Hockey : Stick :: Cricket : ?

- A. Bat
- B. Stadium
- C. Pitch
- D. Batman

Ans. A

2. In the following question, select the related letters from the given alternatives.

CRAP : IMGK :: DINA : ?

- A. KCUU
- B. JDTV
- C. XDTU
- D. JCUV

Ans. B

3. In the following question, select the related number from the given alternatives.

13 : 91 :: 7 : ?

- A. 27
- B. 32
- C. 49
- D. 52

Ans. C

4. In the following question, select the odd word from the given alternatives.

- A. Cube
- B. Square
- C. Circle
- D. Rectangle

Ans. A

5. In the following question, select the odd letters from the given alternatives.

- A. CJQX
- B. DKRY
- C. ELSW
- D. BIPW

Ans. C

6. In the following question, select the odd number pair from the given alternatives.

- A. 42 - 84
- B. 13 - 25
- C. 17 - 34
- D. 24 - 48

Ans. B

7. In the following question, select the odd number pair from the given alternatives.

- A. 123 - 231
- B. 352 - 523

C. 461 - 614

D. 478 - 874

Ans. D

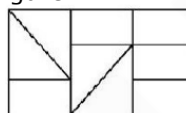
8. How many triangle are there in the given figure?



- A. 4
- B. 6
- C. 5
- D. 7

Ans. A

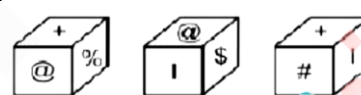
9. How many rectangles are there in the given figure?



- A. 13
- B. 15
- C. 17
- D. 19

Ans. C

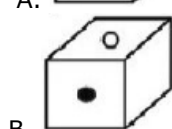
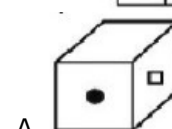
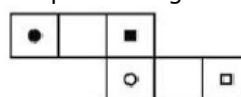
10. Three positions of a cube are shown below. What will come opposite to face containing '@' ?

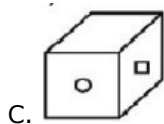


- A. #
- B. +
- C. \$
- D. %

Ans. A

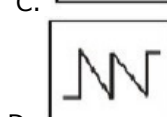
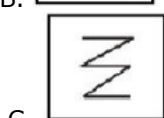
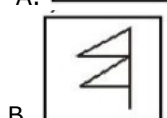
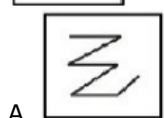
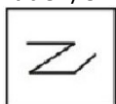
11. Which of the following cube in the answer figure CANNOT be made from unfolded cube in the question figure?





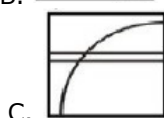
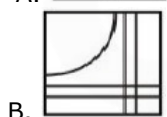
Ans. C

12. From the given answer figures, select the one in which the question figure is hidden/embedded.



Ans. A

13. Which answer figure will complete the pattern in the question figure?

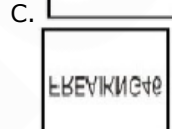
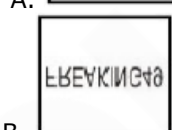
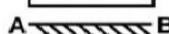



C.



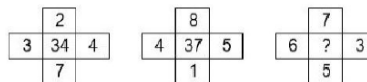
D.
 Ans. B

14. If a mirror is placed on the line AB, then which of the answer figures is the right mirror image of the given figure?



D.
 Ans. C

15. In the following question, select the number which can be placed at the sign of question mark (?) from the given alternatives.

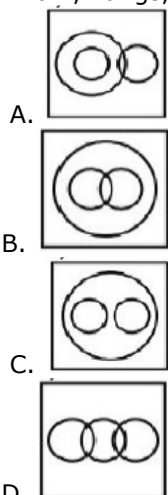


A. 51
 B. 57
 C. 53
 D. 59
 Ans. B

16. From the given alternatives, select the word which CANNOT be formed using the letters after given word.

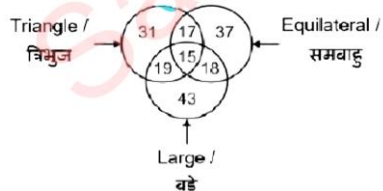
A. SAINT
 B. PRINT
 C. STING
 D. RINGS
 Ans. A

17. Identify the diagram that best represents the relationship among the given classes.
Brain, Lungs, Body



Ans. C

18. In the given figure, how many triangles are large but not equilateral?



- A. 17
 - B. 19
 - C. 18
 - D. 15
- Ans. B

19. In the following question below are given some statements followed by some conclusions. Taking the given statements to be true even if they seem to be at variance from commonly known facts. Read all the conclusions and then decide which of the given conclusion logically follow the given statements.

Statements:

- I. All pages are red.
- II. Some pages are solid.

Conclusions:

- I. Some solid are red.
 - II. All red are pages.
- A. Only conclusion (I) follows.
 - B. Only conclusion (II) follows.
 - C. Both conclusion follow.

D. Neither conclusion (I) nor conclusion (II) follows.

Ans. A

20. In the following question below are given some statements followed by some conclusions. Taking the given statements to be true even if they seem to be at variance from commonly known facts. Read all the conclusions and then decide which of the given conclusion logically follow the given statements.

Statements:

- I. All black are walls.
- II. All colours are walls.

Conclusions:

- I. Some colours are black.
 - II. All walls are black.
 - III. All black are colours
- A. Only conclusion (I) follows.
 - B. Only conclusion (II) follows.
 - C. Only conclusion (III) follow.
 - D. Neither conclusion follows.

Ans. D

21. Neha is the siste of Rohit and mother of Rahul. Rahul is the brother of Sohit. How is Neha related to Sohit?

- A. Sister
 - B. Mother
 - C. Daughter
 - D. Wife
- Ans. D

22. Pointing towards a man, a woman said, "He is the father of my son's sister's daughter. How is that man related to the woman?

- A. Son-in-law
 - B. Son
 - C. Husband
 - D. Brother
- Ans. A

23. The ratio of the present ages of two girls is 4 : 5. After 2 years, their ages will be in ration 5 : 6. What will be the ratio of their ages after 14 years?

- A. 11 : 12
 - B. 17 : 18
 - C. 31 : 33
 - D. 11 : 19
- Ans. A

24. Selling price of an article is Rs 910. If the profit earned is 40%, then what is the cost price (in Rs) of the article?

- A. 720
 - B. 680
 - C. 780
 - D. 650
- Ans. D

25. In the given question, there are four figures given out of which three are similar in some manner and one is not like the others. Select the figure which is odd one out.

- A.
- B.
- C.
- D.

Ans. C

26. In the given question, there are four figures given out of which three are similar in some manner and one is not like the others. Select the figure which is odd one out.

- A.
- B.
- C.
- D.

Ans. D

27. In the given question, there are four figures given out of which three are similar in some manner and one is not like the others. Select the figure which is odd one out.

- A.
- B.
- C.
- D.

Ans. B

28. In the following question, select the missing number from the given series.

16, 18, 21, 23, 26, ?

- A. 29
 - B. 30
 - C. 28
 - D. 33
- Ans. C

29. In the following question, select the missing number from the given series.

51, 55, 71, 107, 171, ?

- A. 231
 - B. 271
 - C. 259
 - D. 313
- Ans. B

30. In the following question select the figure which can be placed at the sign of question mark (?) from the given alternatives.

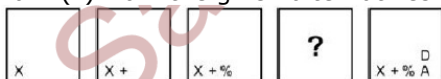


- A.

- B.
- C.
- D.

Ans. D

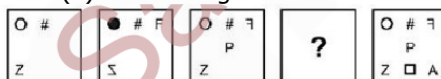
31. In the following question select the figure which can be placed at the sign of question mark (?) from the given alternatives.



- A.
- B.
- C.
- D.

Ans. D

32. In the following question select the figure which can be placed at the sign of question mark (?) from the given alternatives.



- A.
- B.

- C.
- D.

Ans. D

33. In a certain language, "FLAME" written as "69431" and "MOCT" is written as "3872". How is "FACT" written in that code language?

- A. 6472
B. 6147
C. 2476
D. 8743

Ans. A

34. In a certain language, "FUME" written as "43" and "TRAP" is written as "53". How is "RIMP" written in that code language?

- A. 49
B. 54
C. 58
D. 56

Ans. B

35. In a certain language, "WINDSHIELD" is written as "CKDHGRCMHV". How is "FRONTBACK" written in that code language?

- A. IAYZRLMPD
B. JDZVSOPQG
C. JBZASMNQE
D. LDBCUOPSG

Ans. C

36. Which of the following is known as plastic money?

- A. Fixed Deposit
B. Credit Cards
C. Bearer cheques
D. Demand Drafts

Ans. B

37. What do we deduct from the Gross National Product to get the Net National Product?

- A. Loss or Depreciation
B. Imports
C. Interim Payments
D. Direct Taxes

Ans. A

38. Who was the first chairman of the Planning Commission?

- A. Dr. Rajendra Prasad
- B. Dr. S Radhakrishnan
- C. Jawaharlal Nehru
- D. M. Vishveshwaraya

Ans. C

39. Which of the following deals with economic offences?

- A. POTA
- B. TADA
- C. MISA
- D. COFEPOSA

Ans. D

40. Which country is following one party system?

- A. Chile
- B. China
- C. Russia
- D. Spain

Ans. D

41. The essential feature of democracy is giving prominence to the _____.

- A. Citizen
- B. Civil Organisation
- C. Judiciary
- D. Executives

Ans. A

42. How many types of emergencies are envisaged by

- A. 1
- B. 2
- C. 3
- D. 4

Ans. C

43. Under which article of the Indian Constitution can the Central Government direct the State Governments?

- A. Article 256
- B. Article 263
- C. Article 356
- D. Article 370

Ans. A

44. Who was the Indian ruler who had territory outside India?

- A. Chandragupta Maurya
- B. Kanishka
- C. Chandragupta Maurya and Kanishka both
- D. No option is correct

Ans. C

45. Which one of the following dynasties was founded by Bimbisara?

- A. Nanda
- B. Maurya
- C. Haryanka
- D. Gupta

Ans. C

46. What was the another name of Quit India Movement?

- A. August Krnati
- B. Non-cooperation
- C. Civil Disobidience
- D. No option is correct

Ans. A

47. In which session Coagress Party was split?

- A. Surat, 1906
- B. Lahore, 1909
- C. Madras, 1908
- D. No option is correct

Ans. A

48. Where is the Salar Jung Museum situated?

- A. Patna
- B. Hyderabad
- C. Lucknow
- D. Mumbai

Ans. B

49. Where did the development of miniature paintings of Indian heritage NOT happen at the followings?

- A. Mewar
- B. Junagarh
- C. Kishangarh
- D. Bundi

Ans. C

50. In which state is located the Lipulekh Pass?

- A. Sikkim
- B. Uttarakhand
- C. Himachal Pradesh
- D. Jammu and Kashmir

Ans. B

51. Which one of the following lakes s salt water lake?

- A. Wular
- B. Sambhar
- C. Dal
- D. Govind Sagar

Ans. B

52. Which of the following place in Jammu and Kashmir is known for 'saffron cultivation'?

- A. Pampore
- B. Kashmir
- C. Jammu
- D. Kadakh

Ans. A

53. Which of the following region receives rain fall by Western Disturbances?

- A. Kerala
- B. Tamil Nadu
- C. Punjab
- D. Karnataka

Ans. C

54. Which one of the following minerals has another name called 'brown diamond'?

- A. Mica
- B. Iron
- C. Manganese
- D. Lignite

Ans. D

55. Which of the following parts of receives the first monsoon in summer?

- A. Himalayas
- B. Meghalaya Plateau
- C. Western Ghats
- D. Eastern Ghats

Ans. C

56. The spherical shape of rain drops is due to _____.

- A. Viscosity
- B. Elasticity
- C. Friction
- D. Surface tension

Ans. D

57. Which of the following is NOT one of the fundamental quantities in physics?

- A. Time
- B. Length
- C. Weight
- D. Mass

Ans. C

58. Which of the following produces more severe burns?

- A. Boiling Water
- B. Steam
- C. Hot air
- D. Sun rays

Ans. B

59. Which of the following compare responsible for the formation of kidney stones?

- A. Sodium Chloride
- B. Silicates
- C. Calcium oxalate
- D. Calcium bicarbonate

Ans. C

60. Which among the following kinds of lenses are used to treat astigmatism?

- A. Concave Lens
- B. Convex Lens
- C. Bifocal Lens
- D. Cylindrical

Ans. D

61. Which is the most abundant inert gas in the atmosphere of earth?

- A. Helium
- B. Neon
- C. Argon
- D. Xenon

Ans. C

62. The most malleable metal is ____>

- A. platinum
- B. silver
- C. iron
- D. gold

Ans. D

63. Which of the following gases used in manufacturing of vanaspati ghee from vegetable oil?

- A. Hydrogen
- B. Helium
- C. Oxygen
- D. Nitrogen

Ans. A

64. Which Layer of the atmosphere also called the Ozonosphere?

- A. Exosphere
- B. Stratosphere
- C. Troposphere
- D. Mesosphere

Ans. B

65. Which of the following is responsible for turning yellow Taj Mahal?

- A. Potassium
- B. Carbon Dioxide
- C. Sulphur Dioxide
- D. No option is correct

Ans. C

66. Mission Indradhanush is related with _____.

- A. Children Safety
- B. Children Vaccination
- C. E-commerce
- D. Rice Export

Ans. B

67. Which state government has Rani Laxmi Pension scheme?

- A. Madhya Pradesh
- B. Delhi
- C. Punjab
- D. Uttar Pradesh

Ans. D

68. What is the name of indigenous subsonic cruise missile test fired recently by India?

- A. Trishul
- B. Naag
- C. Nirbhay
- D. Kaal

Ans. C

69. Which of the following African countries has launched a earth observation satellite in October 2017?

- A. Morocco
- B. Egypt
- C. Ethiopia
- D. Sudan

Ans. A

70. India beat Malaysia recently, in which of the following cup to clinch its third title?

- A. Under-17 FIFA Cup
- B. Asia Cup
- C. World Cup
- D. Sudirman Cup

Ans. B

71. Which of the following became the Indian woman to tie up with the World Wrestling Entertainment (WWE)?

- A. M C Mary Kom
- B. Babita Phogat
- C. Kavita Devi
- D. No option is correct

Ans. C

72. Guangzhou is the Chinese name of which city?

- A. Beijing

- B. Canton
 - C. Sichuan
 - D. Manchuria
- Ans. B

73. The only one of these neighbors of India that does not use the rupee as currency is _____.

- A. Pakistan
- B. Sri Lanka
- C. Nepal
- D. Bangladesh

Ans. D

74. Who has won the 2017 Nobel Prize for Economics?

- A. Raghuram Rajan
- B. Richard Thaler
- C. Jagdish Bhagwati
- D. Amartya Sen

Ans. B

75. Who has become the first Indian to be honoured with Anna Politkovskaya Award 2017?

- A. Sanjay Pathak
- B. MM Kalburgi
- C. Sudarshan Patnayak
- D. Gauri Lankesh

Ans. D

76. Which state govt has reduced interest on loan under Saksham Yojana in October 2017?

- A. Uttar Pradesh
- B. Chhattisgarh
- C. Madhya Pradesh
- D. Maharashtra

Ans. B

77. The Union Govt has approved the continuation of which centrally sponsored scheme for states in November 2017?

- A. Gramin Bhandarn Yojna
- B. Janani Suraksha Yojna
- C. Antyodaya Ann Yojna
- D. Rashtriya Krishi Vikas Yojana

Ans. D

78. India has sent its first shipment of wheat to which of the following countries through Chabahar Port in October 2017?

- A. Afghanistan
- B. Turkmenistan
- C. Iraq
- D. Uzbekistan

Ans. A

79. India is going to jointly were a multi-radio telescope project with which country?

- A. Japan
- B. China
- C. Iran
- D. South Africa

Ans. D

80. Recently, the world's smallest squirrel was found in which of the following countries?

- A. India
- B. Singapore
- C. Indonesia
- D. Japan

Ans. C

81. Which of the following states became first state to launch electric bus service?

- A. Himachal Pradesh
- B. Kerala
- C. Assam
- D. Jammu & Kashmir

Ans. A

82. Who has been appointed as the new governor of Bihar?

- A. Keshari Nath Tripathi
- B. Satyapal Malik
- C. Jagdish Mukhi
- D. Ram Naik

Ans. B

83. Jagmeet Singh has been cleared first non-white president of the New Democratic Party (NDP). NDP is a major political party of which country?

- A. Canada
- B. United States of America
- C. Brazil
- D. Scotland

Ans. A

84. India's first Pradhan Mantri Kaushal Kendra for Skilling in Smart Cities was inaugurated in which city?

- A. Mumbai
- B. Kolkata
- C. Hyderabad
- D. New Delhi

Ans. D

85. In September 2017, United states of America President has issued a new travel ban

on eight countries. Which of the following countries is not in that list?

- A. North Korea
- B. Iran
- C. Syria
- D. Sudan

Ans. D

86. What is the value of $\left(\frac{7}{5}\right)^{\frac{1}{2}} \times \left(\frac{5}{7}\right)^{\frac{1}{2}}$?

- A. 5/7
- B. 7/5
- C. 49/25
- D. 25/49

Ans. A

87. How many prime numbers are there from 1 to 30?

- A. 8
- B. 9
- C. 10
- D. 11

Ans. C

88. If $\frac{2}{3}$ of $\frac{4}{5}$ of $\frac{6}{5}$ of a number is equal to 240, then what is the value of the number?

- A. 125
- B. 250
- C. 375
- D. 450

Ans. C

89. What is the largest three digit number which is exactly divisible by 3, 4 and 5?

- A. 910
- B. 900
- C. 960
- D. 990

Ans. C

90. What is the value of $1.44 \times 0.02 + 2.2 \times 0.01$?

- A. 0.0508
- B. 0.0502
- C. 0.508
- D. 0.502

Ans. C

91. What is the value of 25% of 40% of $\frac{3}{7}$ of 3500?

- A. 750
- B. 1050
- C. 150
- D. 450

Ans. C

92. If $x : y = 2 : 3$ and $z : w + 5x : 7y$, then what is the value of $xz : yw$?

- A. 10 : 21
- B. 15 : 32
- C. 4 : 9
- D. 20 : 63

Ans. D

93. Average of 19, 63, 51, 78, 47 and A is 49. What is the value of A?

- A. 29
- B. 32
- C. 36
- D. 39

Ans. C

94. Simple and compound interest on a principle at a certain rate of interest for 2 years is Rs 1400 and Rs 1470 respectively. What is the principal (in Rs)?

- A. 8500
- B. 7000
- C. 6000
- D. 6500

Ans. B

दिल्ली पुलिस कांस्टेबल 2020
ऑनलाइन कोर्स

START FREE TRIAL

दिल्ली पुलिस कांस्टेबल 2020 ऑनलाइन कोर्स

Gradeup के साथ सफलता पाओ

Why take this course?

- › Updated Syllabus and Exam Pattern
- › Designed by SSC Qualified Experts
- › Thoroughly designed 90- Day study plan
- › Instant doubts resolution along with Doubt Class



**Chandan Raushan, Sanjay Tomar, Kushal Anand,
Zubair Ehsani, Shashanl, Rohit Dwivedi**