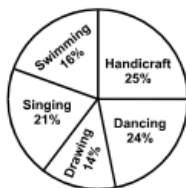


FCI Assistant Grade III 2015

(South Zone)

DIRECTIONS: (Question No. 1 to 5) Study the pie chart carefully to answer the following questions.

Percentage of students enrolled in different activities in a school. Total number of students = 3000.



Percentage break up of girls enrolled in these activities out of total students.

Total number of Girls = 1750



- What is the approximate (best) percentage of boys in the School?
 - 42%
 - 28%
 - 34%
 - 50%
- How many boys are enrolled in singing and handicraft together?
 - 485
 - 505
 - 420
 - None of these
- What is the total number of girls enrolled in swimming and drawing together?
 - 505
 - 515
 - 525
 - None of these
- The number of girls enrolled in dancing form what percentage of the total number of students in the school? (round off to two digit)
 - 11.67%
 - 14.12%
 - 9.32%
 - None of these
- What is the ratio of the number of girls enrolled in swimming to the number of boys enrolled in swimming?
 - 59 : 49
 - 49 : 47
 - 23 : 29
 - None of these
- To move to the bottom of a document, you press:
 - Ctrl + End key
 - Ctrl + Home key
 - Home key
 - End key
- Name the fourth layer of OSI Model:
 - Application layer
 - Data link layer
 - Transport layer
 - Session layer

DIRECTIONS: In the following question below consists of a question and two statements numbered I and II given below it. You have to decide whether the data provided in the statements are sufficient to answer the question. Read both the statements and give answer as.

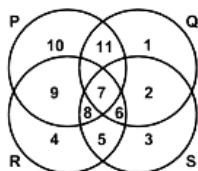
- If the data in the statement I alone are sufficient to answer the question, while the data in statement II alone are not sufficient to answer the question.
 - If the data in statement II alone are sufficient to answer the question, while the data in statement I alone are not sufficient to answer the question.
 - If the data either in statement I alone or in statement II alone are sufficient to answer question.
 - If the data in both statement I and II even together are not sufficient to answer the question.
 - If the data in both statements together are necessary to answer the question.
- What is the average weight of 30 students in a class
 - If the weight of teacher's included the average weight is 20 kg.
 - If the weight of teacher is not included, the total weight is 720 kgs.
 - A
 - B
 - C
 - E
 - In a group of 15, 7 studied German, 8 have studied French and 3 have not studied either. How many of these have studied both German & French?
 - 0
 - 3
 - 4
 - 5
 - The fundamental duties of the Indian citizens were laid down by which of the following amendments to the constitution of India?
 - 40th amendment
 - 41st amendment
 - 42nd amendment
 - 43 rd amendment
 - The memory of a computer is commonly expressed in terms of Kilobytes or Megabytes. A byte is made up of:
 - Eight decimal digits
 - Eight binary digits
 - Two binary digits
 - Two decimal digits



FREE TEST FCI EXAM

ATTEMPT NOW

12. Dongri is the language spoken in:
 A. Assam
 B. Bihar
 C. Jammu & Kashmir
 D. Andaman & Nicobar
13. In a work sheet in MS Excel, what is the shortcut key to hide entire row?
 A. Ctrl + 2 B. Ctrl + 9
 C. Ctrl + N D. Ctrl + R
14. The maintenance charges for 35 residents for 24 days is ₹ 6,300. In how many days will the maintenance charges be ₹ 3,375 for 25 residents?
 A. 17 B. 21
 C. 18 D. None of these
15. In the below figure, circle P represents hardworking people, circle Q represents intelligent people, circle R represents truthful people, and circle S represents honest people. Which region represents the people who are intelligent, honest and truthful but not hardworking:



- A. 6 B. 7
 C. 8 D. 11
16. 'IC chips' for computers are usually made of:
 A. Chromium B. Silicon
 C. Lead D. Copper
17. By selling 33 metres of cloth, a shopkeeper gains the price of 11 metres of cloth. His gain percent is:
 A. 45% B. 40%
 C. 50% D. None of these
18. The average age of a group of workers changes from 32 to 35 years if an old worker is replaced by a new worker. How many workers are there in the group if the new worker is 12 years younger than the older one?
 A. 5 B. 4
 C. 6 D. 7
19. The present ages of Amit and Sumit are in the ratio of 1:2. Four years later, their ages will be in the ratio of 7:13. What is their present ages?

- A. 16 years and 32 years
 B. 24 years and 48 years
 C. 18 years and 36 years
 D. None of these
20. ASSERTION (A):- The President of India can issue a proclamation of emergency under Article 352(1) of Constitution on the advice of the Prime Minister.
 REASON (R):- Where a proclamation of emergency is in operation, the President may suspend the operation of all fundamental rights except Article 20 & 21 of Constitution.
 A. Both A and R are true and R is correct explanation of A
 B. Both A and R are true but R is not correct explanation of A
 C. A is true but R is false
 D. A is false but R is true

DIRECTIONS: In the following question, a series is given with one term missing. Choose the correct alternative from the given ones that will complete the series.

21. AGMSY, CIOUA, EKQWC, _____, IOUAG, KQWCI.
 A. GNTYE B. GLRYE
 C. GMSYE D. GMTXE
22. Consider the following information regarding the performance of a class of 1000 students in four different tests.

Tests	I	II	III	IV
Average Marks	60	60	70	80
Range of Marks	30 to 90	45 to 75	20 to 100	0 to 100

If a student scores 74 Marks in each of the four tests, in which of the following tests is his performance the best comparatively?

- A. Test - I B. Test - II
 C. Test - III D. Test - IV
23. In this question, which number should be in place of 'x'? The numbers in the figures follow some rule:



- A. 4 B. 6
 C. 7 D. 8



FREE TEST FCI EXAM

ATTEMPT NOW

24. What is the control unit's function in the CPU:
- To transfer data to primary storage
 - To Store program instructions
 - To perform logic operations
 - To decode program instructions
25. Creation of MUDRA bank was proposed in the recent budget proposal of the Government of India. MUDRA stands for:
- Monetary Union Development Repay agency
 - Medium Units Development & Reconstruction Agency
 - Micro Units Development Refinance Agency
 - Multipurpose Undertakings Development Refinance Agency

DIRECTIONS: Select the suitable alternative to satisfy the relationship in the following question.

26. **Question figure**

Answer figure

DIRECTIONS: Complete the following series.

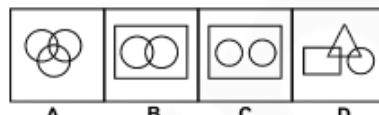
27. **Question figure**

Answer figure

DIRECTIONS: A survey on a sample of 25 new cars being sold at a local auto dealer was conducted to see three popular options—air conditioning, radio and power windows—which were already installed. The survey found that 15 had air conditioning, 2 had air conditioning and power windows but no radios, 12 had radio, 6 had air conditioning and radio but no power

windows, 11 had power windows, 4 had radio and power windows, 3 had all three options.

28. What is the number of cars that had none of the options?
- 3
 - 2
 - 4
 - None of these
29. Which of the following represents the statement that some of the psychologists are philosophers. Some philosophers are writers. But no psychologist is a writer.



- B
 - A
 - D
 - C
30. Arrange the following rational members in ascending order:
- $$\frac{-7}{10}, \frac{5}{-8}, \frac{2}{-3}$$

- $\frac{2}{-3} < \frac{5}{-8} < \frac{-7}{10}$
 - $\frac{5}{-8} < \frac{-7}{10} < \frac{2}{-3}$
 - $\frac{-7}{10} < \frac{2}{-3} < \frac{5}{-8}$
 - $\frac{-7}{10} < \frac{5}{-8} < \frac{2}{-3}$
31. My office is to the east of the bus stand and while my residence is to the south of the bus stand. The market is to the north of my office. If the distance of the market from my office is the same as the distance from my residence to the bus stand, then in which direction is the market with respect to the bus stand?

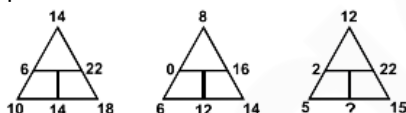
- North
 - South-West
 - North-East
 - South
32. If 'SPARK' is coded as TQBSL, what will be the code for 'FLAME'?
- GNAMF
 - GMBNO
 - GMBNF
 - GCMCF
33. Find the odd one out from the given alternatives.
- Microbe
 - Microfilm
 - Microphone
 - Microscope
34. The average temperature of a town in the first four days of a month was 58°C. The average temperature for second, third, fourth and fifth days was 60°C. If temperature on the first and fifth days was in the ratio 7 : 8, then what was the temperature on the fifth day?
- 64°C
 - 62°C
 - 56°C
 - None of these

35. Total salary of three persons A, B and C are ₹ 1,44,000. They spend 80%, 85% and 75% respectively. If their savings are in the ratio 8:9:20, find C's salary:
 A. ₹ 48,000 B. ₹ 64,000
 C. ₹ 40,000 D. ₹ 32,000
36. An ISP:
 A. Provides access to the internet
 B. Is a CPU register
 C. Is a CPU functional unit
 D. Make of processor
37. FTP is:
 A. Used to send email
 B. Used to browse the Web
 C. Is part of Netscape
 D. Is a protocol for the transfer of files between computers
38. Three views of the same cube are shown below.



The figure on the face opposite the triangle is:

- A. Pentagon B. Circle
 C. Question mark D. Rectangle
39. Find the missing number in place of question mark?



- A. 10 B. 8
 C. 12 D. 14
40. One of the pioneering robots, that went missing into space almost a decade ago, has been recently found on the surface of red planet. Name it:
 A. Beagle 2
 B. Mars-2 Prop-M. Rover
 C. Mars Rover
 D. Spirit (MER-A)
41. New Horizons became the first space probe to reach closest to Pluto recently. This is a mission by:
 A. ISRO B. ESA
 C. NASA D. FKA & RKA
42. A GUI is:
 A. Hardware
 B. Language interpreter
 C. Software interface
 D. An operating system

DIRECTIONS: A cube of side four inch is painted red, blue and black on the pairs of opposite faces. It is then cut into smaller cubes of side one inch each.

43. How many cubes have one face red and one blue (the other faces may be painted or unpainted):
 A. 16 B. 8
 C. 4 D. 0
44. Pick the odd one out.
 A. Z3W B. Z5W
 C. Z7W D. Z9W
45. The appropriate writ issued by the Court to quash the appointment of a person to a public office is that of:
 A. Certiorari B. Prohibition
 C. Quo Warranto D. Mandamus
46. Gross National Product (GNP) of a country is sum of the market value of all goods and services produced in a year:
 A. Plus export Earnings
 B. Plus Market value of imports
 C. Minus foreign aid
 D. Plus net income from abroad
47. The sum of two number is 2490. If 6.5% of one number is equal to 8.5% of the other, the numbers are:
 A. 1411 and 1079
 B. 1410 and 1080
 C. 1441 and 1049
 D. 1214 and 1276
48. A small aeroplane can travel at 320 km/hr in still air. The wind is blowing at a constant speed of 40 km/hr. The total time for a journey against the wind is 135 minutes. What will be time, in minutes for the return journey with the wind? (ignore take-off and landing time for the aeroplane)
 A. 94.5 B. 105
 C. 108.125 D. 120
49. Multitasking refers to:
 A. Having several programs in RAM at the same time
 B. The ability to run 2 or more programs concurrently
 C. Writing programs in multiple languages
 D. None of these

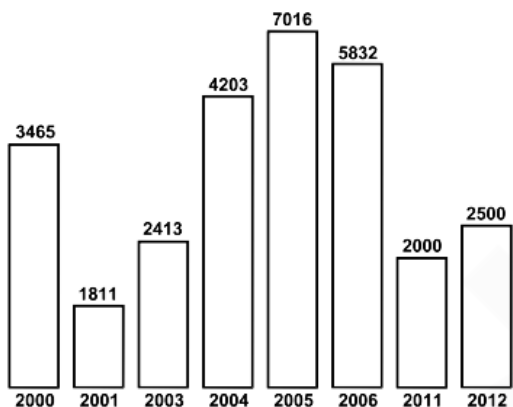


FREE TEST FCI EXAM

ATTEMPT NOW

50. Point out the incorrect statement
To qualify for the membership of Rajya Sabha, one has to.
- A. Be a citizen of India
 - B. Be at least 30 years of age
 - C. Fulfils the qualifications of becoming a member of parliament
 - D. Be a voter in any Lok Sabha constituency of India

DIRECTIONS: (Question No. 51 to 55) These question are to be answered on the basis of bar chart given below giving the rice imports (in thousand tonnes) for the year 2000 to 2012.



51. In which year did imports register highest increase over its preceding year?
- A. 2012
 - B. 2005
 - C. 2004
 - D. 2003
52. The imports in 2006 were approximately how many times to that of 2001?
- A. 3.22
 - B. 2.41
 - C. 1.68
 - D. 0.31
53. What is the ratio of the years which have above average imports to those which have below average imports?
- A. 3 : 8
 - B. 8 : 3
 - C. 3 : 5
 - D. 5 : 3
54. The increase in imports in 2012 was what percent of imports in 2011?
- A. 80
 - B. 5
 - C. 125
 - D. 25
55. The import in 2004 are approximately what percent of average imports for the given years?
- A. 65
 - B. 85
 - C. 190
 - D. 115
56. Find the incorrect one:
- A. Hertz is used to measure frequency
 - B. Kelvin is used to measure temperature
 - C. Bel is used to measure atmospheric pressure
 - D. Ohm is used to measure electrical resistance
57. RTGS in banking sector stands for:
- A. Real Time Gross Settlement
 - B. Real Transactions Going Settlement
 - C. Ready Transfer Gross Settlement
 - D. Remittance Transfer Gross settlement
58. Country facing water crisis was helped by India recently:
- A. Myanmar
 - B. Philippines
 - C. Maldives
 - D. Bangladesh
59. An RS-232 interface is:
- A. A parallel interface
 - B. A serial interface
 - C. Printer interface
 - D. A modem interface
60. 8085 microprocessor has registers to hold data:
- A. 8 bit
 - B. 32 bit
 - C. 16 bit
 - D. None of these
61. A bag contains 19 red balls, 37 blue balls and 27 green balls. If a ball is picked up from this bag at random, what is the probability of picking a blue ball?
- A. 36/87
 - B. 37/83
 - C. 38/83
 - D. None of these
62. Number of diagonals in a 30 sided convex polygon will be:
- A. 405
 - B. 955
 - C. 818
 - D. 378
63. The value of $\sqrt{a\sqrt{a\sqrt{a\cdots\infty}}}$ is:
- A. 1
 - B. a
 - C. a²
 - D. ∞
- DIRECTIONS:** In an imaginary language, the digits 0, 1, 2, 3, 4, 5, 6, 7, 8 and 9 are substituted by a, b, c, d, e, f, g, h, i and j. And 10 is written as ba.
64. $bee + fg - (ca \times h/be)$ is equal to:
- A. bja
 - B. afb
 - C. jfb
 - D. bfj
65. There are 600 Tennis players. 4% wear wrist band on one wrist. Of the remaining, 25% wear wrist bands on both hands. How many players don't wear a wrist band?
- A. 534
 - B. 432
 - C. 344
 - D. 482



FREE TEST FCI EXAM [ATTEMPT NOW](#)

66. Buses start from a bus terminal with a speed of 20 km/hr at intervals of 10 minutes. What is the speed of a man coming from the opposite direction towards the bus terminal if he meets the buses at intervals of 8 minutes?
 A. 5 km/hr B. 4 km/hr
 C. 6 km/hr D. 7 km/hr
67. In the number series 4, 10, 23, 50, 104, 216 and 439, the wrong number is:
 A. 10 B. 23
 C. 104 D. 50
68. India recently won gold in world Youth Under-16 Chess Olympiad against:
 A. Ukraine B. Russia
 C. Turkey D. Iran
69. Which soil is more suitable for crops like cashew nut?
 A. Red laterite soil
 B. Black soil
 C. Alluvial soil
 D. Arid soil
70. We can not see during a fog because of:
 A. Reflection of light
 B. Internal reflection
 C. Scattering of light
 D. None of these
71. The value of $\frac{1}{x^2} + \frac{1}{y^2}$ where $x = 2 + \sqrt{3}$ and $y = 2 - \sqrt{3}$ is:
 A. 12 B. 16
 C. 14 D. 10
72. In a certain code language 'PROPORTION' is written as 'PORPRONOIT'. How is 'CONVERSION' written in that code language?
 A. VNO CERONIS B. VNCORENOIS
 C. VNOCRENOIS D. VNOCREIONS
73. Recently which ministry has launched two schemes namely-venture capital fund for S.C. and Green business scheme:
 A. Ministry of Finance
 B. Ministry of Social Justice & Empowerment
 C. Ministry of Commerce & Industry
 D. Ministry of Minority affairs
74. India's first dedicated military satellite?
 A. GSAT-12 B. GSAT-7
 C. GSAT-1 D. GSAT-8

DIRECTIONS: Answer the following questions according to the instructions given.

A\$B means A is not smaller than B

A#B means A is not greater than B

A@B means A is neither smaller nor equal to B

A*B means A is neither greater than nor smaller than B

A%B means A is neither greater than nor equal to B

75. **STATEMENT:**

M@J, J\$T, T*N

CONCLUSION:

I. N#J

II. T%M

III. M@N

A. Only I and II are true

B. Only I and III are true

C. Only II is true

D. All are true

DIRECTIONS: (Question No. 76 to 78) Read the following information and answer the questions that follow.

In Common Wealth Games, six weightlifters were selected through a rigorous selection test. Their names are Atul, Bimal, Chintoo, Debu, Eshan and Fakir. Out of them Bimal, Chintoo and Eshan were from Rural Background and the remaining from urban background. Atul, Bimal and Debu had completed their education in English medium and all remaining in Hindi Medium. Debu and fakir had specialisation in yoga and others had specialisation in swimming.

76. If Atul and Chintoo were also yoga specialists, what would have been the number of swimming specialist from rural background:

A. 1

B. 2

C. 3

D. None of these

77. Which of the following description is correct in respect of Atul and Bimal. both of them are:

A. From urban background studied in English medium

B. From Rural Background studied in English medium

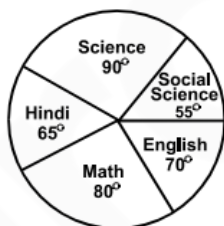
C. Having Swimming specialisation studied in English medium

D. English medium players but one of them is a yoga expert



78. Who among the following is a yoga specialist coming from urban background and studied in English medium:
 A. Fakir B. Atul
 C. Chintoo D. Debu
79. This river rises from Trimbak plateau of north Sahyadri:
 A. Cauvery B. Godavari
 C. Krishna D. Mahanadi
80. Who won the inaugural title of the star sports Pro Kabaddi league:
 A. U Mumba
 B. Jaipur Pink Panther
 C. Dabang Delhi
 D. Bengal Warriors
81. **STATEMENT:**
 All boys are girls
 No girl is a father
CONCLUSION:
 I. All girls are boys
 II. No boy is a father
 A. Only I is true
 B. Only II is true
 C. Only I and II are true
 D. None of them is true

DIRECTIONS: The following graph gives the marks scored by a student in different subjects – English, Hindi, Mathematics, Science and Social Science in an examination. Assuming that the total marks obtained for the examination are 540, answer the question given below.



82. The difference of marks between Social Science and Mathematics as the same as between:
 A. English and Science
 B. Science and Hindi
 C. Hindi and English
 D. None of these
83. Hajo is an ancient pilgrimage center for three religions. Which one religion is not included in this:
 A. Hindu B. Buddhists
 C. Jains D. Muslims

DIRECTIONS: In a certain code language–

- i. 'Cod dex nom' stands for 'banana is sweet'
 ii. 'Zip dex nux' stands for 'apple is good'
 iii. 'Cod nux elp' stands for 'banana and apple' and
 iv. 'pa reb nom' stands for 'oranges are sweet'.
84. Which word in that language stands for 'apple'.
 A. Elp B. Nux
 C. Zip D. None of these
85. To which ocean the Panama Canal joins the Atlantic Ocean?
 A. Pacific Ocean B. Indian Ocean
 C. Arctic Ocean D. Caspian Sea
86. Match List-I with List-II
 List-I List-II
 1. Jawahar Lal Nehru Port A. Tamilnadu
 2. Paradip Port B. Maharastra
 3. Kandla Port C. Odisha
 4. Ennore Port D. Gujarat
 A. 1-D, 2-A, 3-B, 4-C
 B. 1-B, 2-C, 3-D, 4-A
 C. 1-D, 2-C, 3-B, 4-A
 D. 1-B, 2-A, 3-D, 4-C
87. Anusuya, who gave sermons to Sita, the wife of Lord Rama, during their banishment to forest (vanvasa), was the wife of sage:
 A. Atri B. Angiras
 C. Marichi D. Kratu
88. If the radius of a right circular cylinder is decreased by 50% and its height is increased by 60%, its volume will be decreased by:
 A. 30% B. 40%
 C. 60% D. 70%
89. The perimeter of a rhombus is 40 cm and the measure of an angle is 60°, then the area of it is–
 A. $100\sqrt{3}$ cm² B. $75\sqrt{3}$ cm²
 C. $180\sqrt{3}$ cm² D. $50\sqrt{3}$ cm²
90. If 'yellow' is called white, 'white' is called pink, 'pink' is called red, 'red' is called black, 'black' is called green, 'green' is called orange, then what is the colour of coal?
 A. Red B. Orange
 C. Green D. Black



FREE TEST FCI EXAM [ATTEMPT NOW](#)

- 91. This is a ground penetrating radar and will provide centimeter scale resolution of the geologic structure of the subsurface. This is among the seven selected payloads that will be sent to Mars 2020 rover mission:
A. MEDA B. RIMFAX
C. SHERLOC D. MOXIE
- 92. To mark 800th anniversary of Magna Carta (1215), four surviving copies of the world most important documents of parliamentary democracy were recently brought together as a part of celebrations in:
A. Washington B. Delhi
C. London D. Kathmandu
- 93. The fourteenth Finance Commission recommended of the net proceeds of the union tax revenues to be transferred to the states:
A. 32% B. 35%
C. 42% D. 45%
- 94. Who won Hockey India League-3 ?
A. Delhi Waveriders
B. UP Wizards
C. Punjab Warriors
D. Ranchi Rays
- 95. For 1 MB memory the number of address lines required:
A. 11 B. 16
C. 22 D. None of these

GENERAL ENGLISH

DIRECTIONS: (Question Nos. 96 to 100) Read the following passage. The questions following it are based on its content. Select the best answer to each question, based on the content of the passage.

What is it that people today fail to understand about what is happening to them? What is happening is that they are using up their planet at a fearsome rate and may soon pass the point where their total habitat can sustain human life. Man’s world is slipping away from him. His habits, his thoughts, his actions run counter to the essentials of his existence. He has created national governments for the purpose of giving him maximum protection, but he has no way of protecting himself against the governments. In the act of contending with one another, the governments have become instruments of race suicide and world holocaust.

Most of what man does is irrelevant to his main problems; his ingenuity has been applied to everything except the need to make his planet safe for human habitation. He has cut into his natural environment with large slashes. His sources of food are being sealed over by the tar and cement of his cities and highways. Next to destructive force, he produces nothing in greater volume than his garbage. He has made his sky an open sewer and his rivers and lakes a poisonous brew. He has pumped his foul wastes into the seas and has stared balefully at billions of floating dead fish.

Instead of fortifying his plants against insects with rich loam and compost, he has attacked them indiscriminately with chemicals, violating the chain of life and killing off the birds that are far more essential to his own spirit than many of his commodities. By going against nature, he has warred against beauty of line, movement, and sound. He has been mucking up his own planet, but has the arrogance to go searching for life elsewhere in the universe.

What has been happening to people that they don’t understand is that they have made a geographical entity out of their world without a philosophy for ennobling it, a plan for conserving it, or an organization for sustaining it. Men crave to do good, to act reasonably and think decently. But goodness and decency and wisdom must have a world purpose in our time if life and thought are to have any meaning at all.

- 96. The author would strongly oppose:
A. A flight to Mars to search for life
B. A stronger United Nations
C. Pollution control
D. Organic farming
- 97. The passage condemns man for:
A. Discovery of penicillin
B. Laying railway tracks
C. Man’s ingenuity
D. Mucking up his own planet
- 98. The tone of the passage can best be said to be:
A. Concealed humour
B. Alarming concern
C. Unbridled anger
D. A sense of joy
- 99. The author’s view on man’s thoughts, habits and actions are that:



FREE TEST FCI EXAM

ATTEMPT NOW

- A. They contribute to financial success
 B. Run counter to the theory of relativity
 C. Go against the basics of his existence
 D. They assist in the process of evolution
100. The passage brings out that man's craving for doing good, acting reasonably and thinking decently is not enough unless these qualities:
- A. Are implemented quickly
 B. Have a goal for entire world
 C. Build friendship between humans
 D. Help in avoiding conflict

DIRECTIONS: (Question 101 & 102) In the following questions, pick the choice whose meaning is opposite to the word shown in capitals for each question:-

101. **HOI POLLOI:**
- A. Cannibalism B. Tyranny
 C. The past D. Aristocracy
102. **INCREDULOUS:**
- A. Tolerable B. Creditable
 C. Gullible D. Vicious

DIRECTIONS: (Question 103 & 104) In the following questions, the descriptive sentence is aptly described by just one word. Select the choice which give the meaning most appropriately:

103. A person who creates disorder in a state:
- A. Rebel B. Militant
 C. Anarchist D. Fifth columnist
104. One who talks in his sleep:
- A. Somniloquist B. Somnivocalist
 C. Somnambulist D. Somnalesist

DIRECTIONS: Which of phrases given below in each sentence should replace the phrase in Underlined to make the sentence grammatically correct?

105. He is too important for tolerating any delay:
- A. to tolerate B. to tolerating
 C. at tolerating D. with tolerating

DIRECTIONS: Choose the correct word which can be substituted for the given word/sentence.

106. Extreme old age when a man behaves like a fool:
- A. Imbecility B. Senility
 C. Dotage D. Superannuation

107. In the following question, which of the following paired conjunctions would you use to combine the two sentence into one sentence.

She will have to study hard. She will have to concentrate to do well on the exam.

- A. both...and B. not only...but also
 C. either...or D. neither...nor

DIRECTIONS: Arrange the following sentences/phrases in a coherent sequence and select the corresponding choice from (1), (2), (3) and (4).

108. Jumbled sentences/phrases:

M and took him to hospital

N His friend came and

O He cried for help

P Killed the snake

Q A snake bit the gardener

- A. QPONM B. ONQPM
 C. QONPM D. NMOQP

109. Read the following sentences. In the following sentences, in which sentence adverbs modify the whole sentence rather than any particular word:

- A. Rekha runs quickly.
 B. Unfortunately no one was present there.
 C. This is a very sweet mango.
 D. Rekha reads quite clearly.

110. Fill in the gap with suitable preposition:

Ram died __ fatigue.

- A. of B. from
 C. for D. in

DIRECTIONS: (Question No. 111 to 112)

Against each key word are given four suggested meanings. Choose the word or phrase which is most nearly the same to the keyword.

111. BOURGEOIS:

- A. Aristocratic B. Animated
 C. Lively D. Ordinary

112. JOCUND:

- A. Filmsy B. Cheerful
 C. Cruel D. Laughable

113. The correct passive voice of the following sentence is:

Will anyone believe your story?

- A. Will your story be believed by anyone?
 B. Will you be believed for story by anyone?
 C. Will your story to be believed by anyone?
 D. Will your story having been believed by anyone?



FREE TEST FCI EXAM

ATTEMPT NOW

114. Identify the incorrect sentence:
- A. The patient had died before the doctor arrived.
 - B. He behaves as if he was a king.
 - C. Read regularly lest you should fail.
 - D. Bread and butter makes a good breakfast.
115. Identify the incorrect plural:
- A. Swine B. Sheep
 - C. Species D. Aircrafts
116. Fill in the blank using the correct tense:
I at five o'clock and for two hours. After taking a bath, I breakfast. Then, I to school on my bike.
- A. Got up, studied, took, went
 - B. Get up, will study, take, went
 - C. Get up, study, will take, go
 - D. Got up, will study, will take, will go
117. Given below are the words with different spellings. Select the one which you consider to be correctly spelled:
- A. Paraphernalia B. Paraphrenalia
 - C. Parapherenalia D. Paraphrennalia
118. Change the following direct speech into correct reported speech and mark your options from among choices.
Ram said, "The teacher left an hour ago"
- A. Ram said that the teacher had left an hour ago
 - B. Ram said that the teacher left an hour ago
 - C. Ram said that the teacher had left an hour before
 - D. Ram said that the teacher had left an hour ahead
119. Fill in the gap correctly.
India won by an _____ and three _____.
- A. Innings, run B. Innings, runs
 - C. Inning, run D. Inning, runs
- DIRECTIONS:** Choose the appropriate preposition to fill in the blank.
120. Our plane stopped Mumbai airport on the way to Italy.
- A. in B. over
 - C. on D. at



FREE TEST
FCI EXAM

ATTEMPT NOW



FCI Combo 2019

Online Test Series

- 1. Based on the Latest Exam Pattern**
- 2. Available in Hindi & English**
- 3. All India Rank & Performance Analysis**
- 4. Detailed Explanation of Solutions**
- 5. Available on Mobile & Desktop**

