

Recruitment of Sub-Inspector in Delhi Police, CAPFs and Assistant Sub-Inspector in CISF Examination, 2018

Roll No. :	
Registration No.	
Name :	
Exam Venue :	
Exam Time :	3:00 PM - 5:00 PM
Exam Date :	13/03/2019

Section : SI CPO

Q.1 Select the number-pair in which the two numbers are related in the same way as are the two numbers of the given number pair.

1 : 8

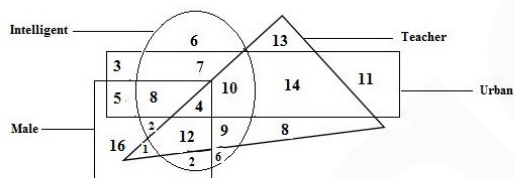
- Ans**
- ☒ 1. 9 : 36
 - ☒ 2. 8 : 27
 - ☒ 3. 6 : 30
 - ☒ 4. 16 : 49

Question ID : 98958012383

Status : Not Attempted and Marked For Review

Chosen Option : --

Q.2 In the following diagram, the triangle represents 'teachers', the circle represents 'intelligent', the rectangle represents 'urban' and the square represents 'males'. The numbers in different segments show the number of persons.



How many urban intelligent teachers are not male?

- Ans**
- ☒ 1. 14
 - ☒ 2. 4
 - ☒ 3. 10
 - ☒ 4. 12

Question ID : 98958012407

Status : Answered

Chosen Option : 3

Q.3 Two statements are given, followed by three conclusions numbered I, II and III. Assuming the statements to be true, even if they seem to be at variance with commonly known facts, decide which of the conclusions logically follow(s) from the statements.

Statements:

Some animals are mammals.
No mammal is herbivore.

Conclusions:

- I. No herbivore is mammal.
- II. Some mammals are animals.
- I. No animal is herbivore.

- Ans**
- ☒ 1. Only conclusions I and II follow.
 - ☒ 2. Only conclusions II and III follow.

- ☒ 3. None of the conclusions follows.
- ☒ 4. Only conclusions I and III follow.

Question ID : 98958012377
 Status : Answered
 Chosen Option : 1

Q.4 Select the set of numbers that is similar to the following set.

{5, 10, 17}

- Ans ☒ 1. {37, 50, 65}
- ☒ 2. {24, 35, 48}
- ☒ 3. {17, 35, 72}
- ☒ 4. {26, 50, 65}

Question ID : 98958012389
 Status : Not Attempted and Marked For Review
 Chosen Option : --

Q.5 In a code language, PENCIL is written as PNEICL. How will MOTHER be written as in that language?

- Ans ☒ 1. OMHTRE
- ☒ 2. MTOREH
- ☒ 3. MHTORE
- ☒ 4. MTOEHR

Question ID : 98958012372
 Status : Answered
 Chosen Option : 4

Q.6 If DRIVE is coded as 59372 and SPUR is coded as 6489, what will be the code for PRIDE?

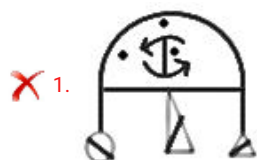
- Ans ☒ 1. 94532
- ☒ 2. 49352
- ☒ 3. 43925
- ☒ 4. 49235

Question ID : 98958012374
 Status : Answered
 Chosen Option : 2

Q.7 Select the correct mirror image of the given figure when the mirror is placed on the right of the figure.



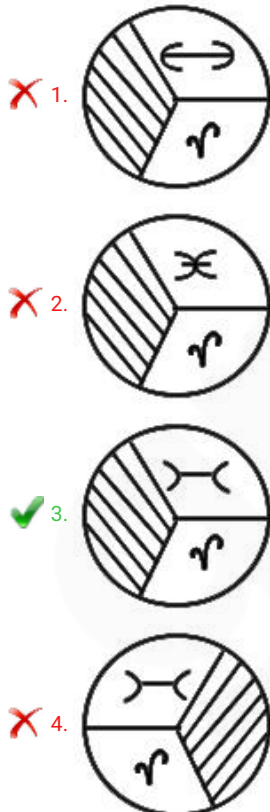
Ans





Question ID : 98958012401
Status : Answered
Chosen Option : 4

Q.8 Select the correct mirror image of the given figure when the mirror is placed on the right of the figure.



Question ID : 98958012400
Status : Answered
Chosen Option : 3

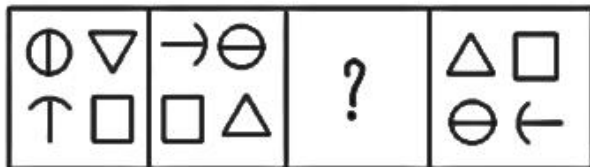
Q.9 Select the set of numbers that is similar to the following set.

{8, 19, 30}

- Ans ☒ 1. {11, 24, 38}
- ☒ 2. {12, 25, 38}
- ☒ 3. {6, 21, 32}
- ☒ 4. {9, 20, 35}

Question ID : 98958012388
Status : Answered
Chosen Option : 2

Q.1 Identify the missing figure in the following series.



- Ans ☒ 1.
- ☒ 2.
- ☒ 3.
- ☒ 4.

Question ID : 98958012395
Status : Answered
Chosen Option : 3

Q.1 If FATHER = 7 and DAUGHTER = 9, then DISTANT = _____.

- Ans ☒ 1. 10
- ☒ 2. 7
- ☒ 3. 8
- ☒ 4. 6

Question ID : 98958012375
Status : Answered
Chosen Option : 3

Q.1 Which of the following interchanges of signs and numbers would make the flowing equation correct?

$$18 - 8 \div 12 \times 6 + 10 = 12$$

Ans

- ✓ 1. + and −, 6 and 8
✗ 2. + and −, 8 and 10
✗ 3. × and ÷, 12 and 6
✗ 4. × and −, 18 and 6

Question ID : 98958012392

Status : Answered

Chosen Option : 1

Q.1 Two statements are given, followed by three conclusions numbered I, II and III. Assuming the statements to be true, even if they seem to be at variance with commonly known facts, decide which of the conclusions logically follow(s) from the statements.

Statements:

Some males are swimmers.
All swimmers are athletes.

Conclusions:

- I. Some athletes are males.
II. No athlete is male.
I. Some athletes are swimmers.

Ans ✓ 1. Only conclusions I and III follow.

- ✗ 2. All of the conclusions follow.
✗ 3. Only conclusions I and II follow.
✗ 4. Only conclusions II and III follow.

Question ID : 98958012376

Status : Answered

Chosen Option : 1

Q.1 Swati's school bus starts from her house and takes one left turn to reach the hospital. Then, it takes a right turn and covers 5 km. Finally, it takes a left turn to reach her school. On reaching the school, the bus faces south-west. In which direction was the bus facing when it left Swati's house?

- Ans ✗ 1. North-east
✓ 2. North-west
✗ 3. South-east
✗ 4. East

Question ID : 98958012403

Status : Answered

Chosen Option : 3

Q.1 In a code language, EXPLAIN is written as XEALPNI. How will FACTORY be written in that language?

- Ans ✗ 1. AFTOCYR
✗ 2. CAFOTYR
✓ 3. AFOTCYR
✗ 4. AFTCROY

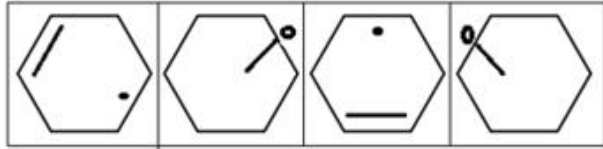
Question ID : 98958012373

Status : Answered

Chosen Option : 3

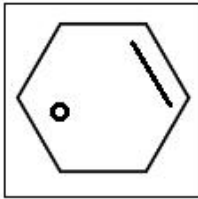
Q.1
6

Select the figure that will come next in the following series.

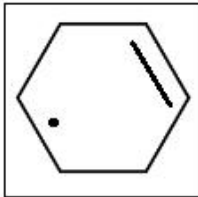


Ans

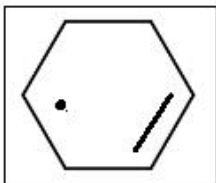
✗ 1.



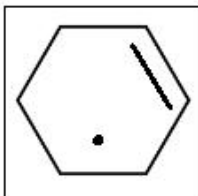
✓ 2.



✗ 3.



✗ 4.



Question ID : 98958012393

Status : Answered

Chosen Option : 2

Q.1 Which two numbers should be interchanged to make the following equation correct?

$$8 + 12 \div 9 \times 6 - 4 = 12 \div 6 \times 8 + 9 - 1$$

Ans

✗ 1. 8 and 4

✗ 2. 12 and 8

✓ 3. 6 and 12

✗ 4. 6 and 9

Question ID : 98958012391

Status : Answered

Chosen Option : 3

Q.1 जिस प्रकार 'थका' का संबंध 'थका हुआ' से है उसी प्रकार 'दुःखि' का संबंध '_____ ' से है।

Ans

✗ 1. अफसोस

✗ 2. भावुक

✗ 3. गंभीर

✓ 4. उदास

Question ID : 98958012366

Status : Answered

Chosen Option : 4

Q.1
9 Which number will replace the question mark (?) in the following series?

7, 9, 13, 15, ?, 21, 25

Ans ☒ 1. 18

☒ 2. 19

☒ 3. 17

☒ 4. 20

Question ID : 98958012378

Status : Answered

Chosen Option : 2

Q.2
0 निम्नलिखित चार शब्दों में से तीन शब्द किसी विशिष्ट सन्दर्भ में एक दूसरे के समान हैं और इनमें से एक असमान है। असमान विकल्प का चयन कीजिए।

Ans ☒ 1. ध्यान

☒ 2. थकान

☒ 3. चिंता

☒ 4. तनाव

Question ID : 98958012364

Status : Answered

Chosen Option : 1

Q.2
1 Which two signs should be interchanged to make the given equation correct?

$$9 + 12 \div 6 \times 8 - 4 = 14$$

Ans ☒ 1. + and ×

☒ 2. × and ÷

☒ 3. - and ×

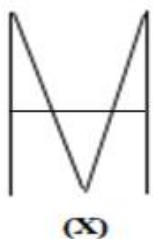
☒ 4. ÷ and +

Question ID : 98958012390

Status : Not Attempted and Marked For Review

Chosen Option : --

Q.2
2 Select the option in which the given figure is embedded.



Ans

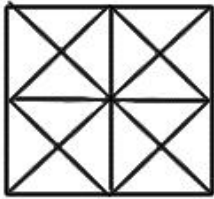
✗ 1.



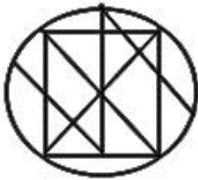
✓ 2.



✗ 3.



✗ 4.



Question ID : 98958012399

Status : Answered

Chosen Option : 2

Q.2 3 Two positions of the same dice are given. Which number will be at the top if '6' is at the bottom?



Ans

✗ 1. 3

✓ 2. 4

✗ 3. 1

✗ 4. 5

Question ID : 98958012397

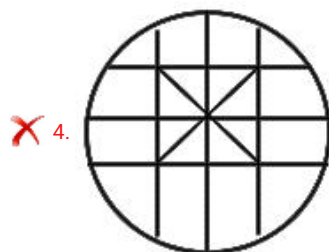
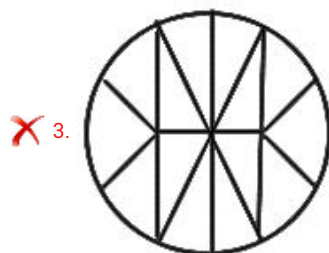
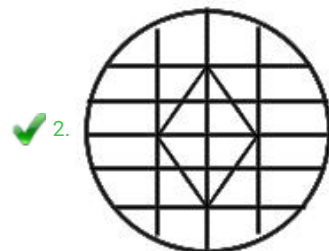
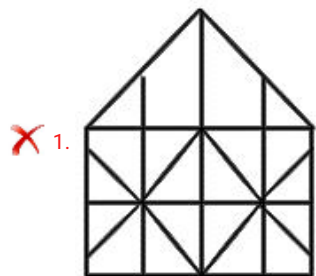
Status : Answered

Chosen Option : 1

Q.2 4 Select the option in which the given figure is embedded.



Ans



Question ID : 98958012398
Status : Answered
Chosen Option : 2

Q.2 5 Which letter-cluster will replace the question mark (?) in the following series?

HKNQ, JIPO, KHQN, MFSL, ?

- Ans
- ✗ 1. NGRM
 - ✗ 2. NEKT
 - ✓ 3. NETK
 - ✗ 4. ODUJ

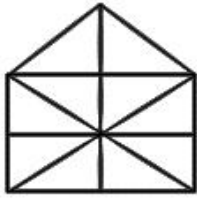
Question ID : 98958012359
Status : Answered
Chosen Option : 3

Q.2 6 Three of the following four number-pairs are alike in a certain way and one is different. Find the odd one out.

- Ans
- ✗ 1. 975 : 753
 - ✗ 2. 697 : 475
 - ✓ 3. 739 : 527
 - ✗ 4. 456 : 234

Question ID : 98958012386

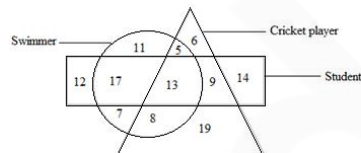
Q.2
7 How many triangles are there in the following figure?



- Ans
- ☒ 1. 23
 - ☒ 2. 21
 - ☒ 3. 14
 - ☒ 4. 19

Question ID : 98958012396
Status : **Answered**
Chosen Option : 4

Q.2
8 In the following diagram, the triangle represents 'cricket players', the circle represents 'swimmers' and the rectangle represents 'students'. The numbers in different segments show the number of persons.



How many students are swimmers but not cricket players?

- Ans
- ☒ 1. 17
 - ☒ 2. 13
 - ☒ 3. 8
 - ☒ 4. 18

Question ID : 98958012405
Status : **Answered**
Chosen Option : 4

Q.2
9 उस विकल्प का चयन कीजिए जिसके शब्द-युग्म के बीच वही सम्बन्ध है जो संबंध निम्नलिखित शब्द-युग्म के बीच है।
शब्द : अक्षर

- Ans
- ☒ 1. पिता : पुत्र
 - ☒ 2. विद्यालय : कक्षा
 - ☒ 3. चिकित्सक : दवाई
 - ☒ 4. मकान : भवन

Question ID : 98958012369
Status : **Answered**
Chosen Option : 2

Q.3
0 Three of the following four number-pairs are alike in a certain way and one is different. Find the odd one out.

- Ans
- ☒ 1. 12 : 20

✓ 2. 30 : 40

✗ 3. 20 : 30

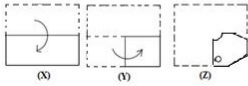
✗ 4. 42 : 56

Question ID : 98958012387

Status : Answered

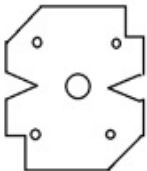
Chosen Option : 4

Q.3 X, Y और Z आकृतियों में कागज़ के एक वर्गाकार टुकड़े को मोड़ने का क्रम और मोड़े गये कागज़ को काटने का ढंग दर्शाया गया है। तय खोलने पर यह कागज़ कैसा दिखाई देगा?

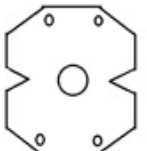


Ans

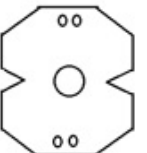
✗ 1.



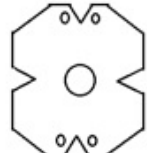
✗ 2.



✓ 3.



✗ 4.



Question ID : 98958012402

Status : Answered

Chosen Option : 3

Q.3 Select the option that is related to the third number in the same way as the second number is related to the first number.

2

9 : 21 :: 27 : ____

Ans

✗ 1. 72

✗ 2. 51

✗ 3. 49

✓ 4. 63

Question ID : 98958012382

Status : Answered

Chosen Option : 4


Q.3 Rinky walked 70 m towards the east from her house, and then took a right turn and walked 50 m to reach the post office. From there, she took a right turn again and walked 150 m to reach the market, from where she took a left turn and walked a few meters to reach the school. If the air distance between Rinky's house and the school is 170 m, what is the air distance between the market and the school?

Ans

✗ 1. 90 m

✓ 2. 100 m

✗ 3. 70 m

 4. 120 m

Question ID : 98958012404
Status : Answered
Chosen Option : 3

Q.3 Three of the following four letter-clusters are alike in a certain way and one is different. Find the odd one out.
4

- Ans  1. WUTR
 2. JMPS
 3. GHIJ
 4. SQOM

Question ID : 98958012362
Status : Answered
Chosen Option : 3

Q.3 Select the option that is related to the third term in the same way as the second term is related to the first term.
5

ACFJ : ZXUQ :: ELHK : _____

- Ans  1. WOSP
 2. VUSP
 3. VOSP
 4. WRSQ

Question ID : 98958012371
Status : Answered
Chosen Option : 3

Q.3 Select the option that is related to the third number in the same way as the second number is related to the first number.
6

9 : 19 :: 29 : _____

- Ans  1. 69
 2. 39
 3. 49
 4. 59

Question ID : 98958012381
Status : Answered
Chosen Option : 2

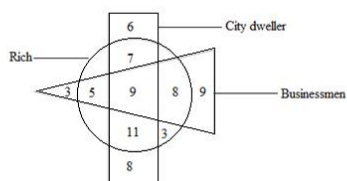
Q.3 Three of the following four letter-clusters are alike in a certain way and one is different. Find the odd one out.
7

- Ans  1. GPJM
 2. NEHK
 3. MSOQ
 4. RXTV

Question ID : 98958012363
Status : Answered
Chosen Option : 2

Q.3
8

In the following diagram, the triangle represents 'businessmen', the circle represents 'rich' and the rectangle represents 'city dwellers'. The numbers in different segments show the number of persons.



How many rich city dwellers are not businessmen?

- Ans
- ☒ 1. 14
 - ☒ 2. 16
 - ☒ 3. 18
 - ☒ 4. 20

Question ID : 98958012406

Status : Answered

Chosen Option : 3

Q.3 जिस प्रकार 'परीक्षण' का संबंध 'खोज' से है उसी प्रकार 'पढ़ना' का संबंध '_____ ' से है।

- Ans
- ☒ 1. खोज
 - ☒ 2. मूल्यांकन
 - ☒ 3. एकाग्रता
 - ☒ 4. सीखना

Question ID : 98958012367

Status : Answered

Chosen Option : 2

Q.4 Three of the following four number-pairs are alike in a certain way and one is different. Find the odd one out.

- Ans
- ☒ 1. 14 : 30
 - ☒ 2. 19 : 40
 - ☒ 3. 9 : 20
 - ☒ 4. 21 : 45

Question ID : 98958012384

Status : Not Answered

Chosen Option : --

Q.4 Three of the following four number-pairs are alike in a certain way and one is different. Find the odd one out.

- Ans
- ☒ 1. 15 : 18
 - ☒ 2. 45 : 55
 - ☒ 3. 35 : 42
 - ☒ 4. 25 : 30

Question ID : 98958012385

Status : Not Answered

Chosen Option : --

Q.4
2

Select the correct alternative to indicate the arrangement of the following words in a logical and meaningful order.

1. Judgment
2. Arrest
3. Prison
4. Court
5. Crime
6. Punishment

- Ans
- ☒ 1. 5, 4, 2, 1, 6, 3
 - ☒ 2. 3, 6, 4, 1, 2, 5
 - ☒ 3. 5, 2, 3, 4, 1, 6
 - ☒ 4. 5, 2, 4, 1, 6, 3

Question ID : 98958012361

Status : Answered

Chosen Option : 3

Q.4 Which number will replace the question mark (?) in the following series?

5, 7, 11, 14, 23, ?, 43, 48

- Ans
- ☒ 1. 31
 - ☒ 2. 26
 - ☒ 3. 39
 - ☒ 4. 27

Question ID : 98958012380

Status : Answered

Chosen Option : 4

Q.4 उस विकल्प का चयन कीजिए जिसके शब्द-युग्म के बीच वही सम्बन्ध है जो संबंध निम्नलिखित शब्द-युग्म के बीच है।

वर्दी : सिलाई

- Ans
- ☒ 1. पानी : तैरना
 - ☒ 2. चलाना : सड़क
 - ☒ 3. भोजन : पकाना
 - ☒ 4. द्रव्य : मापना

Question ID : 98958012368

Status : Answered

Chosen Option : 3

Q.4 Select the option that is related to the third term in the same way as the second term is related to the first term.

HJLN : ILOR :: DFHJ : _____

- Ans
- ☒ 1. EHKN
 - ☒ 2. EHLO
 - ☒ 3. CGJM
 - ☒ 4. EHJL

Question ID : 98958012370

Status : Answered

Chosen Option : 1

Q.4
6

Which number will replace the question mark (?) in the following series?

3, 5, 10, 18, 29, ?, 60

- Ans
- ☒ 1. 37
 - ☒ 2. 46
 - ☒ 3. 45
 - ☒ 4. 43

Question ID : 98958012379

Status : Not Answered

Chosen Option : --

Q.4 Select the correct alternative to indicate the arrangement of the following words in a logical and meaningful order.
7

- 1. Fruit
- 2. Harvest
- 3. Seed
- 4. Sell
- 5. Plant

- Ans
- ☒ 1. 3, 5, 1, 2, 4
 - ☒ 2. 4, 2, 1, 3, 5
 - ☒ 3. 3, 1, 5, 2, 4
 - ☒ 4. 1, 3, 5, 2, 4

Question ID : 98958012360

Status : Answered

Chosen Option : 1

Q.4 Which letter will replace the question mark (?) in the following series?
8

J, Q, L, O, N, ?, P, K

- Ans
- ☒ 1. M
 - ☒ 2. K
 - ☒ 3. L
 - ☒ 4. I

Question ID : 98958012358

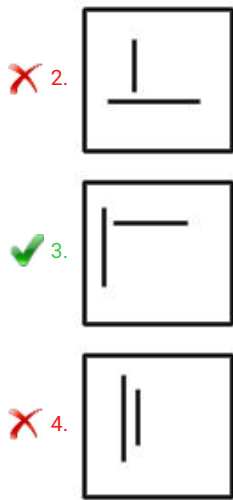
Status : Answered

Chosen Option : 1

Q.4 Identify the missing figure in the following series.
9



- Ans
- ☒ 1.



Question ID : 98958012394
Status : Answered
Chosen Option : 3

Q.5 निम्नलिखित चार शब्दों में से तीन शब्द किसी विशिष्ट सन्दर्भ में एक दूसरे के समान हैं और इनमें से एक असमान है। असमान विकल्प का चयन कीजिए।

- Ans ✗ 1. समाप्ति
✗ 2. विदाई
✗ 3. निष्कर्ष
✓ 4. मध्यांतर

Question ID : 98958012365
Status : Answered
Chosen Option : 4

Q.5 The _____ dance is performed by shepherd community of Goa during Navratri.

- Ans ✗ 1. Kolkali
✓ 2. Dhangar
✗ 3. Fugdi
✗ 4. Lava

Question ID : 98958010798
Status : Answered
Chosen Option : 1

Q.5 DNA was first isolated, analysed and recognised as a unique macro-molecule by _____ in 1869.

- Ans ✗ 1. Oswald Avery
✗ 2. William Astbury
✓ 3. Friedrich Miescher
✗ 4. Alfred Hershey

Question ID : 98958010807
Status : Answered
Chosen Option : 2

Q.5 _____ became the first Indian Badminton player to win the BWF World Tour Final in December 2018.

- Ans ☒ 1. Jwala Gutta
☒ 2. Saina Nehwal
☒ 3. PV Sindhu
☒ 4. Aparna Popat

Question ID : 98958010818
Status : Answered
Chosen Option : 4

Q.5 _____ was awarded the International Gandhi Peace Award (2016) for its contribution towards the improvement of sanitation facilities in India and the emancipation of manual scavengers.

- Ans ☒ 1. Akshaya Patra Foundation
☒ 2. Vivekananda Kendra
☒ 3. Sulabh International
☒ 4. Ekal Abhiyan Trust

Question ID : 98958010813
Status : Answered
Chosen Option : 1

Q.5 _____ became India's first judo medallist at the Youth Olympics Games held in Argentina in 2018.

- Ans ☒ 1. Garima Chaudhary
☒ 2. Rajwinder Kaur
☒ 3. Kalpana Devi
☒ 4. Thangjam Tababi Devi

Question ID : 98958010828
Status : Not Answered
Chosen Option : --

Q.5 The Second Battle of Tarain was fought in the year _____.

- Ans ☒ 1. 1294 AD
☒ 2. 1345 AD
☒ 3. 1192 AD
☒ 4. 1079 AD

Question ID : 98958010832
Status : Answered
Chosen Option : 4

Q.5 In January 2019, the Reserve Bank of India initiated two surveys namely, Industrial Outlook Survey (IOS) and _____.

- Ans ☒ 1. Services Outlook Survey (SOS)
☒ 2. Services and Infrastructure Outlook Survey (SIOS)
☒ 3. Services Trade Survey (STS)
☒ 4. Services and Trade Outlook Survey (STOS)

Question ID : 98958010814
Status : Answered
Chosen Option : 4

Q.5
8 Garo Hills lie in _____ state.

- Ans
- ☒ 1. Manipur
 - ☒ 2. Nagaland
 - ☒ 3. Assam
 - ☒ 4. Meghalaya

Question ID : 98958010830
Status : Answered
Chosen Option : 4

Q.5
9 As of January 2019, the number of high courts in India is _____.

- Ans
- ☒ 1. 25
 - ☒ 2. 20
 - ☒ 3. 18
 - ☒ 4. 30

Question ID : 98958010839
Status : Answered
Chosen Option : 1

Q.6
0 Which of the following articles of the India Constitution deals with the Uniform Civil Code?

- Ans
- ☒ 1. Article 44
 - ☒ 2. Article 46
 - ☒ 3. Article 43
 - ☒ 4. Article 45

Question ID : 98958010842
Status : Answered
Chosen Option : 1

Q.6
1 Karma is a dance form from which of the following states?

- Ans
- ☒ 1. Maharashtra
 - ☒ 2. Gujarat
 - ☒ 3. Jharkhand
 - ☒ 4. Rajasthan

Question ID : 98958010834
Status : Answered
Chosen Option : 3

Q.6
2 The expansion project of Numaligarh Refinery involves setting up a crude oil pipeline from _____ to Numaligarh.

- Ans
- ☒ 1. Paradip
 - ☒ 2. Bina
 - ☒ 3. Halida
 - ☒ 4. Banauni

Question ID : 98958010802
Status : Not Attempted and Marked For Review

Q.6 In June 2017, NASA successfully launched _____ mission to study the interstellar medium, the matter between stars.
3

- Ans ☒ 1. CHESSE
☒ 2. BLESS
☒ 3. FLESS
☒ 4. HESS

Question ID : 98958010803

Status : Answered

Chosen Option : 4

Q.6 Weightlifter _____ won India's maiden gold medal at 2018 Youth Olympic Games in the men's 62 kg category in Argentina.
4

- Ans ☒ 1. Sanjita Chanu
☒ 2. Jeremy Lalrinnunga
☒ 3. Jitu Rai
☒ 4. Santosh Yadav

Question ID : 98958010825

Status : Answered

Chosen Option : 2

Q.6 The tennis pair of _____ won a gold medal in the Men's Doubles tennis event at the 2018 Asian Games.
5

- Ans ☒ 1. Mahesh Bhupathi and Leander Paes
☒ 2. Yuki Bhambri and Ramanathan Krishnan
☒ 3. Aleksandr Bublik and Denis Yevseyev
☒ 4. Rohan Bopanna and Divij Sharan

Question ID : 98958010827

Status : Marked For Review

Chosen Option : 3

Q.6 The Gurmukhi script was created in the 16th century CE by the second Sikh guru _____.
6

- Ans ☒ 1. Guru Amar Das
☒ 2. Guru Arjan
☒ 3. Guru Angad
☒ 4. Guru Ram Das

Question ID : 98958010812

Status : Marked For Review

Chosen Option : 3

Q.6 In which year did Independent India win its first Olympic gold medal?
7

- Ans ☒ 1. 2008
☒ 2. 1960
☒ 3. 1972
☒ 4. 1948

Question ID : 98958010815

Status : **Answered**

Chosen Option : 1

Q.6 The book 'Ammachi's Amazing Machines' by _____ won 'The Hindu Young World-Goodbooks Award' 2018 in the 'Best Picture Book: Illustration' category at the event.

Ans

- ☒ 1. Rajiv Elipe
- ☐ 2. Mamta Nainy
- ☐ 3. Vinayak Verma
- ☐ 4. Venita Coelho

Question ID : 98958010794

Status : **Not Attempted and Marked For Review**

Chosen Option : --

Q.6 Which of the following gases turn lime water milky?

Ans

- ☒ 1. Carbon Dioxide
- ☐ 2. Oxygen
- ☐ 3. Nitrogen
- ☐ 4. Hydrogen

Question ID : 98958010822

Status : **Answered**

Chosen Option : 4

Q.7 Which of the following elements/chemical compounds has the highest density?

Ans

- ☐ 1. Nickel
- ☐ 2. Zinc
- ☐ 3. Mercury
- ☒ 4. Osmium

Question ID : 98958010796

Status : **Marked For Review**

Chosen Option : 1

Q.7 In January 2019, the World Health Organisation released its list of 10 global health threats which demand immediate attention. Which of the following is NOT one of them?

Ans

- ☒ 1. Communicable diseases
- ☐ 2. HIV
- ☐ 3. Dengue
- ☐ 4. Antimicrobial resistance

Question ID : 98958010831

Status : **Answered**

Chosen Option : 1

Q.7 In November 2018, _____ electronics company CASIO launched the world's first Goods and Services Tax (GST) calculator in India.

Ans

- ☐ 1. US
- ☐ 2. UK
- ☐ 3. Chinese

✓ 4. Japanese

Question ID : 98958010811

Status : Answered

Chosen Option : 3

Q.7 Pune is set to become the first Indian city to have a traffic robot in 2019. Which of the following statements is NOT true about the traffic police authorities of Pune and their robot named 'Rodeo'?

Ans 1. ☒

Rodeo's hands have been engineered to move and show stop signs to vehicles

✓ 2. Rodeo has a 26-inch LCD display.

✗ 3.

Rodeo will move around city roads, functioning as a quasi-traffic policeman and cautioning commuters.

✗ 4.

Rodeo is equipped with a siren, skid-steering wheels and obstacle-detection sensors.

Question ID : 98958010795

Status : Answered

Chosen Option : 1

Q.7 An exhibition _____ was held in New Delhi, in January 2019 by the Minority Affairs Ministry to project the talent of Indian artisans.

Ans 1. ☒ Threads Fashion and Lifestyle

✗ 2. Adaah

✓ 3. Hunar Haat

✗ 4. Andaaz

Question ID : 98958010823

Status : Answered

Chosen Option : 3

Q.7 The power of a lens is measured in _____.

Ans 1. ☒ Kelvin

✗ 2. Candela

✗ 3. Ampere

✓ 4. Diopter

Question ID : 98958010817

Status : Answered

Chosen Option : 4

Q.7 The Drishyakala-Exhibition held at the Red Fort showcased art works from _____ till India's independence.

Ans 1. ☒ 11th century

✓ 2. 16th century

✗ 3. 12th century

✗ 4. 10th century

Question ID : 98958010838

Status : Answered

Chosen Option : 3

7 Passer Domesticus is commonly known as _____.

- Ans
- ☒ 1. Parrot
 - ☒ 2. Sparrow
 - ☒ 3. Pigeon
 - ☒ 4. Lark

Question ID : 98958010835
Status : Answered
Chosen Option : 3

Q.7 The hypothalamus, a small region of the _____ plays a crucial role in many important functions of the human body.
8

- Ans
- ☒ 1. liver
 - ☒ 2. kidney
 - ☒ 3. brain
 - ☒ 4. stomach

Question ID : 98958010841
Status : Answered
Chosen Option : 3

Q.7 In August 2018, India rejected Pakistan's objections on its two hydropower projects, Pakal Dul and Lower Kalnai on the _____ river.
9

- Ans
- ☒ 1. Kaveri
 - ☒ 2. Yamuna
 - ☒ 3. Brahmaputra
 - ☒ 4. Chenab

Question ID : 98958010833
Status : Answered
Chosen Option : 4

Q.8 Who started the Asiatic Society of Bengal in 1784?
0

- Ans
- ☒ 1. William Jones
 - ☒ 2. William Wordsworth
 - ☒ 3. William Adam
 - ☒ 4. William Carey

Question ID : 98958010829
Status : Answered
Chosen Option : 1

Q.8 In January 2019, US-based Indian poet _____ received the 'Woman's Voice Award' at the Apeejay Kolkata Literary Festival (AKLF) 2019.
1

- Ans
- ☒ 1. Meena Alexander
 - ☒ 2. Ranjani Murali
 - ☒ 3. Smita Agarwal
 - ☒ 4. Sujata Bhatt

Question ID : 98958010804
Status : Not Answered

Q.8 2 Sanrakshan Kshamata Mahotsav (SAKSHAM) falls under the aegis of the _____ Government of India.

- Ans
- ☒ 1. Ministry of External Affairs
 - ☒ 2. Ministry of Chemicals and Fertilizers
 - ☒ 3. Ministry of Finance
 - ☒ 4. Ministry of Petroleum & Natural Gas

Question ID : 98958010801

Status : Answered

Chosen Option : 2

Q.8 3 In January 2018, renowned scientist, _____ took charge as the Director of Vikram Sarabhai Space Centre (VSSC).

- Ans
- ☒ 1. Jayant Narlikar
 - ☒ 2. S. Somanath
 - ☒ 3. Salim Ali
 - ☒ 4. C. N .R Rao

Question ID : 98958010806

Status : Answered

Chosen Option : 2

Q.8 4 Which is the smallest bone in the human body?

- Ans
- ☒ 1. Malleus
 - ☒ 2. Metacarsal
 - ☒ 3. Stapes
 - ☒ 4. Incus

Question ID : 98958010821

Status : Answered

Chosen Option : 3

Q.8 5 The _____ is a Jain text containing the biographies of the Jain Tirthankaras, most notably Parshvanath and Mahavira.

- Ans
- ☒ 1. Uttaradhyayana
 - ☒ 2. Adi Purana
 - ☒ 3. Kalpa Sutra
 - ☒ 4. Mahapurana

Question ID : 98958010840

Status : Answered

Chosen Option : 1

Q.8 6 Manas Tiger Reserve is located in which Indian state?

- Ans
- ☒ 1. Maharashtra
 - ☒ 2. Rajasthan
 - ☒ 3. Karnataka
 - ☒ 4. Assam

Question ID : 98958010826
Status : Answered
Chosen Option : 4

Q.8 Which Schedule of the Indian Constitution deals with the disqualification of elected members on the ground of defection?

- Ans
- ☒ 1. Tenth
 - ☐ 2. Ninth
 - ☐ 3. Eleventh
 - ☐ 4. Twelfth

Question ID : 98958010809
Status : Answered
Chosen Option : 1

Q.8 'Sakhi centre' or 'One Stop Centre (OSC)' is a fully sponsored scheme of the Central Government under the Ministry of _____.

- Ans
- ☐ 1. Housing and Urban Affairs
 - ☒ 2. Women and Child Development
 - ☐ 3. Law and Justice
 - ☐ 4. Culture

Question ID : 98958010799
Status : Answered
Chosen Option : 2

Q.8 In January 2019, President Ramnath Kovind gave his assent to the 124th constitutional Amendment Bill (which is now the 103rd Amendment Act of the Constitution of India) providing _____ reservation for economically weaker sections from the upper castes.

- Ans
- ☒ 1. 10%
 - ☐ 2. 15%
 - ☐ 3. 5%
 - ☐ 4. 20%

Question ID : 98958010797
Status : Answered
Chosen Option : 1

Q.9 Banabhatta was the court poet of which of the following Indian kings?

- Ans
- ☐ 1. Yasovarman
 - ☐ 2. Pulakesin II
 - ☒ 3. Harshavardhana
 - ☐ 4. Chandra gupta II

Question ID : 98958010836
Status : Answered
Chosen Option : 3

Q.9 _____ is an inherited blood disorder due to which people suffering from this condition are unable to make haemoglobin.

- Ans
- ☐ 1. Stroke
 - ☒ 2. Thalassemia
 - ☐ 3. Thrombosis

☒ 4. Bone Marrow failure

Question ID : 98958010808

Status : Answered

Chosen Option : 2

Q.9 In January 2019, Union Minister of Petroleum and Natural Gas _____ flagged off Sanrakshan Kshamata Mahotsav (SAKSHAM) vans.

- Ans
- ☒ 1. DV Sadananda Gowda
 - ☒ 2. Suresh Prabhu
 - ☒ 3. Dharmendra Pradhan
 - ☒ 4. Nitin Jairam Gadkari

Question ID : 98958010824

Status : Answered

Chosen Option : 3

Q.9 The states of _____ celebrated their 47th Statehood Day on 21st January 2019.

- Ans
- ☒ 1. Uttarakhand, Manipur and Telangana
 - ☒ 2. Chhattisgarh, Telangana and Tripura
 - ☒ 3. Tripura, Assam and Telangana
 - ☒ 4. Tripura, Manipur and Meghalaya

Question ID : 98958010805

Status : Answered

Chosen Option : 4

Q.9 Who wrote the book "Gulamgiri"?

- Ans
- ☒ 1. Swami Dayanand Saraswati
 - ☒ 2. Jyotiba Phule
 - ☒ 3. Vinoba Bhave
 - ☒ 4. Swami Vivekanand

Question ID : 98958010819

Status : Answered

Chosen Option : 2

Q.9 The _____ was awarded the International Gandhi Peace Prize (2016) for its work towards providing mid-day meals to children across India.

- Ans
- ☒ 1. Vivekananda Kendra
 - ☒ 2. Ekal Abhiyan Trust
 - ☒ 3. Sulabh International
 - ☒ 4. Akshaya Patra Foundation

Question ID : 98958010800

Status : Answered

Chosen Option : 4

Q.9 The construction work of the ₹ 500-crore Pagladiya Multipurpose Dam project in Nalbari district of _____ will begin from February 2019.

- Ans
- ☒ 1. Telangana

☒ 2. Meghalaya

☒ 3. Tripura

☒ 4. Assam

Question ID : 98958010816

Status : Answered

Chosen Option : 4

Q.9
7 The first India-ASEAN InnoTech Summit was held in _____ in November 2018.

Ans ☒ 1. Chennai

☒ 2. Ahmedabad

☒ 3. New Delhi

☒ 4. Mumbai

Question ID : 98958010810

Status : Answered

Chosen Option : 2

Q.9
8 In January 2019, Prime Minister Narendra Modi inaugurated the Kollam Bypass. Which of the following is NOT true of the bypass?

Ans ☒ 1. It lies on the National Highway-66.

☒ 2.

It is the first National Highway project in the country taken up on a 50:50 Centre-State partnership.

☒ 3. It is 18 km long and has three lanes.

☒ 4.

Its opening would considerably reduce travel time between Alappuzha and Thiruvananthapuram.

Question ID : 98958010843

Status : Not Answered

Chosen Option : --

Q.9
9 'The Hindu Young World-Goodbooks Award' 2018 in the 'Best Book: Fiction' category was given to _____ for 'Boy No. 32'.

Ans ☒ 1. Vinayak Verma

☒ 2. Venita Coelho

☒ 3. Mamta Nainy

☒ 4. Rajiv Elipse

Question ID : 98958010820

Status : Not Answered

Chosen Option : --

Q.1
00 Shot-putter _____ won a gold medal in the men's shot put event at the 2018 Jakarta-Palembang Asian Games held in Indonesia.

Ans ☒ 1. Inderjit Singh

☒ 2. Tejinder Pal Singh Toor

☒ 3. Om Prakash Singh

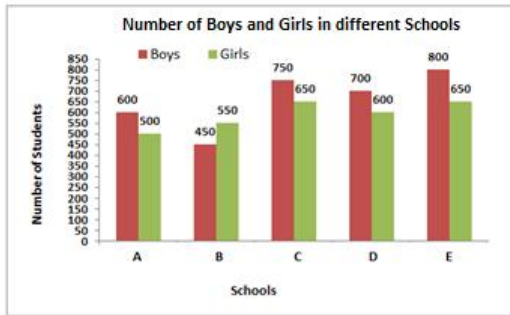
☒ 4. Bahadur Singh Sagoo

Question ID : 98958010837

Status : Answered

Chosen Option : 2

Q.1
01



In the given bar graph, in which college, the percentage of boys is the highest?

- Ans ☒ 1. E
☒ 2. C
☒ 3. D
☒ 4. A

Question ID : 98958010936

Status : Answered

Chosen Option : 1

Q.1
02

Let $\Delta ABC \sim \Delta RPQ$ and $\frac{ar(\Delta ABC)}{ar(\Delta PQR)} = \frac{1}{9}$. If $AB = 3$ cm, $BC = 4$ cm and $AC = 5$ cm, then PQ is equal to:

- Ans ☒ 1. 9 cm
☒ 2. 15 cm
☒ 3. 12 cm
☒ 4. 18 cm

Question ID : 98958010930

Status : Not Answered

Chosen Option : --

Q.1
03

If $x + \frac{1}{x} = 7$, then $x^3 + \frac{1}{x^3}$ is equal to:

- Ans ☒ 1. 322
☒ 2. 385
☒ 3. 343
☒ 4. 364

Question ID : 98958010924

Status : Answered

Chosen Option : 1

Q.1
04

If the seven digit number $3x6349y$ is divisible by 88, then what will be the value of $(2x + 3y)$?

- Ans ☒ 1. 32
☒ 2. 30
☒ 3. 35
☒ 4. 28

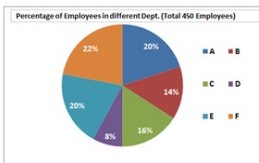
Question ID : 98958010895

Status : Not Answered

Chosen Option : --

Q.1

05



In the given pie-chart, if the female employees in department D is 75%, then how many male employees are in that department?

- Ans
- ☒ 1. 6
 - ☒ 2. 4
 - ☒ 3. 9
 - ☒ 4. 5

Question ID : 98958010940

Status : Answered

Chosen Option : 3

Q.1 One side of a rhombus is 6.5 cm and one of it's diagonal is 12 cm. What is the area of the rhombus?
06

- Ans
- ☒ 1. 60 cm²
 - ☒ 2. 15 cm²
 - ☒ 3. 30 cm²
 - ☒ 4. 78 cm²

Question ID : 98958010919

Status : Answered

Chosen Option : 4

Q.1 The average of 20 numbers is 65. The average of the first 9 numbers is 68 and the average of next 8 numbers is 62. If the
07 18th number is 3 more than 19th number and 9 less than 20th number, then what is the average of 19th and 20th number?

- Ans
- ☒ 1. 65.5
 - ☒ 2. 65
 - ☒ 3. 64.5
 - ☒ 4. 66

Question ID : 98958010902

Status : Not Answered

Chosen Option : --

Q.1 A, B and C started a business by investing ₹ 1,37,500 and ₹ 1,62,500 and ₹ 1,87,500 respectively. A is a working
08 partner and gets 20% of the profit as working allowance and remaining is distributed in the proportion of their investment. If the total profit is ₹ 2,19,375, what is the share of C?

- Ans
- ☒ 1. ₹ 64,500
 - ☒ 2. ₹ 62,700
 - ☒ 3. ₹ 67,500
 - ☒ 4. ₹ 88,600

Question ID : 98958010910

Status : Not Answered

Chosen Option : --

Q.1 Pipes A and B can fill a tank in 16 hours and 24 hours respectively whereas pipe C can empty the full tank in 40 hours.
09 All three pipes are opened together, but pipe A is closed after 8 hours. After how many hours, the remaining part of tank will be filled?

- Ans
- ☒ 1. 26
 - ☒ 2. 22

☒ 3. 30

☒ 4. 28

Question ID : 98958010915

Status : Not Answered

Chosen Option : --

Q.1 10 What is the ratio of mean proportional between 3.6 and 12.1 and third proportional between 2 and 11?

Ans ☒ 1. 11 : 36

☒ 2. 36 : 5

☒ 3. 6 : 55

☒ 4. 6 : 5

Question ID : 98958010909

Status : Not Answered

Chosen Option : --

Q.1 11 A shopkeeper sold two articles for ₹ 9,879 each. On one, he gained 11% and on the other, he lost 11%. What is the overall percentage gain or loss?

Ans ☒ 1. 1.25% gain

☒ 2. 1.21% gain

☒ 3. 1.21% loss

☒ 4. 1.25% loss

Question ID : 98958010908

Status : Not Answered

Chosen Option : --

Q.1 12 A cuboid of edges 32 cm, 4 cm and 4 cm is cut to form cubes of edge 4 cm each. What is the sum of total surface areas of all cubes formed?

Ans ☒ 1. 768 cm²

☒ 2. 640 cm²

☒ 3. 544 cm²

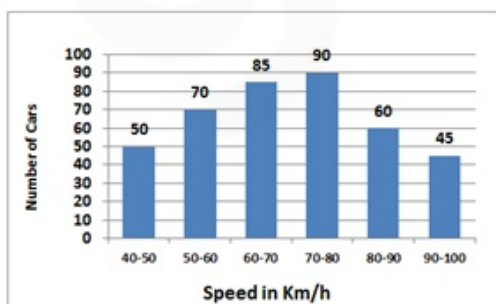
☒ 4. 576 cm²

Question ID : 98958010921

Status : Not Answered

Chosen Option : --

Q.1 13



In the given histogram, in which class interval, the median lies?

Ans ☒ 1. 60-70

☒ 2. 50-60

☒ 3. 80-90

✗ 4. 70-80

Question ID : 98958010942
Status : Answered
Chosen Option : 1

Q.1
14 The square root which of the following is a rational number?

- Ans
- ✗ 1. 72905.2
 - ✗ 2. 67508.5
 - ✓ 3. 5535.36
 - ✗ 4. 3152.88

Question ID : 98958010894
Status : Answered
Chosen Option : 3

Q.1
15 If the income of A is 24% less than income of B, then what percentage is B's income is more than that of A?

- Ans
- ✗ 1. $\frac{600}{17}\%$
 - ✗ 2. $\frac{600}{29}\%$
 - ✓ 3. $\frac{600}{19}\%$
 - ✗ 4. $\frac{600}{31}\%$

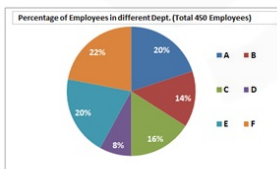
Question ID : 98958010905
Status : Not Answered
Chosen Option : --

Q.1
16 If $a^3 - b^3 = 3552$ and $(a - b) = 6$, then $(a + b)^2 - ab$ is equal to:

- Ans
- ✗ 1. 568
 - ✗ 2. 636
 - ✓ 3. 592
 - ✗ 4. 618

Question ID : 98958010925
Status : Not Answered
Chosen Option : --

Q.1
17



In the given pie-chart, what is the central angle of the sector representing the number of employees in the department D?

- Ans
- ✗ 1. 29.8°
 - ✓ 2. 28.8°
 - ✗ 3. 29.2°
 - ✗ 4. 29.6°

Question ID : 98958010939
Status : Answered

Q.1 18 Two pipes A and B can fill a tank in 16 hours and 20 hours respectively. They are opened alternatively for 1 hour each, starting with pipe A first. In how many hours will the empty tank be filled?

Ans

- ☒ 1. $17\frac{1}{5}$
☒ 2. $17\frac{3}{4}$
☒ 3. $17\frac{3}{5}$
☒ 4. $17\frac{1}{14}$

Question ID : 98958010916

Status : Not Answered

Chosen Option : --

Q.1 19 The sides of a triangle are 24 cm, 45 cm and 51 cm. At each of its vertices, circles of radius 10.5 cm are drawn. What is the area of the triangle, excluding the portion covered by sectors of the circles? ($\pi = \frac{22}{7}$)

Ans

- ☒ 1. 464.75 cm²
☒ 2. 244.75 cm²
☒ 3. 366.75 cm²
☒ 4. 327.75 cm²

Question ID : 98958010920

Status : Not Answered

Chosen Option : --

Q.1 20 $\frac{17}{30} + \left[3\frac{1}{5} - \left\{ \frac{5}{6} - \left(3\frac{4}{5} \div 9\frac{1}{2} \right) \right\} \right]$ is equal to:

Ans

- ☒ 1. $\frac{10}{3}$
☒ 2. $\frac{1}{5}$
☒ 3. $\frac{11}{3}$
☒ 4. $\frac{3}{5}$

Question ID : 98958010899

Status : Not Answered

Chosen Option : --

Q.1 21 The value of $\frac{\sin^2 60^\circ + \cos^2 30^\circ - \sec 35^\circ \cdot \sin 55^\circ}{\sec 60^\circ + \operatorname{cosec} 30^\circ}$ is equal to:

Ans

- ☒ 1. $\frac{1}{2}$
☒ 2. $\frac{1}{4}$
☒ 3. $\frac{1}{8}$
☒ 4. $\frac{1}{3}$

Question ID : 98958010932

Status : Not Answered

Chosen Option : --

Q.1 In an examination, 47% passed in science and 51% failed in mathematics. If 42% failed in both subjects, what
22 percentage passed in both subjects?

- Ans
- ☒ 1. 40%
 - ☒ 2. 36%
 - ☒ 3. 38%
 - ☒ 4. 42%

Question ID : 98958010907

Status : Not Answered

Chosen Option : --

Q.1 A sphere of radius 9 cm is melted and recast into small spheres of radius 2 cm each. How many such sphere can be made?
23

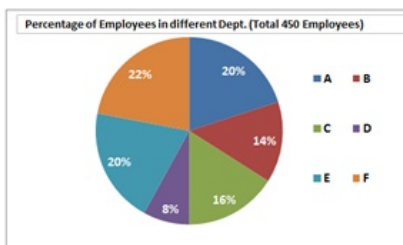
- Ans
- ☒ 1. 91
 - ☒ 2. 93
 - ☒ 3. 92
 - ☒ 4. 90

Question ID : 98958010923

Status : Not Answered

Chosen Option : --

Q.1
24



In the given pie-chart, what is the number of employees working in department A?

- Ans
- ☒ 1. 85
 - ☒ 2. 90
 - ☒ 3. 80
 - ☒ 4. 960

Question ID : 98958010938

Status : Not Answered

Chosen Option : --

Q.1 The price of sugar has increased by 14%. By what percentage can a person decrease the consumption so that there is an
25 increase in the expenditure by 8% only? (correct to one decimal place)

- Ans
- ☒ 1. 5.9%
 - ☒ 2. 5.3%
 - ☒ 3. 5.5%
 - ☒ 4. 5.7%

Question ID : 98958010906

Status : Not Answered

Chosen Option : --

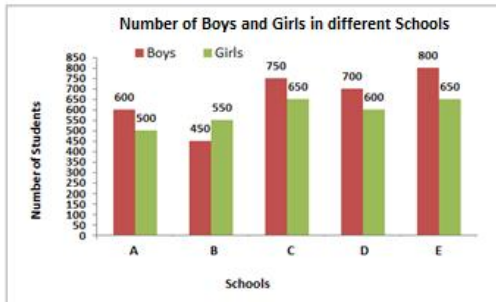
Q.1 $\frac{63.5 \times 63.5 \times 63.5 + 36.5 \times 36.5 \times 36.5}{6.35 \times 6.35 + 3.65 \times 3.65 - 6.35 \times 3.65}$ is equal to:
26

- Ans
- ☒ 1. 100

- ☐ 2. 1,000
- ☐ 3. 1,00,000
- ☒ 4. 10,000

Question ID : 98958010900
Status : Not Answered
Chosen Option : --

Q.1
27



In the given bar graph, what is the ratio of the total boys and girls in all schools?

- Ans ☐ 1. 59 : 66
- ☐ 2. 65 : 63
- ☐ 3. 65 : 58
- ☒ 4. 66 : 59

Question ID : 98958010935
Status : Not Answered
Chosen Option : --

Q.1 The length of shadow of a vertical pole on the ground is 24 m. If the angle of elevation of the sun at that time is θ , such that $\sin \theta = \frac{5}{13}$, then what is the height of the pole?

28

- Ans ☐ 1. 8 m
- ☒ 2. 10 m
- ☐ 3. 18 m
- ☐ 4. 12 m

Question ID : 98958010933
Status : Not Answered
Chosen Option : --

Q.1 The efficiencies of A, B and C are in the ratio 5 : 6 : 8. Working together, they can complete a piece of work in 120 hours. In how many hours will, B alone be able to complete 40% of that work?

29

- Ans ☐ 1. 167.2
- ☐ 2. 182.4
- ☐ 3. 114
- ☒ 4. 152

Question ID : 98958010914
Status : Not Answered
Chosen Option : --

Q.1 A shopkeeper marks the price of an article such that after giving a discount of 30%, he gains 20%. If the marked price of the article is ₹ 480, what is the cost price of the article?

30

- Ans ☐ 1. ₹ 260
- ☐ 2. ₹ 300

☒ 3. ₹ 250

☒ 4. ₹ 280

Question ID : 98958010903

Status : Not Answered

Chosen Option : --

Q.1 If a train runs with the speed of 52 km/h, it reaches its destination late by 15 minutes. However, if its speed is 65 km/h, it is late by 5 minutes only. The right time for the train to cover its journey is:

Ans ☒ 1. 45 minutes

☒ 2. 40 minutes

☒ 3. 35 minutes

☒ 4. 30 minutes

Question ID : 98958010917

Status : Not Answered

Chosen Option : --

Q.1 PA and PB are two tangents from a point P outside the circle with centre O. If A and B are points on the circle such that $\angle APB = 110^\circ$, then $\angle OAB$ is equal to:

Ans ☒ 1. 35°

☒ 2. 70°

☒ 3. 55°

☒ 4. 45°

Question ID : 98958010928

Status : Not Answered

Chosen Option : --

Q.1 In $\triangle ABC$, $\angle A = 70^\circ$. AB and AC are produced to points D and E respectively. If the bisectors of $\angle CBD$ and $\angle BCE$ meet at the point O, then $\angle BOC$ is equal to:

Ans ☒ 1. 95°

☒ 2. 105°

☒ 3. 70°

☒ 4. 55°

Question ID : 98958010929

Status : Not Answered

Chosen Option : --

Q.1 A boat can go 10 km downstream and 8 km upstream in 49 minutes. Also it can go 12 km downstream and 4 km upstream in 42 minutes. What is the speed of stream in km/h?

Ans ☒ 1. 2

☒ 2. 1

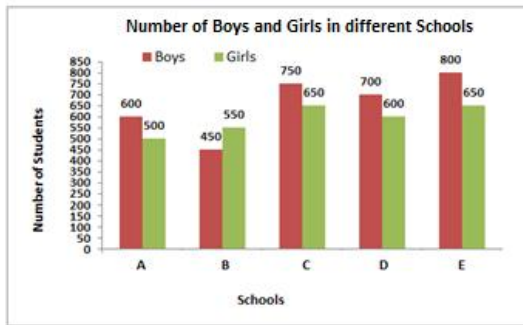
☒ 3. 1.5

☒ 4. 2.5

Question ID : 98958010918

Status : Not Answered

Chosen Option : --



In the given bar graph, what is the average number of girls from all schools?

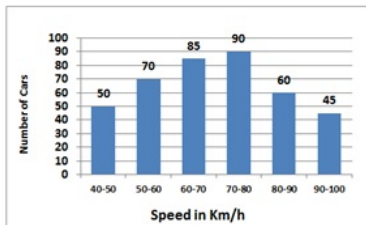
- Ans
- ☒ 1. 575
 - ☒ 2. 595
 - ☒ 3. 590
 - ☒ 4. 580

Question ID : 98958010937

Status : Not Answered

Chosen Option : --

Q.1
36



In the given histogram, what is the mean speed of cars (in km/h) to nearest whole number?

- Ans
- ☒ 1. 70
 - ☒ 2. 72
 - ☒ 3. 71
 - ☒ 4. 69

Question ID : 98958010943

Status : Not Answered

Chosen Option : --

Q.1
37 The successive discounts of 30%, 25% and 15% is equivalent to a single discount of:

- Ans
- ☒ 1. 60.275%
 - ☒ 2. 54.625%
 - ☒ 3. 60.725%
 - ☒ 4. 55.375%

Question ID : 98958010904

Status : Not Answered

Chosen Option : --

Q.1
38 Two numbers are in the ratio 6 : 11. If their HCF is 28, then the sum of these two numbers is:

- Ans
- ☒ 1. 476
 - ☒ 2. 392
 - ☒ 3. 448
 - ☒ 4. 420

Question ID : 98958010896

Status : Not Answered

Chosen Option : --

Q.1 16 persons working 6 hours a day can complete a work in 10 days. In how many days 24 persons working 8 hours a day will complete 80% of that work?

- Ans
- ☒ 1. 8
 - ☒ 2. 4
 - ☒ 3. 3
 - ☒ 4. 6

Question ID : 98958010913

Status : Not Answered

Chosen Option : --

Q.1 The radius of a cylinder is increased by 60% and radius of base is decreased by 20%. What is percentage increase in its volume?

- Ans
- ☒ 1. 105.2%
 - ☒ 2. 105.6%
 - ☒ 3. 105.8%
 - ☒ 4. 104.8%

Question ID : 98958010922

Status : Not Answered

Chosen Option : --

Q.1 What is the sum of digits of the least number, which when divided by 15, 18 and 42 leaves the same remainder 8 in each case and is also divisible by 13?

- Ans
- ☒ 1. 24
 - ☒ 2. 26
 - ☒ 3. 22
 - ☒ 4. 25

Question ID : 98958010897

Status : Not Answered

Chosen Option : --

Q.1 If $\sec 2x = \operatorname{cosec} (3x - 45^\circ)$, then x is equal to:

- Ans
- ☒ 1. 35°
 - ☒ 2. 27°
 - ☒ 3. 40°
 - ☒ 4. 45°

Question ID : 98958010931

Status : Not Answered

Chosen Option : --

Q.1 In a class of 45 students, 40% are boys and rest are girls. The average weight of the girls is 55 kg and that of boys is 65 kg. What is the average weight (in kg) of the whole class?

- Ans
- ☒ 1. 61 kg
 - ☒ 2. 58 kg
 - ☒ 3. 59 kg
 - ☒ 4. 60 kg

Question ID : 98958010901

Status : Not Answered

Chosen Option : --

Q.1 44 A sum of ₹ 10,200 is invested partly at 8% per annum and remaining at 6% per annum for 3 years at simple interest. If the total interest is ₹ 2,124, how much money was invested at 6% per annum?

- Ans
- ☒ 1. ₹ 5,400
 - ☐ 2. ₹ 5,200
 - ☐ 3. ₹ 4,900
 - ☐ 4. ₹ 4,800

Question ID : 98958010911

Status : Not Answered

Chosen Option : --

Q.1 45 From the top of a 120 m high tower, the angle of depression of the top of a pole is 45° and the angle of depression of the foot of the pole is θ , such that $\tan \theta = \frac{3}{2}$. What is the height of the pole?

- Ans
- ☐ 1. 80 m
 - ☐ 2. 75 m
 - ☐ 3. 60 m
 - ☒ 4. 40 m

Question ID : 98958010934

Status : Not Answered

Chosen Option : --

Q.1 46 If $(x-3)^2 + (2x-5)^3 + (x-4)^3 = (3x-9)(2x-5)(x-4)$, then what is the value of x ?

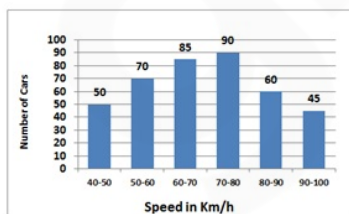
- Ans
- ☐ 1. 5
 - ☐ 2. 4
 - ☐ 3. 2
 - ☒ 4. 3

Question ID : 98958010926

Status : Not Answered

Chosen Option : --

Q.1 47



In the given histogram, what percentage of cars were running with the speed less than 60 km/h?

- Ans
- ☐ 1. 35%
 - ☒ 2. 30%
 - ☐ 3. 28%
 - ☐ 4. 25%

Question ID : 98958010941

Status : Not Answered

Chosen Option : --

Q.1
48 The value of $6\frac{1}{5} - [4\frac{1}{2} - \{\frac{5}{6} - (\frac{3}{5} + \frac{3}{10} - \frac{7}{15})\}]$ is:

- Ans
- ☒ 1. 2.5
 - ☒ 2. 1.8
 - ☒ 3. 2.8
 - ☒ 4. 2.1

Question ID : 98958010898

Status : Not Answered

Chosen Option : --

Q.1
49 A sum of ₹ 10,000 is invested for 17 months at 8% per annum compounded half yearly. What is the percentage gain at the end of 17 month, nearest to one decimal place?

- Ans
- ☒ 1. 12.2%
 - ☒ 2. 12.0%
 - ☒ 3. 11.8%
 - ☒ 4. 12.4%

Question ID : 98958010912

Status : Not Answered

Chosen Option : --

Q.1
50 ABCD is a cyclic quadrilateral such that AB is a diameter of the circle circumscribing it and $\angle ADC = 160^\circ$. What is the measure of the $\angle BAC$?

- Ans
- ☒ 1. 65°
 - ☒ 2. 60°
 - ☒ 3. 70°
 - ☒ 4. 75°

Question ID : 98958010927

Status : Not Answered

Chosen Option : --

Q.1
51 Select the most appropriate meaning of the given idiom.

Donkey's years

- Ans
- ☒ 1. once in a while
 - ☒ 2. a very long time
 - ☒ 3. having long ears
 - ☒ 4. instantly

Question ID : 98958010577

Status : Answered

Chosen Option : 2

Q.1
52 Select the antonym of the given word.

IMMACULATE

- Ans
- ☒ 1. messy
 - ☒ 2. systematic
 - ☒ 3. flawless
 - ☒ 4. untarnished

Question ID : 98958010572
Status : Answered
Chosen Option : 2

Q.1
53 Select the most appropriate word for the given group of words.

persons working at the same place

- Ans
- ☒ 1. fellows
 - ☒ 2. colleagues
 - ☒ 3. contemporaries
 - ☒ 4. homogeneous

Question ID : 98958010578
Status : Answered
Chosen Option : 2

Q.1 In the sentence identify the segment which contains the grammatical error.

54 A new research study has shown that long before they took up a strict vegetarian diet, the much loved pandas was a meat-eater.

- Ans
- ☒ 1. was a meat-eater
 - ☒ 2. that long before
 - ☒ 3. took up
 - ☒ 4. has shown

Question ID : 98958010546
Status : Answered
Chosen Option : 3

Q.1
55 Select the antonym of the given word.

DETER

- Ans
- ☒ 1. encourage
 - ☒ 2. excite
 - ☒ 3. prevent
 - ☒ 4. dissuade

Question ID : 98958010571
Status : Answered
Chosen Option : 1

Q.1
56 Select the wrongly spelt word.

- Ans
- ☒ 1. recieve
 - ☒ 2. reign
 - ☒ 3. rivalry
 - ☒ 4. rupee

Question ID : 98958010585
Status : Answered
Chosen Option : 3

Q.1

57 Select the most appropriate word for the given group of words.

a place where fish are kept

- Ans
- ☐ 1. herbarium
 - ☐ 2. zoo
 - ☐ 3. aviary
 - ☒ 4. aquarium

Question ID : 98958010579

Status : Answered

Chosen Option : 4

Q.1
58 In the sentence identify the segment which contains the grammatical error.

Although the toys are altogether in the cupboard they are not properly arranged.

- Ans
- ☐ 1. Although the toys
 - ☐ 2. are not properly arranged
 - ☒ 3. are altogether
 - ☐ 4. in the cupboard

Question ID : 98958010545

Status : Answered

Chosen Option : 2

Q.1
59 Select the most appropriate option to substitute the underlined segment in the given sentence. If there is no need to substitute it, Select No improvement.

A fire broke out in a slum cluster in the capital yesterday for short circuit at the overhanging wires.

- Ans
- ☐ 1. for short circuit in the overhanging wires.
 - ☒ 2. due to short circuit in the overhanging wires.
 - ☐ 3. due to short circuiting on the overhanging wires.
 - ☐ 4. No improvement

Question ID : 98958010549

Status : Answered

Chosen Option : 2

Q.1
60 Select the most appropriate meaning of the given idiom.

to be taken aback

- Ans
- ☐ 1. to pay no heed
 - ☒ 2. to be surprised
 - ☐ 3. to be very excited
 - ☐ 4. to take something back

Question ID : 98958010575

Status : Answered

Chosen Option : 1

Q.1
61 Select the most appropriate word to fill in the blank.

After the end of this lesson you _____ be able to write a paragraph on this topic.

- Ans
- ☒ 1. must
 - ☒ 2. will
 - ☒ 3. can
 - ☒ 4. could

Question ID : 98958010552
Status : Answered
Chosen Option : 2

Q.1 62 Select the most appropriate word to fill in the blank.

The flat _____ is nice but the approach road is too narrow and congested.

- Ans
- ☒ 1. oneself
 - ☒ 2. herself
 - ☒ 3. himself
 - ☒ 4. itself

Question ID : 98958010555
Status : Answered
Chosen Option : 4

Q.1 63 Select the synonym of the given word.

REMEDY

- Ans
- ☒ 1. restore
 - ☒ 2. cure
 - ☒ 3. healing
 - ☒ 4. bearing

Question ID : 98958010564
Status : Answered
Chosen Option : 2

Q.1 64 In the sentence identify the segment which contains the grammatical error.

Silver, as well as gold, are considered as precious metals.

- Ans
- ☒ 1. as precious metals.
 - ☒ 2. are considered
 - ☒ 3. as well as
 - ☒ 4. Silver

Question ID : 98958010542
Status : Answered
Chosen Option : 2

Q.1 65 Select the synonym of the given word.

AVOID

- Ans
- ☒ 1. evade
 - ☒ 2. face
 - ☒ 3. approach

☒ 4. pursue

Question ID : 98958010566

Status : Answered

Chosen Option : 1

Comprehension:

In the following passage some words have been deleted. Fill in the blanks with the help of the alternatives given. Select the most appropriate option for each number.

The woolly mammoth was a very large elephant-like mammal that lived on Earth several thousand years _____ (1). Some mammoths grew to be four meters _____ (2) and the largest weighed almost nine tons. _____ (3) male and female mammoths had very large tusks and walked _____ (4) every continent except Australia _____ (5) South America. Sadly, these giant creatures became extinct.

SubQuestion No : 166

Q.1
66 Select the most appropriate option to fill in blank No.1.

- Ans ☒ 1. ago
☒ 2. before
☒ 3. ahead
☒ 4. past

Question ID : 98958010558

Status : Answered

Chosen Option : 1

Comprehension:

In the following passage some words have been deleted. Fill in the blanks with the help of the alternatives given. Select the most appropriate option for each number.

The woolly mammoth was a very large elephant-like mammal that lived on Earth several thousand years _____ (1). Some mammoths grew to be four meters _____ (2) and the largest weighed almost nine tons. _____ (3) male and female mammoths had very large tusks and walked _____ (4) every continent except Australia _____ (5) South America. Sadly, these giant creatures became extinct.

SubQuestion No : 167

Q.1
67 Select the most appropriate option to fill in blank No.2.

- Ans ☒ 1. lofty
☒ 2. low
☒ 3. high
☒ 4. huge

Question ID : 98958010559

Status : Answered

Chosen Option : 3

Comprehension:

In the following passage some words have been deleted. Fill in the blanks with the help of the alternatives given. Select the most appropriate option for each number.

The woolly mammoth was a very large elephant-like mammal that lived on Earth several thousand years _____ (1). Some mammoths grew to be four meters _____ (2) and the largest weighed almost nine tons. _____ (3) male and female mammoths had very large tusks and walked _____ (4) every continent except Australia _____ (5) South America. Sadly, these giant creatures became extinct.

SubQuestion No : 168

Q.1
68 Select the most appropriate option to fill in blank No.3.

- Ans
- ☒ 1. Either
 - ☒ 2. Each
 - ☒ 3. Every
 - ☒ 4. Both

Question ID : 98958010560

Status : Answered

Chosen Option : 4

Comprehension:

In the following passage some words have been deleted. Fill in the blanks with the help of the alternatives given. Select the most appropriate option for each number.

The woolly mammoth was a very large elephant-like mammal that lived on Earth several thousand years _____ (1). Some mammoths grew to be four meters _____ (2) and the largest weighed almost nine tons. _____ (3) male and female mammoths had very large tusks and walked _____ (4) every continent except Australia _____ (5) South America. Sadly, these giant creatures became extinct.

SubQuestion No : 169

Q.1
69 Select the most appropriate option to fill in blank No.4.

- Ans
- ☒ 1. under
 - ☒ 2. on
 - ☒ 3. over
 - ☒ 4. into

Question ID : 98958010561

Status : Answered

Chosen Option : 4

Comprehension:

In the following passage some words have been deleted. Fill in the blanks with the help of the alternatives given. Select the most appropriate option for each number.

The woolly mammoth was a very large elephant-like mammal that lived on Earth several thousand years _____ (1). Some mammoths grew to be four meters _____ (2) and the largest weighed almost nine tons. _____ (3) male and female mammoths had very large tusks and walked _____ (4) every continent except Australia _____ (5) South America. Sadly, these giant creatures became extinct.

SubQuestion No : 170

Q.1
70 Select the most appropriate option to fill in blank No.5.

- Ans
- ☒ 1. and
 - ☐ 2. but
 - ☐ 3. or
 - ☐ 4. also

Question ID : 98958010562

Status : Answered

Chosen Option : 1

Q.1
71 In the sentence identify the segment which contains the grammatical error.

No sooner he had left the house than there was a phone call for him.

- Ans
- ☒ 1. he had left
 - ☐ 2. than there was
 - ☐ 3. No sooner
 - ☐ 4. for him

Question ID : 98958010544

Status : Answered

Chosen Option : 2

Q.1
72 Select the most appropriate option to substitute the underlined segment in the given sentence. If there is no need to substitute it, Select No improvement.

Officials say more than 10 million people take a dip at the confluence of the rivers Ganga and Yamuna in auspicious days for Kumbh Mela.

- Ans
- ☐ 1. No improvement
 - ☐ 2. on auspicious days for Kumbh Mela.
 - ☐ 3. in auspicious days during Kumbh Mela.
 - ☒ 4. on auspicious days during Kumbh Mela.

Question ID : 98958010550

Status : Answered

Chosen Option : 4

Q.1
73 Select the most appropriate word for the given group of words.

an instrument for measuring time accurately in spite of motion or variations in temperature, humidity, and air pressure.

- Ans
- ☒ 1. chronometer
 - ☐ 2. crescograph
 - ☐ 3. cardiograph

✗ 4. cryptograph

Question ID : 98958010582

Status : Answered

Chosen Option : 1

Q.1
74 Select the wrongly spelt word.

- Ans
- ✗ 1. equality
 - ✗ 2. equivocal
 - ✗ 3. equation
 - ✓ 4. equivelant

Question ID : 98958010584

Status : Answered

Chosen Option : 4

Q.1
75 Select the most appropriate meaning of the given idiom.

the icing on the cake

- Ans
- ✓ 1. something that makes a good situation even better
 - ✗ 2. Something that is essential but difficult to do
 - ✗ 3. something that makes one happy
 - ✗ 4. something that delays action

Question ID : 98958010576

Status : Answered

Chosen Option : 1

Q.1
76 Select the synonym of the given word.

EXCURSION

- Ans
- ✗ 1. trekking
 - ✗ 2. holiday
 - ✗ 3. boating
 - ✓ 4. tour

Question ID : 98958010565

Status : Answered

Chosen Option : 4

Q.1
77 Select the most appropriate option to substitute the underlined segment in the given sentence. If there is no need to substitute it, Select No improvement.

All the professor of this college are provided with free bungalows.

- Ans
- ✗ 1. Each professor of this college
 - ✓ 2. All the professors of this college
 - ✗ 3. All professor of this college
 - ✗ 4. No improvement

Question ID : 98958010547

Status : Answered

Q.1
78 Select the synonym of the given word.

EXECUTE

- Ans ☒ 1. occupy
☒ 2. apply
☒ 3. implement
☒ 4. variety

Question ID : 98958010563

Status : Answered

Chosen Option : 3

Q.1
79 Select the antonym of the given word.

BOISTEROUS

- Ans ☒ 1. turbulent
☒ 2. unruly
☒ 3. peaceful
☒ 4. excited

Question ID : 98958010570

Status : Answered

Chosen Option : 3

Q.1
80 Select the antonym of the given word.

ANTIQUE

- Ans ☒ 1. conventional
☒ 2. prehistoric
☒ 3. traditional
☒ 4. modern

Question ID : 98958010569

Status : Answered

Chosen Option : 4

Q.1
81 Select the most appropriate word to fill in the blank.

She left _____ Mumbai _____ the Rajdhani Express yesterday.

- Ans ☒ 1. to; at
☒ 2. for; by
☒ 3. out; by
☒ 4. in; in

Question ID : 98958010553

Status : Answered

Chosen Option : 2

82 In the sentence identify the segment which contains the grammatical error.

From my hotel I could see that a flock of birds were flying over the lake.

- Ans
- ☒ 1. were flying
 - ☐ 2. over the lake
 - ☐ 3. I could see
 - ☐ 4. From my hotel

Question ID : 98958010543
Status : Answered
Chosen Option : 1

Q.1
83 Select the wrongly spelt word.

- Ans
- ☐ 1. divert
 - ☐ 2. devout
 - ☒ 3. devision
 - ☐ 4. devotion

Question ID : 98958010583
Status : Answered
Chosen Option : 3

Q.1
84 Select the wrongly spelt word.

- Ans
- ☐ 1. occasion
 - ☒ 2. ommision
 - ☐ 3. provision
 - ☐ 4. invasion

Question ID : 98958010587
Status : Answered
Chosen Option : 1

Q.1
85 Select the synonym of the given word.

NINCOMPOOP

- Ans
- ☐ 1. innocent
 - ☐ 2. clever
 - ☒ 3. foolish
 - ☐ 4. bold

Question ID : 98958010567
Status : Answered
Chosen Option : 4

Q.1
86 Select the most appropriate word for the given group of words.

a wooden drum in which beer or oil is stored

- Ans
- ☐ 1. cache
 - ☐ 2. gale
 - ☐ 3. bale

✓ 4. barrel

Question ID : 98958010580

Status : Answered

Chosen Option : 4

Q.1 Select the most appropriate option to substitute the underlined segment in the given sentence. If there is no need to substitute it, Select No improvement.

87

Kumbh Mela, held at Prayagraj at the confluence of the rivers Ganga and Yamuna, is knowing to be the bigger human gathering in the world.

Ans

- ✓ 1. is known to be the biggest human gathering
- ✗ 2. No improvement
- ✗ 3. has been known to be the bigger human gathering
- ✗ 4. is knowing to be the biggest human gathering

Question ID : 98958010548

Status : Answered

Chosen Option : 1

Q.1 Select the wrongly spelt word.

88

Ans

- ✗ 1. valuable
- ✗ 2. villain
- ✗ 3. victory
- ✓ 4. vaccum

Question ID : 98958010586

Status : Answered

Chosen Option : 2

Q.1 Select the most appropriate word to fill in the blank.

89

I saw her _____ your cupboard.

Ans

- ✗ 1. opened
- ✓ 2. opening
- ✗ 3. to opening
- ✗ 4. to open

Question ID : 98958010556

Status : Answered

Chosen Option : 3

Q.1 Select the most appropriate option to substitute the underlined segment in the given sentence. If there is no need to substitute it, Select No improvement.

90

Australia had to deploy the army to tackle the devastating floods that inundate homes, schools and airports in the country's northeastern part.

Ans

- ✗ 1. the devastating floods what inundate homes
- ✗ 2. the devastating floods that were inundating homes
- ✓ 3. the devastating floods that inundated homes
- ✗ 4. No improvement

Question ID : 98958010551

Status : Answered

Q.1
91 Select the antonym of the given word.

AGILE

- Ans
- ☒ 1. lethargic
 - ☐ 2. nimble
 - ☐ 3. strong
 - ☐ 4. confused

Question ID : 98958010568

Status : Answered

Chosen Option : 1

Q.1
92 Select the most appropriate word for the given group of words.

A system of government in which priests rule in the name of Gods or a god.

- Ans
- ☐ 1. aristocracy
 - ☐ 2. oligarchy
 - ☒ 3. theocracy
 - ☐ 4. plutocracy

Question ID : 98958010581

Status : Answered

Chosen Option : 3

Comprehension:

Read the following passage and answer the questions given after it.

Some 200 km from Leh are the villages of Dha, Hanu, Garkone and Darchik on both sides of the Indus River, inhabited by the Buddhist Dard Tribes. The villages are together called the “Aryan valley”. “The word ‘Dard’ is derived from a Sanskrit word, ‘Daradas’, which means people who live on hillsides,” said Virendra Bangroo, assistant professor at Indira Gandhi National Centre for the Arts (IGNCA), who has extensively researched on their lives. He added people of this region are culturally and linguistically different from those in other parts of Ladakh. Among other researchers who have gone into the community’s roots, there is a line of thought that the “Aryans of Ladakh” or the “Brokpas” might have descended from soldiers in Alexander’s army who had come to the region over 2,000 years ago. The Dard Aryans, however, do not document their history, Bangroo said.


They rear goat and sheep for milk and meat, and their festivals are based on the solar calendar. Bangroo visited the regions inhabited by the Dard Aryan community back in 2017, where he helped set up two museums to archive their cultural heritage. Bangroo is of the view that their traditions go back 5,000 years; those who still follow the original customs worship trees, rivers and mountains. These tribals are mainly dependent on agriculture; the apricots grown here are considered among the best in the world and there are 12 varieties of grapes in the region. Bangroo said grape-wine is very popular in the “Aryan valley”.


A number of researchers, as well as the tribals, perceive a threat to the heritage of the community owing to modernisation, migration and religious conversion. The community now numbers about 4,000. Over the last few decades, many of them have embraced Islam or Buddhism. “The community prohibits marriage with outsiders to keep the gene pool intact. Of late, the Dard men have been migrating to other parts of the region in search of livelihood and marrying outside the tribe,” Bangroo said. “The tribe is struggling to find a balance between modernity and traditional values.” Also, after the Kargil War, development work in this region has been restricted. Some of the areas of the Aryan valley are out of bounds for outsiders, since it borders Pakistan-occupied Kashmir.

Members of the community said there are only three high schools in their villages and very limited resources for livelihood — mainly because of the harsh weather and difficult terrain. As such, they have no option but to migrate to cities for higher education and employment. They have demanded that the government set up a tribal hostel and declare the “Aryan valley” a heritage village to boost tourism.

SubQuestion No : 193

Q.1 93 The first paragraph of the passage mainly talks about

Ans  1. who the Dard Aryans are.

 2. the concerns of Dard Aryans.

✗ 3. what the demands of Dard Aryans are.

✗ 4. the customs of Dard Aryans.

Question ID : 98958010589

Status : Answered

Chosen Option : 1

Comprehension:

Read the following passage and answer the questions given after it.

Some 200 km from Leh are the villages of Dha, Hanu, Garkone and Darchik on both sides of the Indus River, inhabited by the Buddhist Dard Tribes. The villages are together called the “Aryan valley”. “The word ‘Dard’ is derived from a Sanskrit word, ‘Daradas’, which means people who live on hillsides,” said Virendra Bangroo, assistant professor at Indira Gandhi National Centre for the Arts (IGNCA), who has extensively researched on their lives. He added people of this region are culturally and linguistically different from those in other parts of Ladakh. Among other researchers who have gone into the community’s roots, there is a line of thought that the “Aryans of Ladakh” or the “Brokpas” might have descended from soldiers in Alexander’s army who had come to the region over 2,000 years ago. The Dard Aryans, however, do not document their history, Bangroo said.

They rear goat and sheep for milk and meat, and their festivals are based on the solar calendar. Bangroo visited the regions inhabited by the Dard Aryan community back in 2017, where he helped set up two museums to archive their cultural heritage. Bangroo is of the view that their traditions go back 5,000 years; those who still follow the original customs worship trees, rivers and mountains. These tribals are mainly dependent on agriculture; the apricots grown here are considered among the best in the world and there are 12 varieties of grapes in the region. Bangroo said grape-wine is very popular in the “Aryan valley”.

A number of researchers, as well as the tribals, perceive a threat to the heritage of the community owing to modernisation, migration and religious conversion. The community now numbers about 4,000. Over the last few decades, many of them have embraced Islam or Buddhism. “The community prohibits marriage with outsiders to keep the gene pool intact. Of late, the Dard men have been migrating to other parts of the region in search of livelihood and marrying outside the tribe,” Bangroo said. “The tribe is struggling to find a balance between modernity and traditional values.” Also, after the Kargil War, development work in this region has been restricted. Some of the areas of the Aryan valley are out of bounds for outsiders, since it borders Pakistan-occupied Kashmir.

Members of the community said there are only three high schools in their villages and very limited resources for livelihood — mainly because of the harsh weather and difficult terrain. As such, they have no option but to migrate to cities for higher education and employment. They have demanded that the government set up a tribal hostel and declare the “Aryan valley” a heritage village to boost tourism.

SubQuestion No : 194

Q.1
94 What is the main concern of the Dard Aryans?

- Ans
- ☒ 1. some people are converting their religion.
 - ☒ 2. people of the community are becoming modern.

✓ 3. their heritage is facing a threat.

✗ 4. many people are migrating from the villages.

Question ID : 98958010590

Status : Answered

Chosen Option : 3

Comprehension:

Read the following passage and answer the questions given after it.

Some 200 km from Leh are the villages of Dha, Hanu, Garkone and Darchik on both sides of the Indus River, inhabited by the Buddhist Dard Tribes. The villages are together called the “Aryan valley”. “The word ‘Dard’ is derived from a Sanskrit word, ‘Daradas’, which means people who live on hillsides,” said Virendra Bangroo, assistant professor at Indira Gandhi National Centre for the Arts (IGNCA), who has extensively researched on their lives. He added people of this region are culturally and linguistically different from those in other parts of Ladakh. Among other researchers who have gone into the community’s roots, there is a line of thought that the “Aryans of Ladakh” or the “Brokpas” might have descended from soldiers in Alexander’s army who had come to the region over 2,000 years ago. The Dard Aryans, however, do not document their history, Bangroo said.

They rear goat and sheep for milk and meat, and their festivals are based on the solar calendar. Bangroo visited the regions inhabited by the Dard Aryan community back in 2017, where he helped set up two museums to archive their cultural heritage. Bangroo is of the view that their traditions go back 5,000 years; those who still follow the original customs worship trees, rivers and mountains. These tribals are mainly dependent on agriculture; the apricots grown here are considered among the best in the world and there are 12 varieties of grapes in the region. Bangroo said grape-wine is very popular in the “Aryan valley”.

A number of researchers, as well as the tribals, perceive a threat to the heritage of the community owing to modernisation, migration and religious conversion. The community now numbers about 4,000. Over the last few decades, many of them have embraced Islam or Buddhism. “The community prohibits marriage with outsiders to keep the gene pool intact. Of late, the Dard men have been migrating to other parts of the region in search of livelihood and marrying outside the tribe,” Bangroo said. “The tribe is struggling to find a balance between modernity and traditional values.” Also, after the Kargil War, development work in this region has been restricted. Some of the areas of the Aryan valley are out of bounds for outsiders, since it borders Pakistan-occupied Kashmir.

Members of the community said there are only three high schools in their villages and very limited resources for livelihood — mainly because of the harsh weather and difficult terrain. As such, they have no option but to migrate to cities for higher education and employment. They have demanded that the government set up a tribal hostel and declare the “Aryan valley” a heritage village to boost tourism.

SubQuestion No : 195

Q.1
95 What are the demands of the Dard Aryans from the government?

Ans
✓ 1. to set up a tribal hostel and declare the Aryan Valley a heritage village

- ☒ 2. to boost tourism and take up development work in the valley
- ☒ 3. to stop migration of people and set up a school
- ☒ 4. to provide livelihood and establish a tribal hostel

Question ID : 98958010591

Status : Answered

Chosen Option : 1

Comprehension:

Read the following passage and answer the questions given after it.

Some 200 km from Leh are the villages of Dha, Hanu, Garkone and Darchik on both sides of the Indus River, inhabited by the Buddhist Dard Tribes. The villages are together called the “Aryan valley”. “The word ‘Dard’ is derived from a Sanskrit word, ‘Daradas’, which means people who live on hillsides,” said Virendra Bangroo, assistant professor at Indira Gandhi National Centre for the Arts (IGNCA), who has extensively researched on their lives. He added people of this region are culturally and linguistically different from those in other parts of Ladakh. Among other researchers who have gone into the community’s roots, there is a line of thought that the “Aryans of Ladakh” or the “Brokpas” might have descended from soldiers in Alexander’s army who had come to the region over 2,000 years ago. The Dard Aryans, however, do not document their history, Bangroo said.

They rear goat and sheep for milk and meat, and their festivals are based on the solar calendar. Bangroo visited the regions inhabited by the Dard Aryan community back in 2017, where he helped set up two museums to archive their cultural heritage. Bangroo is of the view that their traditions go back 5,000 years; those who still follow the original customs worship trees, rivers and mountains. These tribals are mainly dependent on agriculture; the apricots grown here are considered among the best in the world and there are 12 varieties of grapes in the region. Bangroo said grape-wine is very popular in the “Aryan valley”.

A number of researchers, as well as the tribals, perceive a threat to the heritage of the community owing to modernisation, migration and religious conversion. The community now numbers about 4,000. Over the last few decades, many of them have embraced Islam or Buddhism. “The community prohibits marriage with outsiders to keep the gene pool intact. Of late, the Dard men have been migrating to other parts of the region in search of livelihood and marrying outside the tribe,” Bangroo said. “The tribe is struggling to find a balance between modernity and traditional values.” Also, after the Kargil War, development work in this region has been restricted. Some of the areas of the Aryan valley are out of bounds for outsiders, since it borders Pakistan-occupied Kashmir.

Members of the community said there are only three high schools in their villages and very limited resources for livelihood — mainly because of the harsh weather and difficult terrain. As such, they have no option but to migrate to cities for higher education and employment. They have demanded that the government set up a tribal hostel and declare the “Aryan valley” a heritage village to boost tourism.

SubQuestion No : 196

Q.1
96 Which statement indicates best that the Dard Aryans is a community with ancient past?

Ans
X 1. Dar Aryans rear goat and sheep for milk and meat, and their festivals are based on the solar calendar.

✗ 2. The word 'Dard' is derived from a Sanskrit word, 'Daradas', which means people who live on hillsides

✓ 3. Bangroo is of the view that their traditions go back 5,000 years; those who still follow the original customs worship trees, rivers and mountains.

✗ 4. Some scholars think that they might have descended from the soldiers in Alexander's army who had come about 2000 years ago.

Question ID : 98958010592

Status : Answered

Chosen Option : 4

Comprehension:

Read the following passage and answer the questions given after it.

Some 200 km from Leh are the villages of Dha, Hanu, Garkone and Darchik on both sides of the Indus River, inhabited by the Buddhist Dard Tribes. The villages are together called the “Aryan valley”. “The word ‘Dard’ is derived from a Sanskrit word, ‘Daradas’, which means people who live on hillsides,” said Virendra Bangroo, assistant professor at Indira Gandhi National Centre for the Arts (IGNCA), who has extensively researched on their lives. He added people of this region are culturally and linguistically different from those in other parts of Ladakh. Among other researchers who have gone into the community’s roots, there is a line of thought that the “Aryans of Ladakh” or the “Brokpas” might have descended from soldiers in Alexander’s army who had come to the region over 2,000 years ago. The Dard Aryans, however, do not document their history, Bangroo said.

They rear goat and sheep for milk and meat, and their festivals are based on the solar calendar. Bangroo visited the regions inhabited by the Dard Aryan community back in 2017, where he helped set up two museums to archive their cultural heritage. Bangroo is of the view that their traditions go back 5,000 years; those who still follow the original customs worship trees, rivers and mountains. These tribals are mainly dependent on agriculture; the apricots grown here are considered among the best in the world and there are 12 varieties of grapes in the region. Bangroo said grape-wine is very popular in the “Aryan valley”.

A number of researchers, as well as the tribals, perceive a threat to the heritage of the community owing to modernisation, migration and religious conversion. The community now numbers about 4,000. Over the last few decades, many of them have embraced Islam or Buddhism. “The community prohibits marriage with outsiders to keep the gene pool intact. Of late, the Dard men have been migrating to other parts of the region in search of livelihood and marrying outside the tribe,” Bangroo said. “The tribe is struggling to find a balance between modernity and traditional values.” Also, after the Kargil War, development work in this region has been restricted. Some of the areas of the Aryan valley are out of bounds for outsiders, since it borders Pakistan-occupied Kashmir.

Members of the community said there are only three high schools in their villages and very limited resources for livelihood — mainly because of the harsh weather and difficult terrain. As such, they have no option but to migrate to cities for higher education and employment. They have demanded that the government set up a tribal hostel and declare the “Aryan valley” a heritage village to boost tourism.

SubQuestion No : 197

Q.1 97 Which statement is NOT true according to the passage?

Ans ~~X~~ 1. Dard Aryans have to migrate to cities for higher education and employment.

- ☒ 2. There are only three high schools in their villages and very limited resources for livelihood
- ☒ 3. The Aryans are culturally and linguistically the same as the other people of Ladakh.
- ☒ 4. The valley has a difficult terrain and faces harsh weather conditions.

Question ID : 98958010593

Status : Answered

Chosen Option : 3

Q.1
98 Select the most appropriate word to fill in the blank.

We cannot postpone today's discussion on the issue of security of the colony _____ it is urgent.

- Ans ☒ 1. in case
- ☒ 2. because
- ☒ 3. therefore
- ☒ 4. although

Question ID : 98958010554

Status : Answered

Chosen Option : 2

Q.1
99 Select the most appropriate meaning of the given idiom.

Take heart

- Ans ☒ 1. to assess the situation
- ☒ 2. to feel grieved
- ☒ 3. to take courage
- ☒ 4. to rebuke

Question ID : 98958010574

Status : Not Answered

Chosen Option : --

Q.2
00 Select the most appropriate meaning of the given idiom.

get a gold star

- Ans ☒ 1. to earn a merit point for doing well
- ☒ 2. to obtain possession of something
- ☒ 3. to get killed in war
- ☒ 4. to compliment someone

Question ID : 98958010573

Status : Answered

Chosen Option : 2