

SSC CHSL Exam 2018

Mini PDF on Reasoning

- Select the related word/letters/ number from the given alternatives.
Psychology : Human Being :: Ornithology : ?
A. Birds B. Volcanoes
C. Insects D. Reptiles
- Select the related word/letters/number from the given alternatives.
26 : 48 :: 82 : ?
A. 125 B. 122
C. 115 D. 120
- Select the related word/letters/numbers from the given alternatives:
LNPQ : ACEF :: TVXY : ?
Options:
A. IMKL B. IKMO
C. IKMN D. PKLR
- For the following questions
Find the odd word/letters/number from the given alternatives.
A. Time B. Skill
C. Interest D. Knowledge
- For the following questions
Find the odd words / letters / numbers from the given alternatives.
A. ACEG B. IKMO
C. FHJL D. TUWY
- For the following questions:
Find the odd word/letters/number pair from the given alternatives.
A. 5-21 B. 29-45
C. 48-68 D. 71-87
- Arrange the following words as per order in the dictionary.
1.Patriot 2.Pastor 3 Patron 4. Pattern
5. Pastern
A. 5,2,3,1,4 B. 5,2,1,3,4
C. 5,2,4,1,3 D. 5,2,4,3,1
- A series is given, with one term missing.
Choose the correct alternative from the given ones that will complete the series.
ZXV , USQ , PNL , ?
A. MJH B. JHF
C. KIG D. KJI
- Which number will complete the series?
1,8,27,64,125,216,_____
A. 354 B. 343
C. 392 D. 245
- Rajiv is the brother of Arun. Sonia is the sister of Sunil. Arun is the son of Sonia. How is Rajiv related to Sunil?
A. nephew B. son
C. brother D. father
- I go 5 km East, then turn right and go 8km. Then I turn left and go 5 km and then I turn left and go 8 km. At what distance am I from the starting point?
A. 8 B. 0
C. 10 D. 5
- From the given alternative words, select the word which cannot be formed using the letters of the given word:
COMMENTATOR
A. MART B. COMMON
C. MOMENT D. CONTRACT
- If 'HARBOUR' is written as 'IBSCPVS' , how is 'HABITAT' written in that code?
A. GZAHSZS B. IBCJUBU
C. IBAHSZS D. IBCJBUU
- If + means \div , \div means - , - means \times and \times means + , what will be the value of the following expression:
 $8 + 4 \div 3 \times 5 - 9 = ?$
A. 44 B. 53
C. 62 D. 64
- If $23 \times 16 = 184$, $37 \times 10 = 185$, the $85 \times 12 = ?$
A. 511 B. 610
C. 510 D. 410
- Find the missing numbers from the given alternatives

43	25	?
21	40	35
35	34	28

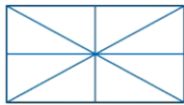
A. 36 B. 46
C. 40 D. 26
- Ramesh is richer than Satish but Jaya is less rich than Ramesh. Ram is less rich than Jaya but richer than Satish, but is not as rich as Ramesh. Ramesh is less rich than Navin. The richest amongst them is?
Options:
A. Ramesh B. Satish
C. Navin D. Jaya

18. Consider the given statement/s to be true and decide which of the given conclusions/assumptions can definitely be drawn from the given statement.

Statements: Life means stresses and strains. Stresses and strains have an adverse effect on life. Conclusions: I. Life is not worth living. II. One should avoid stresses and strains in life.

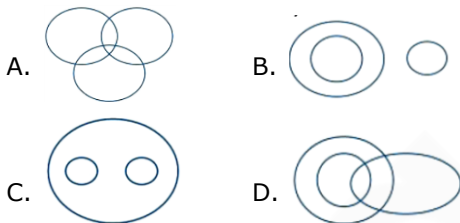
- A. Only conclusion I follows
- B. Only conclusion II follows
- C. Both conclusion I and conclusion II follow
- D. Neither conclusion I nor conclusion II follows

19. How many triangles are there in the given figure ignore

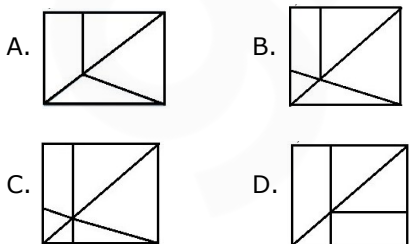
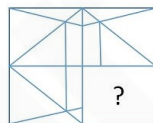


- A. 12
- B. 8
- C. 16
- D. 10

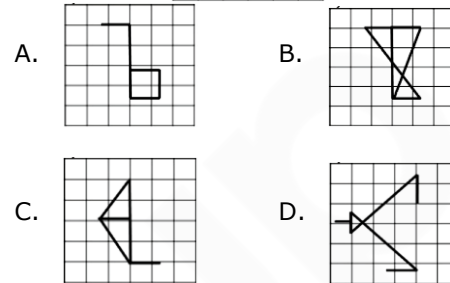
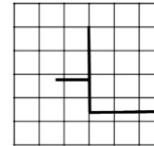
20. Identify the diagram that best represents the relationship among classes given below: Editors, Professors and Men



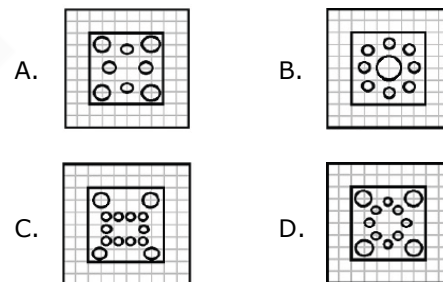
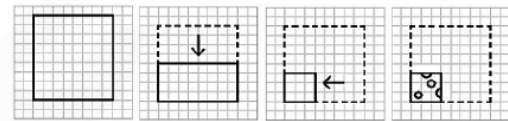
21. Which answer figure will complete the pattern in the figure?



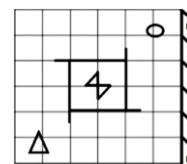
22. Select the one in which the question figure is hidden/embedded:

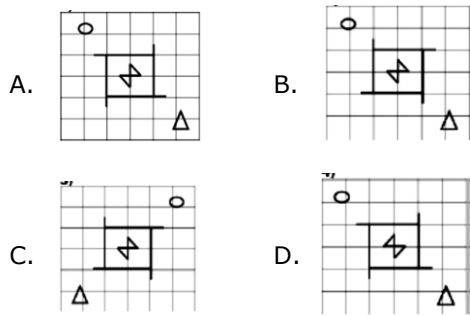


23. A piece of paper is folded and cut as shown below in the question figures. From the given answer figures, indicate how it will appear when opened.



24. If a mirror is placed on the line MN, then which of the answer figures is the right image of the given figure?





25. In the question, a word is represented by only one set of numbers as given in any one of the alternatives. The sets of numbers given in the alternatives are represented by two classes of alphabets as in two matrices given below. The columns and rows of Matrix I are numbered from 0 to 4 and that of Matrix II are numbered from 5 to 9. A letter from these

matrices can be represented first by its row and next by its column, e.g., 'P' can be represented by 02, 13, etc., and 'A' can be represented by 57, 68, etc. Similarly, you have to identify the set for the word 'GUNS'

	0	1	2	3	4
0	S	U	P	E	R
1	R	S	U	P	E
2	E	R	S	U	P
3	P	E	R	S	U
4	U	P	E	R	S

	5	6	7	8	9
5	G	L	A	N	D
6	D	G	L	A	N
7	N	D	G	L	A
8	A	N	D	G	L
9	L	A	N	D	G

- A. 88, 23, 59, 33
- B. 66, 40, 67, 11
- C. 55, 34, 77, 44
- D. 99, 12, 86, 22

Answer Key

1. A	2. D	3. C	4. A	5. D	6. C	7. B	8. C	9. B	10. A
11. C	12. D	13. B	14. A	15. C	16. A	17. C	18. B	19. C	20. A
21. B	22. C	23. D	24. D	25. D					

Free Test for
SSC CHSL Tier I 2019 Exam

Attempt Now

SSC CHSL Tier I 2019 Online Test Series

1. Based on the Latest Exam Pattern
2. Available in Hindi & English
3. All India Rank & Performance Analysis
4. Detailed Explanation of Solutions
5. Available on Mobile & Desktop

