

**REGISTRATION NUMBER : 2201010012**  
**EXAM DATE : 3-July-2017**  
**EXAM NAME : SSC Examination**  
**TOTAL MARKS : 200**

**CANDIDATE NAME : ASHWANI CHAUDHARY**  
**EXAM START TIME : 10:00:00**  
**EXAM DURATION : 02:00 Hrs**  
**TOTAL NO OF QUESTIONS : 200**

**QID : 1** - In the following question, select the related word from the given alternatives.

**Smoke : Pollution :: Fire : ?**

निम्नलिखित प्रश्न में दिए गए विकल्पों में से संबंधित शब्द को चुनिए।

**धुआँ : प्रदूषण :: आग : ?**

**Options:**

1) Death

मृत्यु

2) Sound

ध्वनि

3) Ash

राख

4) Cold

ठण्ड

**Correct Answer:** Ash

राख

**Candidate Answer:** Ash

राख

**QID : 2** - In the following question, select the related word pair from the given alternatives.

**Players : Team :: ? : ?**

निम्नलिखित प्रश्न में दिए गए विकल्पों में से संबंधित शब्द युग्म को चुनिए।

**खिलाड़ी : टीम :: ? : ?**

**Options:**

1) Car : Group

कार : समूह

2) Ship : Fleet

जहाज : बेड़ा

3) Airplane : Flight

हवाईजहाज : उड़ान

4) Pen : Heap

कलम : ढेर

**Correct Answer:** Ship : Fleet

जहाज : बेड़ा

**Candidate Answer:** Ship : Fleet

जहाज : बेड़ा

**QID : 3** - In the following question, select the related letters from the given alternatives.

**GLOR : FJLN :: TWQK : ?**

निम्नलिखित प्रश्न में दिए गए विकल्पों में से संबंधित अक्षरों को चुनिए।

**GLOR : FJLN :: TWQK : ?**

**Options:**

1) SUNG

2) SUMG

3) SUGN

4) SUGM

**Correct Answer:** SUNG

**QID : 4** - In the following question, select the related letters from the given alternatives.

**GHI : DFH :: LMN : ?**

निम्नलिखित प्रश्न में दिए गए विकल्पों में से संबंधित अक्षरों को चुनिए।

**GHI : DFH :: LMN : ?**

**Options:**

- 1) IMK
- 2) JLM
- 3) ILM
- 4) IKM

**Correct Answer:** IKM

**Candidate Answer:** IKM

**QID : 5** - In the following question, select the related number from the given alternatives.

**8 : 512 :: 6 : ?**

निम्नलिखित प्रश्न में दिए गए विकल्पों में से संबंधित संख्या को चुनिए।

**8 : 512 :: 6 : ?**

**Options:**

- 1) 216
- 2) 312
- 3) 408
- 4) 512

**Correct Answer:** 216

**Candidate Answer:** 216

**QID : 6** - In the following question, select the related number from the given alternatives.

**122 : 145 :: 226 : ?**

निम्नलिखित प्रश्न में दिए गए विकल्पों में से संबंधित संख्या को चुनिए।

**122 : 145 :: 226 : ?**

**Options:**

- 1) 255
- 2) 256
- 3) 257
- 4) 259

**Correct Answer:** 257

**Candidate Answer:** [ NOT ANSWERED ]

**QID : 7** - In the following question, select the odd word from the given alternatives.

निम्नलिखित प्रश्न में दिए गए विकल्पों में से विषम शब्द को चुनिए।

**Options:**

- 1) Skin  
त्वचा
- 2) Lungs  
फेफड़े
- 3) Heart  
हृदय
- 4) Kidneys  
गुर्दे

**Correct Answer:** Skin

त्वचा

**Candidate Answer:** Skin  
त्वचा

**QID : 8** - In the following question, select the odd word pair from the given alternatives.

निम्नलिखित प्रश्न में दिए गए विकल्पों में से विषम शब्द युग्म को चुनिए।

**Options:**

1) Ink : Inkipot

स्याही : दवात

2) Bottle : Wine

बोतल : वाईन

3) Tea : Cup

चाय : कप

4) Water : Jug

जल : जग

**Correct Answer:** Bottle : Wine

बोतल : वाईन

**Candidate Answer:** Bottle : Wine

बोतल : वाईन

**QID : 9** - In the following question, select the odd letters from the given alternatives.

निम्नलिखित प्रश्न में दिए गए विकल्पों में से विषम अक्षरों को चुनिए।

**Options:**

1) GJM

2) PSV

3) MPR

4) KNQ

**Correct Answer:** MPR

**Candidate Answer:** MPR

**QID : 10** - In the following question, select the odd letters from the given alternatives.

निम्नलिखित प्रश्न में दिए गए विकल्पों में से विषम अक्षरों को चुनिए।

**Options:**

1) MT

2) CJ

3) SZ

4) FN

**Correct Answer:** FN

**Candidate Answer:** FN

**QID : 11** - In the following question, select the odd number pair from the given alternatives.

निम्नलिखित प्रश्न में दिए गए विकल्पों में से विषम संख्या युग्म को चुनिए।

**Options:**

1) 11 – 44

2) 12 – 72

3) 13 – 52

4) 14 – 48

**Correct Answer:** 14 – 48

**Candidate Answer:** [ NOT ANSWERED ]

**QID : 12** - In the following question, select the odd number pair from the given alternatives.

निम्नलिखित प्रश्न में दिए गए विकल्पों में से विषम संख्या युग्म को चुनिए।

**Options:**  
1) 5 – 30

2) 12 – 84

3) 11 – 66

4) 8 – 48

**Correct Answer:** 12 – 84

**Candidate Answer:** 12 – 84

**QID : 13** - Arrange the given words in the sequence in which they occur in the dictionary.

1. Rangle
2. Regal
3. Royal
4. Room
5. Rested

निम्नलिखित शब्दों को शब्दकोश में आने वाले क्रम के अनुसार लिखें।

1. Rangle
2. Regal
3. Royal
4. Room
5. Rested

**Options:**

1) 15432

2) 45312

3) 12543

4) 13542

**Correct Answer:** 12543

**Candidate Answer:** 12543

**QID : 14** - Arrange the given words in the sequence in which they occur in the dictionary.

1. Soul
2. Strain
3. Syrup
4. Sand
5. Strained

निम्नलिखित शब्दों को शब्दकोश में आने वाले क्रम के अनुसार लिखें।

1. Soul
2. Strain
3. Syrup
4. Sand
5. Strained

**Options:**

1) 41253

2) 42153

3) 54312

4) 45312

**Correct Answer:** 41253

**Candidate Answer:** 41253

**QID : 15** - A series is given with one term missing. Select the correct alternative from the given ones that will complete the series.

**GD, DI, AP, XY, ?**

एक अनुक्रम दिया गया है, जिसमें से एक पद लुप्त है। दिए गए विकल्पों में से वह सही विकल्प चुनिए, जो अनुक्रम को पूरा करे।

**GD, DI, AP, XY, ?**

**Options:**

1) UH

2) IU

3) ST

4) UJ

**QID : 16** - A series is given with one term missing. Select the correct alternative from the given ones that will complete the series.

**WVU, TSR, QPO, ?**

एक अनुक्रम दिया गया है, जिसमें से एक पद लुप्त है। दिए गए विकल्पों में से वह सही विकल्प चुनिए, जो अनुक्रम को पूरा करे।

**WVU, TSR, QPO, ?**

**Options:**

1) NML

2) LMN

3) LMK

4) KLM

**Correct Answer:** NML

**Candidate Answer:** NML

**QID : 17** - In the following question, select the missing number from the given series.

**1, 1, 3, 4, 5, 9, 7, 16, 9, 25, 11, ?**

निम्नलिखित प्रश्न में दिए गए विकल्पों में से लुप्त अंक ज्ञात कीजिए।

**1, 1, 3, 4, 5, 9, 7, 16, 9, 25, 11, ?**

**Options:**

1) 17

2) 36

3) 49

4) 37

**Correct Answer:** 36

**Candidate Answer:** 36

**QID : 18** - In the following question, select the missing number from the given series.

**?, 5, 15, 45, 113**

निम्नलिखित प्रश्न में दिए गए विकल्पों में से लुप्त अंक ज्ञात कीजिए।

**?, 5, 15, 45, 113**

**Options:**

1) 1

2) 2

3) 3

4) 4

**Correct Answer:** 3

**Candidate Answer:** [ NOT ANSWERED ]

**QID : 19** - 6 people are sitting in a row. A is sitting towards immediate left of B and immediate right of C. C is sitting to immediate right of F. D is immediate right of E who is to the left of F, then which two people are sitting in the center?

6 लोग एक पंक्ति में बैठे हुए हैं। A, B के तुरंत बायीं ओर तथा C के दायीं ओर बैठा हुआ है। C, F के तुरंत दायीं ओर बैठा हुआ है। D, E के तुरंत दायीं ओर है जोकि F के बायीं ओर है, तो कौन से दो लोग केन्द्र में बैठे हुए हैं?

**Options:**

1) D and B

D तथा B

2) A and B

A तथा B

3) F and C

F तथा C

4) E and D

E तथा D

**Correct Answer:** F and C

F तथा C

**Candidate Answer:** F and C

F तथा C

**QID : 20** - Sunil's position from the left in a row of boys is 20<sup>th</sup> and Deepak's position from the right is 36<sup>th</sup>. After interchanging their position, Sunil becomes 28<sup>th</sup> from the left. How many boys are there in the row?

लड़कों की एक पंक्ति में सुनील का स्थान बायें ओर से 20 वां है तथा दीपक का स्थान दायें ओर से 36 वां है। अपने स्थानों को परस्पर बदलने के बाद, सुनील का स्थान बायें ओर से 28 वां हो जाता है। पंक्ति में कितने लड़के हैं?

**Options:**

1) 52

2) 63

3) 59

4) 48

**Correct Answer:** 63

**Candidate Answer:** 63

**QID : 21** - Vikram started from point R and walked straight 7 km west, then turned left and walked 2 km and again turned left and walked straight 4 km. In which direction is he from R?

विक्रम बिन्दु R से चलना आरंभ करता है तथा पश्चिम की तरफ 7 कि.मी. सीधा चलता है, फिर बायें मुड़ता है तथा 2 कि.मी. चलता है तथा पुनः बायें मुड़ता है और 4 कि.मी. सीधा चलता है। वह R से किस दिशा में है?

**Options:**

1) North-East

उत्तर-पूर्व

2) South-West

दक्षिण-पश्चिम

3) South-East

दक्षिण-पूर्व

4) North-West

उत्तर-पश्चिम

**Correct Answer:** South-West

दक्षिण-पश्चिम

**Candidate Answer:** South-West

दक्षिण-पश्चिम

**QID : 22** - In the following question, select the word which cannot be formed using the letters of the given word.

**Liberation**

निम्नलिखित विकल्पों में से वह शब्द चुनिए जो दिए गए शब्द के अक्षरों का प्रयोग करके नहीं बनाया जा सकता।

**Liberation**

**Options:**

1) Ratio

2) Aion

3) Bear

4) Liberal

**Correct Answer:** Liberal

**Candidate Answer:** Liberal

**QID : 23** - In the following question, select the word which cannot be formed using the letters of the given word.

**Deliberate**

निम्नलिखित विकल्पों में से वह शब्द चुनिए जो दिए गए शब्द के अक्षरों का प्रयोग करके नहीं बनाया जा सकता।

**Deliberate**

**Options:**

1) Dilate

2) Tail

3) Betray

4) Elated

**Correct Answer:** Betray

**Candidate Answer:** Betray

**QID : 24** - In a certain code language, "SATURN" is written as "JVQXWW" and "URANUS" is written as "OYJENY". How is "JUITER" written in that code language?

एक विशिष्ट कोड भाषा में, "SATURN" को "JVQXWW" लिखा जाता है तथा "URANUS" को "OYJENY" लिखा जाता है। इस कोड भाषा में "JUITER" को किस प्रकार लिखा जाएगा?

**Options:**

1) NIPMQN

2) NIPMYF

3) NQMPIN

4) FYLMPI

**Correct Answer:** NIPMQN

**Candidate Answer:** NIPMQN

**QID : 25** - In a certain code language, "CAGES" is written as "NADYB" and "SILVER" is written as "LZRIGR". How is "WATER" written in that code language?

एक विशिष्ट कोड भाषा में, "CAGES" को "NADYB" लिखा जाता है तथा "SILVER" को "LZRIGR" लिखा जाता है। इस कोड भाषा में "WATER" को किस प्रकार लिखा जाएगा?

**Options:**

1) MAQYV

2) SGWEB

3) QCPVR

4) VYQAM

**Correct Answer:** MAQYV

**Candidate Answer:** [ NOT ANSWERED ]

**QID : 26** - If "B" denotes "multiplied by", "C" denotes "subtracted from", "A" denotes "added to" and "D" denotes "divided by", then which of the following equation is true?

यदि "B" का अर्थ "गुणा" है, "C" का अर्थ "घटाव" है, "A" का अर्थ "जोड़" है तथा "D" का अर्थ "भाग" है, तो निम्नलिखित में से कौन सा समीकरण सही है?

**Options:**

1)  $24 D 12 B 3 A 12 = 18$

2)  $36 D 6 B 3 A 2 = 74$

3)  $42 A 7 B 2 D 2 = 35$

4)  $56 D 14 B 2 C 4 = 12$

**Correct Answer:**  $24 D 12 B 3 A 12 = 18$

**Candidate Answer:**  $24 D 12 B 3 A 12 = 18$

**QID : 27** - If "-" denotes "divided by", "+" denotes "subtracted from", "x" denotes "added to" and "÷" denotes "multiplied by", then

$$4 \div 16 \times 5 + 4 - 2 = ?$$

यदि "-" का अर्थ "भाग" है, "+" का अर्थ "घटाव" है, "x" का अर्थ "जोड़" है तथा "÷" का अर्थ "गुणा" है, तो

$$4 \div 16 \times 5 + 4 - 2 = ?$$

**Options:**

1) 2

2) 43

3) 22

4) 67

**Correct Answer:** 67

**Candidate Answer:** 67

**QID : 28** - If  $38 \# 49 = 24$  and  $96 \# 51 = 21$ , then  $87 \# 78 = ?$

यदि  $38 \# 49 = 24$  तथा  $96 \# 51 = 21$  हो, तो  $87 \# 78 = ?$

**Options:**

- 1) 26
- 2) 21
- 3) 28
- 4) 30

**Correct Answer:** 30

**Candidate Answer:** 30

**QID : 29** - If  $27 * 4 = 77$  and  $31 * 9 = 239$ , then  $21 * 6 = ?$

यदि  $27 * 4 = 77$  तथा  $31 * 9 = 239$  हो, तो  $21 * 6 = ?$

**Options:**

- 1) 94
- 2) 107
- 3) 99
- 4) 106

**Correct Answer:** 99

**Candidate Answer:** [ NOT ANSWERED ]

**QID : 30** -



**Options:**

- 1) 1
- 2) 2
- 3) 4
- 4) 12

**Correct Answer:** 2

**Candidate Answer:** [ NOT ANSWERED ]

**QID : 31** -



**Options:**

- 1) 12
- 2) 24
- 3) 26
- 4) 29

**Correct Answer:** 29

**Candidate Answer:** [ NOT ANSWERED ]

**QID : 32** -



**Options:**

- 1) 6
- 2) 7
- 3) 8
- 4) 10

**Correct Answer:** 7

**Candidate Answer:** 7

**QID : 33** -





**Options:**

- 1) 10
- 2) 11
- 3) 12
- 4) 14

**Correct Answer: 11**

**Candidate Answer: 11**

**QID : 34** - In each of the following question below are given some statements followed by some conclusions. Taking the given statements to be true even if they seem to be at variance from commonly known facts, read all the conclusions and then decide which of the given conclusion logically follows the given statements.

**Statements:**

- I. No cups are plate.
- II. All plates are spoons.

**Conclusions:**

- I. Some cups are spoons.
- II. Some spoons are plates.
- III. Some plates are spoons.

नीचे दिए गए प्रत्येक प्रश्न में कुछ कथन और उनके बाद उन कथनों पर आधारित कुछ निष्कर्ष दिए गए हैं, हालांकि उनमें सामान्य ज्ञात तथ्यों से भिन्नता हो सकती है। सभी निष्कर्ष पढ़ें और फिर निर्धारित करें कि दिए गए कौन से निष्कर्ष, दिए गए कथनों के आधार पर युक्तिसंगत हैं।

**कथन:**

- I. कोई कप प्लेट नहीं है।
- II. सभी प्लेटें चम्मचें हैं।

**निष्कर्ष:**

- I. कुछ कप चम्मचें हैं।
- II. कुछ चम्मचें प्लेटें हैं।
- III. कुछ प्लेटें चम्मचें हैं।

**Options:**

- 1) Only conclusion (II) follows  
केवल निष्कर्ष (II) सही है
- 2) Only conclusion (III) follows  
केवल निष्कर्ष (III) सही है
- 3) Only conclusion (I) and (III) follow  
केवल निष्कर्ष (I) तथा निष्कर्ष (III) सही हैं
- 4) Only conclusion (II) and (III) follow  
केवल निष्कर्ष (II) तथा निष्कर्ष (III) सही हैं

**Correct Answer:** Only conclusion (II) and (III) follow  
केवल निष्कर्ष (II) तथा निष्कर्ष (III) सही हैं

**Candidate Answer:** Only conclusion (II) follows  
केवल निष्कर्ष (II) सही है

**QID : 35** - In each of the following question below are given some statements followed by some conclusions. Taking the given statements to be true even if they seem to be at variance from commonly known facts, read all the conclusions and then decide which of the given conclusion logically follows the given statements.

**Statements:**

- I. All men are hardworking.
- II. No advocate is hardworking.
- III. Some beautiful are men.

**Conclusions:**

- I. Some beautiful are hardworking.
- II. Some advocates are not beautiful.
- III. Some beautiful are not advocate.

नीचे दिए गए प्रत्येक प्रश्न में कुछ कथन और उनके बाद उन कथनों पर आधारित कुछ निष्कर्ष दिए गए हैं, हालांकि उनमें सामान्य ज्ञात तथ्यों से भिन्नता हो सकती है। सभी निष्कर्ष पढ़ें और फिर निर्धारित करें कि दिए गए कौन से निष्कर्ष, दिए गए कथनों के आधार पर युक्तिसंगत हैं।

**कथन:**

- I. सभी पुरुष मेहनती हैं।
- II. कोई वकील मेहनती नहीं हैं।
- III. कुछ सुंदर पुरुष हैं।

**निष्कर्ष:**

- I. कुछ सुंदर मेहनती हैं।
- II. कुछ वकील सुंदर नहीं हैं।
- III. कुछ सुंदर वकील नहीं हैं।

**Options:**

- 1) Only conclusion (III) follow  
केवल निष्कर्ष (III) सही है
- 2) Only conclusion (I) and (III) follow  
केवल निष्कर्ष (I) तथा निष्कर्ष (III) सही हैं
- 3) Only conclusion (II) and (III) follow  
केवल निष्कर्ष (II) तथा निष्कर्ष (III) सही हैं
- 4) Only conclusion (I) and (II) follow  
केवल निष्कर्ष (I) तथा निष्कर्ष (II) सही हैं

**Correct Answer:** Only conclusion (I) and (III) follow  
केवल निष्कर्ष (I) तथा निष्कर्ष (III) सही हैं

**Candidate Answer:** [ NOT ANSWERED ]

**QID : 36** -



**Options:**

- 1) 4 or 5  
4 या 5
- 2) 5
- 3) 4
- 4) 3

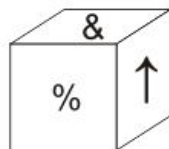
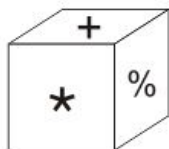
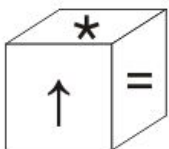
**Correct Answer:** 5

**Candidate Answer:** [ NOT ANSWERED ]

**QID : 37** -

Three positions of a cube are shown below. What will come opposite to face containing '\*'?

नीचे एक घन की तीन अवस्थाएँ दर्शायी गयी हैं। '\*' युक्त फलक के विपरीत क्या आयेगा?



Options:

1)

↑

2)

%

3)

+

4)

&

Correct Answer:

&

Candidate Answer:

&

QID : 38 -



Options:

1) 3

2) 2

3) 8

4) 4

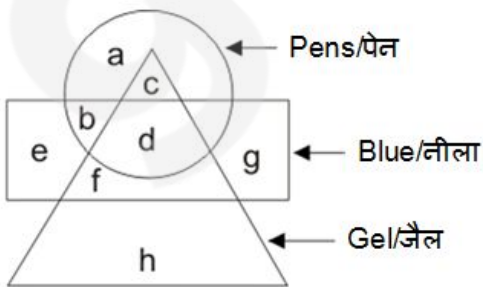
Correct Answer: 2

Candidate Answer: 2

QID : 39 -

In the given figure, which alphabet represents gel pens which are not blue?

दी गई आकृति में, कौन सा अक्षर ऐसे जैल पेन जो नीले नहीं हैं, को दर्शाता है?



Options:

1) c

2) d

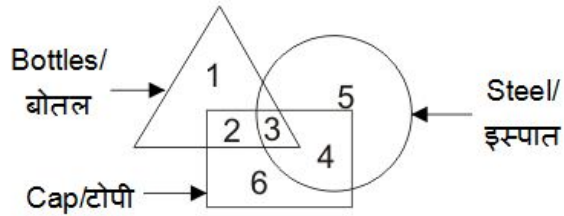
3) h

4) b

QID : 40 -

In the given figure, which number represents steel bottles which are caps?

दी गई आकृति में, कौन सा अंक ऐसी इस्पात बोतलें जो टोपियाँ हैं, को दर्शाता है?



Options:

- 1) 2
- 2) 4
- 3) 3
- 4) 6

Correct Answer: 3

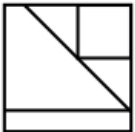
Candidate Answer: 3

QID : 41 -

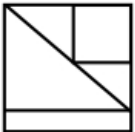


Options:

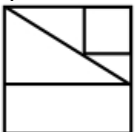
1)



2)



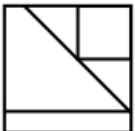
3)

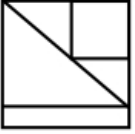


4)



Correct Answer:





QID : 42 -



Options:

1)



2)



3)



4)



Correct Answer:



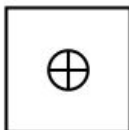
Candidate Answer:



QID : 43 -

From the given answer figures, select the one in which the question figure is hidden/embedded.

दी गई उत्तर आकृतियों में से उस उत्तर आकृति को चुनिए जिस में प्रश्न आकृति निहित है।



Options:

1)



2)



3)



4)



Correct Answer:



Candidate Answer:



QID : 44 -

From the given answer figures, select the one in which the question figure is hidden/embedded.

दी गई उत्तर आकृतियों में से उस उत्तर आकृति को चुनिए जिस में प्रश्न आकृति निहित है।




Options:

1)



2)



3)



4)



Correct Answer:



Candidate Answer:



QID : 45 -

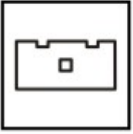
A piece of paper is folded and punched as shown below in the question figures. From the given answer figures, indicate how it will appear when opened?

नीचे के प्रश्न आकृतियों में दिखाए अनुसार कागज को मोड़कर छेदने तथा खोलने के बाद वह किस उत्तर आकृति जैसा दिखाई देगा?

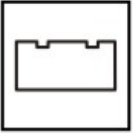


Options:

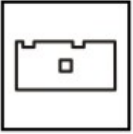
1)



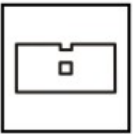
2)



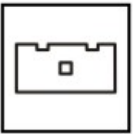
3)



4)



Correct Answer:



Candidate Answer:



QID : 46 -

A piece of paper is folded and punched as shown below in the question figures. From the given answer figures, indicate how it will appear when opened?

नीचे के प्रश्न आकृतियों में दिखाए अनुसार कागज को मोड़कर छेदने तथा खोलने के बाद वह किस उत्तर आकृति जैसा दिखाई देगा?





Options:

1)



2)



3)



4)



Correct Answer: [ No Correct Answer ]

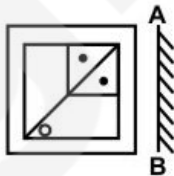
Candidate Answer:



QID : 47 -

If a mirror is placed on the line AB, then which of the answer figures is the right image of the given figure?

यदि एक दर्पण को AB रेखा पर रखा जाए, तो दी गई उत्तर आकृतियों में से कौन सी आकृति प्रश्न आकृति की सही प्रतिबिम्ब होगी?

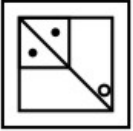


Options:

1)



2)



3)



4)



Correct Answer:



Candidate Answer:



QID : 48 -

If a mirror is placed on the line AB, then which of the answer figures is the right image of the given figure?

यदि एक दर्पण को AB रेखा पर रखा जाए, तो दी गई उत्तर आकृतियों में से कौन सी आकृति प्रश्न आकृति की सही प्रतिबिम्ब होगी?



Options:

1)



2)



3)



4)



Correct Answer:



Candidate Answer:



gradeup

QID : 49 -

A word is represented by only one set of numbers as given in any one of the alternatives. The sets of numbers given in the alternatives are represented by two classes of alphabets as shown in the given two matrices. The columns and rows of **Matrix-I** are numbered from 0 to 4 and that of **Matrix-II** are numbered from 5 to 9. A letter from these matrices can be represented first by its row and next by its column, for example, 'D' can be represented by 11, 42, etc., and 'I' can be represented by 68, 99, etc. Similarly, you have to identify the set for the word "NOSE".

एक शब्द केवल एक संख्या-समूह द्वारा दर्शाया गया है, जैसा कि विकल्पों में से किसी एक में दिया गया है। विकल्पों में दिए गए संख्या-समूह अक्षरों के दो वर्गों द्वारा दर्शाए गए हैं, जैसा कि दिए गए दो आव्यूहों में है। **आव्यूह-I** के स्तम्भ और पंक्ति की संख्या 0 से 4 है और **आव्यूह-II** की 5 से 9। इन आव्यूहों से एक अक्षर को पहले उसकी पंक्ति और बाद में स्तम्भ संख्या द्वारा दर्शाया जा सकता है। उदाहरण के लिए 'D' को 11, 42, आदि द्वारा दर्शाया जा सकता है तथा 'I' को 68, 99, आदि द्वारा दर्शाया जा सकता है। इसी तरह से आपको प्रश्न में दिए शब्द "NOSE" के लिए समूह को पहचानना है।

**Matrix-I**  
**आव्यूह-I**

	0	1	2	3	4
0	L	A	N	O	D
1	O	D	L	A	N
2	A	N	O	D	L
3	D	L	A	N	O
4	N	O	D	L	A

**Matrix-II**  
**आव्यूह-II**

	5	6	7	8	9
5	E	I	C	P	S
6	P	S	E	I	C
7	I	C	P	S	E
8	S	E	I	C	P
9	C	P	S	E	I

**Options:**

- 1) 21, 10, 78, 98
- 2) 13, 22, 66, 56
- 3) 02, 34, 59, 68
- 4) 41, 42, 85, 86

**Correct Answer:** 21, 10, 78, 98**Candidate Answer:** 21, 10, 78, 98

QID : 50 -

A word is represented by only one set of numbers as given in any one of the alternatives. The sets of numbers given in the alternatives are represented by two classes of alphabets as shown in the given two matrices. The columns and rows of **Matrix-I** are numbered from 0 to 4 and that of **Matrix-II** are numbered from 5 to 9. A letter from these matrices can be represented first by its row and next by its column, for example, 'S' can be represented by 10, 34, etc., and 'Y' can be represented by 57, 95, etc. Similarly, you have to identify the set for the word "PARK".

एक शब्द केवल एक संख्या-समूह द्वारा दर्शाया गया है, जैसा कि विकल्पों में से किसी एक में दिया गया है। विकल्पों में दिए गए संख्या-समूह अक्षरों के दो वर्गों द्वारा दर्शाए गए हैं, जैसा कि दिए गए दो आव्यूहों में है। **आव्यूह-I** के स्तम्भ और पंक्ति की संख्या 0 से 4 है और **आव्यूह-II** की 5 से 9। इन आव्यूहों से एक अक्षर को पहले उसकी पंक्ति और बाद में स्तम्भ संख्या द्वारा दर्शाया जा सकता है। उदाहरण के लिए 'S' को 10, 34, आदि द्वारा दर्शाया जा सकता है तथा 'Y' को 57, 95, आदि द्वारा दर्शाया जा सकता है। इसी तरह से आपको प्रश्न में दिए शब्द "PARK" के लिए समूह को पहचानना है।

**Matrix-I**  
**आव्यूह-I**

	0	1	2	3	4
0	P	T	A	S	E
1	S	E	P	T	A
2	T	A	S	E	P
3	E	P	T	A	S
4	A	S	E	P	T

**Matrix-II**  
**आव्यूह-II**

	5	6	7	8	9
5	K	I	Y	C	R
6	C	R	K	I	Y
7	I	Y	C	R	K
8	R	K	I	Y	C
9	Y	C	R	K	I

Options:

- 1) 13, 14, 85, 55
- 2) 31, 02, 78, 98
- 3) 23, 22, 66, 67
- 4) 00, 40, 59, 78

Correct Answer: 31, 02, 78, 98

Candidate Answer: 31, 02, 78, 98

QID : 51 - What is the full form of GNI?

जीएनआई का असंक्षिप्त रूप क्या है?

Options:

- 1) Gross National Interest  
सकल राष्ट्रीय ब्याज
- 2) Gross National Income  
सकल राष्ट्रीय आय
- 3) Gross Net Interest  
सकल निवल ब्याज
- 4) Gross Net Income  
सकल निवल आय

Correct Answer: Gross National Income

सकल राष्ट्रीय आय

Candidate Answer: Gross National Income

सकल राष्ट्रीय आय

QID : 52 - Which among the following is an apex institution in the sphere of Agriculture credit in India?

निम्नलिखित में से कौन कृषि ऋण के क्षेत्र में भारत में सर्वोच्च संस्था है?

**Options:**

1) NABARD (National Bank for Agriculture and Rural Development)

नाबाई (राष्ट्रीय कृषि और ग्रामीण विकास बैंक)

2) SIDBI (Small Industries Development Bank of India)

सिडबी (भारतीय लघु उद्योग विकास बैंक)

3) EXIM Bank

एक्जिम बैंक

4) NAFED (National Agricultural Cooperative Marketing Federation of India Ltd.)

नेफेड (भारतीय राष्ट्रीय कृषि सहकारी विपणन संघ लिमिटेड)

**Correct Answer:** NABARD (National Bank for Agriculture and Rural Development)

नाबाई (राष्ट्रीय कृषि और ग्रामीण विकास बैंक)

**Candidate Answer:** [ NOT ANSWERED ]

**QID : 53** - Which organisation measures Gross Domestic Product in India?

कौन सी संस्था भारत में सकल घरेलू उत्पाद का मापन करती है?

**Options:**

1) Reserve Bank of India

भारतीय रिज़र्व बैंक

2) NITI Aayog

नीति आयोग

3) State Bank of India

भारतीय स्टेट बैंक

4) Central Statistics Office

केन्द्रीय सांख्यिकीय कार्यालय

**Correct Answer:** Central Statistics Office

केन्द्रीय सांख्यिकीय कार्यालय

**Candidate Answer:** [ NOT ANSWERED ]

**QID : 54** - Who among the following suggested the 'Rolling Plan'?

निम्नलिखित में से किसने 'आवर्ती योजना (रोलिंग प्लान)' का सुझाव दिया था?

**Options:**

1) John W. Miller

जॉन डब्ल्यू. मिलर

2) D. T. Lakdawala

डी. टी. लकड़ावाला

3) Gunnar Myrdal

गुन्नार मिर्डल

4) Sukhmay Chakarborty

सुखमय चक्रवर्ती

**Correct Answer:** Gunnar Myrdal

गुन्नार मिर्डल

**Candidate Answer:** [ NOT ANSWERED ]

**QID : 55** - Why was 'Tendulkar Committee' constituted?

'तेंदुलकर समिति' का गठन किस लिये किया गया था?

**Options:**

1) To measure unemployment

बेरोजगारी को मापने के लिए

2) To measure growth rate

विकास दर को मापने के लिए

3) To measure poverty

गरीबी को मापने के लिए

4) To measure agricultural produce

कृषि उत्पादन को मापने के लिए

**Correct Answer:** To measure poverty

गरीबी को मापने के लिए

**Candidate Answer:** [ NOT ANSWERED ]

**QID : 56** - Which of the following is not a branch of federal form of government?

निम्नलिखित में से कौन संघीय सरकार की एक शाखा नहीं है?

**Options:**

- 1) Judiciary  
न्यायपालिका
- 2) Executive  
कार्यपालिका
- 3) Legislative  
विधायिका
- 4) Media  
मीडिया

**Correct Answer:** Media

मीडिया

**Candidate Answer:** Media

मीडिया

**QID : 57** - What is meant by 'defection'?

'दल-बदल' से क्या अभिप्राय है?

**Options:**

- 1) Changing party after winning election  
चुनाव जीतने के पश्चात दल बदलना
- 2) Changing party before winning election  
चुनाव जीतने से पूर्व दल बदलना
- 3) Changing party after losing election  
चुनाव हारने के पश्चात दल बदलना
- 4) Changing party before losing election  
चुनाव हारने से पूर्व दल बदलना

**Correct Answer:** Changing party after winning election

चुनाव जीतने के पश्चात दल बदलना

**Candidate Answer:** [ NOT ANSWERED ]

**QID : 58** - Who among the following said that 'Democracy is the government of the people, for the people and by the people'?

'प्रजातंत्र लोगों का, लोगों के लिए तथा लोगों के द्वारा बनायी गयी सरकार है', निम्नलिखित में से किसने कहा था?

**Options:**

- 1) Aristotle  
अरस्तू
- 2) Plato  
प्लेटो
- 3) Abraham Lincoln  
अब्राहम लिंकन
- 4) George Bush  
जॉर्ज बुश

**Correct Answer:** Abraham Lincoln

अब्राहम लिंकन

**Candidate Answer:** Abraham Lincoln

अब्राहम लिंकन

**QID : 59** - How many types of emergencies can be proclaimed in India?

भारत में कितने प्रकार के आपातकाल घोषित किए जा सकते हैं?

**Options:**

- 1) Five  
पांच
- 2) Six  
छह
- 3) Two  
दो
- 4) Three  
तीन

**Correct Answer:** Three

तीन

**Candidate Answer:** Two

दो

**QID : 60** - Indian Constitution contains how many Parts?

भारतीय संविधान में कितने भाग हैं?

**Options:**

- 1) Twelve Parts  
बारह भाग
- 2) Twenty-two Parts  
बाईस भाग
- 3) Eighteen Parts  
अठारह भाग
- 4) Twenty-five Parts  
पचीस भाग

**Correct Answer:** Twenty-five Parts  
पचीस भाग

**Candidate Answer:** Twenty-five Parts  
पचीस भाग

**QID : 61** - Money bill can be introduced first in which house of Parliament?

धन विधयक सर्वप्रथम संसद के किस सदन में प्रस्तावित किया जाता है?

**Options:**

- 1) Only in Lok Sabha  
केवल लोकसभा में
- 2) Only in Rajya Sabha  
केवल राज्यसभा में
- 3) Both in Lok Sabha and Rajya Sabha  
लोकसभा तथा राज्यसभा दोनों में
- 4) Either in Lok Sabha or in Rajya Sabha  
या तो लोकसभा में या राज्यसभा में

**Correct Answer:** Only in Lok Sabha  
केवल लोकसभा में

**Candidate Answer:** Only in Lok Sabha  
केवल लोकसभा में

**QID : 62** - In how many ways Indian citizenship can be lost?

निम्नलिखित में से किन तरीकों द्वारा भारत की नागरिकता गवोई जा सकती है?

**Options:**

- 1) One  
एक
- 2) Two  
दो
- 3) Three  
तीन
- 4) Four  
चार

**Correct Answer:** Three  
तीन

**Candidate Answer:** One  
एक

**QID : 63** - Who of the following appoints the Prime Minister of India?

भारत के प्रधानमंत्री को निम्नलिखित में से कौन नियुक्त करता है?

**Options:**

- 1) President of India  
भारत के राष्ट्रपति
- 2) Chief Justice of India  
भारत के मुख्य न्यायाधीश
- 3) Attorney General of India  
भारत के महान्यायवादी
- 4) Governor  
राज्यपाल



**Correct Answer:** President of India  
भारत के राष्ट्रपति

**Candidate Answer:** President of India  
भारत के राष्ट्रपति

**QID : 64** - Who among the following was one of the discoverers of Indus Valley Civilization?

निम्नलिखित में से कौन एक सिंधु घाटी सभ्यता के खोजकर्ता थे?

**Options:**

1) Lord Wooley

लॉर्ड वूली

2) Daya Ram Sahni

दयाराम साहनी

3) V. S. Agarwal

वी. एस. अग्रवाल

4) A. L. Basham

ए. एल. बाशम

**Correct Answer:** Daya Ram Sahni

दयाराम साहनी

**Candidate Answer:** [ NOT ANSWERED ]

**QID : 65** - When was Delhi declared as the capital of India?

दिल्ली को 'भारत की राजधानी' कब घोषित किया गया था?

**Options:**

1) 1901

2) 1911

3) 1913

4) 1921

**Correct Answer:** 1911

**Candidate Answer:** [ NOT ANSWERED ]

**QID : 66** - Magical charms and spells are given in which of the following Vedas?

निम्नलिखित में से किस वेद में जादू, चमत्कार तथा मंत्र दिए गए हैं?

**Options:**

1) Rig Veda

ऋग्वेद

2) Sama Veda

सामवेद

3) Yajurveda Veda

यजुर्वेद

4) Atharva Veda

अथर्ववेद

**Correct Answer:** Atharva Veda

अथर्ववेद

**Candidate Answer:** [ NOT ANSWERED ]

**QID : 67** - In Indus valley civilization, Dholavira is famous for which of the following?

सिंधु घाटी सभ्यता में, धौलावीरा निम्नलिखित में से किसके लिए प्रसिद्ध है?

**Options:**

1) Rock cut architecture

चट्टान से निर्मित स्थापत्य

2) Sea port

बंदरगाह

3) Water Conservation

जल संरक्षण

4) Pottery

मिट्टी के पात्र

**Correct Answer:** Water Conservation

जल संरक्षण

**Candidate Answer:** [ NOT ANSWERED ]

**QID : 68** - Who was the founder of Arya Samaj?

आर्य समाज के संस्थापक कौन थे?

**Options:**

1) Mula Shankar

मूल शंकर

2) Bal Gangadhar Tilak

बाल गंगाधर तिलक

3) Swami Dayanand Saraswati

स्वामी दयानंद सरस्वती

4) Rabindra Nath Tagore

रबिंद्रनाथ टैगोर

**Correct Answer:** Swami Dayanand Saraswati

स्वामी दयानंद सरस्वती

**Candidate Answer:** Swami Dayanand Saraswati

स्वामी दयानंद सरस्वती

**QID : 69** - Which of the following pair is CORRECT?

निम्नलिखित में से कौन सा युग्म सही है?

**Options:**

1) 23.5° South – Tropic of Cancer

23.5° दक्षिण – कर्क रेखा

2) 23.5° South – Tropic of Capricorn

23.5° दक्षिण – मकर रेखा

3) 23.5° North – Tropic of Capricorn

23.5° उत्तर – मकर रेखा

4) 66° North – Antarctic Circle

66° उत्तर – अंटार्कटिक वृत्त

**Correct Answer:** 23.5° South – Tropic of Capricorn

23.5° दक्षिण – मकर रेखा

**Candidate Answer:** [ NOT ANSWERED ]

**QID : 70** - Which of the following sea has highest salinity?

निम्नलिखित में से किस सागर का खारापन सबसे अधिक है?

**Options:**

1) Red Sea

लाल सागर

2) Black Sea

काला सागर

3) Dead Sea

मृत सागर

4) Arabian Sea

अरब सागर

**Correct Answer:** Dead Sea

मृत सागर

**Candidate Answer:** Dead Sea

मृत सागर

**QID : 71** - Ox-bow lakes are formed when river is \_\_\_\_\_.

चापाकार झील की रचना तब होती है जब नदी \_\_\_\_\_ होती है।

**Options:**

1) Fast moving

तेजी से बह रही

2) At steep slope

तीखी ढलान पर

3) At very low gradient

बहुत कम ढलान पर

4) At near point of origin

उद्गम बिंदु के निकट

**Correct Answer:** At very low gradient

बहुत कम ढलान पर

**Candidate Answer:** [ NOT ANSWERED ]

**QID : 72** - In which country Cape Comorin is located?

केप कैमोरिन किस देश में स्थित है?

**Options:**

- 1) India  
भारत
- 2) Pakistan  
पाकिस्तान
- 3) South Africa  
दक्षिण अफ्रीका
- 4) South America  
दक्षिण अमेरिका

**Correct Answer:** India  
भारत

**Candidate Answer:** [ NOT ANSWERED ]

**QID : 73** - Which among the following is a green house gas?

- I. Methane
- II. Carbon dioxide
- III. Nitrogen dioxide

निम्नलिखित में से कौन सी एक हरितगृह गैस है?

- I. मीथेन
- II. कार्बन डाइऑक्साइड
- III. नाइट्रोजन डाइऑक्साइड

**Options:**

- 1) I and II  
I तथा II
- 2) I and III  
I तथा III
- 3) II and III  
II तथा III
- 4) All options are correct.  
सभी विकल्प सही हैं I

**Correct Answer:** I and II  
I तथा II

**Candidate Answer:** All options are correct.  
सभी विकल्प सही हैं I

**QID : 74** - Which of the following cell organelle is present only in plant cell?

निम्नलिखित में से कौन सी कोशिका अंगक केवल वनस्पति कोशिका में उपस्थित होती है?

**Options:**

- 1) Mitochondria  
सूत्रकणिका
- 2) Cell wall  
कोशिका भित्ति
- 3) Cell membrane  
कोशिका झिल्ली
- 4) Vacuole  
रिक्तिका

**Correct Answer:** Cell wall  
कोशिका भित्ति

**Candidate Answer:** [ NOT ANSWERED ]

**QID : 75** - Which of the following is a vestigial organ in human body?

निम्नलिखित में से कौन सा मानव शरीर का एक अविशिष्ट अंग है?

**Options:**

- 1) Wisdom teeth  
अकल की दाढ़
- 2) Spleen  
तिल्ली
- 3) Thyroid  
गलगंधि
- 4) Gall bladder  
पित्ताशय

**Correct Answer:** Wisdom teeth

अकल की दाढ़

**Candidate Answer:** Wisdom teeth

अकल की दाढ़

**QID : 76** - Which of the following enzyme is essential for clotting of blood?

निम्नलिखित में से कौन सा एंजाइम रक्त का थक्का बनाने के लिए आवश्यक है?

**Options:**

- 1) Amylase  
एमाइलेज
- 2) Thrombin  
थ्रोम्बिन
- 3) Pepsin  
पेप्सिन
- 4) Renin  
रेनिन

**Correct Answer:** Thrombin

थ्रोम्बिन

**Candidate Answer:** [ NOT ANSWERED ]

**QID : 77** - Which of the following is a genetic disease?

निम्नलिखित में से कौन सा एक आनुवंशिक विकार है?

**Options:**

- 1) Down syndrome  
डाउन सिंड्रोम
- 2) Elephantiasis  
हाथीपॉव
- 3) Asthama  
दमा
- 4) Night blindness  
रतौंधी

**Correct Answer:** Down syndrome

डाउन सिंड्रोम

**Candidate Answer:** [ NOT ANSWERED ]

**QID : 78** - Onion is an example of bulb, which is a modified \_\_\_\_\_.

प्याज़ एक गांठ (बल्ब) का उदाहरण है, जोकि एक परिवर्तित \_\_\_\_\_ है।

**Options:**

- 1) Stem  
तना
- 2) Root  
जड़
- 3) Leaf  
पत्ती
- 4) Flower  
फूल

**Correct Answer:** Stem

तना

**Candidate Answer:** [ NOT ANSWERED ]

**QID : 79** - Which of the following gives colour to human skin?

निम्नलिखित में से कौन मानव की त्वचा को रंग प्रदान करता है?

**Options:**

- 1) Adenosine  
एडेनोसाइन
- 2) Thymine  
थायमिन
- 3) Melanin  
मेलानिन
- 4) Guanine  
गुआनिन

**Correct Answer:** Melanin

मेलानिन

**Candidate Answer:** Melanin

मेलानिन

**QID : 80** - A flying jet possesses \_\_\_\_\_.

एक उड़ते हुए जेट में \_\_\_\_\_ होती है।

**Options:**

- 1) Potential energy  
स्थितिज ऊर्जा
- 2) Kinetic energy  
गतिज ऊर्जा
- 3) Wind energy  
पवन ऊर्जा
- 4) Both kinetic and potential energy  
गतिज तथा स्थितिज ऊर्जा दोनों

**Correct Answer:** Both kinetic and potential energy

गतिज तथा स्थितिज ऊर्जा दोनों

**Candidate Answer:** Both kinetic and potential energy

गतिज तथा स्थितिज ऊर्जा दोनों

**QID : 81** - Direction of heat flow depends on \_\_\_\_\_.

ऊष्मा के प्रवाह की दिशा \_\_\_\_\_ पर निर्भर होती है।

**Options:**

- 1) Density  
घनत्व
- 2) Energy  
ऊर्जा
- 3) Mass  
द्रव्यमान
- 4) Temperature  
तापमान

**Correct Answer:** Temperature

तापमान

**Candidate Answer:** [ NOT ANSWERED ]

**QID : 82** - Which of the following phenomena is involved in Kaleidoscope?

कैलीडोस्कोप में निम्नलिखित में से कौन सी घटना अंतर्निहित होती है?

**Options:**

- 1) Refraction  
अपवर्तन
- 2) Reflection  
परावर्तन
- 3) Total Internal reflection  
पूर्ण आंतरिक परावर्तन
- 4) Diffraction  
विवर्तन

**Correct Answer:** Reflection

परावर्तन

**Candidate Answer:** Diffraction

विवर्तन

**QID : 83** - In a magnifying glass \_\_\_\_\_ lens is used.

आवर्धक काँच में \_\_\_\_\_ लेंस का प्रयोग होता है।

**Options:**

- 1) Convex  
उत्तल
- 2) Concave  
अवतल
- 3) Plano concave  
समतल अवतल
- 4) Plano convex  
समतल उत्तल

**Correct Answer:** Convex  
उत्तल

**Candidate Answer:** [ NOT ANSWERED ]

**QID : 84** - Which of the following is also termed as main memory of computer?

निम्नलिखित में से किसे कम्प्यूटर की मुख्य स्मृति भी कहा जाता है?

**Options:**

- 1) RAM  
आर.ऐ.एम.
- 2) ROM  
आर.ओ.एम.
- 3) Hard disk  
हार्ड डिस्क
- 4) Compact disk  
कॉम्पैक्ट डिस्क

**Correct Answer:** RAM  
आर.ऐ.एम.

**Candidate Answer:** ROM  
आर.ओ.एम.

**QID : 85** - BIT is also known as \_\_\_\_\_.

बिट को \_\_\_\_\_ के नाम से भी जाना जाता है।

**Options:**

- 1) Binary language  
द्विआधारी भाषा
- 2) Binary digit  
द्विआधारी अंक
- 3) Binary Number  
द्विआधारी संख्या
- 4) Gigabyte  
गीगाबाइट

**Correct Answer:** Binary digit  
द्विआधारी अंक

**Candidate Answer:** Binary digit  
द्विआधारी अंक

Match the following.

निम्नलिखित का मिलान कीजिए।

Nature / प्रकृति	Substance / पदार्थ
1. Acidic अम्लीय	a. Distill water आसुत जल
2. Basic क्षारीय	b. Carbonated drink कार्बोनेटेड पेय
3. Neutral न्यूट्रल	c. Soap साबुन

**Options:**

1) 1 - a, 2 - c, 3 - b

2) 1 - b, 2 - c, 3 - a

3) 1 - a, 2 - b, 3 - c

4) 1 - c, 2 - a, 3 - b

**Correct Answer:** 1 - b, 2 - c, 3 - a

**Candidate Answer:** 1 - b, 2 - c, 3 - a

**QID : 87** - Which of the following is radioactive in nature?

निम्नलिखित में से कौन रेडियोधर्मी प्रवृत्ति का है?

**Options:**

1) Helium

हीलियम

2) Sodium

सोडियम

3) Thorium

थोरियम

4) Platinum

प्लेटिनम

**Correct Answer:** Thorium

थोरियम

**Candidate Answer:** Thorium

थोरियम

**QID : 88** - Which of the following is used as fuel rods in Atomic reactor?

निम्नलिखित में से किसका उपयोग परमाणु भट्टी (रिएक्टर) में ईंधन छड़ की तरह प्रयोग किया जाता है?

**Options:**

1) Sodium

सोडियम

2) Uranium

यूरेनियम

3) Graphite

ग्रेफाइट

4) Boron

बोरॉन

**Correct Answer:** Uranium

यूरेनियम

**Candidate Answer:** Uranium

यूरेनियम

**QID : 89** - Bleaching action of Chlorine is due to which reaction?

क्लोरीन की ब्लीचिंग क्रिया किस अभिक्रिया के कारण है?

**Options:**

- 1) Oxidation  
ऑक्सीकरण
- 2) Hydrolysis  
जल विश्लेषण
- 3) Redox  
रेडॉक्स
- 4) Decomposition  
अपघटन

**Correct Answer:** Oxidation  
ऑक्सीकरण

**Candidate Answer:** Oxidation  
ऑक्सीकरण

**QID : 90** - Which of the following is a major component of water pollution in Bengal Basin?

निम्नलिखित में से कौन सा बंगाल बेसिन में जल प्रदूषण का एक अहम घटक है?

**Options:**

- 1) Chromium  
क्रोमियम
- 2) Arsenic  
आर्सेनिक
- 3) Calcium  
कैल्शियम
- 4) Potassium  
पोटाशियम

**Correct Answer:** Arsenic  
आर्सेनिक

**Candidate Answer:** [ NOT ANSWERED ]

**QID : 91** - Identify correct type of food chain:

**Dead animal ---> maggots ---> frog ---> snake**

सही आहार श्रृंखला पहचानें:

**मृत पशु ---> कीड़े ---> मेंढक ---> साँप**

**Options:**

- 1) Decomposer food chain  
अपघटक आहार श्रृंखला
- 2) Detritus food chain  
डेटरीट्स आहार श्रृंखला
- 3) Grazing food chain  
चारा आहार श्रृंखला
- 4) Parasitic food chain  
परजीवी आहार श्रृंखला

**Correct Answer:** Detritus food chain  
डेटरीट्स आहार श्रृंखला

**Candidate Answer:** [ NOT ANSWERED ]

**QID : 92** - In which of the following ecosystem pyramid of biomass is upright?

निम्नलिखित में से किस पारिस्थितिक तंत्र में बायोमास का पिरामिड सीधा रहता है?

**Options:**

- 1) Pond ecosystem  
तालाब पारिस्थितिकी
- 2) Grassland ecosystem  
चारागाह पारिस्थितिकी
- 3) Fresh water ecosystem  
मीठा पानी पारिस्थितिकी
- 4) Forest ecosystem  
वन पारिस्थितिकी



**Correct Answer:** Grassland ecosystem

चारागाह पारिस्थितिकी

**Candidate Answer:** [ NOT ANSWERED ]

**QID : 93** - Ministry of Health and family welfare has launched the 'Test and Treat Policy' for \_\_\_\_\_ patients.

स्वास्थ्य तथा परिवार कल्याण मंत्रालय ने 'जाँच तथा उपचार नीति' \_\_\_\_\_ रोगियों के लिए शुरू की है।

**Options:**

1) Polio

पोलियो

2) HIV

एच. आइ. वी

3) Malaria

मलेरिया

4) Cancer

कैंसर

**Correct Answer:** HIV

एच. आइ. वी

**Candidate Answer:** [ NOT ANSWERED ]

**QID : 94** - Karl Landsteiner is known for the discovery of which one of the following?

कार्ल लैंडस्टीनर निम्नलिखित में से किसके आविष्कार के लिए जाने जाते हैं?

**Options:**

1) Cresco graph

क्रेस्कोग्राफ

2) Radioactivity

रेडियोसक्रियता

3) Blood group

रक्त समूह

4) X-rays

एक्स किरण

**Correct Answer:** Blood group

रक्त समूह

**Candidate Answer:** [ NOT ANSWERED ]

**QID : 95** - National sport of Malaysia is \_\_\_\_\_.

मलेशिया का राष्ट्रीय खेल \_\_\_\_\_ है।

**Options:**

1) Badminton

बैडमिंटन

2) Hockey

हॉकी

3) Table Tennis

टेबल टेनिस

4) Chess

शतरंज

**Correct Answer:** Badminton

बैडमिंटन

**Candidate Answer:** [ NOT ANSWERED ]

**QID : 96** - Lotus Temple is known for which religion?

कमल मंदिर किस धर्म के लिए जाना जाता है?

**Options:**

1) Judaism

यहूदी धर्म

2) Buddhism

बौद्ध धर्म

3) Bahai

बहाई धर्म

4) Taoism

ताओ धर्म

**Correct Answer:** Bahai

बहाई धर्म

**Candidate Answer:** Bahai

बहाई धर्म

**QID : 97** - Who is the recipient of Padma Shri for the year 2016 in the field of sports – Cricket along with Virat Kohli?

क्रिकेट के क्षेत्र में विराट कोहली के साथ वर्ष 2016 के लिए पद्मश्री प्राप्तकर्ता कौन हैं?

**Options:**

1) Polly Umrigar

पॉली उमरीगर

2) Amit Bhandari

अमित भंडारी

3) Shekhar Naik

शेखर नाइक

4) Bishan Singh Bedi

बिशन सिंह बेदी

**Correct Answer:** Shekhar Naik

शेखर नाइक

**Candidate Answer:** Amit Bhandari

अमित भंडारी

**QID : 98** - Who has written the book named 'The People's President: Dr. A.P.J. Abdul Kalam'?

द पीपल्स प्रेसिडेंट: डॉ. ए. पी. जे. अब्दुल कलाम' नामक पुस्तक किसने लिखी है?

**Options:**

1) S. M. Khan

एस. एम. खान

2) Sourabh Duggal

सौरभ दुग्गल

3) Tarun Vijay

तरुण विजय

4) Shri Vijay Kumar

श्री विजय कुमार

**Correct Answer:** S. M. Khan

एस. एम. खान

**Candidate Answer:** [ NOT ANSWERED ]

**QID : 99** - Which country has opened its consulate in Chennai on 28 April 2017?

किस देश ने 28 अप्रैल 2017 को चेन्नई में अपना दूतावास खोला है?

**Options:**

1) Kazakhstan

कजाकिस्तान

2) Uzbekistan

उजबेकिस्तान

3) Iran

ईरान

4) Israel

इजराइल

**Correct Answer:** Kazakhstan

कजाकिस्तान

**Candidate Answer:** [ NOT ANSWERED ]

**QID : 100** - Katchatheevu Island was ceded by India to which country in 1974?

कछाथीवू द्वीप 1974 में भारत द्वारा किस देश को सौंपा गया था?

**Options:**

- 1) Sri Lanka  
श्रीलंका
- 2) Maldives  
मालदीव
- 3) Indonesia  
इंडोनेशिया
- 4) Myanmar  
म्यांमार

**Correct Answer:** Sri Lanka

श्रीलंका

**Candidate Answer:** [ NOT ANSWERED ]

**QID : 101** - If  $1/N = (\sqrt{6} + \sqrt{5})/(\sqrt{6} - \sqrt{5})$ , then what is the value of N?

यदि  $1/N = (\sqrt{6} + \sqrt{5})/(\sqrt{6} - \sqrt{5})$  है, तो N का मान क्या होगा?

**Options:**

- 1)  $6 - \sqrt{30}$
- 2)  $6 + \sqrt{30}$
- 3)  $11 - 2\sqrt{30}$
- 4)  $11 + 2\sqrt{5}$

**Correct Answer:**  $11 - 2\sqrt{30}$

**Candidate Answer:**  $11 - 2\sqrt{30}$

**QID : 102** - What is the value of positive square root of  $69 + 28\sqrt{5}$ ?

$69 + 28\sqrt{5}$  का धनात्मक वर्गमूल का मान क्या है?

**Options:**

- 1)  $7 + 2\sqrt{5}$
- 2)  $7 - 2\sqrt{5}$
- 3)  $2 + 7\sqrt{5}$
- 4)  $2 - 7\sqrt{5}$

**Correct Answer:**  $7 + 2\sqrt{5}$

**Candidate Answer:** [ NOT ANSWERED ]

**QID : 103** -  $3^{11} + 3^{12} + 3^{13} + 3^{14}$  is divisible by \_\_\_\_\_.

$3^{11} + 3^{12} + 3^{13} + 3^{14}$ , \_\_\_\_\_ से विभाज्य है।

**Options:**

- 1) 7
- 2) 8
- 3) 11
- 4) 14

**Correct Answer:** 8

**Candidate Answer:** 7

**QID : 104** - A boy added all natural numbers from 1 to 12, however he added one number twice due to which the sum becomes 80. What is the number which he added twice?

एक लड़का 1 से 12 तक की सभी प्राकृतिक संख्याओं को जोड़ता है लेकिन वह एक संख्या को दो बार जोड़ देता है जिसके कारण योग 80 हो जाता है। वह कौन सी संख्या है जिसको उसने दो बार जोड़ा है?

**Options:**

- 1) 3
- 2) 2
- 3) 7
- 4) 8

**Correct Answer:** 2

**Candidate Answer:** [ NOT ANSWERED ]

**QID : 105** - What smallest value must be added to 508, so that the resultant is a perfect square?

508 में वह कौन सी छोटी से छोटी संख्या जोड़ी जाए, कि प्राप्त योग एक पूर्ण वर्ग हो?

**Options:**

- 1) 4
- 2) 9
- 3) 18
- 4) 21

**Correct Answer:** 21

**Candidate Answer:** 21

**QID : 106** - Raman is 25% more efficient than Aman. If Aman can complete a piece of work in 25 days, then Raman can complete the same work in how many days?

रमन, अमन से 25% अधिक कार्यकुशल है। यदि अमन एक कार्य को 25 दिन में पूरा कर सकता है, तो रमन उसी कार्य को कितने दिनों में पूरा कर सकता है?

**Options:**

- 1) 12
- 2) 15
- 3) 16
- 4) 20

**Correct Answer:** 20

**Candidate Answer:** [ NOT ANSWERED ]

**QID : 107** - A and B together can complete a work in 30 day. They started together but after 6 days A left the work and the work is completed by B after 36 more days. A alone can complete the entire work in how many days?

A तथा B एक कार्य को मिलकर 30 दिन में पूरा कर सकते हैं। वे एक साथ कार्य करना आरंभ करते हैं परंतु 6 दिनों के बाद A कार्य छोड़ देता है तथा शेष कार्य B द्वारा पूरा करने में 36 दिन और लगते हैं। A अकेला सम्पूर्ण कार्य को कितने दिनों में पूरा कर सकता है?

**Options:**

- 1) 45
- 2) 90
- 3) 60
- 4) 120

**Correct Answer:** 90

**Candidate Answer:** 90

**QID : 108** - The marked price of an article is 40% more than its cost price. If 10% discount is given, then what is the profit percentage?

एक वस्तु का अंकित मूल्य उसके क्रय मूल्य से 40% अधिक है। यदि 10% की छूट दी जाए, तो लाभ प्रतिशत क्या है?

**Options:**

- 1) 10
- 2) 20
- 3) 26
- 4) 32

**Correct Answer:** 26

**Candidate Answer:** 26

**QID : 109** - What will be the net discount (in percent) after giving three successive discounts of 10%, 20% and 30%?

10%, 20% तथा 30% की तीन क्रमिक छूट देने के पश्चात निवल (नेट) छूट (प्रतिशत में) क्या होगी?

**Options:**

- 1) 50.4
- 2) 49.6
- 3) 45.3
- 4) 48.4

**Correct Answer:** 49.6

**Candidate Answer:** 49.6

**QID : 110** - The ratio of two numbers is 3 : 5. If both numbers are increased by 8, the ratio becomes 13 : 19. What is the sum of the two numbers?

दो संख्याओं का अनुपात 3 : 5 है। यदि दोनों संख्याओं में 8 की वृद्धि की जाए, तो अनुपात 13 : 19 हो जाता है। दोनो संख्याओं का योग क्या होगा?

**Options:**

- 1) 32
- 2) 48
- 3) 40
- 4) 72

**Correct Answer:** 48

**Candidate Answer:** 48

**QID : 111** - If  $3A = 5B$ , then what is the value of  $(A + B)/B$ ?

यदि  $3A = 5B$  है, तो  $(A + B)/B$  का मान क्या होगा?

**Options:**

- 1)  $8/3$
- 2)  $8/5$
- 3)  $5/8$
- 4)  $5/3$

**Correct Answer:**  $8/3$

**Candidate Answer:**  $8/3$

**QID : 112** - What is the average of first 29 even numbers?

प्रथम 29 सम संख्याओं का औसत क्या है?

**Options:**

- 1) 30
- 2) 31
- 3) 32
- 4) 33

**Correct Answer:** 30

**Candidate Answer:** 30

**QID : 113** - The average of 5 consecutive odd numbers is 27. What is the product of the first and the last number?

5 क्रमागत विषम संख्याओं का औसत 27 है, तो प्रथम संख्या तथा अंतिम संख्या का गुणांक क्या है?

**Options:**

- 1) 621
- 2) 667
- 3) 713
- 4) 725

**Correct Answer:** 713

**Candidate Answer:** 713

**QID : 114** - A man bought 9 pens for a rupee. How many pens should he sell for a rupee to gain 50%?

एक व्यक्ति 1 रु. में 9 कलम खरीदता है। 50% का लाभ प्राप्त करने के लिए उसे 1 रु. में कितनी कलम बेचनी चाहिए?

**Options:**

- 1) 3
- 2) 6
- 3) 7
- 4) 8

**Correct Answer:** 6

**Candidate Answer:** 6

**QID : 115** - On an article the profit is 210% of the cost price. If the cost price increase by 40% but the selling price remains constant, then approximately what percentage of selling price will be the profit?

एक वस्तु पर क्रय मूल्य का 210% लाभ होता है। यदि क्रय मूल्य में 40% की वृद्धि होती है लेकिन विक्रय मूल्य स्थिर रहता है, तो लाभ विक्रय मूल्य का लगभग कितना प्रतिशत होगा?

**Options:**

- 1) 55
- 2) 62
- 3) 74
- 4) 85

**Correct Answer:** 55

**Candidate Answer:** [ NOT ANSWERED ]

**QID : 116** - If the price of apple increases from Rs 80/kg to Rs 100/kg, then by what percentage a person should decrease the consumption if his expenditure remains same?

यदि सेब का मूल्य 80 रु. प्रति किग्रा. से 100 रु. प्रति किग्रा. हो जाता है, तो एक आदमी को सेब की खपत कितने प्रतिशत कम कर देनी चाहिए, ताकि उसका खर्चा समान रहे?

**Options:**

- 1) 25
- 2) 22
- 3) 20
- 4) 18

**Correct Answer:** 20

**Candidate Answer:** 20

**QID : 117** - If 25% of a number is 6, then what is the number which is 50% more than the initial number?

यदि एक संख्या का 25%, 6 है, तो वह संख्या क्या है जो प्रारंभिक संख्या से 50% अधिक है?

**Options:**

- 1) 36
- 2) 24
- 3) 30
- 4) 18

**Correct Answer:** 36

**Candidate Answer:** 24

**QID : 118** - A boat travels 60 kilometers downstream and 20 kilometers upstream in 4 hours. The same boat travels 40 kilometers downstream and 40 kilometers upstream in 6 hours. What is the speed (in km/hr) of the stream?

एक नाव 4 घंटे में धारा के साथ 60 किलोमीटर तथा धारा के विपरीत 20 किलोमीटर चलती है। वही नाव 6 घंटे में धारा के साथ 40 किलोमीटर तथा धारा के विपरीत 40 किलोमीटर चलती है। धारा की गति (कि.मी/घंटा में) क्या है?

**Options:**

- 1) 24
- 2) 16
- 3) 18
- 4) 20

**Correct Answer:** 16

**Candidate Answer:** [ NOT ANSWERED ]

**QID : 119** - 50 trees are standing in a line such that distance between any two consecutive trees is same. A car takes 18 seconds to travel from 13th tree to 34th tree. How much time (in seconds) will it take to reach from 1st tree to 50th tree?

50 वृक्ष एक सीधी पंक्ति में इस प्रकार खड़े हैं कि किसी भी दो क्रमागत वृक्षों के बीच की दूरी एक समान है। एक कार 13 वें वृक्ष से 34 वें वृक्ष तक पहुँचने में 18 सेकंड लेती है। पहले वृक्ष से 50 वें वृक्ष तक पहुँचने में वह कितना समय (सेकण्ड में) लेगी?

**Options:**

- 1) 42
- 2) 42.85
- 3) 45
- 4) 49

**Correct Answer:** 42

**Candidate Answer:** 42

**QID : 120** - What will be the amount on Rs 12500 at the rate of 20% per annum compounded yearly for 3 years?

3 वर्षों में 20 प्रतिशत प्रति वर्ष की दर से 12500 रु. पर वार्षिक चक्रवृद्धि से मिलने वाली राशि क्या होगी?

**Options:**

- 1) 21080
- 2) 21560
- 3) 20600
- 4) 21600

**Correct Answer:** 21600

**Candidate Answer:** 21600

**QID : 121** - A certain sum becomes 7 times in 8 years, at simple interest, then in how many years it will become 19 times?

यदि साधारण ब्याज पर लगाई गई कोई धनराशि 8 वर्षों में 7 गुना हो जाती है, तो कितने वर्षों में वह 19 गुना हो जाएगी?

**Options:**

- 1) 15
- 2) 18
- 3) 28
- 4) 24

**Correct Answer:** 24

**Candidate Answer:** [ NOT ANSWERED ]

**QID : 122 -**

The table given below shows the runs scored by 5 players in four matches.

नीचे दी गई तालिका में 5 खिलाड़ियों के द्वारा चार मैचों में बनाए गए रनों को दर्शाया गया है।

Player खिलाड़ी	Match / मैच			
	I	II	III	IV
A	70	105	55	135
B	40	35	95	72
C	60	68	75	85
D	95	45	55	60
E	105	110	125	122

What is the difference between total runs scored by A and B in four matches?

A तथा B के द्वारा चार मैचों में बनाए गए कुल रनों में कितना अंतर है?

**Options:**

- 1) 111
- 2) 123
- 3) 98
- 4) 135

**Correct Answer:** 123

**Candidate Answer:** 123

The table given below shows the runs scored by 5 players in four matches.

नीचे दी गई तालिका में 5 खिलाड़ियों के द्वारा चार मैचों में बनाए गए रनों को दर्शाया गया है।

Player खिलाड़ी	Match / मैच			
	I	II	III	IV
A	70	105	55	135
B	40	35	95	72
C	60	68	75	85
D	95	45	55	60
E	105	110	125	122

Runs scored by C in match II is how much percent more than the runs scored by C in match I?

दूसरे मैच में C के द्वारा बनाए गए रन, पहले मैच में C के द्वारा बनाए गए रन से कितने प्रतिशत अधिक है?

**Options:**

- 1) 11.76
- 2) 16.66
- 3) 17.12
- 4) 13.33

**Correct Answer:** 13.33

**Candidate Answer:** 13.33

**QID : 124 -**

The table given below shows the runs scored by 5 players in four matches.

नीचे दी गई तालिका में 5 खिलाड़ियों के द्वारा चार मैचों में बनाए गए रनों को दर्शाया गया है।

Player खिलाड़ी	Match / मैच			
	I	II	III	IV
A	70	105	55	135
B	40	35	95	72
C	60	68	75	85
D	95	45	55	60
E	105	110	125	122

Runs scored by A in match II is what percent of the total runs scored by these five players in match II?

दूसरे मैच में A के द्वारा बनाए गए रन, इन पाँच खिलाड़ियों द्वारा दूसरे मैच में बनाए गए कुल रनों का कितना प्रतिशत है?

**Options:**

- 1) 71.07
- 2) 35.14
- 3) 28.92
- 4) 55.13

**Correct Answer:** 28.92

**Candidate Answer:** 28.92



The table given below shows the runs scored by 5 players in four matches.

नीचे दी गई तालिका में 5 खिलाड़ियों के द्वारा चार मैचों में बनाए गए रनों को दर्शाया गया है।

Player खिलाड़ी	Match / मैच			
	I	II	III	IV
A	70	105	55	135
B	40	35	95	72
C	60	68	75	85
D	95	45	55	60
E	105	110	125	122

What is the correct order of averages of the given players in the 4 matches?

दिए गए खिलाड़ियों के 4 मैचों में औसत का सही क्रम क्या है?

**Options:**

- 1)  $E > A > C > D > B$
- 2)  $E > A > D > C > B$
- 3)  $A > E > C > D > B$
- 4)  $A > E > B > C > D$

**Correct Answer:**  $E > A > C > D > B$

**Candidate Answer:**  $E > A > C > D > B$

**QID : 126** - A solid metallic sphere of radius 21 cm is melted and recast into a cone with diameter of the base as 21 cm. What is the height (in cm) of the cone?

एक 21 से.मी. त्रिज्या की एक ठोस धात्विक गोले को पिघलाकर एक शंकु का आकार दिया जाता है जिसके आधार का व्यास 21 से.मी. है। शंकु की ऊँचाई (से.मी. में) क्या है?

**Options:**

- 1) 336
- 2) 112
- 3) 224
- 4) 66

**Correct Answer:** 336

**Candidate Answer:** [ NOT ANSWERED ]

**QID : 127** - The radius of a wheel is 3.5 cm. What is the distance (in cm) travelled by the wheel in 20 revolutions?

एक पहिये का त्रिज्या 3.5 से.मी. है। 20 चक्करों में पहिया कितनी दूरी (से.मी. में) तय करेगा?

**Options:**

- 1) 220
- 2) 440
- 3) 880
- 4) 1320

**Correct Answer:** 440

**Candidate Answer:** 440

**QID : 128** - If the perimeter of a square is 44 cm, then what is the diagonal (in cm) of the square?

यदि एक वर्ग की परिधि 44 से.मी. है, तो वर्ग का विकर्ण (से.मी. में) क्या होगा?

**Options:**

- 1)  $11\sqrt{2}$
- 2)  $2\sqrt{11}$
- 3) 11
- 4)  $44\sqrt{2}$

**Correct Answer:**  $11\sqrt{2}$

**QID : 129** - What is the curved surface area (in  $\text{cm}^2$ ) of a cylinder having radius of base as 14 cm and height as 10 cm?

एक बेलन जिसके आधार की त्रिज्या 14 से.मी. तथा ऊँचाई 10 से.मी. है, का वक्र पृष्ठीय क्षेत्रफल (से.मी.<sup>2</sup> में) क्या होगा?

**Options:**

- 1) 440
- 2) 880
- 3) 220
- 4) 1320

**Correct Answer:** 880

**Candidate Answer:** 880

**QID : 130** - Three circles of radius 63 cm are placed in such a way that each circle touches the other two. What is the area of the portion enclosed by the three circles?

63 से.मी. त्रिज्या वाले तीन वृत्त इस प्रकार से व्यवस्थित किए गए हैं कि प्रत्येक वृत्त अन्य दो वृत्तों को स्पर्श करता है। इन तीनों वृत्तों के द्वारा घेरे गए क्षेत्र का क्षेत्रफल क्या होगा?

**Options:**

- 1)  $7938\sqrt{3} - 4158$
- 2)  $3969\sqrt{3} - 4158$
- 3)  $7938\sqrt{3} - 6237$
- 4)  $3969\sqrt{3} - 6237$

**Correct Answer:**  $3969\sqrt{3} - 6237$

**Candidate Answer:** [ NOT ANSWERED ]

**QID : 131** - If  $(x/y)^{5a-3} = (y/x)^{17-3a}$ , then what is the value of a?

यदि  $(x/y)^{5a-3} = (y/x)^{17-3a}$  है, तो a का मान क्या होगा?

**Options:**

- 1) -7
- 2) -5
- 3) 0
- 4) 3

**Correct Answer:** -7

**Candidate Answer:** [ NOT ANSWERED ]

**QID : 132** -

What is the value of  $\left(\frac{x^2 - x - 6}{x^2 + x - 12}\right) \div \left(\frac{x^2 + 5x + 6}{x^2 + 7x + 12}\right)$ ?

$\left(\frac{x^2 - x - 6}{x^2 + x - 12}\right) \div \left(\frac{x^2 + 5x + 6}{x^2 + 7x + 12}\right)$  का मान क्या है?

**Options:**

- 1) 1
- 2)  $(x - 3)/(x + 3)$
- 3)  $(x + 4)/(x - 3)$
- 4)  $(x - 3)(x + 4)$

**Correct Answer:** 1

**Candidate Answer:** [ NOT ANSWERED ]

If  $x^2 + \frac{1}{x^2} = \frac{7}{4}$  for  $x > 0$ , then what is the value of  $x^3 + \frac{1}{x^3}$ ?

यदि  $x > 0$  के लिए  $x^2 + \frac{1}{x^2} = \frac{7}{4}$  हो, तो  $x^3 + \frac{1}{x^3}$  का मान क्या है?

**Options:**

- 1)  $(3\sqrt{3})/5$
- 2)  $(3\sqrt{15})/5$
- 3)  $(3\sqrt{15})/8$
- 4)  $(3\sqrt{5})/8$

**Correct Answer:**  $(3\sqrt{15})/8$

**Candidate Answer:**  $(3\sqrt{15})/8$

**QID : 134 -**

If  $x^2 - 8x + 1 = 0$ , then what is the value of  $x^2 + \frac{1}{x^2}$ ?

यदि  $x^2 - 8x + 1 = 0$  हो, तो  $x^2 + \frac{1}{x^2}$  का मान क्या है?

**Options:**

- 1) 18
- 2) 34
- 3) 40
- 4) 62

**Correct Answer:** 62

**Candidate Answer:** [ NOT ANSWERED ]

**QID : 135 -**

What is the simplified value of

$$\left(x^{32} + \frac{1}{x^{32}}\right)\left(x^8 + \frac{1}{x^8}\right)\left(x - \frac{1}{x}\right)\left(x^{16} + \frac{1}{x^{16}}\right)\left(x + \frac{1}{x}\right)\left(x^4 + \frac{1}{x^4}\right)?$$

$$\left(x^{32} + \frac{1}{x^{32}}\right)\left(x^8 + \frac{1}{x^8}\right)\left(x - \frac{1}{x}\right)\left(x^{16} + \frac{1}{x^{16}}\right)\left(x + \frac{1}{x}\right)\left(x^4 + \frac{1}{x^4}\right)$$

का सरलीकृत मान क्या है?

Options:

1)

$$\left( X^{64} + \frac{1}{X^{64}} \right)$$

2)

$$\frac{\left( X^{64} - \frac{1}{X^{64}} \right)}{\left( X^2 + \frac{1}{X^2} \right)}$$

3)

$$\frac{\left( X^{64} - \frac{1}{X^{64}} \right)}{\left( X + \frac{1}{X} \right)}$$

4)

$$\frac{\left( X^{32} - \frac{1}{X^{32}} \right)}{\left( X + \frac{1}{X} \right)}$$

Correct Answer:

$$\frac{\left( X^{64} - \frac{1}{X^{64}} \right)}{\left( X^2 + \frac{1}{X^2} \right)}$$

Candidate Answer: [ NOT ANSWERED ]

**QID : 136** - If P is the circum-center in  $\triangle ABC$ ,  $\angle BPC = 30^\circ$ , then what is the value (in degrees) of  $\angle BAC$ ?

यदि  $\triangle ABC$  का परिकेंद्र P है तथा  $\angle BPC = 30^\circ$  है, तो  $\angle BAC$  का मान (डिग्री में) क्या है?

Options:

1) 30

2) 60

3) 75

4) 105

Correct Answer: [ No Correct Answer ]

Candidate Answer: 60

**QID : 137** - In  $\triangle PQR$ ,  $\angle PQR = 90^\circ$ ,  $PQ = 5$  cm and  $QR = 12$ . What is the radius (in cm) of the circum-circle of  $\triangle PQR$ ?

यदि  $\triangle PQR$  में,  $\angle PQR = 90^\circ$ ,  $PQ = 5$  से.मी. तथा  $QR = 12$  से.मी. है।  $\triangle PQR$  के परिवृत्त की त्रिज्या (से.मी. में) क्या है?

Options:

1) 6.5

2) 7.5

3) 13

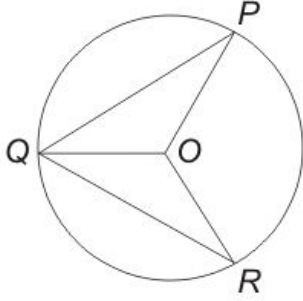
4) 15

Correct Answer: 6.5

Candidate Answer: [ NOT ANSWERED ]

In the given figure,  $O$  is the center of the circle,  $\angle PQO = 30^\circ$  and  $\angle QRO = 45^\circ$ . What is the value (in degrees) of  $\angle POR$ ?

दी गई आकृति में,  $O$  वृत्त का केंद्र है,  $\angle PQO = 30^\circ$  तथा  $\angle QRO = 45^\circ$  है।  $\angle POR$  का मान (डिग्री में) क्या है?



Options:

- 1) 150
- 2) 110
- 3) 160
- 4) 130

Correct Answer: 150

Candidate Answer: [ NOT ANSWERED ]

QID : 139 -



Options:

- 1)  $200(1 + \sqrt{3})$
- 2)  $300(2 + \sqrt{3})$
- 3)  $200(2 + \sqrt{3})$
- 4)  $100(3 + 2\sqrt{3})$

Correct Answer:  $200(2 + \sqrt{3})$

Candidate Answer: [ NOT ANSWERED ]

QID : 140 - If  $\Delta ABC$  is right angled at B,  $AB = 30$  and  $\angle ACB = 60^\circ$ , then what is the value of AC?

यदि  $\Delta ABC$ , B पर समकोण है,  $AB = 30$  तथा  $\angle ACB = 60^\circ$  हो, तो AC का मान क्या होगा?

Options:

- 1) 20
- 2)  $20\sqrt{3}$
- 3) 40
- 4) 60

Correct Answer:  $20\sqrt{3}$

Candidate Answer:  $20\sqrt{3}$

QID : 141 - If  $\sin \theta + \cos \theta = \sqrt{3} \cos(90 - \theta)$ , then what is the value of  $\tan \theta$ ?

यदि  $\sin \theta + \cos \theta = \sqrt{3} \cos(90 - \theta)$  है, तो  $\tan \theta$  का मान क्या है?

**Options:**

1)  $\sqrt{3} - 1$

2)  $\sqrt{3} + 1$

3)  $(\sqrt{3} + 1)/2$

4)  $(\sqrt{3} - 1)/2$

**Correct Answer:**  $(\sqrt{3} + 1)/2$

**Candidate Answer:** [ NOT ANSWERED ]

**QID : 142 -**



**Options:**

1) 8/15

2) 6/13

3) 37/115

4) 23/14

**Correct Answer:** 23/14

**Candidate Answer:** [ NOT ANSWERED ]

**QID : 143 -** What is the simplified value of  $[(1 + \sec 2\theta) \tan^2 \theta] + 1$ ?

$[(1 + \sec 2\theta) \tan^2 \theta] + 1$  का सरलीकृत मान क्या है?

**Options:**

1)  $\cos^2 \theta$

2) 1

3)  $\sec 2\theta$

4)  $\operatorname{cosec} \theta$

**Correct Answer:**  $\sec 2\theta$

**Candidate Answer:** [ NOT ANSWERED ]

**QID : 144 -** What is the simplified value of  $[(1 - \cos^2 \theta) \operatorname{cosec}^4 \theta] - \cot^2 \theta$ ?

$[(1 - \cos^2 \theta) \operatorname{cosec}^4 \theta] - \cot^2 \theta$  का सरलीकृत मान क्या है?

**Options:**

1) -1

2) 0

3) 1

4) 3

**Correct Answer:** 1

**Candidate Answer:** [ NOT ANSWERED ]

**QID : 145 -** If  $\cos(\theta + 31^\circ) = \sin 47^\circ$ , then what is the value of  $\sin 5\theta$ ?

यदि  $\cos(\theta + 31^\circ) = \sin 47^\circ$  है, तो  $\sin 5\theta$  का मान क्या है?

**Options:**

1)  $1/2$

2)  $1/\sqrt{2}$

3)  $\sqrt{3}/2$

4) 0

**Correct Answer:**  $\sqrt{3}/2$

**Candidate Answer:** [ NOT ANSWERED ]

**QID : 146 -**



What was the total expenditure (in Rs crores) of the company Q, R and T together?

कंपनी Q, R तथा T का कुल व्यय (करोड़ रु. में) क्या था?

**Options:**

1) 19.2

2) 28.8

3) 24.3

4) 31.4

**Correct Answer:** 28.8

**Candidate Answer:** 28.8

**QID : 147 -**



By how much percent expenditure of company Q and R together greater than that of company P?

कंपनी Q तथा R का कुल व्यय, कंपनी P के व्यय से कितना प्रतिशत अधिक है?

**Options:**

1) 33.33

2) 60

3) 66.67

4) 75

**Correct Answer:** 66.67

**Candidate Answer:** 66.67

**QID : 148 -**



What is the respective ratio between the total expenditure of company P, Q and S together to the total expenditure?

कंपनी P, Q तथा S का कुल व्यय तथा सभी कंपनियों के कुल व्यय के बीच का क्रमिक अनुपात क्या है?

**Options:**

1) 31 : 60

2) 50 : 31

3) 60 : 31

4) 31 : 50

**Correct Answer:** 31 : 50

**Candidate Answer:** 31 : 50

**QID : 149 -**



Total amount spent by company S is what percent of total amount spent by company T and R?

कंपनी S द्वारा व्यय की गई कुल राशि कंपनी T तथा कंपनी R के द्वारा व्यय की गई कुल राशि का कितना प्रतिशत है?

**Options:**

1) 42.1

2) 43

3) 39.68

4) 41

**Correct Answer:** 42.1

**Candidate Answer:** 42.1

**QID : 150 -**



The profit earned by company R is equal to the  $\frac{1}{4}$ <sup>th</sup> of the expenditure of company Q. What is the profit (in Rs crores) of company R?

कंपनी R का लाभ, कंपनी Q के व्यय का  $\frac{1}{4}$  वां है, तो कंपनी R का लाभ (करोड़ रु. में) क्या है?

**Options:**

1) 3.24

2) 4.84

3) 2.64

4) 5.66

**Correct Answer:** 2.64

**Candidate Answer:** 2.64

**QID : 151** - In the following question, some part of the sentence may have errors. Find out which part of the sentence has an error and select the appropriate option. If a sentence is free from error, select 'No Error'.

**Three summons have been (1)/ issued by the district court (2)/ but he has not turned up yet. (3)/ No Error (4)**

**Options:**

1) 1

2) 2

3) 3

4) 4

**Correct Answer:** 1

**Candidate Answer:** 3

**QID : 152** - In the following question, some part of the sentence may have errors. Find out which part of the sentence has an error and select the appropriate option. If a sentence is free from error, select 'No Error'.

**Her aunt didn't (1)/ give me (2)/ a minute of peace. (3)/ No Error (4)**

**Options:**

1) 1

2) 2

3) 3

4) 4

**Correct Answer:** 3

**Candidate Answer:** [ NOT ANSWERED ]

**QID : 153** - In the following question, some part of the sentence may have errors. Find out which part of the sentence has an error and select the appropriate option. If a sentence is free from error, select 'No Error'.

**Aayushi has come (1)/ here to do a master (2)/ degree in Social Work. (3)/ No Error (4)**

**Options:**

1) 1

2) 2

3) 3

4) 4

**Correct Answer:** 2

**Candidate Answer:** [ NOT ANSWERED ]

**QID : 154** - In the following question, some part of the sentence may have errors. Find out which part of the sentence has an error and select the appropriate option. If a sentence is free from error, select 'No Error'.

**There is no money in (1)/ the bank in Rajesh's and (2)/ Reena's joint account. (3)/ No Error (4)**

**Options:**

1) 1

2) 2

3) 3

4) 4

**Correct Answer:** 4

**Candidate Answer:** [ NOT ANSWERED ]

**QID : 155** - In the following question, some part of the sentence may have errors. Find out which part of the sentence has an error and select the appropriate option. If a sentence is free from error, select 'No Error'.

**This master book concludes with pages (1)/ that contain lists of all (2)/ MBA colleges across India. (3)/ No Error (4)**

**Options:**

1) 1

2) 2

3) 3

4) 4

**Correct Answer:** 2

**Candidate Answer:** [ NOT ANSWERED ]



**QID : 156** - In the following question, the sentence given with blank to be filled in with an appropriate word. Select the correct alternative out of the four and indicate it by selecting the appropriate option.

**The man felt \_\_\_\_\_ when he got to know that he had been cheated.**

**Options:**

- 1) worried
- 2) horrified
- 3) humiliated
- 4) disgraced

**Correct Answer:** humiliated

**Candidate Answer:** humiliated

**QID : 157** - In the following question, the sentence given with blank to be filled in with an appropriate word. Select the correct alternative out of the four and indicate it by selecting the appropriate option.

**The chairman \_\_\_\_\_ the company's funds, so he was dismissed.**

**Options:**

- 1) pirated
- 2) misplaced
- 3) misappropriated
- 4) enticed

**Correct Answer:** misappropriated

**Candidate Answer:** misappropriated

**QID : 158** - In the following question, the sentence given with blank to be filled in with an appropriate word. Select the correct alternative out of the four and indicate it by selecting the appropriate option.

**Rohan yelled \_\_\_\_\_ her and she hastily retreated.**

**Options:**

- 1) towards
- 2) to
- 3) on
- 4) at

**Correct Answer:** at

**Candidate Answer:** at

**QID : 159** - In the following question, the sentence given with blank to be filled in with an appropriate word. Select the correct alternative out of the four and indicate it by selecting the appropriate option.

**He stood \_\_\_\_\_ Ankita, but could not utter a single word for quite some time.**

**Options:**

- 1) to
- 2) for
- 3) before
- 4) towards

**Correct Answer:** before

**Candidate Answer:** before

**QID : 160** - In the following question, the sentence given with blank to be filled in with an appropriate word. Select the correct alternative out of the four and indicate it by selecting the appropriate option.

**We are all accountable \_\_\_\_\_ team leader for our work on this project.**

**Options:**

- 1) of
- 2) with
- 3) for
- 4) to

**Correct Answer:** to

**Candidate Answer:** to

**QID : 161** - In the following question, out of the four alternatives, select the word similar in meaning to the word given.

**Malevolent**

**Options:**

- 1) confused
- 2) spiteful
- 3) frugal
- 4) sedate

**Correct Answer:** spiteful

**Candidate Answer:** [ NOT ANSWERED ]

**QID : 162** - In the following question, out of the four alternatives, select the word similar in meaning to the word given.

**Querulous**

**Options:**

- 1) grouchy
- 2) delusion
- 3) belittle
- 4) indecent

**Correct Answer:** grouchy

**Candidate Answer:** [ NOT ANSWERED ]

**QID : 163** - In the following question, out of the four alternatives, select the word similar in meaning to the word given.

**Meander**

**Options:**

- 1) sanctify
- 2) barren
- 3) wander
- 4) futile

**Correct Answer:** wander

**Candidate Answer:** [ NOT ANSWERED ]

**QID : 164** - In the following question, out of the four alternatives, select the word similar in meaning to the word given.

**Fraternise**

**Options:**

- 1) regulate
- 2) luxuriate
- 3) appreciate
- 4) associate

**Correct Answer:** associate

**Candidate Answer:** associate

**QID : 165** - In the following question, out of the four alternatives, select the word similar in meaning to the word given.

**Enconce**

**Options:**

- 1) unveil
- 2) praise
- 3) reveal
- 4) conceal

**Correct Answer:** conceal

**Candidate Answer:** [ NOT ANSWERED ]

**QID : 166** - In the following question, out of the four alternatives, select the word opposite in meaning to the word given.

**Obstinate**

**Options:**

- 1) brighten
- 2) degrade
- 3) flexible
- 4) repel

**Correct Answer:** flexible

**Candidate Answer:** [ NOT ANSWERED ]

**QID : 167** - In the following question, out of the four alternatives, select the word opposite in meaning to the word given.

**Decry**

**Options:**

- 1) convict
- 2) reject
- 3) synthesis
- 4) praise

**Correct Answer:** praise

**Candidate Answer:** [ NOT ANSWERED ]

**QID : 168** - In the following question, out of the four alternatives, select the word opposite in meaning to the word given.

**Hoarse**

**Options:**

- 1) scanty
- 2) smooth
- 3) disperse
- 4) accept

**Correct Answer:** smooth

**Candidate Answer:** [ NOT ANSWERED ]

**QID : 169** - In the following question, out of the four alternatives, select the word opposite in meaning to the word given.

**Debonair**

**Options:**

- 1) cheerless
- 2) rational
- 3) inadequate
- 4) nigged

**Correct Answer:** cheerless

**Candidate Answer:** [ NOT ANSWERED ]

**QID : 170** - In the following question, out of the four alternatives, select the word opposite in meaning to the word given.

**Suavity**

**Options:**

- 1) pleasant
- 2) politeness
- 3) misbehavior
- 4) stupidity

**Correct Answer:** misbehavior

**Candidate Answer:** [ NOT ANSWERED ]

**QID : 171** - In the following question, out of the four alternatives, select the alternative which best expresses the meaning of the idiom/phrase.

**By fair means or foul**

**Options:**

- 1) By any means
- 2) To make sense
- 3) Undecided controversial
- 4) To get puzzled

**Correct Answer:** By any means

**Candidate Answer:** By any means

**QID : 172** - In the following question, out of the four alternatives, select the alternative which best expresses the meaning of the idiom/phrase.

**Sword of Damocles**

**Options:**

- 1) Life full of quarrels
- 2) Imminent danger
- 3) In a state of suspense and anxiety
- 4) Remain faithful to the cause

**Correct Answer:** Imminent danger

**Candidate Answer:** [ NOT ANSWERED ]

**QID : 173** - In the following question, out of the four alternatives, select the alternative which best expresses the meaning of the idiom/phrase.

**Out of elbows**

**Options:**

- 1) By all means
- 2) Old
- 3) Poor
- 4) Forever

**Correct Answer:** Poor

**Candidate Answer:** By all means

**QID : 174** - In the following question, out of the four alternatives, select the alternative which best expresses the meaning of the idiom/phrase.

**Pandora's box**

**Options:**

- 1) Arguments for and against
- 2) To act dubiously
- 3) Popular
- 4) A prolific source of trouble

**Correct Answer:** A prolific source of trouble

**Candidate Answer:** A prolific source of trouble

**QID : 175** - In the following question, out of the four alternatives, select the alternative which best expresses the meaning of the idiom/phrase.

**A nig-nog**

**Options:**

- 1) Watchful
- 2) Very old
- 3) A fool
- 4) Rich

**Correct Answer:** A fool

**Candidate Answer:** [ NOT ANSWERED ]

**QID : 176** - Improve the bracketed part of the sentence.

Hardly had I finished cooking dinner (**before**) Rajesh arrived.

**Options:**

- 1) when
- 2) then
- 3) while
- 4) no improvement

**Correct Answer:** when

**Candidate Answer:** when

**QID : 177** - Improve the bracketed part of the sentence.

I met the two boys, (**whom I believe are**) twins.

**Options:**

- 1) who I believe to be
- 2) who I believe are
- 3) who to my belief, are
- 4) no improvement

**Correct Answer:** who I believe are

**Candidate Answer:** [ NOT ANSWERED ]

**QID : 178** - Improve the bracketed part of the sentence.

Let's buy a new phone with the annual bonus, (**can we**)?

**Options:**

- 1) shall we
- 2) can't we
- 3) don't we
- 4) no improvement

**Correct Answer:** can't we

**Candidate Answer:** shall we

**QID : 179** - Improve the bracketed part of the sentence.

I have not written any letter to her since my brother (**had died**).

**Options:**

- 1) was died
- 2) died
- 3) has died
- 4) no improvement

**Correct Answer:** has died

**Candidate Answer:** died

**QID : 180** - Improve the bracketed part of the sentence.

Reyansh (**gave**) most of his time to music.

**Options:**

- 1) devoted
- 2) spent
- 3) lent
- 4) no improvement

**Correct Answer:** devoted

**Candidate Answer:** devoted

**QID : 181** - In the following question, out of the four alternatives, select the alternative which is the best substitute of the phrase.

**That which is morally dangerous**

**Options:**

- 1) cadaverous
- 2) defalcation
- 3) sinecure
- 4) pestiferous

**Correct Answer:** pestiferous

**Candidate Answer:** [ NOT ANSWERED ]

**QID : 182** - In the following question, out of the four alternatives, select the alternative which is the best substitute of the phrase.

**A temple dedicated to all the gods**

**Options:**

- 1) pantheon
- 2) kiln
- 3) scullery
- 4) cellar

**Correct Answer:** pantheon

**Candidate Answer:** pantheon

**QID : 183** - In the following question, out of the four alternatives, select the alternative which is the best substitute of the phrase.

**That which cannot be satisfied**

**Options:**

- 1) camouflage
- 2) insatiable
- 3) undecipherable
- 4) tenacious

**Correct Answer:** insatiable

**Candidate Answer:** insatiable

**QID : 184** - In the following question, out of the four alternatives, select the alternative which is the best substitute of the phrase.

**Free from punishment**

**Options:**

- 1) posterity
- 2) stoicism
- 3) impunity
- 4) wrath

**Correct Answer:** impunity

**Candidate Answer:** posterity

**QID : 185** - In the following question, out of the four alternatives, select the alternative which is the best substitute of the phrase.

**Fear of foreigners**

**Options:**

- 1) stenophobia
- 2) clinophobia
- 3) ballistophobia
- 4) xenophobia

**Correct Answer:** xenophobia

**Candidate Answer:** [ NOT ANSWERED ]

**QID : 186** - In the following question, four words are given out of which one word is incorrectly spelt. Select the incorrectly spelt word.

**Options:**

- 1) accessory
- 2) accelerate
- 3) accesion
- 4) accompany

**Correct Answer:** accesion

**Candidate Answer:** accelerate

**QID : 187** - In the following question, four words are given out of which one word is incorrectly spelt. Select the incorrectly spelt word.

**Options:**

- 1) chracteristic
- 2) chancellor
- 3) chauffeur
- 4) chocolate

**Correct Answer:** chracteristic

**Candidate Answer:** chracteristic

**QID : 188** - In the following question, four words are given out of which one word is incorrectly spelt. Select the incorrectly spelt word.

**Options:**

- 1) etiquette
- 2) espoinage
- 3) expedient
- 4) enthusiasn

**Correct Answer:** espoinage

**Candidate Answer:** espoinage

**QID : 189** - In the following question, four words are given out of which one word is incorrectly spelt. Select the incorrectly spelt word.

**Options:**

- 1) haemoglobin
- 2) gyneacologist
- 3) haematite
- 4) inquietude

**Correct Answer:** gyneacologist

**Candidate Answer:** [ NOT ANSWERED ]

**QID : 190** - In the following question, four words are given out of which one word is incorrectly spelt. Select the incorrectly spelt word.

**Options:**

- 1) deliquescence
- 2) pertinacious
- 3) pisciculture
- 4) renaissance

**Correct Answer:** pisciculture

**Candidate Answer:** renaissance

**QID : 191** - In the following passage some of the words have been left out. Read the passage carefully and select the correct answer for the given blank out of the four alternatives.

Man and his \_\_\_\_\_ are two distinct things, whereas a good deed should call forth approbation and a \_\_\_\_\_ deed, disapprobation, the doer of the deed whether good or \_\_\_\_\_ always deserves \_\_\_\_\_ or pity as the case may be. Hate the sin and not the sinner is a precept which, though easy enough to understand, is rarely \_\_\_\_\_ and that is why the poison of hatred spreads in the world.

Man and his \_\_\_\_\_ are two distinct things,

**Options:**

- 1) working
- 2) deeds
- 3) knowledge
- 4) altitude

**Correct Answer:** deeds

**Candidate Answer:** deeds

**QID : 192** - In the following passage some of the words have been left out. Read the passage carefully and select the correct answer for the given blank out of the four alternatives.

Man and his \_\_\_\_\_ are two distinct things, whereas a good deed should call forth approbation and a \_\_\_\_\_ deed, disapprobation, the doer of the deed whether good or \_\_\_\_\_ always deserves \_\_\_\_\_ or pity as the case may be. Hate the sin and not the sinner is a precept which, though easy enough to understand, is rarely \_\_\_\_\_ and that is why the poison of hatred spreads in the world.

whereas a good deed should call forth approbation and a \_\_\_\_\_ deed, disapprobation,

**Options:**

- 1) wicked
- 2) useless
- 3) violent
- 4) sharp

**Correct Answer:** wicked

**Candidate Answer:** wicked

**QID : 193** - In the following passage some of the words have been left out. Read the passage carefully and select the correct answer for the given blank out of the four alternatives.

Man and his \_\_\_\_\_ are two distinct things, whereas a good deed should call forth approbation and a \_\_\_\_\_ deed, disapprobation, the doer of the deed whether good or \_\_\_\_\_ always deserves \_\_\_\_\_ or pity as the case may be. Hate the sin and not the sinner is a precept which, though easy enough to understand, is rarely \_\_\_\_\_ and that is why the poison of hatred spreads in the world.

the doer of the deed whether good or \_\_\_\_\_

**Options:**

- 1) reliable
- 2) resistible
- 3) bad
- 4) evil

**Correct Answer:** bad

**Candidate Answer:** bad

**QID : 194 - In the following passage some of the words have been left out. Read the passage carefully and select the correct answer for the given blank out of the four alternatives.**

Man and his \_\_\_\_\_ are two distinct things, whereas a good deed should call forth approbation and a \_\_\_\_\_ deed, disapprobation, the doer of the deed whether good or \_\_\_\_\_ always deserves \_\_\_\_\_ or pity as the case may be. Hate the sin and not the sinner is a precept which, though easy enough to understand, is rarely \_\_\_\_\_ and that is why the poison of hatred spreads in the world.

always deserves \_\_\_\_\_ or pity as the case may be.

**Options:**

- 1) punishment
- 2) accolade
- 3) applaud
- 4) respect

**Correct Answer:** respect

**Candidate Answer:** applaud

**QID : 195 - In the following passage some of the words have been left out. Read the passage carefully and select the correct answer for the given blank out of the four alternatives.**

Man and his \_\_\_\_\_ are two distinct things, whereas a good deed should call forth approbation and a \_\_\_\_\_ deed, disapprobation, the doer of the deed whether good or \_\_\_\_\_ always deserves \_\_\_\_\_ or pity as the case may be. Hate the sin and not the sinner is a precept which, though easy enough to understand, is rarely \_\_\_\_\_ and that is why the poison of hatred spreads in the world.

is rarely \_\_\_\_\_ and that is why the poison of hatred spreads in the world.

**Options:**

- 1) followed
- 2) practised
- 3) justified
- 4) acknowledged

**Correct Answer:** practised

**Candidate Answer:** followed

**QID : 196 - A passage is given with five questions following it. Read the passage carefully and select the best answer to each question out of the given four alternatives.**

Superstitions are a universal phenomena having their own peculiar place in the cultural ethos and milieu of a people. They epitomize man's fear of the unknown, fear of evil, blind faith in omens and portents. Superstitions are inter-woven with myth, legend, unnatural phenomena and disaster, customs and traditions, and are mainly the outcome of ignorance. They are unreasoned and irrational beliefs that gradually become matters of faith. When certain things and happenings are rationally inexplicable people tend to assign mysterious and supernatural reasons for their operation. Thus a natural disaster is explained in terms of God's wrath and the failure of one's project is assigned to the black cat which crossed the path just as one set out on the errand.

The primitive human beings were mainly governed by superstitions. Superstitions were widespread before the dawn of civilization when science had not advanced.

Thus, ignorance of the primitive people and the resultant growth of superstitions were the direct outcome of the lack of scientific advancement. Unenlightened people always tend to be superstitious. The belief in the sanctity of time and old traditions of the ancestors bind the people into knots of superstitious thought.

Besides, the unscrupulous priests and religious officials exercise a dominating, unhealthy effect upon the people believing in religious orthodoxy. They encourage superstitions for their own ulterior motives.

Superstitions are not only universally prevalent but even have strikingly common features whether believed in India or in as far off a place as Canada. There are some common superstitions which are shared by people all over the world. Beliefs in spirits, ghosts and witches and reincarnation are quite common among all the peoples of the world. Belief in witches still prevails in India, France, Scotland, England and many other countries. In countries of the East, especially in India, belief in ghosts and spirits still exists. The cries of certain birds like owls and ravens and the howl of cats are regarded with superstition as portents of evil throughout the world. Then there is a very common belief that the sighting of comets portends the death of kings or great men or some unforeseen catastrophe. Shakespeare refers to such a superstition in his Julius Ceaser, Halley's Comet in the twentieth century evoked a similar response in many a mind.

What is the main reason behind once superstitions?

**Options:**

- 1) ignorance
- 2) customs and traditions
- 3) fear of the unknown
- 4) blind faith in omens and portents

**Correct Answer:** ignorance

**Candidate Answer:** [ NOT ANSWERED ]

**QID : 197 - A passage is given with five questions following it. Read the passage carefully and select the best answer to the given four alternatives.**

Superstitions are a universal phenomena having their own peculiar place in the cultural ethos and milieu of a people. They epitomize man's fear of the unknown, fear of evil, blind faith in omens and portents. Superstitions are inter-woven with myth, legend, unnatural phenomena and disaster, customs and traditions, and are mainly the outcome of ignorance. They are unreasoned and irrational beliefs that gradually become matters of faith. When certain things and happenings are rationally inexplicable people tend to assign mysterious and supernatural reasons for their operation. Thus a natural disaster is explained in terms of God's wrath and the failure of one's project is assigned to the black cat which crossed the path just as one set out on the errand.

The primitive human beings were mainly governed by superstitions. Superstitions were widespread before the dawn of civilization when science had not advanced. Thus, ignorance of the primitive people and the resultant growth of superstitions were the direct outcome of the lack of scientific advancement. Unenlightened people always tend to be superstitious. The belief in the sanctity of time and old traditions of the ancestors bind the people into knots of superstitious thought. Besides, the unscrupulous priests and religious officials exercise a dominating, unhealthy effect upon the people believing in religious orthodoxy. They encourage superstitions for their own ulterior motives.

Superstitions are not only universally prevalent but even have strikingly common features whether believed in India or in as far off a place as Canada. There are some common superstitions which are shared by people all over the world. Beliefs in spirits, ghosts and witches and reincarnation are quite common among all the peoples of the world. Belief in witches still prevails in India, France, Scotland, England and many other countries. In countries of the East, especially in India, belief in ghosts and spirits still exists. The cries of certain birds like owls and ravens and the howl of cats are regarded with superstition as portents of evil throughout the world. Then there is a very common belief that the sighting of comets portends the death of kings or great men or some unforeseen catastrophe. Shakespeare refers to such a superstition in his Julius Ceaser, Halley's Comet in the twentieth century evoked a similar response in many a mind.

Who were mainly governed by superstitions?

**Options:**

- 1) unenlightened people
- 2) religious officials
- 3) primitive human beings
- 4) unscrupulous priests

**Correct Answer:** primitive human beings

**Candidate Answer:** [ NOT ANSWERED ]

**QID : 198 - A passage is given with five questions following it. Read the passage carefully and select the best answer to each question out of the given four alternatives.**

Superstitions are a universal phenomena having their own peculiar place in the cultural ethos and milieu of a people. They epitomize man's fear of the unknown, fear of evil, blind faith in omens and portents. Superstitions are inter-woven with myth, legend, unnatural phenomena and disaster, customs and traditions, and are mainly the outcome of ignorance. They are unreasoned and irrational beliefs that gradually become matters of faith. When certain things and happenings are rationally inexplicable people tend to assign mysterious and supernatural reasons for their operation. Thus a natural disaster is explained in terms of God's wrath and the failure of one's project is assigned to the black cat which crossed the path just as one set out on the errand.

The primitive human beings were mainly governed by superstitions. Superstitions were widespread before the dawn of civilization when science had not advanced. Thus, ignorance of the primitive people and the resultant growth of superstitions were the direct outcome of the lack of scientific advancement. Unenlightened people always tend to be superstitious. The belief in the sanctity of time and old traditions of the ancestors bind the people into knots of superstitious thought. Besides, the unscrupulous priests and religious officials exercise a dominating, unhealthy effect upon the people believing in religious orthodoxy. They encourage superstitions for their own ulterior motives.

Superstitions are not only universally prevalent but even have strikingly common features whether believed in India or in as far off a place as Canada. There are some common superstitions which are shared by people all over the world. Beliefs in spirits, ghosts and witches and reincarnation are quite common among all the peoples of the world. Belief in witches still prevails in India, France, Scotland, England and many other countries. In countries of the East, especially in India, belief in ghosts and spirits still exists. The cries of certain birds like owls and ravens and the howl of cats are regarded with superstition as portents of evil throughout the world. Then there is a very common belief that the sighting of comets portends the death of kings or great men or some unforeseen catastrophe. Shakespeare refers to such a superstition in his Julius Ceaser, Halley's Comet in the twentieth century evoked a similar response in many a mind.

Which of the following is INCORRECT with respect to passage?

**Options:**

- 1) superstitions is also prevailing in Canada
- 2) superstitions are a universal phenomena
- 3) superstitions are unreasoned and rational beliefs
- 4) a natural disaster is regarded as a god's wrath by the superstitious people

**Correct Answer:** superstitions are unreasoned and rational beliefs

**Candidate Answer:** [ NOT ANSWERED ]



**QID : 199 - A passage is given with five questions following it. Read the passage carefully and select the best answer to each question out of the given four alternatives.**

Superstitions are a universal phenomena having their own peculiar place in the cultural ethos and milieu of a people. They epitomize man's fear of the unknown, fear of evil, blind faith in omens and portents. Superstitions are inter-woven with myth, legend, unnatural phenomena and disaster, customs and traditions, and are mainly the outcome of ignorance. They are unreasoned and irrational beliefs that gradually become matters of faith. When certain things and happenings are rationally inexplicable people tend to assign mysterious and supernatural reasons for their operation. Thus a natural disaster is explained in terms of God's wrath and the failure of one's project is assigned to the black cat which crossed the path just as one set out on the errand.

The primitive human beings were mainly governed by superstitions. Superstitions were widespread before the dawn of civilization when science had not advanced. Thus, ignorance of the primitive people and the resultant growth of superstitions were the direct outcome of the lack of scientific advancement. Unenlightened people always tend to be superstitious. The belief in the sanctity of time and old traditions of the ancestors bind the people into knots of superstitious thought. Besides, the unscrupulous priests and religious officials exercise a dominating, unhealthy effect upon the people believing in religious orthodoxy. They encourage superstitions for their own ulterior motives.

Superstitions are not only universally prevalent but even have strikingly common features whether believed in India or in as far off a place as Canada. There are some common superstitions which are shared by people all over the world. Beliefs in spirits, ghosts and witches and reincarnation are quite common among all the peoples of the world. Belief in witches still prevails in India, France, Scotland, England and many other countries. In countries of the East, especially in India, belief in ghosts and spirits still exists. The cries of certain birds like owls and ravens and the howl of cats are regarded with superstition as portents of evil throughout the world. Then there is a very common belief that the sighting of comets portends the death of kings or great men or some unforeseen catastrophe. Shakespeare refers to such a superstition in his Julius Ceaser, Halley's Comet in the twentieth century evoked a similar response in many a mind.

According to passage which of the following is not regarded as a superstition by the people?

**Options:**

- 1) howl of cats
- 2) cries of children
- 3) crossing of path by black cat
- 4) sighting of comets

**Correct Answer:** cries of children

**Candidate Answer:** [ NOT ANSWERED ]

**QID : 200 - A passage is given with five questions following it. Read the passage carefully and select the best answer to each question out of the given four alternatives.**

Superstitions are a universal phenomena having their own peculiar place in the cultural ethos and milieu of a people. They epitomize man's fear of the unknown, fear of evil, blind faith in omens and portents. Superstitions are inter-woven with myth, legend, unnatural phenomena and disaster, customs and traditions, and are mainly the outcome of ignorance. They are unreasoned and irrational beliefs that gradually become matters of faith. When certain things and happenings are rationally inexplicable people tend to assign mysterious and supernatural reasons for their operation. Thus a natural disaster is explained in terms of God's wrath and the failure of one's project is assigned to the black cat which crossed the path just as one set out on the errand.

The primitive human beings were mainly governed by superstitions. Superstitions were widespread before the dawn of civilization when science had not advanced. Thus, ignorance of the primitive people and the resultant growth of superstitions were the direct outcome of the lack of scientific advancement. Unenlightened people always tend to be superstitious. The belief in the sanctity of time and old traditions of the ancestors bind the people into knots of superstitious thought. Besides, the unscrupulous priests and religious officials exercise a dominating, unhealthy effect upon the people believing in religious orthodoxy. They encourage superstitions for their own ulterior motives.

Superstitions are not only universally prevalent but even have strikingly common features whether believed in India or in as far off a place as Canada. There are some common superstitions which are shared by people all over the world. Beliefs in spirits, ghosts and witches and reincarnation are quite common among all the peoples of the world. Belief in witches still prevails in India, France, Scotland, England and many other countries. In countries of the East, especially in India, belief in ghosts and spirits still exists. The cries of certain birds like owls and ravens and the howl of cats are regarded with superstition as portents of evil throughout the world. Then there is a very common belief that the sighting of comets portends the death of kings or great men or some unforeseen catastrophe. Shakespeare refers to such a superstition in his Julius Ceaser, Halley's Comet in the twentieth century evoked a similar response in many a mind.

What can only be the effective counter of superstition?

**Options:**

- 1) belief in the sanctity of time
- 2) awareness through plays like Julius Ceaser by Shakespeare
- 3) explaining the theory of reincarnation
- 4) a broad light of scientific discovery

**Correct Answer:** a broad light of scientific discovery

**Candidate Answer:** [ NOT ANSWERED ]